



Measure the width of each block in inches and in centimeters.

Ex)



**Answers**

Ex. 2 1/2 6 - 7

1)



1. \_\_\_\_\_

2)



2. \_\_\_\_\_

3. \_\_\_\_\_

3)



4. \_\_\_\_\_

5. \_\_\_\_\_

4)



6. \_\_\_\_\_

7. \_\_\_\_\_

5)




8. \_\_\_\_\_

9. \_\_\_\_\_

6)



7)



8)



9)





Measure the width of each block in inches and in centimeters.

Ex)



Answers


Ex. 2 1/2 6 - 7

1)



1. 4 1/2 11 - 12

2)



2. 3 7 - 8

3)



3. 5 12 - 13

4)



4. 2 5 - 6

5)




5. 3 1/2 8 - 9

6)



6. 5 1/2 13 - 14

7)



7. 0 1/2 1 - 2

8)



8. 1 2 - 3

9)



9. 4 10 - 11