






Measure the width and height of each block in inches and in centimeters.



Answers
Ex. 5 0 1/2 12.7 1.3
1. _____
2. _____
3. _____
4. _____





Measure the width and height of each block in inches and in centimeters.

Ex) 

Answers


Ex. 5 0 1/2 12.7 1.3

1. 5 1/2 1 1/2 **14** **3.8**


2. 4 1/2 0 1/2 11.4 **1.3**

3. 3 1/2 **1** **8.9** 2.5

4. **3** 1 7.6 2.5

1) 

2) 

3) 

4) 