




Measure the width and height of each block in inches and in centimeters.

Ex)



1)




2)



3)



4)



Answers

Ex. 4 1/2 1 11.4 2.5

1. _____

2. _____

3. _____

4. _____



Measure the width and height of each block in inches and in centimeters.

Ex)



Answers

Ex. $4\frac{1}{2}$ **1** 11.4 2.5


1. $5\frac{1}{2}$ $1\frac{1}{2}$ **14** **3.8**

2. **1** $0\frac{1}{2}$ **2.5** **1.3**

3. $1\frac{1}{2}$ $0\frac{1}{2}$ **3.8** **1.3**

4. **4** $1\frac{1}{2}$ **10.2** **3.8**

1)



2)



3)



4)

