

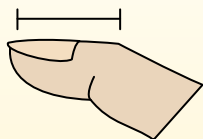


Determine which letter best represents the length / height.

**Answers**

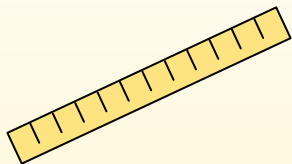
**Inch (in)**

An inch is about the distance of the last joint of your finger.



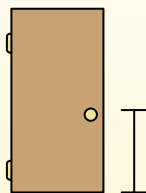
**Foot (ft)**

A foot is 12 inches. The length of a ruler.



**Yard (yd)**

1 yard is the same as 3 feet. From the floor to a door knob is about 1 yard.



**Mile (mi)**

A mile is 5,280 feet. Most major roads are at least a mile long.



1. \_\_\_\_\_
2. \_\_\_\_\_
3. \_\_\_\_\_
4. \_\_\_\_\_
5. \_\_\_\_\_
6. \_\_\_\_\_
7. \_\_\_\_\_
8. \_\_\_\_\_
9. \_\_\_\_\_

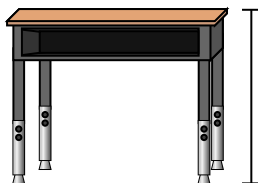
1)



Pen

- A. 5 inches
- B. 12 inches
- C. 1 foot
- D. 5 yards

2)



Desk

- A. 6 inches
- B. 2 yards
- C. 2 feet
- D. 11 inches

3)



Frog

- A. 9 inches
- B. 3 inches
- C. 1 foot
- D. 2 feet

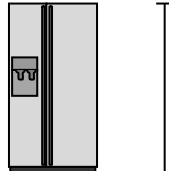
4)



Bicycle

- A. 3 inches
- B. 1 yard
- C. 3 yards
- D. 10 inches

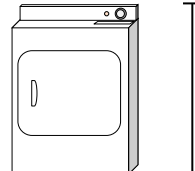
5)



Refrigerator

- A. 6 feet
- B. 1 foot
- C. 12 inches
- D. 4 yards

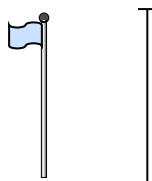
6)



Clothes Dryer

- A. 2 feet
- B. 1 yard
- C. 11 inches
- D. 6 inches


7)



Flag Pole

- A. 5 feet
- B. 10 yards
- C. 1 mile
- D. 12 inches

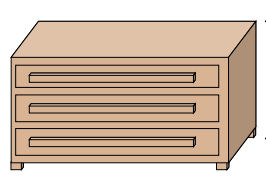
8)



Tennis Ball

- A. 1 foot
- B. 7 inches
- C. 3 inches
- D. 2 feet

9)



Dresser

- A. 18 inches
- B. 3 feet
- C. 3 yards
- D. 12 inches



Determine which letter best represents the length / height.

**Answers**

**Inch (in)**

**Foot (ft)**

**Yard (yd)**

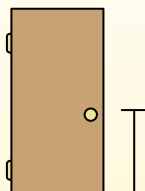
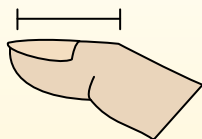
**Mile (mi)**

An inch is about the distance of the last joint of your finger.

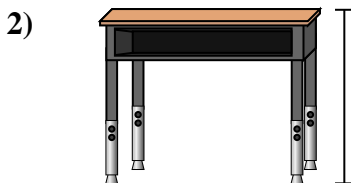
A foot is 12 inches. The length of a ruler.

1 yard is the same as 3 feet. From the floor to a door knob is about 1 yard.


A mile is 5,280 feet. Most major roads are at least a mile long.



- Pen
- A. 5 inches
  - B. 12 inches
  - C. 1 foot
  - D. 5 yards



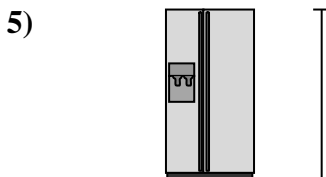
- Desk
- A. 6 inches
  - B. 2 yards
  - C. 2 feet
  - D. 11 inches



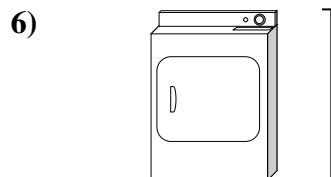
- Frog
- A. 9 inches
  - B. 3 inches
  - C. 1 foot
  - D. 2 feet



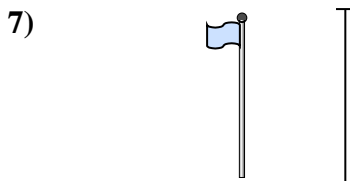
- Bicycle
- A. 3 inches
  - B. 1 yard
  - C. 3 yards
  - D. 10 inches




- Refrigerator
- A. 6 feet
  - B. 1 foot
  - C. 12 inches
  - D. 4 yards



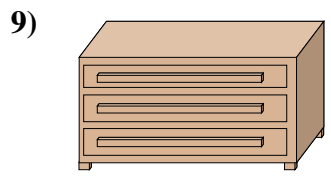
- Clothes Dryer
- A. 2 feet
  - B. 1 yard
  - C. 11 inches
  - D. 6 inches



- Flag Pole
- A. 5 feet
  - B. 10 yards
  - C. 1 mile
  - D. 12 inches



- Tennis Ball
- A. 1 foot
  - B. 7 inches
  - C. 3 inches
  - D. 2 feet



- Dresser
- A. 18 inches
  - B. 3 feet
  - C. 3 yards
  - D. 12 inches

- 1.   **A**
- 2.   **C**
- 3.   **B**
- 4.   **B**
- 5.   **A**
- 6.   **B**
- 7.   **B**
- 8.   **C**
- 9.   **B**