



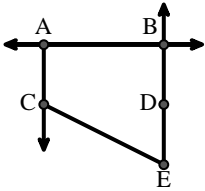
Match the description on the top with the visual image on the bottom.

Answers

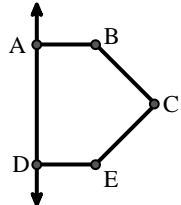
- 1) \overleftrightarrow{AD} intersecting \overleftrightarrow{BC} at point E
- 2) \overleftrightarrow{AC} parallel to \overleftrightarrow{EB}
- 3) D as the midpoint of \overleftrightarrow{CE}
- 4) \overleftrightarrow{AC} intersected by \overleftrightarrow{BD}
- 5) \overleftrightarrow{BE} intersecting \overleftrightarrow{CD}
- 6) \overleftrightarrow{BC} intersecting $\angle ACD$
- 7) $\angle BAC$ creating an obtuse angle
- 8) Acute $\angle ABC$ intersecting \overleftrightarrow{AD}
- 9) \overleftrightarrow{AB} intersecting \overleftrightarrow{AD}
- 10) \overleftrightarrow{BA} intersecting \overleftrightarrow{AD}
- 11) \overleftrightarrow{AB} parallel to \overleftrightarrow{CD}
- 12) Right $\angle ADE$

1. _____
2. _____
3. _____
4. _____
5. _____
6. _____
7. _____
8. _____
9. _____
10. _____
11. _____
12. _____

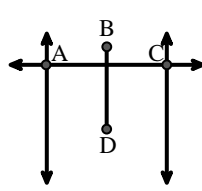
A.



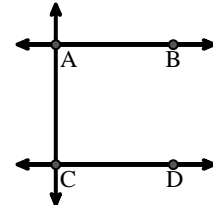
B.



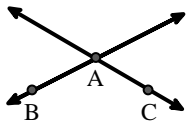
C.



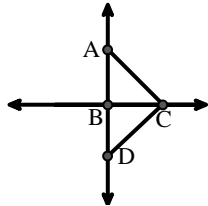
D.



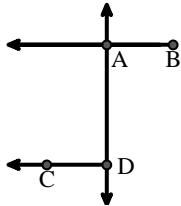
E.



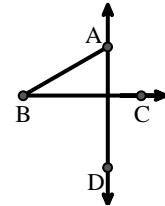
F.



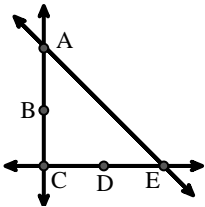
G.



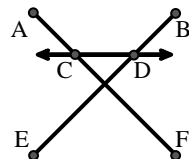
H.



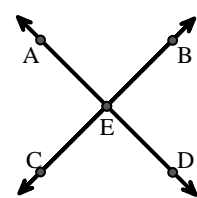
I.



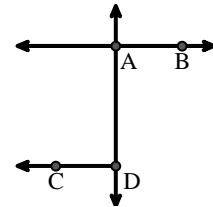
J.



K.



L.





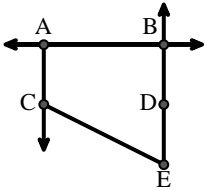
Match the description on the top with the visual image on the bottom.

Answers

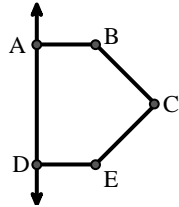
- 1) \overleftrightarrow{AD} intersecting \overleftrightarrow{BC} at point E
- 2) \overleftrightarrow{AC} parallel to \overleftrightarrow{EB}
- 3) D as the midpoint of \overleftrightarrow{CE}
- 4) \overleftrightarrow{AC} intersected by \overleftrightarrow{BD}
- 5) \overleftrightarrow{BE} intersecting \overleftrightarrow{CD}
- 6) \overleftrightarrow{BC} intersecting $\angle ACD$
- 7) $\angle BAC$ creating an obtuse angle
- 8) Acute $\angle ABC$ intersecting \overleftrightarrow{AD}
- 9) \overleftrightarrow{AB} intersecting \overleftrightarrow{AD}
- 10) \overleftrightarrow{BA} intersecting \overleftrightarrow{AD}
- 11) \overleftrightarrow{AB} parallel to \overleftrightarrow{CD}
- 12) Right $\angle ADE$

1. **K**
2. **A**
3. **I**
4. **C**
5. **J**
6. **F**
7. **E**
8. **H**
9. **L**
10. **G**
11. **D**
12. **B**

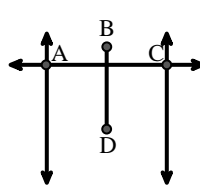
A.



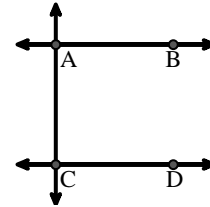
B.



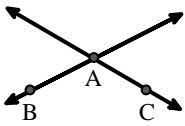
C.



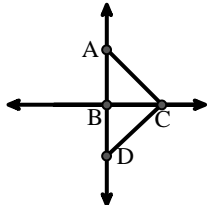
D.



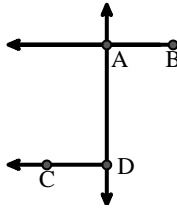
E.



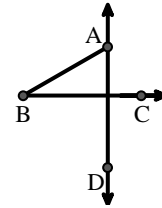
F.



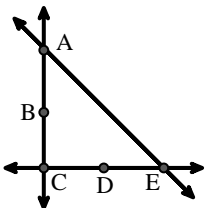
G.



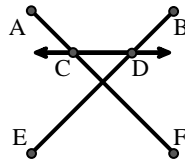
H.



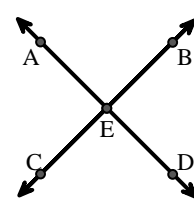
I.



J.



K.



L.

