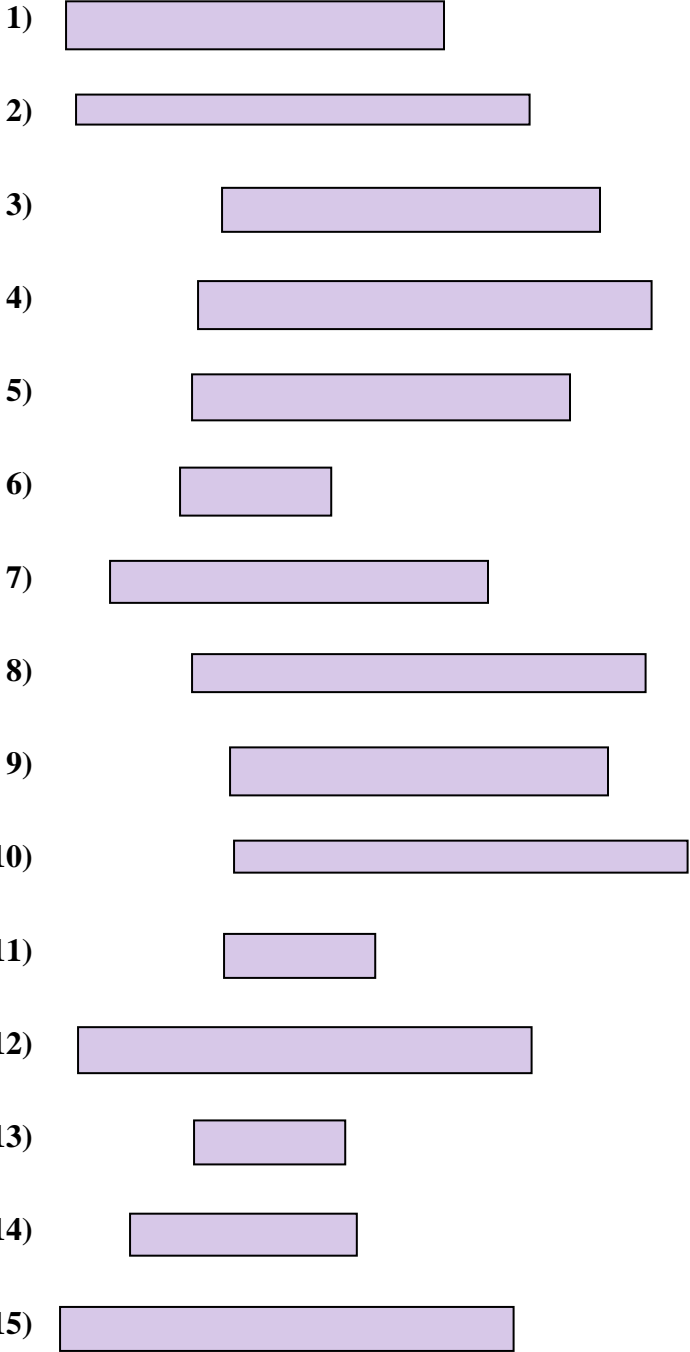




Measure each of the bars (in centimeters) and then generate a line plot based on the information.

Answers


















- 1. _____
- 2. _____
- 3. _____
- 4. _____
- 5. _____
- 6. _____
- 7. _____
- 8. _____
- 9. _____
- 10. _____
- 11. _____
- 12. _____
- 13. _____
- 14. _____
- 15. _____

Line Plot



Measure each of the bars (in centimeters) and then generate a line plot based on the information.

- 1)  5
- 2)  6
- 3)  5
- 4)  6
- 5)  5
- 6)  2
- 7)  5
- 8)  6
- 9)  5
- 10)  6
- 11)  2
- 12)  6
- 13)  2
- 14)  3
- 15)  6

- Answers
- 1. 5
 - 2. 6
 - 3. 5
 - 4. 6
 - 5. 5
 - 6. 2
 - 7. 5
 - 8. 6
 - 9. 5
 - 10. 6
 - 11. 2
 - 12. 6
 - 13. 2
 - 14. 3
 - 15. 6

Line Plot

