





Create and label the line plot using the set of numbers provided.

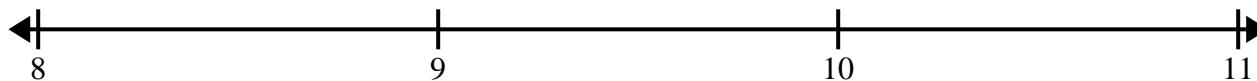
- 1)  $4\frac{1}{2}$     $3\frac{1}{2}$    3    $3\frac{1}{2}$     $3\frac{1}{2}$    5   3   5  
 3    $4\frac{1}{2}$     $4\frac{1}{2}$    4   5   4   4    $5\frac{1}{2}$




- 2)  $6\frac{2}{4}$    8    $8\frac{2}{4}$     $7\frac{2}{4}$     $7\frac{3}{4}$     $6\frac{1}{4}$     $7\frac{3}{4}$     $7\frac{3}{4}$   
 $6\frac{3}{4}$     $6\frac{2}{4}$     $7\frac{1}{4}$     $6\frac{3}{4}$     $8\frac{3}{4}$    6    $8\frac{3}{4}$     $6\frac{3}{4}$




- 3)  $8\frac{2}{4}$     $8\frac{3}{4}$    8    $10\frac{3}{4}$     $8\frac{1}{4}$     $10\frac{2}{4}$     $8\frac{2}{4}$    8  
 9    $8\frac{3}{4}$     $8\frac{3}{4}$     $10\frac{3}{4}$     $10\frac{2}{4}$     $8\frac{2}{4}$    10    $9\frac{3}{4}$



- 4)  $4\frac{6}{8}$     $4\frac{6}{8}$     $5\frac{3}{8}$     $6\frac{6}{8}$     $4\frac{3}{8}$     $6\frac{4}{8}$     $5\frac{5}{8}$     $6\frac{4}{8}$   
 $6\frac{4}{8}$     $6\frac{6}{8}$     $4\frac{5}{8}$     $6\frac{7}{8}$     $4\frac{4}{8}$    6    $4\frac{7}{8}$     $4\frac{4}{8}$



- 5) 9    $10\frac{1}{2}$     $8\frac{1}{2}$     $10\frac{1}{2}$     $9\frac{1}{2}$     $8\frac{1}{2}$    8    $10\frac{1}{2}$   
 $8\frac{1}{2}$    8    $9\frac{1}{2}$     $9\frac{1}{2}$    8   9   9   10





Create and label the line plot using the set of numbers provided.

