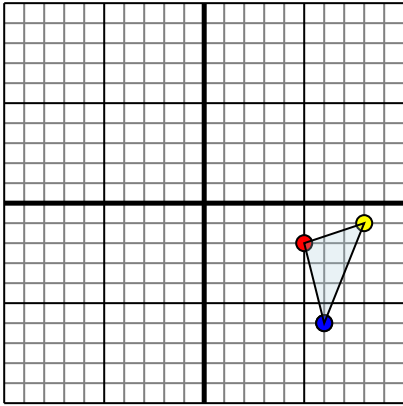




Reflect each shape as described.

1)

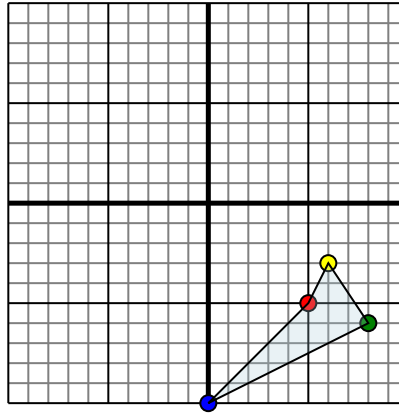


The shape above has the following coordinates:

- A. (5,-2)
- B. (8,-1)
- C. (6,-6)

Reflect the shape over the X axis.

2)

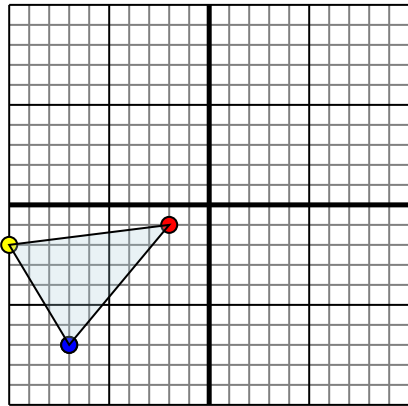


The shape above has the following coordinates:

- A. (5,-5)
- B. (6,-3)
- C. (8,-6)
- D. (0,-10)

Reflect the shape over the Y axis.

3)

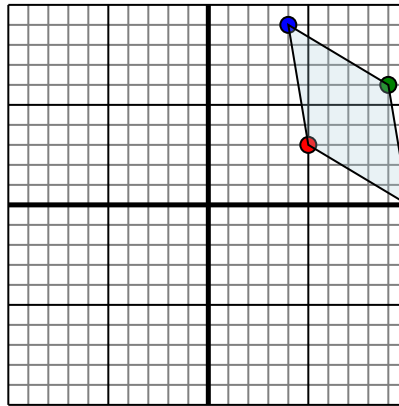


The shape above has the following coordinates:

- A. (-2,-1)
- B. (-10,-2)
- C. (-7,-7)

Reflect the shape over the X axis.

4)



The shape above has the following coordinates:

- A. (5,3)
- B. (10,0)
- C. (9,6)
- D. (4,9)

Reflect the shape over the X axis.

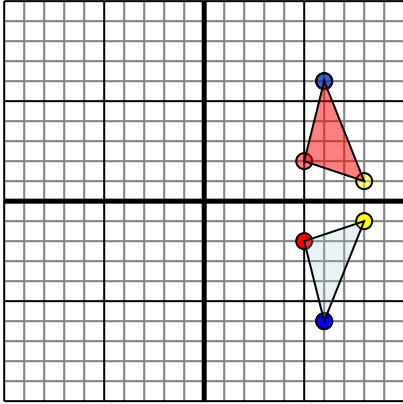
Answers

- 1. \_\_\_\_\_
- 2. \_\_\_\_\_
- 3. \_\_\_\_\_
- 4. \_\_\_\_\_



Reflect each shape as described.

1)

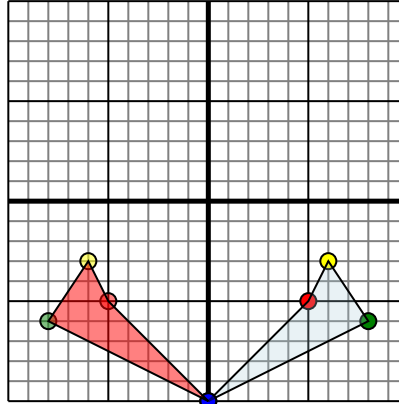


The shape above has the following coordinates:

- A. (5,-2)
- B. (8,-1)
- C. (6,-6)

Reflect the shape over the X axis.

2)

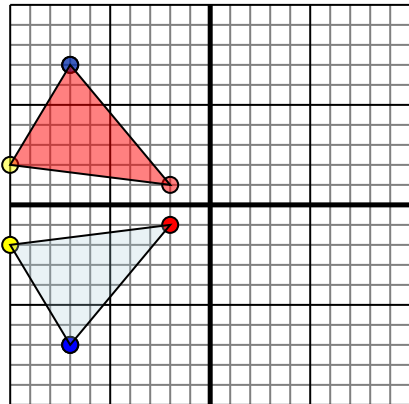


The shape above has the following coordinates:

- A. (5,-5)
- B. (6,-3)
- C. (8,-6)
- D. (0,-10)

Reflect the shape over the Y axis.

3)

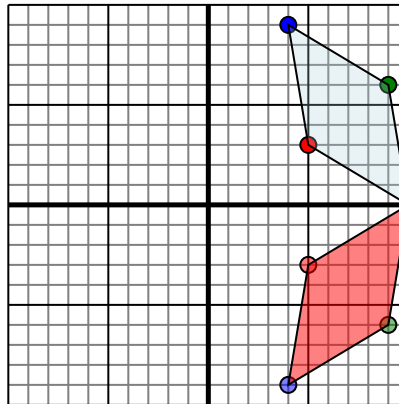


The shape above has the following coordinates:

- A. (-2,-1)
- B. (-10,-2)
- C. (-7,-7)

Reflect the shape over the X axis.

4)



The shape above has the following coordinates:

- A. (5,3)
- B. (10,0)
- C. (9,6)
- D. (4,9)

Reflect the shape over the X axis.

**Answers**

1. **5,2 8,1 6,6** Graph
2. **-5,-5 -6,-3 -8,-6 0,-10** Graph
3. **-2,1 -10,2 -7,7** Graph
4. **5,-3 10,0 9,-6 4,-9** Graph