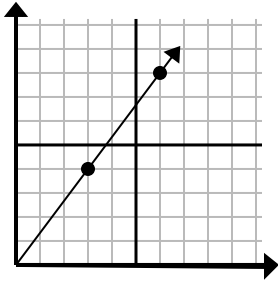




Determine which choice represents a point on the line if it were to continue.

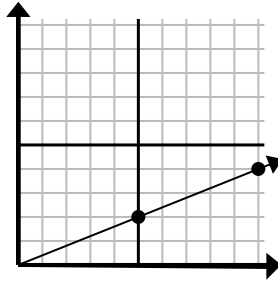
Answers

1)



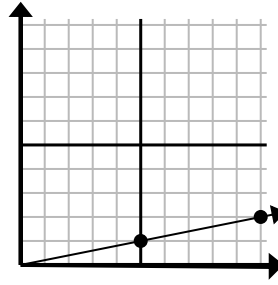
- A. (18 , 24)
- B. (15 , 20)
- C. (9 , 12)
- D. (9 , 5)

2)



- A. (11 , 7)
- B. (25 , 10)
- C. (30 , 12)
- D. (15 , 6)

3)



- A. (15 , 3)
- B. (20 , 4)
- C. (30 , 6)
- D. (12 , 6)

1. _____

2. _____

3. _____

4. _____

5. _____

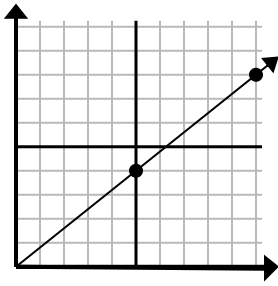
6. _____

7. _____

8. _____

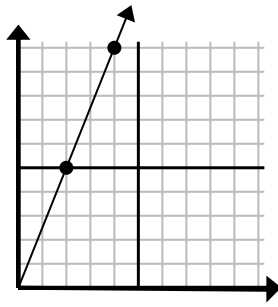
9. _____

4)



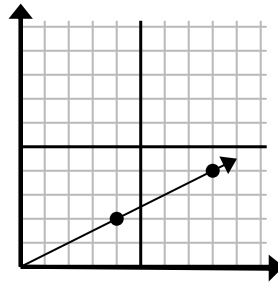
- A. (13 , 5)
- B. (15 , 12)
- C. (30 , 24)
- D. (11 , 6)

5)



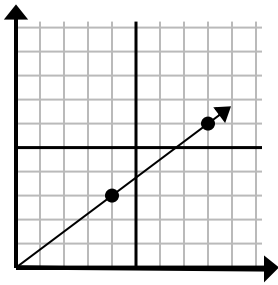
- A. (8 , 20)
- B. (7 , 6)
- C. (6 , 15)
- D. (10 , 25)

6)



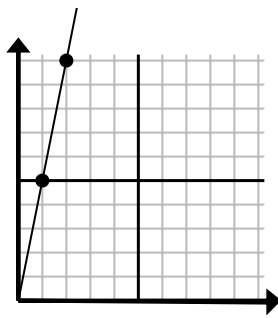
- A. (24 , 12)
- B. (28 , 14)
- C. (12 , 6)
- D. (10 , 4)

7)



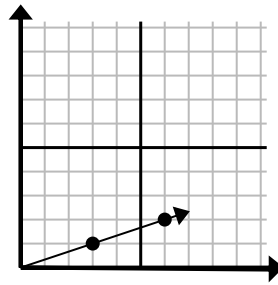
- A. (12 , 9)
- B. (24 , 18)
- C. (12 , 4)
- D. (16 , 12)

8)



- A. (6 , 8)
- B. (3 , 15)
- C. (7 , 7)
- D. (6 , 30)

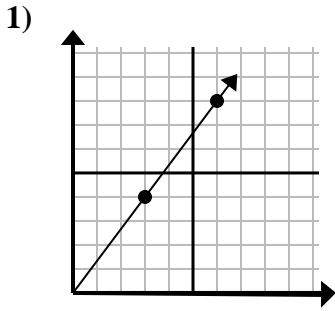
9)



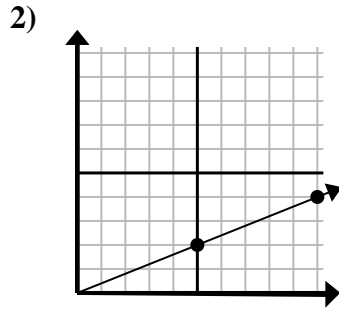
- A. (9 , 3)
- B. (8 , 6)
- C. (7 , 2)
- D. (18 , 6)



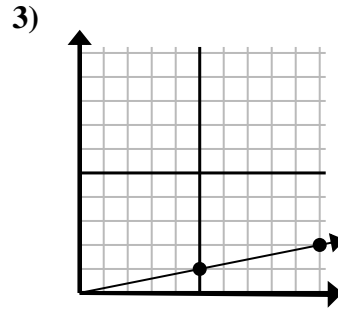
Determine which choice represents a point on the line if it were to continue.



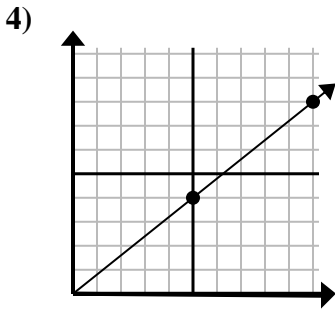
- A. (18 , 24)
- B. (15 , 20)
- C. (9 , 12)
- D. (9 , 5)



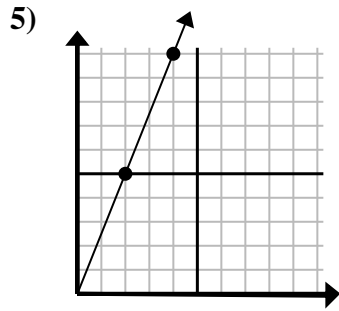
- A. (11 , 7)
- B. (25 , 10)
- C. (30 , 12)
- D. (15 , 6)



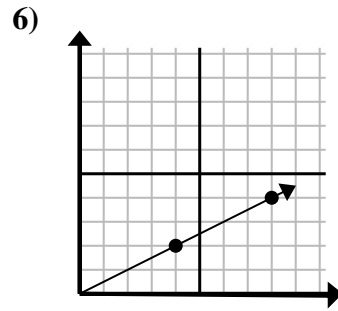
- A. (15 , 3)
- B. (20 , 4)
- C. (30 , 6)
- D. (12 , 6)



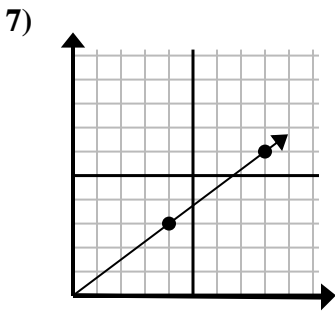
- A. (13 , 5)
- B. (15 , 12)
- C. (30 , 24)
- D. (11 , 6)



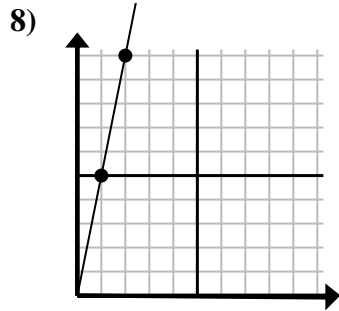
- A. (8 , 20)
- B. (7 , 6)
- C. (6 , 15)
- D. (10 , 25)



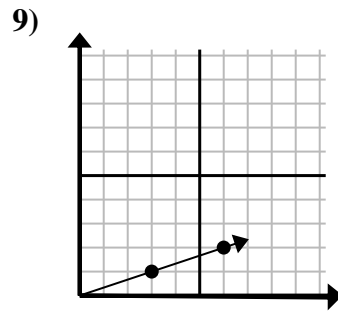
- A. (24 , 12)
- B. (28 , 14)
- C. (12 , 6)
- D. (10 , 4)



- A. (12 , 9)
- B. (24 , 18)
- C. (12 , 4)
- D. (16 , 12)



- A. (6 , 8)
- B. (3 , 15)
- C. (7 , 7)
- D. (6 , 30)



- A. (9 , 3)
- B. (8 , 6)
- C. (7 , 2)
- D. (18 , 6)

Answers

- 1. **C**
- 2. **D**
- 3. **A**
- 4. **B**
- 5. **C**
- 6. **C**
- 7. **A**
- 8. **B**
- 9. **A**