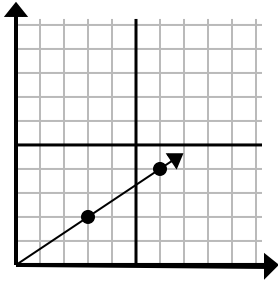




Determine which choice represents a point on the line if it were to continue.

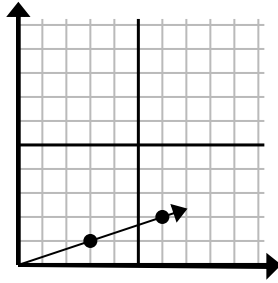
Answers

1)



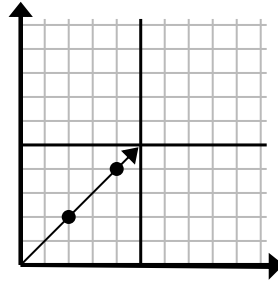
- A. (21, 14)
- B. (12, 8)
- C. (9, 6)
- D. (15, 10)

2)



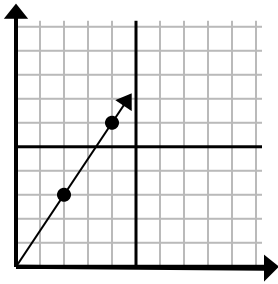
- A. (18, 6)
- B. (12, 4)
- C. (9, 3)
- D. (10, 3)

3)



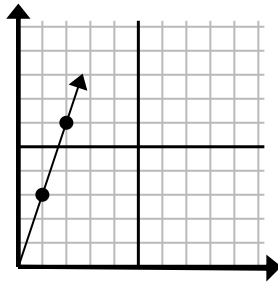
- A. (6, 6)
- B. (12, 12)
- C. (7, 7)
- D. (8, 4)

4)



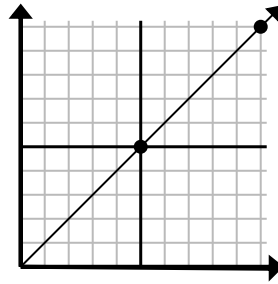
- A. (6, 9)
- B. (14, 21)
- C. (7, 5)
- D. (8, 7)

5)



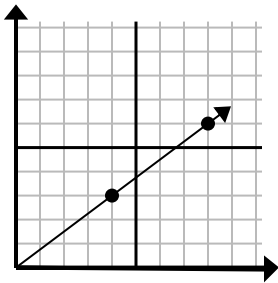
- A. (5, 4)
- B. (4, 8)
- C. (7, 21)
- D. (3, 9)

6)



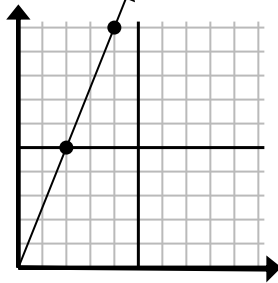
- A. (15, 6)
- B. (30, 30)
- C. (15, 15)
- D. (35, 35)

7)



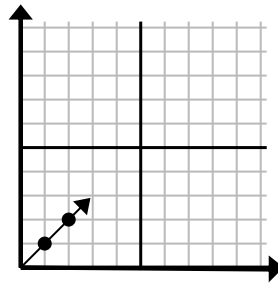
- A. (10, 5)
- B. (10, 6)
- C. (12, 9)
- D. (28, 21)

8)



- A. (12, 30)
- B. (8, 20)
- C. (6, 15)
- D. (8, 6)

9)



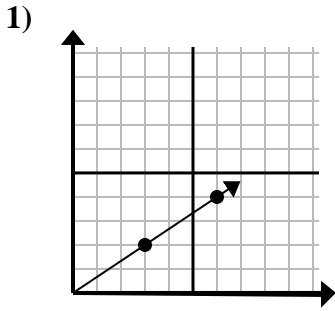
- A. (3, 3)
- B. (3, 2)
- C. (6, 6)
- D. (6, 3)

1. \_\_\_\_\_
2. \_\_\_\_\_
3. \_\_\_\_\_
4. \_\_\_\_\_
5. \_\_\_\_\_
6. \_\_\_\_\_
7. \_\_\_\_\_
8. \_\_\_\_\_
9. \_\_\_\_\_

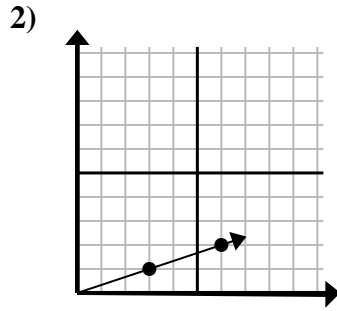


Determine which choice represents a point on the line if it were to continue.

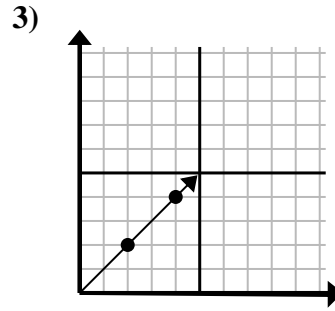
Answers



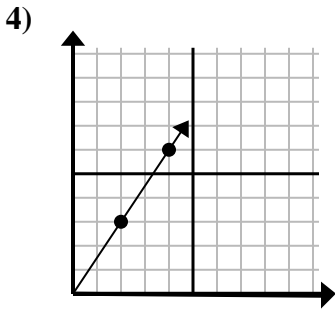
- A. (21, 14)
- B. (12, 8)
- C. (9, 6)
- D. (15, 10)



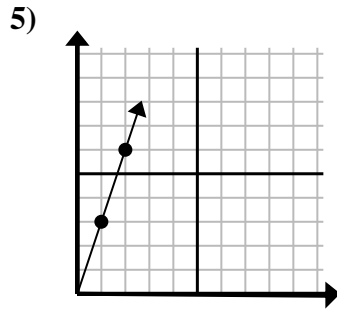
- A. (18, 6)
- B. (12, 4)
- C. (9, 3)
- D. (10, 3)



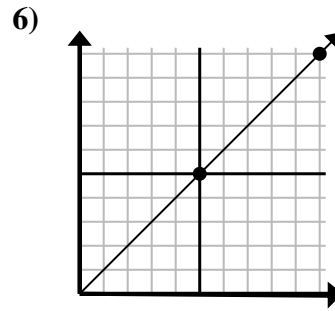
- A. (6, 6)
- B. (12, 12)
- C. (7, 7)
- D. (8, 4)



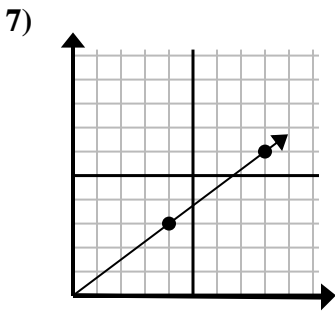
- A. (6, 9)
- B. (14, 21)
- C. (7, 5)
- D. (8, 7)



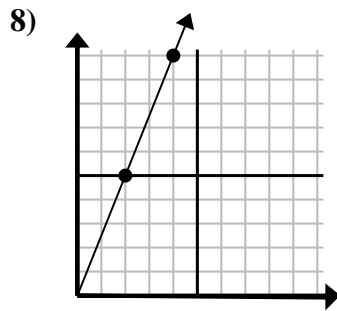
- A. (5, 4)
- B. (4, 8)
- C. (7, 21)
- D. (3, 9)



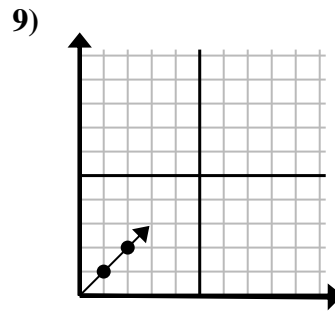
- A. (15, 6)
- B. (30, 30)
- C. (15, 15)
- D. (35, 35)



- A. (10, 5)
- B. (10, 6)
- C. (12, 9)
- D. (28, 21)



- A. (12, 30)
- B. (8, 20)
- C. (6, 15)
- D. (8, 6)



- A. (3, 3)
- B. (3, 2)
- C. (6, 6)
- D. (6, 3)

- 1.     **C**
- 2.     **C**
- 3.     **A**
- 4.     **A**
- 5.     **D**
- 6.     **C**
- 7.     **C**
- 8.     **C**
- 9.     **A**