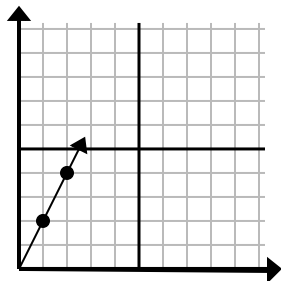




Determine which choice represents a point on the line if it were to continue.

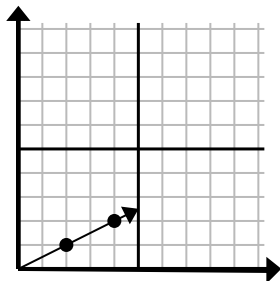
Answers

1)



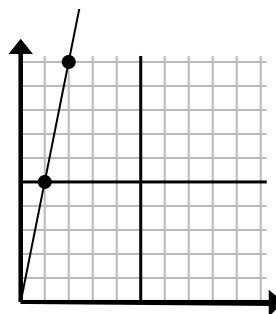
- A. (3, 6)
- B. (7, 3)
- C. (6, 4)
- D. (7, 14)

2)



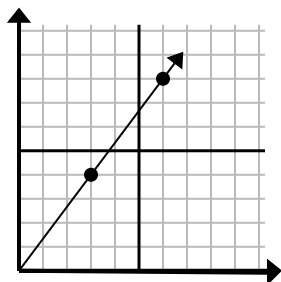
- A. (5, 6)
- B. (5, 4)
- C. (6, 3)
- D. (9, 6)

3)



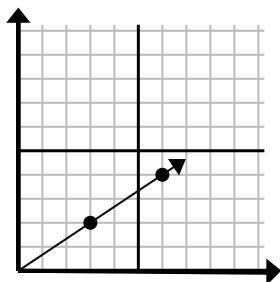
- A. (7, 10)
- B. (3, 15)
- C. (6, 30)
- D. (5, 8)

4)



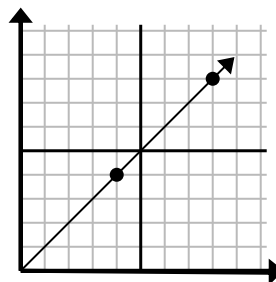
- A. (12, 16)
- B. (10, 6)
- C. (21, 28)
- D. (9, 12)

5)



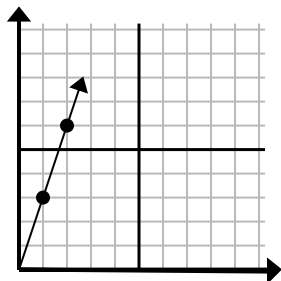
- A. (9, 4)
- B. (9, 6)
- C. (15, 10)
- D. (12, 8)

6)



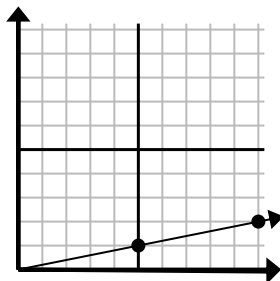
- A. (16, 16)
- B. (12, 12)
- C. (9, 9)
- D. (24, 24)

7)



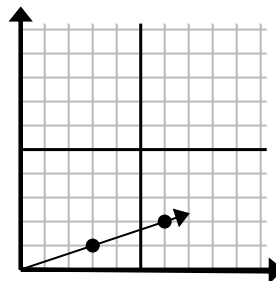
- A. (5, 8)
- B. (5, 15)
- C. (6, 18)
- D. (3, 9)

8)



- A. (11, 5)
- B. (15, 2)
- C. (15, 3)
- D. (14, 2)

9)



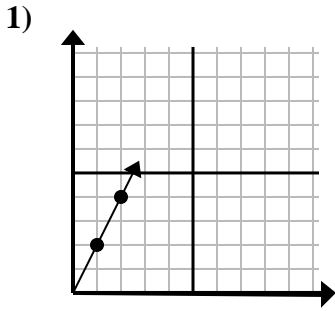
- A. (10, 6)
- B. (9, 3)
- C. (8, 6)
- D. (9, 2)

1. _____
2. _____
3. _____
4. _____
5. _____
6. _____
7. _____
8. _____
9. _____

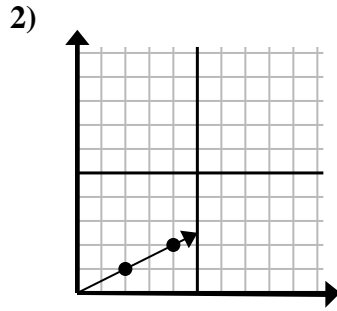


Determine which choice represents a point on the line if it were to continue.

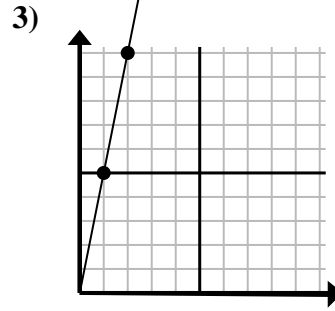
Answers



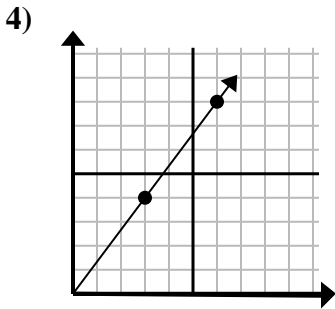
- A. (3, 6)
- B. (7, 3)
- C. (6, 4)
- D. (7, 14)



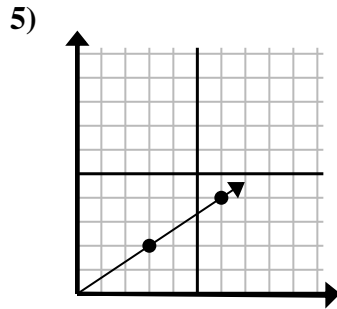
- A. (5, 6)
- B. (5, 4)
- C. (6, 3)
- D. (9, 6)



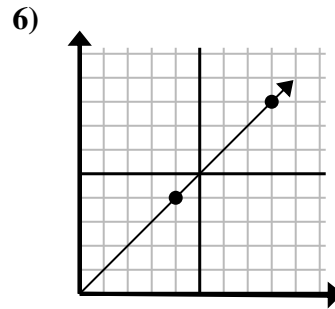
- A. (7, 10)
- B. (3, 15)
- C. (6, 30)
- D. (5, 8)



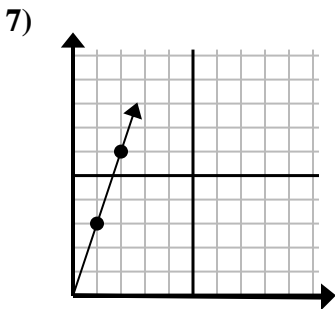
- A. (12, 16)
- B. (10, 6)
- C. (21, 28)
- D. (9, 12)



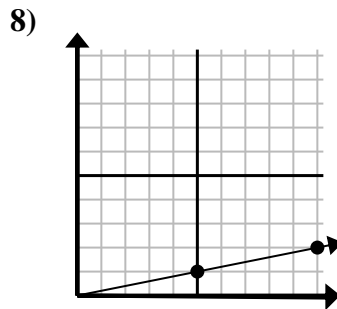
- A. (9, 4)
- B. (9, 6)
- C. (15, 10)
- D. (12, 8)



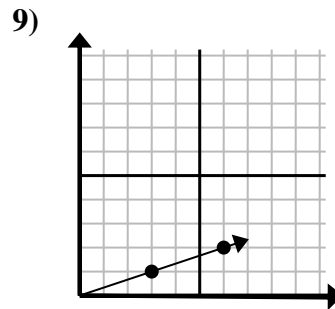
- A. (16, 16)
- B. (12, 12)
- C. (9, 9)
- D. (24, 24)



- A. (5, 8)
- B. (5, 15)
- C. (6, 18)
- D. (3, 9)



- A. (11, 5)
- B. (15, 2)
- C. (15, 3)
- D. (14, 2)



- A. (10, 6)
- B. (9, 3)
- C. (8, 6)
- D. (9, 2)

- 1. **A**
- 2. **C**
- 3. **B**
- 4. **D**
- 5. **B**
- 6. **B**
- 7. **D**
- 8. **C**
- 9. **B**