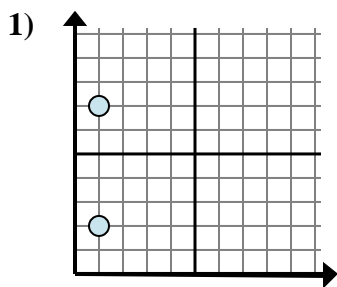


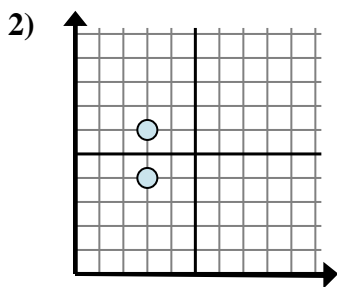


Determine which expression best shows the distance between the two points.

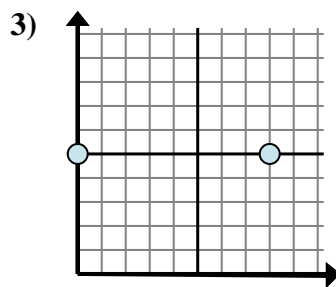
Answers



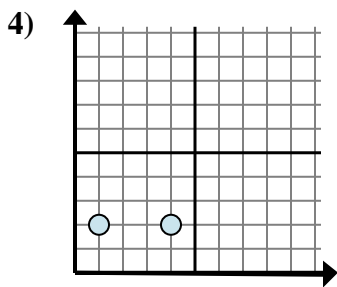
- A.  $1 - 2$
- B.  $7 - 2$
- C.  $2 - 1$
- D.  $2 - 7$



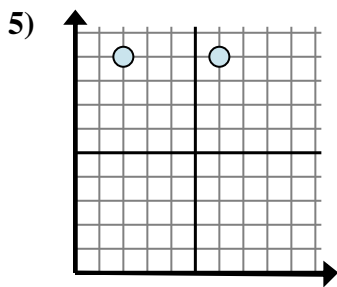
- A.  $6 - 3$
- B.  $3 - 6$
- C.  $6 - 4$
- D.  $3 - 3$



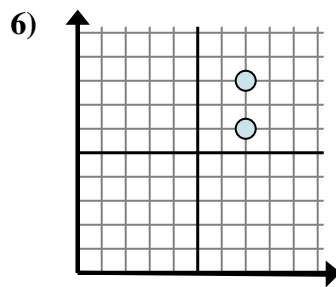
- A.  $8 - 0$
- B.  $0 - 5$
- C.  $5 - 5$
- D.  $0 - 8$



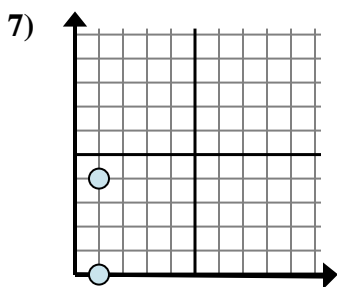
- A.  $2 - 4$
- B.  $4 - 1$
- C.  $2 - 2$
- D.  $1 - 4$



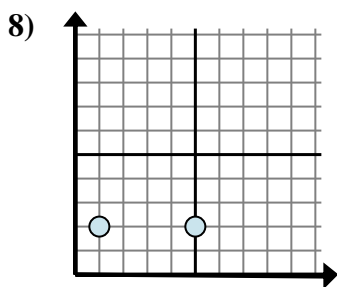
- A.  $9 - 9$
- B.  $2 - 6$
- C.  $9 - 9$
- D.  $6 - 2$



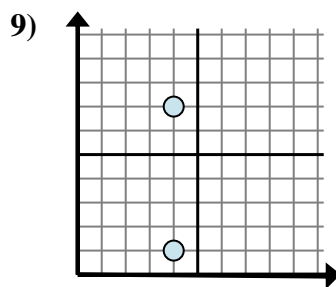
- A.  $7 - 7$
- B.  $6 - 8$
- C.  $7 - 7$
- D.  $8 - 6$



- A.  $1 - 1$
- B.  $4 - 1$
- C.  $1 - 1$
- D.  $4 - 0$



- A.  $1 - 5$
- B.  $5 - 1$
- C.  $1 - 2$
- D.  $2 - 1$

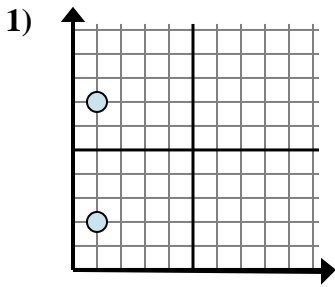


- A.  $4 - 4$
- B.  $7 - 4$
- C.  $4 - 1$
- D.  $7 - 1$

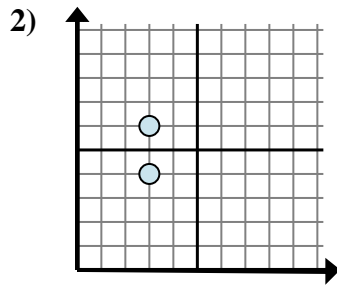
1. \_\_\_\_\_
2. \_\_\_\_\_
3. \_\_\_\_\_
4. \_\_\_\_\_
5. \_\_\_\_\_
6. \_\_\_\_\_
7. \_\_\_\_\_
8. \_\_\_\_\_
9. \_\_\_\_\_



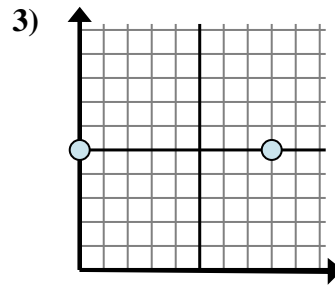
Determine which expression best shows the distance between the two points.



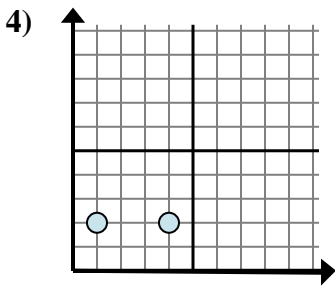
- A.  $1 - 2$
- B.  $7 - 2$
- C.  $2 - 1$
- D.  $2 - 7$



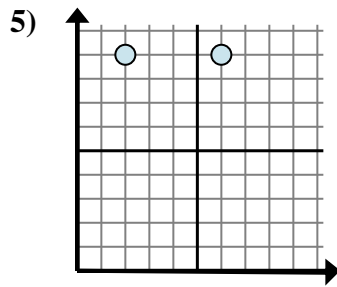
- A.  $6 - 3$
- B.  $3 - 6$
- C.  $6 - 4$
- D.  $3 - 3$



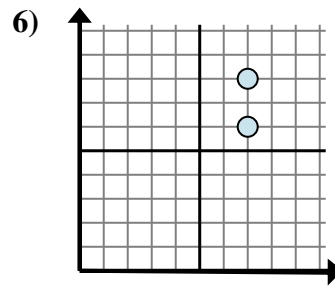
- A.  $8 - 0$
- B.  $0 - 5$
- C.  $5 - 5$
- D.  $0 - 8$



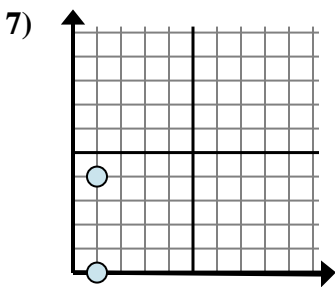
- A.  $2 - 4$
- B.  $4 - 1$
- C.  $2 - 2$
- D.  $1 - 4$



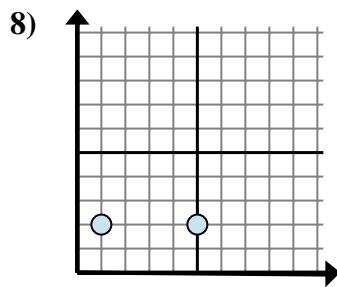
- A.  $9 - 9$
- B.  $2 - 6$
- C.  $9 - 9$
- D.  $6 - 2$



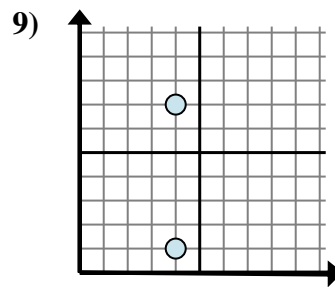
- A.  $7 - 7$
- B.  $6 - 8$
- C.  $7 - 7$
- D.  $8 - 6$



- A.  $1 - 1$
- B.  $4 - 1$
- C.  $1 - 1$
- D.  $4 - 0$



- A.  $1 - 5$
- B.  $5 - 1$
- C.  $1 - 2$
- D.  $2 - 1$



- A.  $4 - 4$
- B.  $7 - 4$
- C.  $4 - 1$
- D.  $7 - 1$

Answers

- 1.     **B**
- 2.     **C**
- 3.     **A**
- 4.     **B**
- 5.     **D**
- 6.     **D**
- 7.     **D**
- 8.     **B**
- 9.     **D**