



Fill in the grid using the chart.

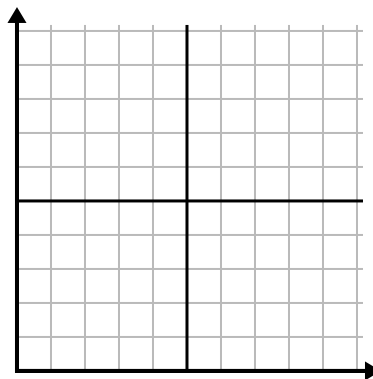
1)

Year	1	2	3	4	5	6
Boxes of Pens Used	9	1	6	7	8	2



2)

Month	1	2	3	4	5	6	7
Electric Bill Price	75	225	50	125	100	25	250



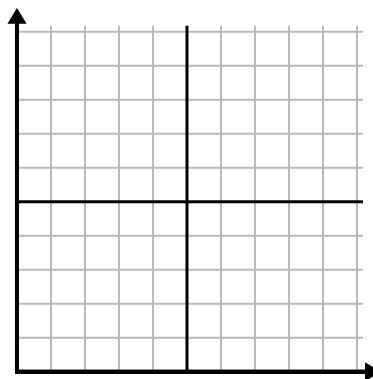
3)

Day	1	2	3	4	5	6
Meals Sold	300	200	500	600	900	100



4)

Week	1	2	3	4	5
Water Used (gallons)	10	30	70	40	20



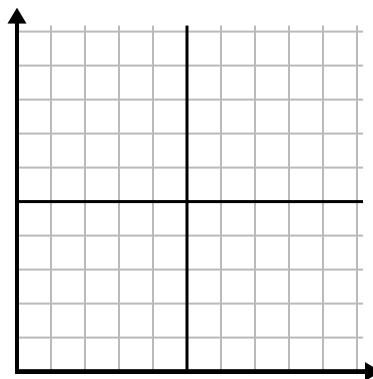
5)

Hour	1	2	3	4	5
Amount Sold	10	5	1	2	4



6)

Week	1	2	3	4	5	6
Hours of TV watched	40	30	50	10	20	25

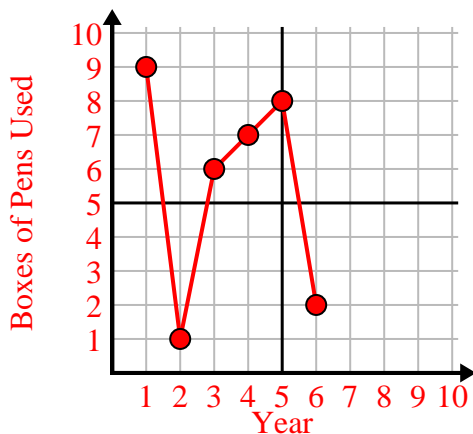




Fill in the grid using the chart.

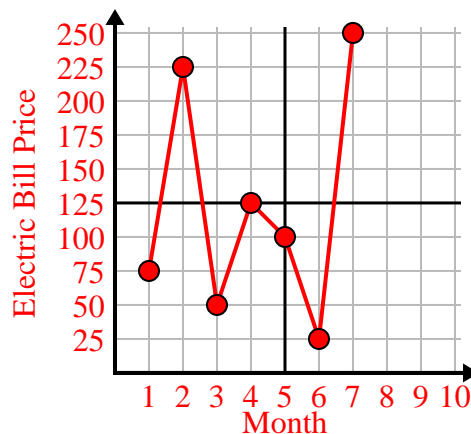
1)

Year	1	2	3	4	5	6
Boxes of Pens Used	9	1	6	7	8	2



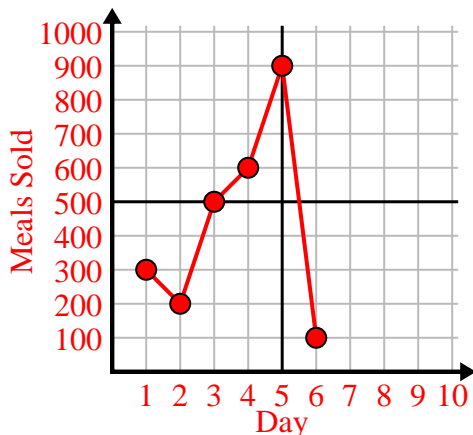
2)

Month	1	2	3	4	5	6	7
Electric Bill Price	75	225	50	125	100	25	250



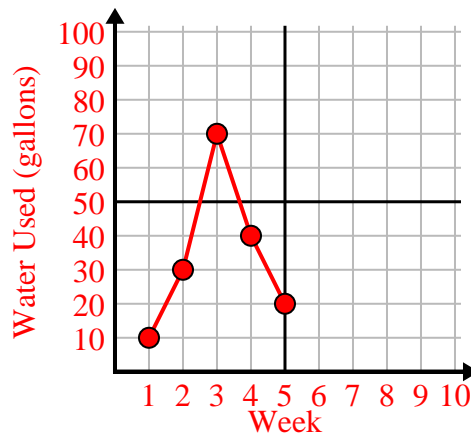
3)

Day	1	2	3	4	5	6
Meals Sold	300	200	500	600	900	100



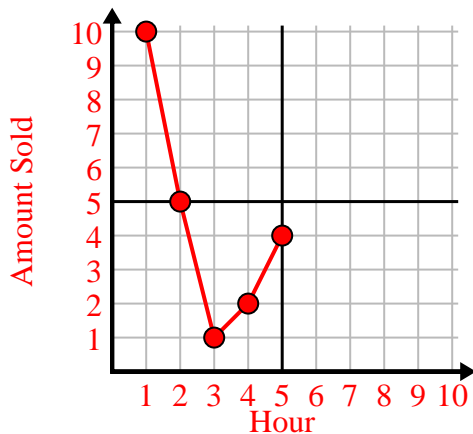
4)

Week	1	2	3	4	5
Water Used (gallons)	10	30	70	40	20



5)

Hour	1	2	3	4	5
Amount Sold	10	5	1	2	4



6)

Week	1	2	3	4	5	6
Hours of TV watched	40	30	50	10	20	25

