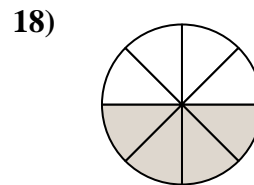
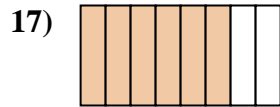
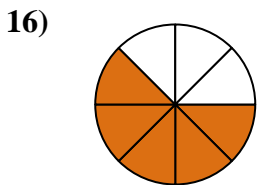
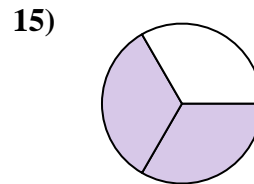
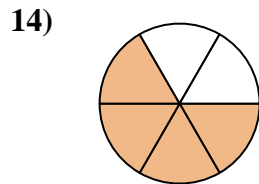
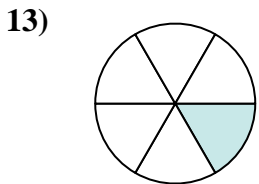
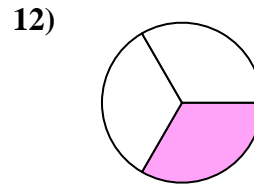
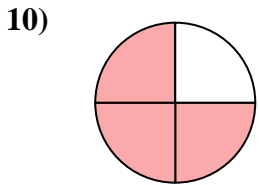
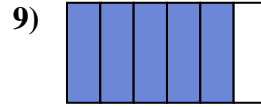
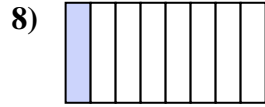
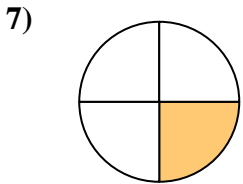
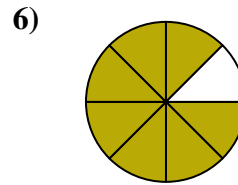
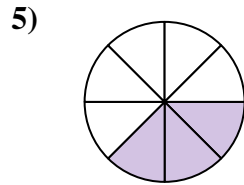
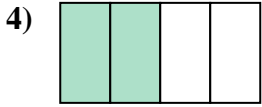
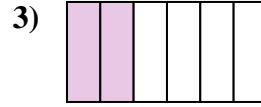
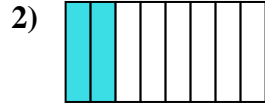




Write the shaded amount as a fraction of the whole amount.



Answers

1. _____

2. _____

3. _____

4. _____

5. _____

6. _____

7. _____

8. _____

9. _____

10. _____

11. _____

12. _____

13. _____

14. _____

15. _____

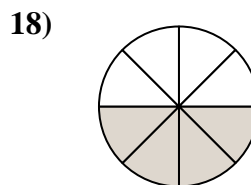
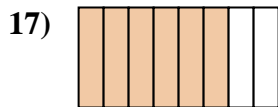
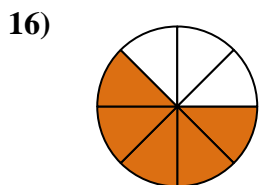
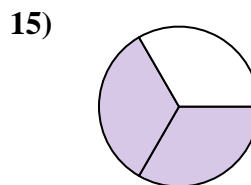
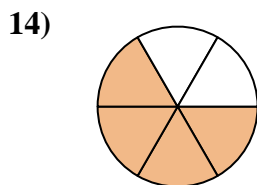
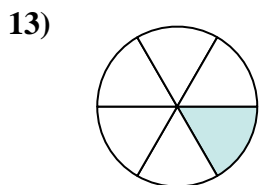
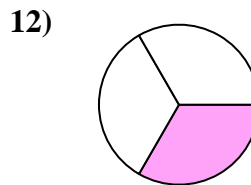
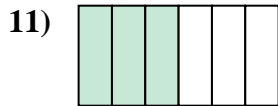
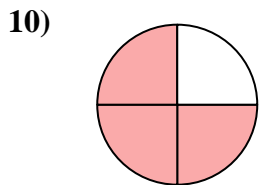
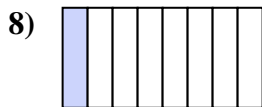
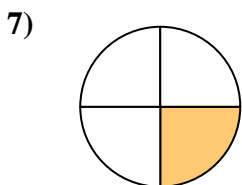
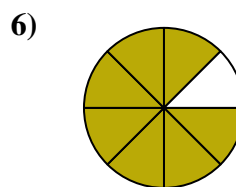
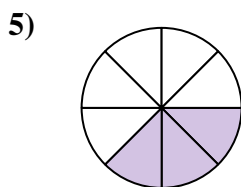

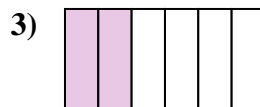

16. _____

17. _____

18. _____



Write the shaded amount as a fraction of the whole amount.



Answers

1. $\frac{1}{2}$

2. $\frac{2}{8}$

3. $\frac{2}{6}$

4. $\frac{2}{4}$

5. $\frac{3}{8}$

6. $\frac{7}{8}$

7. $\frac{1}{4}$

8. $\frac{1}{8}$

9. $\frac{5}{6}$

10. $\frac{3}{4}$

11. $\frac{3}{6}$

12. $\frac{1}{3}$

13. $\frac{1}{6}$

14. $\frac{4}{6}$

15. $\frac{2}{3}$

16. $\frac{5}{8}$

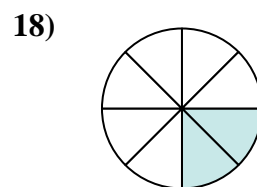
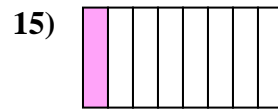
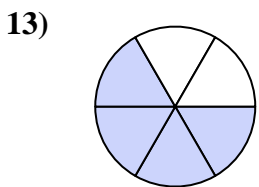
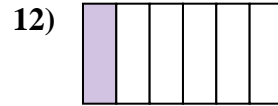
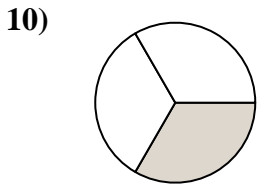
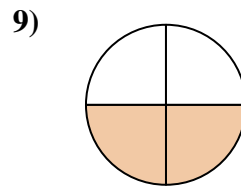
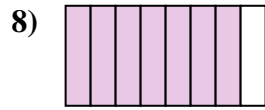
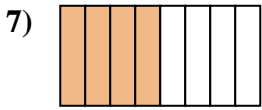
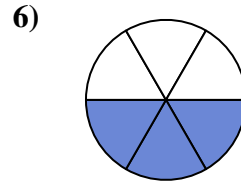
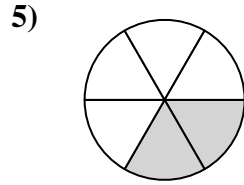
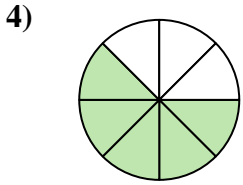
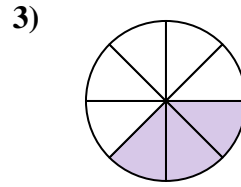
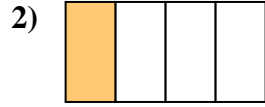
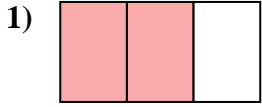
17. $\frac{6}{8}$

18. $\frac{4}{8}$



Write the shaded amount as a fraction of the whole amount.

Answers



1. _____

2. _____

3. _____

4. _____

5. _____

6. _____

7. _____

8. _____

9. _____

10. _____

11. _____

12. _____

13. _____

14. _____

15. _____

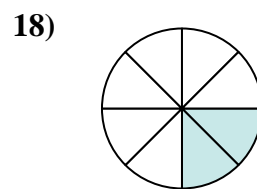
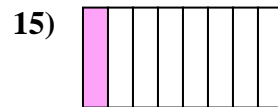
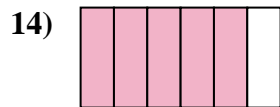
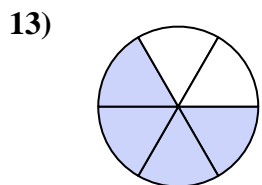
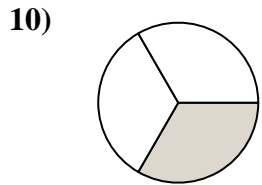
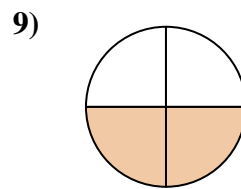
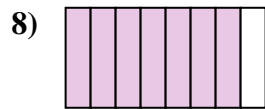
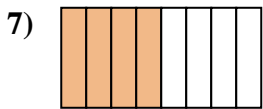
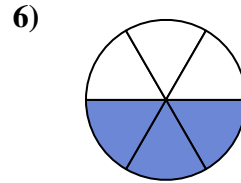
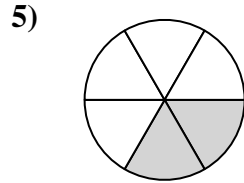
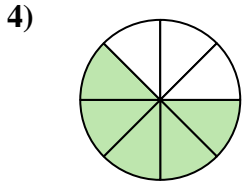
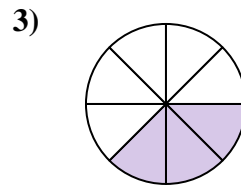
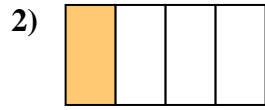
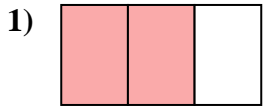
16. _____

17. _____

18. _____



Write the shaded amount as a fraction of the whole amount.



Answers

1. $\frac{2}{3}$

2. $\frac{1}{4}$

3. $\frac{3}{8}$

4. $\frac{5}{8}$

5. $\frac{2}{6}$

6. $\frac{3}{6}$

7. $\frac{4}{8}$

8. $\frac{7}{8}$

9. $\frac{2}{4}$

10. $\frac{1}{3}$

11. $\frac{1}{2}$

12. $\frac{1}{6}$

13. $\frac{4}{6}$

14. $\frac{5}{6}$

15. $\frac{1}{8}$

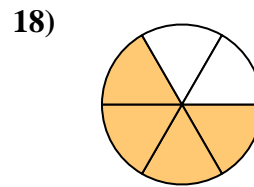
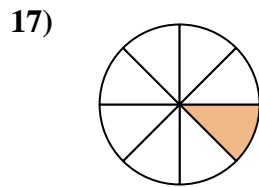
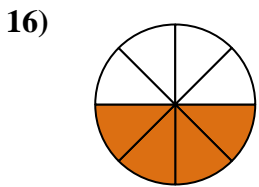
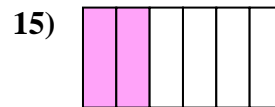

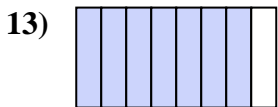
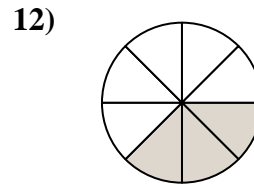

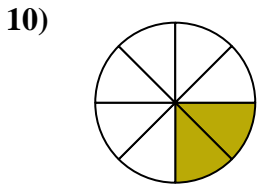
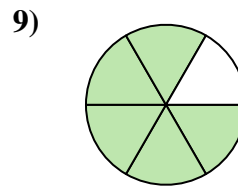
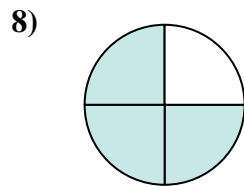
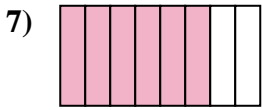
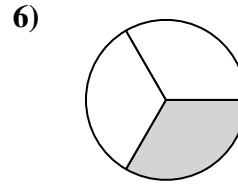

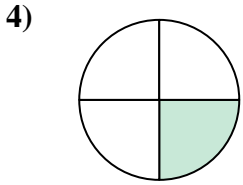
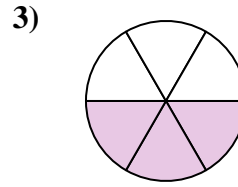
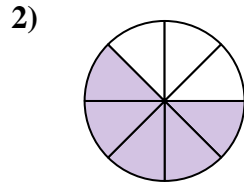
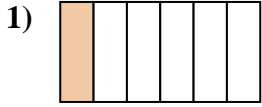
16. $\frac{3}{4}$

17. $\frac{6}{8}$

18. $\frac{2}{8}$



Write the shaded amount as a fraction of the whole amount.



Answers

1. _____

2. _____

3. _____

4. _____

5. _____

6. _____

7. _____

8. _____

9. _____

10. _____

11. _____

12. _____

13. _____

14. _____

15. _____

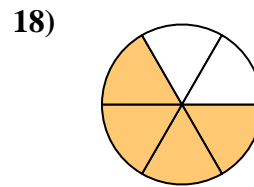
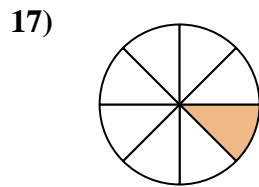
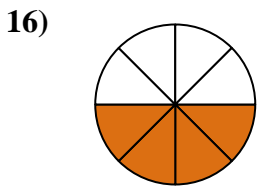
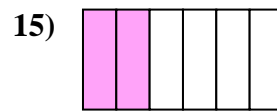
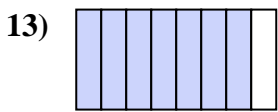
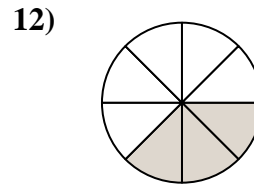

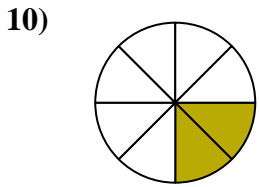
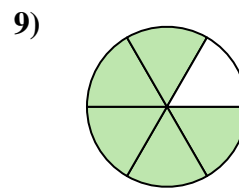
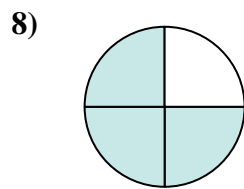
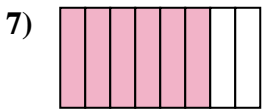
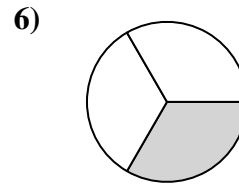
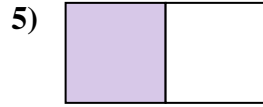
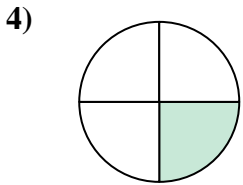
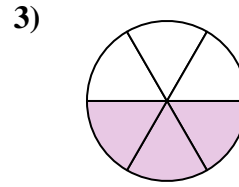
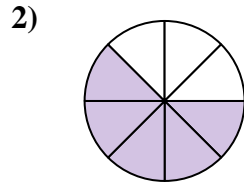
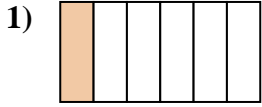
16. _____

17. _____

18. _____



Write the shaded amount as a fraction of the whole amount.



Answers

1. $\frac{1}{6}$

2. $\frac{5}{8}$

3. $\frac{3}{6}$

4. $\frac{1}{4}$

5. $\frac{1}{2}$

6. $\frac{1}{3}$

7. $\frac{6}{8}$

8. $\frac{3}{4}$

9. $\frac{5}{6}$

10. $\frac{2}{8}$

11. $\frac{2}{3}$

12. $\frac{3}{8}$

13. $\frac{7}{8}$

14. $\frac{2}{4}$

15. $\frac{2}{6}$

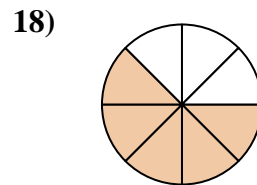
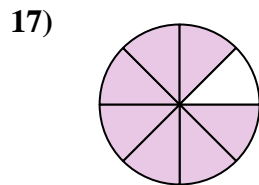
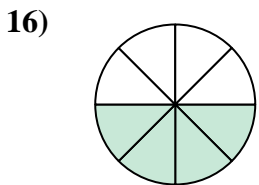
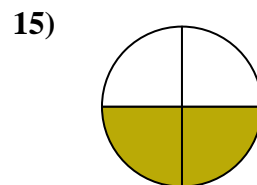
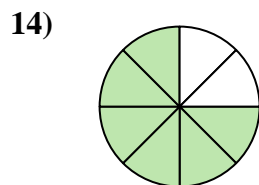
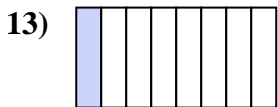
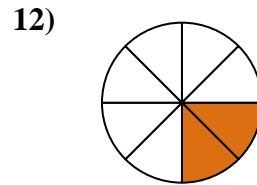
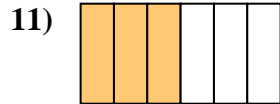
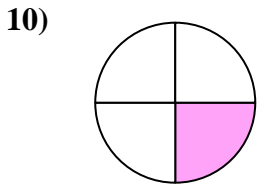
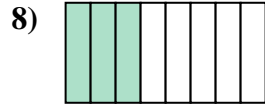
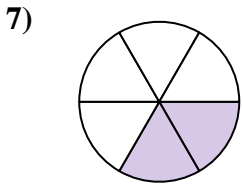
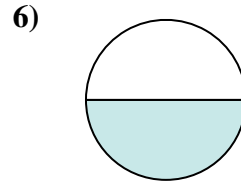
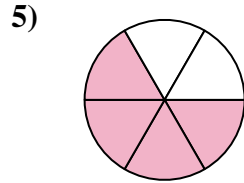
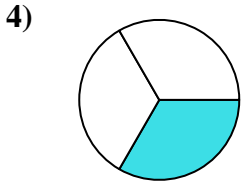
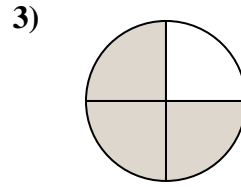
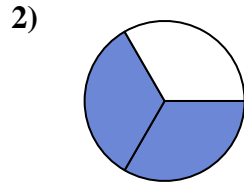
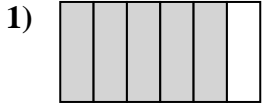
16. $\frac{4}{8}$

17. $\frac{1}{8}$

18. $\frac{4}{6}$



Write the shaded amount as a fraction of the whole amount.



Answers

1. _____

2. _____

3. _____

4. _____

5. _____

6. _____

7. _____

8. _____

9. _____

10. _____

11. _____

12. _____

13. _____

14. _____

15. _____

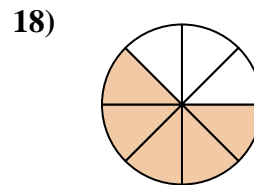
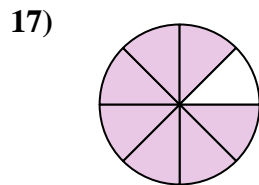
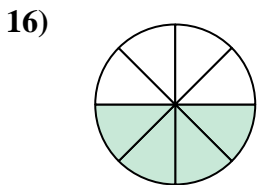
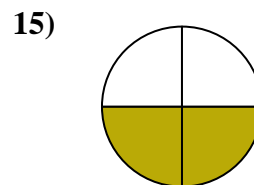
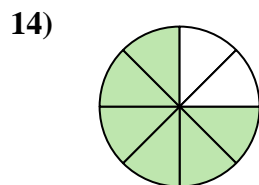
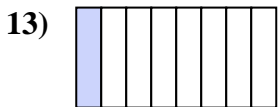
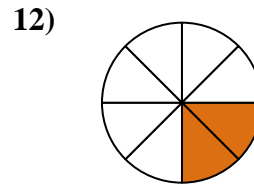
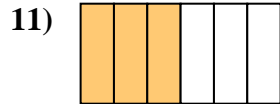
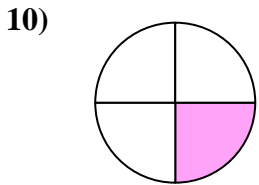
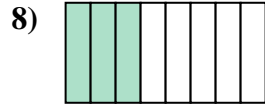
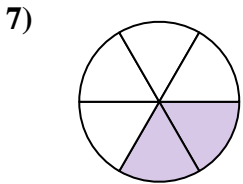
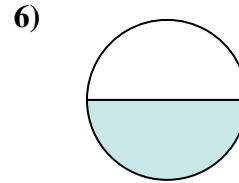
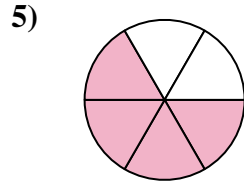
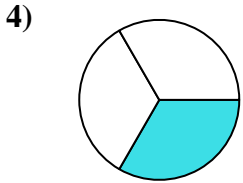
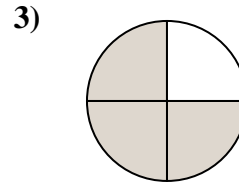
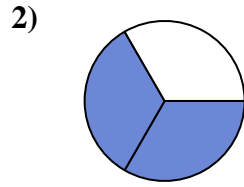
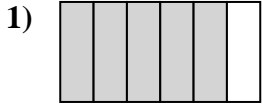
16. _____

17. _____

18. _____



Write the shaded amount as a fraction of the whole amount.



Answers

1. $\frac{5}{6}$

2. $\frac{2}{3}$

3. $\frac{3}{4}$

4. $\frac{1}{3}$

5. $\frac{4}{6}$

6. $\frac{1}{2}$

7. $\frac{2}{6}$

8. $\frac{3}{8}$

9. $\frac{1}{6}$

10. $\frac{1}{4}$

11. $\frac{3}{6}$

12. $\frac{2}{8}$

13. $\frac{1}{8}$

14. $\frac{6}{8}$

15. $\frac{2}{4}$

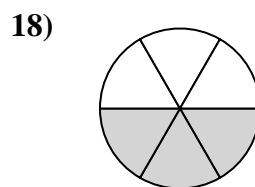
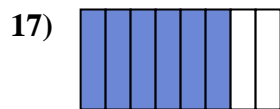
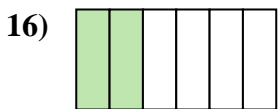
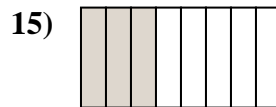
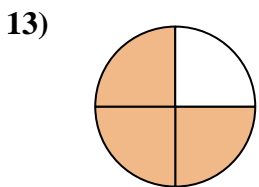
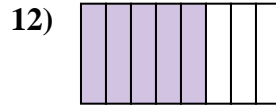
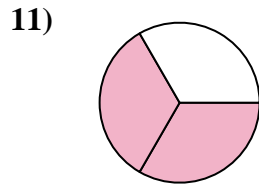
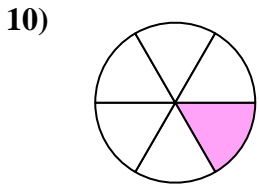
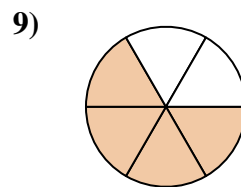
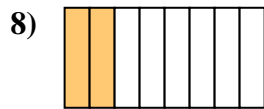
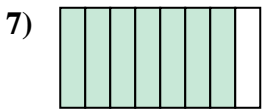
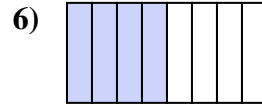
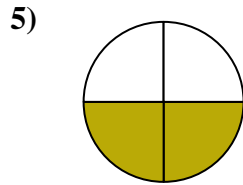
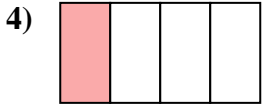
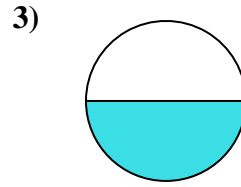
16. $\frac{4}{8}$

17. $\frac{7}{8}$

18. $\frac{5}{8}$



Write the shaded amount as a fraction of the whole amount.



Answers

1. _____

2. _____

3. _____

4. _____

5. _____

6. _____

7. _____

8. _____

9. _____

10. _____

11. _____

12. _____

13. _____

14. _____

15. _____

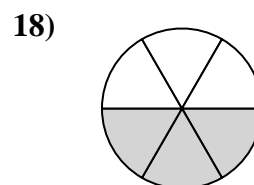
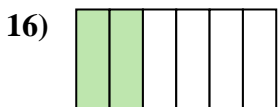
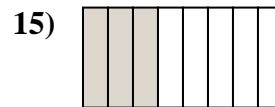
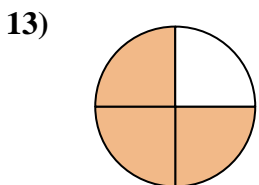
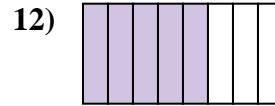
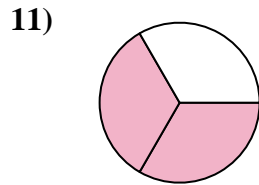
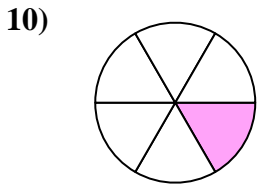
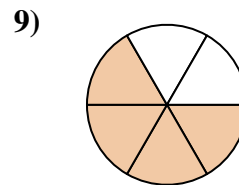
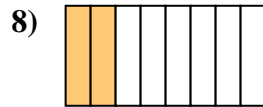
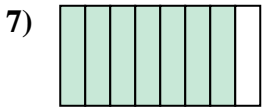
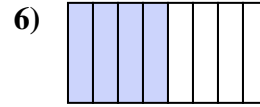
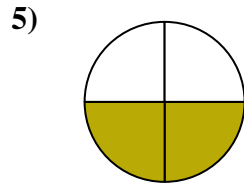
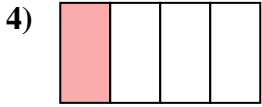
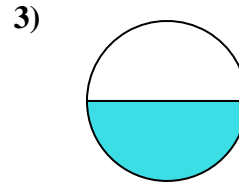
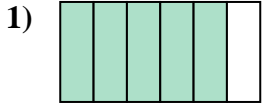
16. _____

17. _____

18. _____



Write the shaded amount as a fraction of the whole amount.



Answers

1. $\frac{5}{6}$

2. $\frac{1}{3}$

3. $\frac{1}{2}$

4. $\frac{1}{4}$

5. $\frac{2}{4}$

6. $\frac{4}{8}$

7. $\frac{7}{8}$

8. $\frac{2}{8}$

9. $\frac{4}{6}$

10. $\frac{1}{6}$

11. $\frac{2}{3}$

12. $\frac{5}{8}$

13. $\frac{3}{4}$

14. $\frac{1}{8}$

15. $\frac{3}{8}$

16. $\frac{2}{6}$

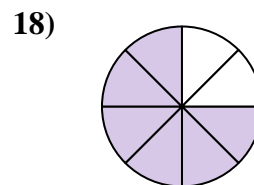
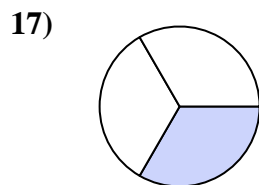
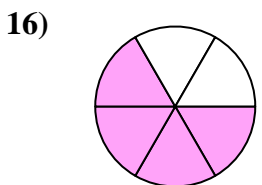
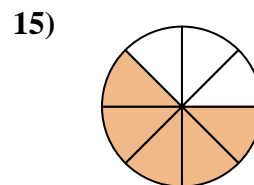
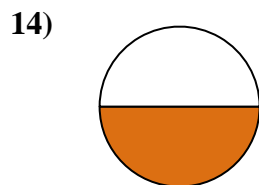
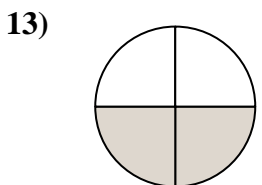
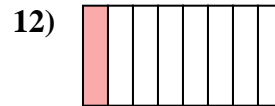

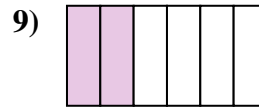
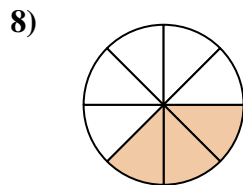
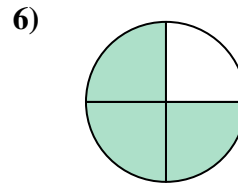
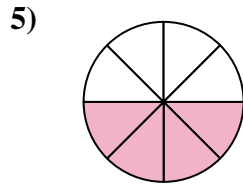
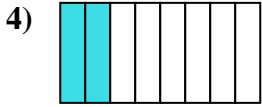
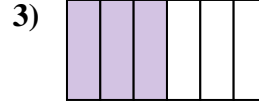
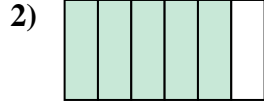
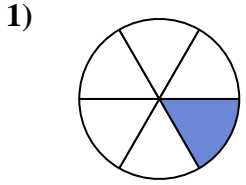
17. $\frac{6}{8}$

18. $\frac{3}{6}$



Write the shaded amount as a fraction of the whole amount.

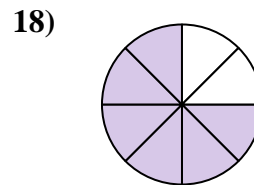
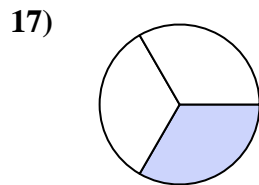
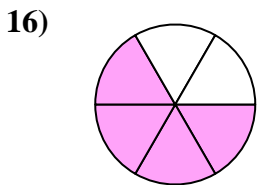
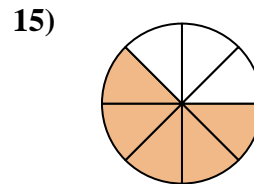
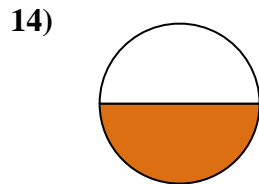
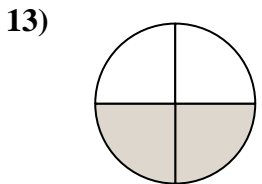
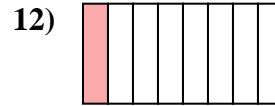
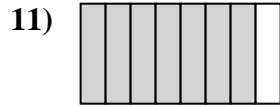

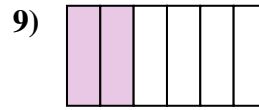
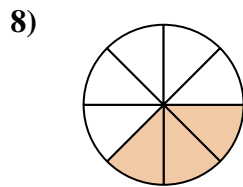
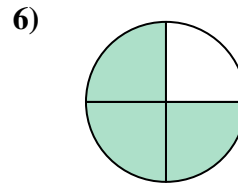
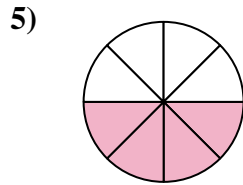
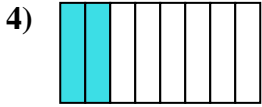
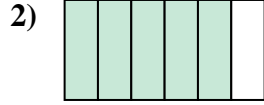
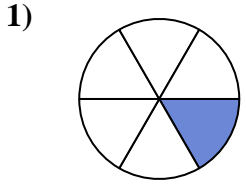
Answers



1. _____
2. _____
3. _____
4. _____
5. _____
6. _____
7. _____
8. _____
9. _____
10. _____
11. _____
12. _____
13. _____
14. _____
15. _____
16. _____
17. _____
18. _____



Write the shaded amount as a fraction of the whole amount.



Answers

1. $\frac{1}{6}$

2. $\frac{5}{6}$

3. $\frac{3}{6}$

4. $\frac{2}{8}$

5. $\frac{4}{8}$

6. $\frac{3}{4}$

7. $\frac{1}{4}$

8. $\frac{3}{8}$

9. $\frac{2}{6}$

10. $\frac{2}{3}$

11. $\frac{7}{8}$

12. $\frac{1}{8}$

13. $\frac{2}{4}$

14. $\frac{1}{2}$

15. $\frac{5}{8}$


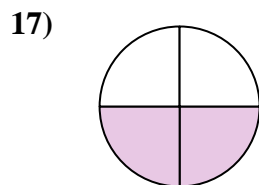
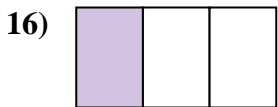
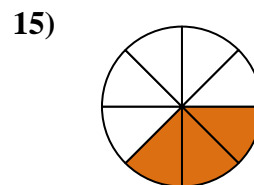
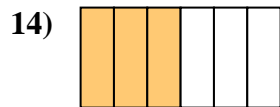
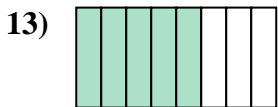
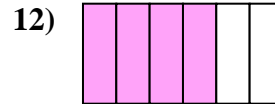
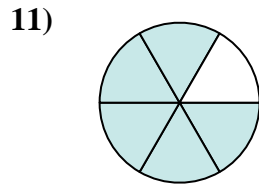
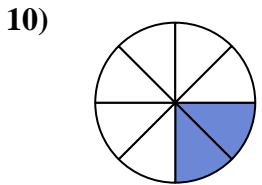
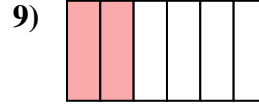
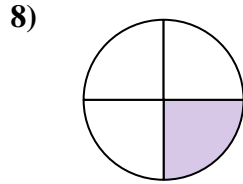
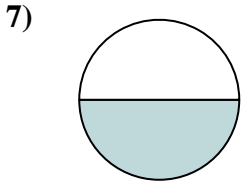
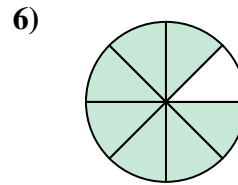
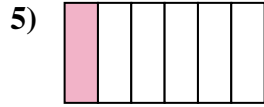
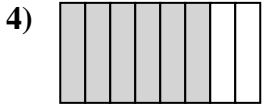
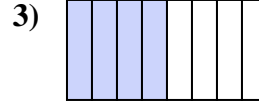
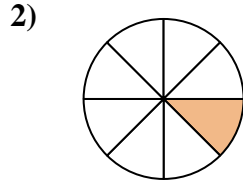
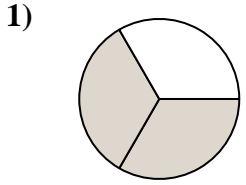
16. $\frac{4}{6}$

17. $\frac{1}{3}$

18. $\frac{6}{8}$



Write the shaded amount as a fraction of the whole amount.


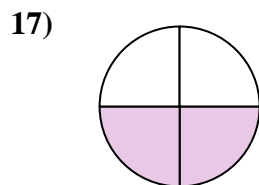
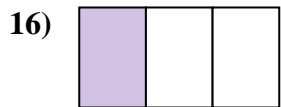
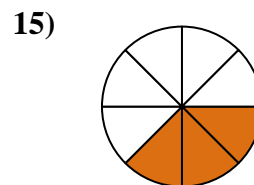
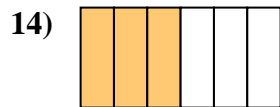
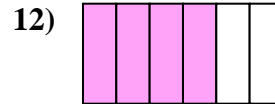
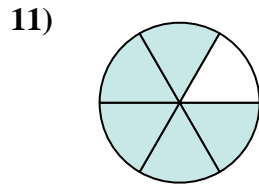
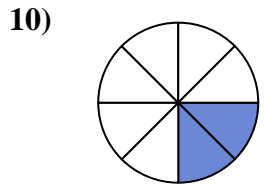
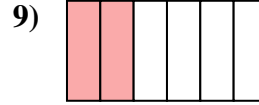
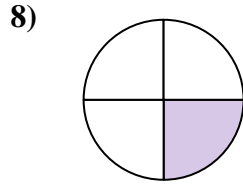
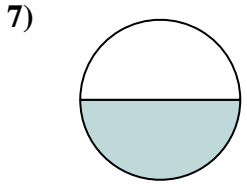
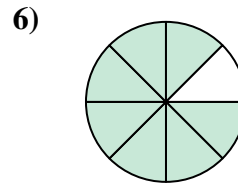
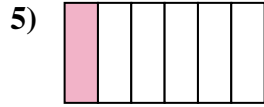
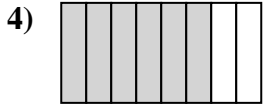
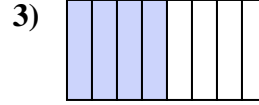
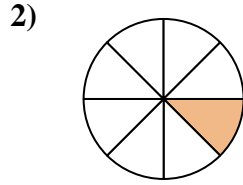
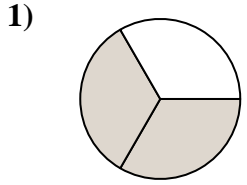


Answers

1. _____
2. _____
3. _____
4. _____
5. _____
6. _____
7. _____
8. _____
9. _____
10. _____
11. _____
12. _____
13. _____
14. _____
15. _____
16. _____
17. _____
18. _____



Write the shaded amount as a fraction of the whole amount.



Answers

1. $\frac{2}{3}$

2. $\frac{1}{8}$

3. $\frac{4}{8}$

4. $\frac{6}{8}$

5. $\frac{1}{6}$

6. $\frac{7}{8}$

7. $\frac{1}{2}$

8. $\frac{1}{4}$

9. $\frac{2}{6}$

10. $\frac{2}{8}$

11. $\frac{5}{6}$

12. $\frac{4}{6}$

13. $\frac{5}{8}$

14. $\frac{3}{6}$

15. $\frac{3}{8}$


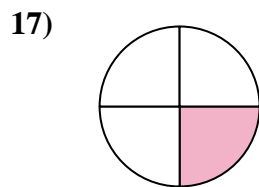
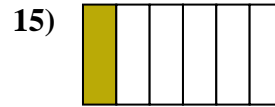
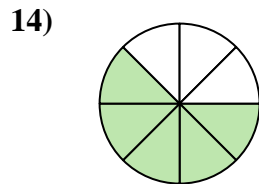
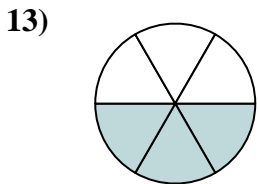
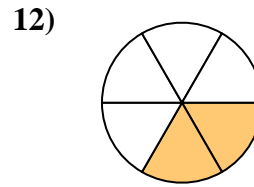
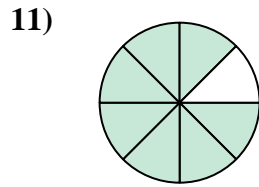
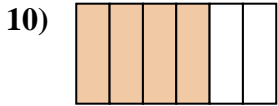
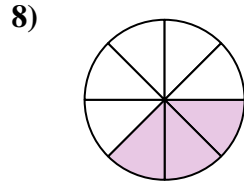
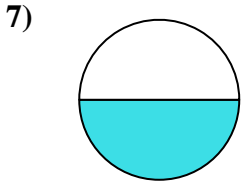
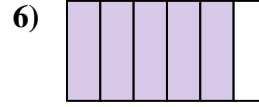
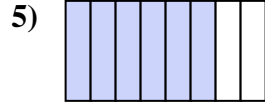
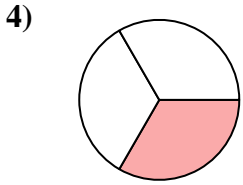
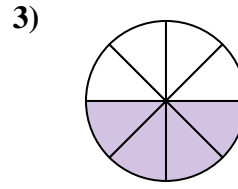
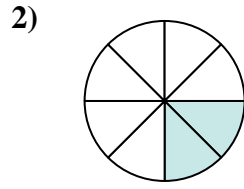
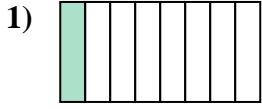
16. $\frac{1}{3}$

17. $\frac{2}{4}$

18. $\frac{3}{4}$



Write the shaded amount as a fraction of the whole amount.


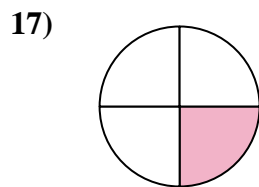

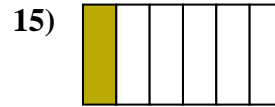
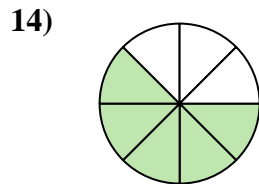
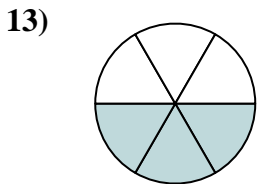
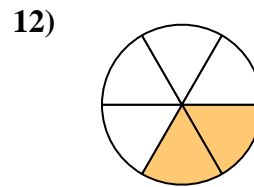
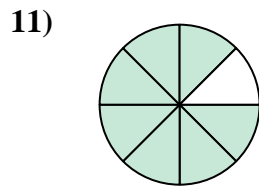
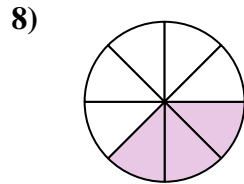
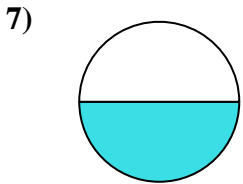
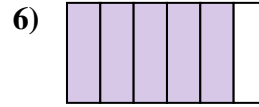
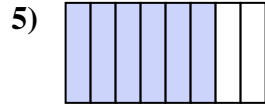
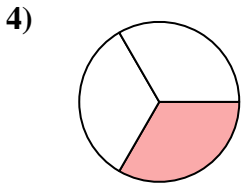
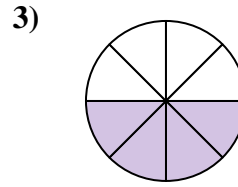
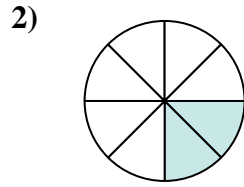
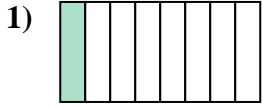


Answers

1. _____
2. _____
3. _____
4. _____
5. _____
6. _____
7. _____
8. _____
9. _____
10. _____
11. _____
12. _____
13. _____
14. _____
15. _____
16. _____
17. _____
18. _____



Write the shaded amount as a fraction of the whole amount.



Answers

1. $\frac{1}{8}$

2. $\frac{2}{8}$

3. $\frac{4}{8}$

4. $\frac{1}{3}$

5. $\frac{6}{8}$

6. $\frac{5}{6}$

7. $\frac{1}{2}$

8. $\frac{3}{8}$

9. $\frac{2}{3}$

10. $\frac{4}{6}$

11. $\frac{7}{8}$

12. $\frac{2}{6}$

13. $\frac{3}{6}$

14. $\frac{5}{8}$

15. $\frac{1}{6}$

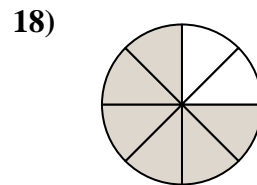
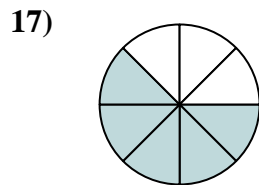
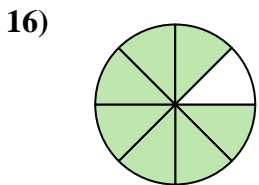
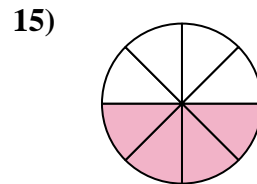
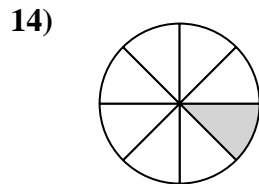
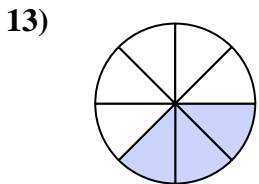
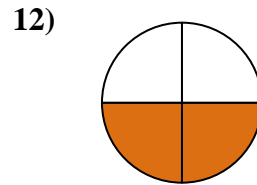
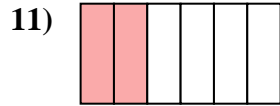
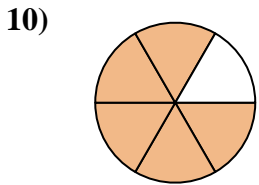
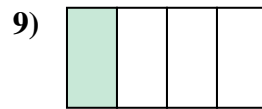
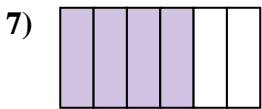
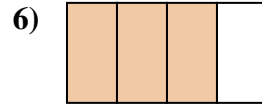
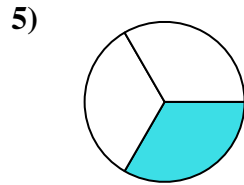

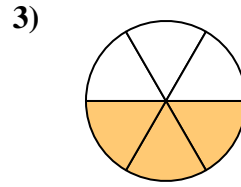
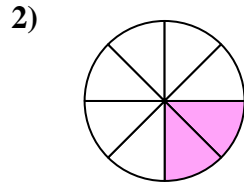
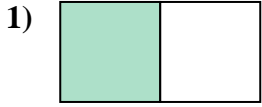
16. $\frac{3}{4}$

17. $\frac{1}{4}$

18. $\frac{2}{4}$



Write the shaded amount as a fraction of the whole amount.



Answers

1. _____

2. _____

3. _____

4. _____

5. _____

6. _____

7. _____

8. _____

9. _____

10. _____

11. _____

12. _____

13. _____

14. _____

15. _____

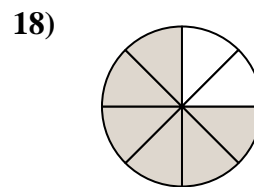
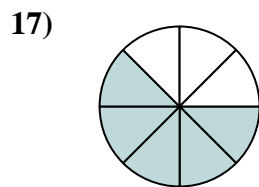
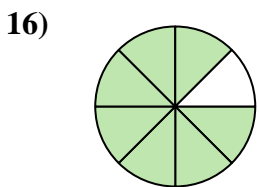
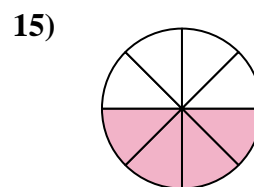
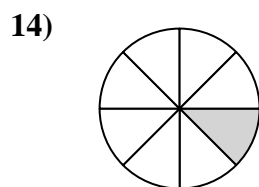
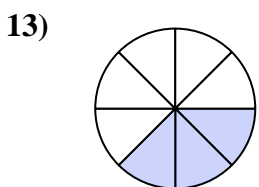
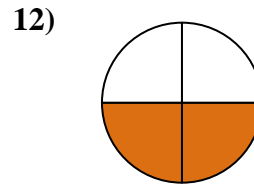
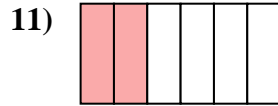
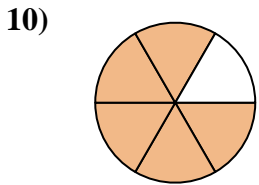

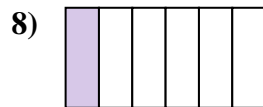
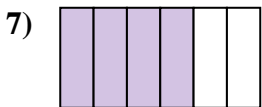
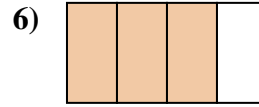
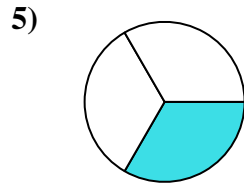

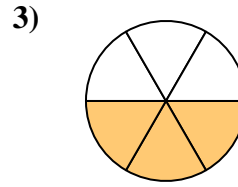
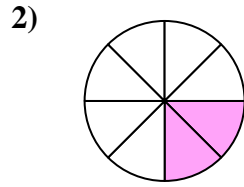
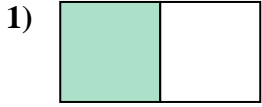
16. _____

17. _____

18. _____



Write the shaded amount as a fraction of the whole amount.



Answers

1. $\frac{1}{2}$

2. $\frac{2}{8}$

3. $\frac{3}{6}$

4. $\frac{2}{3}$

5. $\frac{1}{3}$

6. $\frac{3}{4}$

7. $\frac{4}{6}$

8. $\frac{1}{6}$

9. $\frac{1}{4}$

10. $\frac{5}{6}$

11. $\frac{2}{6}$

12. $\frac{2}{4}$

13. $\frac{3}{8}$

14. $\frac{1}{8}$

15. $\frac{4}{8}$

16. $\frac{7}{8}$

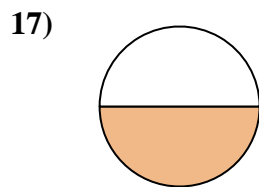
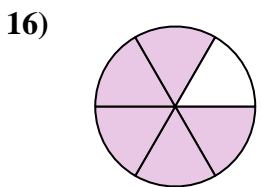
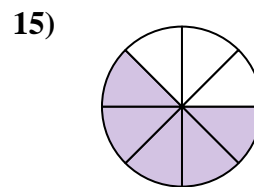
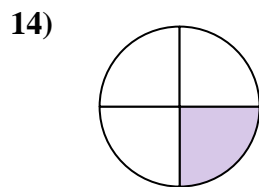
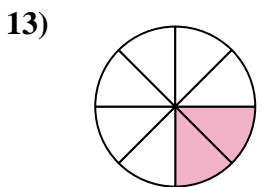
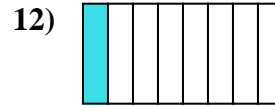
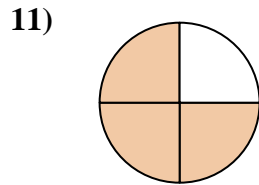
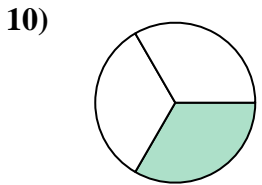
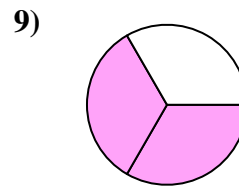
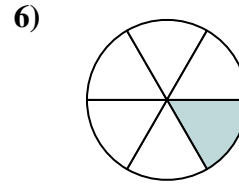
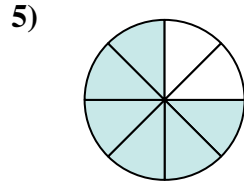
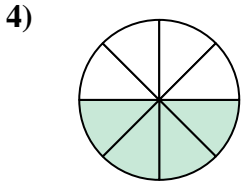
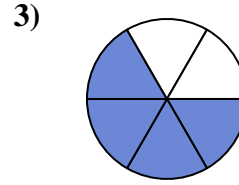
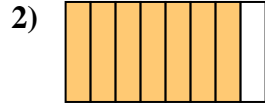
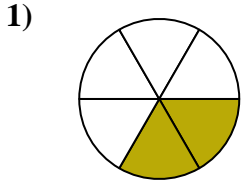
17. $\frac{5}{8}$

18. $\frac{6}{8}$



Write the shaded amount as a fraction of the whole amount.

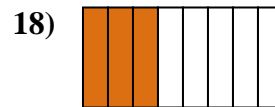
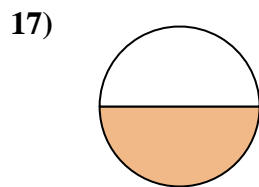
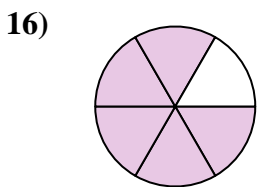
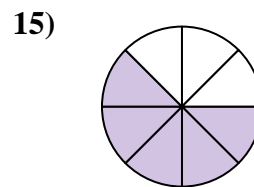
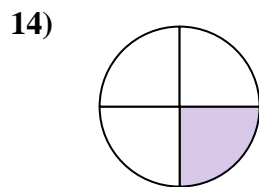
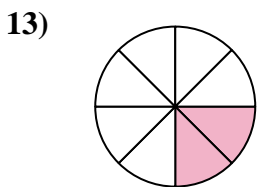
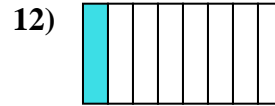
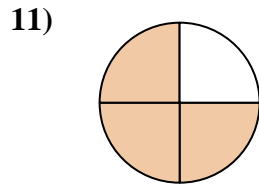
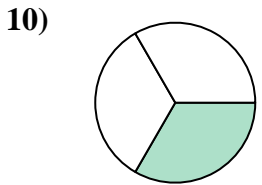
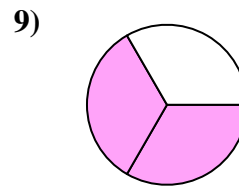
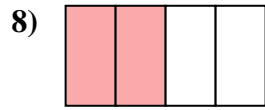
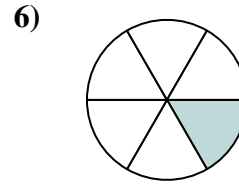
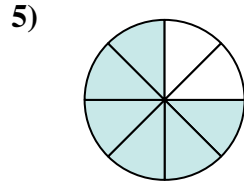
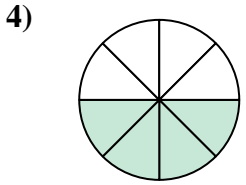
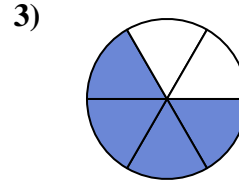
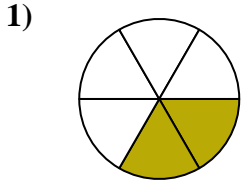
Answers



1. _____
2. _____
3. _____
4. _____
5. _____
6. _____
7. _____
8. _____
9. _____
10. _____
11. _____
12. _____
13. _____
14. _____
15. _____
16. _____
17. _____
18. _____



Write the shaded amount as a fraction of the whole amount.



Answers

1. $\frac{2}{6}$

2. $\frac{7}{8}$

3. $\frac{4}{6}$

4. $\frac{4}{8}$

5. $\frac{6}{8}$

6. $\frac{1}{6}$

7. $\frac{3}{8}$

8. $\frac{2}{4}$

9. $\frac{2}{3}$

10. $\frac{1}{3}$

11. $\frac{3}{4}$

12. $\frac{1}{8}$

13. $\frac{2}{8}$

14. $\frac{1}{4}$

15. $\frac{5}{8}$

16. $\frac{5}{6}$

17. $\frac{1}{2}$

18. $\frac{3}{8}$