



Use the visual model to solve each problem.

$$4\frac{3}{5} - 2\frac{4}{5} = ?$$

To solve a fraction subtraction problem one strategy is to shade in the starting amount first

( $4\frac{3}{5}$ )



Next mark off the wholes (2).



Finally mark off the fraction  $\frac{4}{5}$ .



Now we can see that  $4\frac{3}{5} - 2\frac{4}{5} = 1\frac{4}{5}$

1)  $6\frac{2}{3} - 3\frac{1}{3} =$

2)  $7\frac{4}{5} - 5\frac{3}{5} =$

3)  $3\frac{10}{12} - 1\frac{1}{12} =$

4)  $7\frac{1}{5} - 1\frac{2}{5} =$

5)  $4\frac{10}{12} - 2\frac{3}{12} =$

6)  $3\frac{3}{4} - 1\frac{2}{4} =$

7)  $5\frac{4}{5} - 1\frac{4}{5} =$

8)  $7\frac{2}{4} - 1\frac{1}{4} =$

9)  $5\frac{1}{6} - 2\frac{1}{6} =$

10)  $5\frac{3}{10} - 3\frac{6}{10} =$

## Answers

1. \_\_\_\_\_

2. \_\_\_\_\_

3. \_\_\_\_\_

4. \_\_\_\_\_

5. \_\_\_\_\_

6. \_\_\_\_\_

7. \_\_\_\_\_

8. \_\_\_\_\_

9. \_\_\_\_\_

10. \_\_\_\_\_



Use the visual model to solve each problem.

$$4 \frac{3}{5} - 2 \frac{4}{5} = ?$$

To solve a fraction subtraction problem one strategy is to shade in the starting amount first

$$(4 \frac{3}{5})$$



Next mark off the wholes (2).



Finally mark off the fraction 4/5.



$$\text{Now we can see that } 4 \frac{3}{5} - 2 \frac{4}{5} = 1 \frac{4}{5}$$

1)  $6 \frac{2}{3} - 3 \frac{1}{3} =$

2)  $7 \frac{4}{5} - 5 \frac{3}{5} =$

3)  $3 \frac{10}{12} - 1 \frac{1}{12} =$

4)  $7 \frac{1}{5} - 1 \frac{2}{5} =$

5)  $4 \frac{10}{12} - 2 \frac{3}{12} =$

6)  $3 \frac{3}{4} - 1 \frac{2}{4} =$

7)  $5 \frac{4}{5} - 1 \frac{4}{5} =$

8)  $7 \frac{2}{4} - 1 \frac{1}{4} =$

9)  $5 \frac{1}{6} - 2 \frac{1}{6} =$

10)  $5 \frac{3}{10} - 3 \frac{6}{10} =$

## Answers

1.  $3 \frac{1}{3}$

2.  $2 \frac{1}{5}$

3.  $2 \frac{9}{12}$

4.  $5 \frac{4}{5}$

5.  $2 \frac{7}{12}$

6.  $2 \frac{1}{4}$

7.  $4 \frac{0}{5}$

8.  $6 \frac{1}{4}$

9.  $3 \frac{0}{6}$

10.  $1 \frac{7}{10}$



Use the visual model to solve each problem.

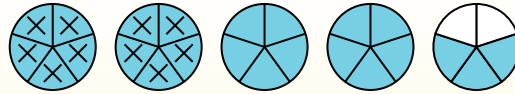
$$4 \frac{3}{5} - 2 \frac{4}{5} = ?$$

To solve a fraction subtraction problem one strategy is to shade in the starting amount first

(4  $\frac{3}{5}$ )



Next mark off the wholes (2).



Finally mark off the fraction  $\frac{4}{5}$ .



Now we can see that  $4 \frac{3}{5} - 2 \frac{4}{5} = 1 \frac{4}{5}$

**Answers**

1. \_\_\_\_\_
2. \_\_\_\_\_
3. \_\_\_\_\_
4. \_\_\_\_\_
5. \_\_\_\_\_
6. \_\_\_\_\_
7. \_\_\_\_\_
8. \_\_\_\_\_
9. \_\_\_\_\_
10. \_\_\_\_\_

1)  $7 \frac{2}{3} - 3 \frac{2}{3} =$

2)  $7 \frac{4}{6} - 5 \frac{4}{6} =$

3)  $5 \frac{6}{8} - 2 \frac{7}{8} =$

4)  $4 \frac{2}{5} - 1 \frac{1}{5} =$

5)  $7 \frac{6}{10} - 2 \frac{3}{10} =$

6)  $7 \frac{2}{4} - 4 \frac{2}{4} =$

7)  $6 \frac{2}{4} - 2 \frac{2}{4} =$

8)  $6 \frac{5}{12} - 3 \frac{4}{12} =$

9)  $6 \frac{1}{6} - 3 \frac{4}{6} =$

10)  $6 \frac{5}{10} - 3 \frac{7}{10} =$



Use the visual model to solve each problem.

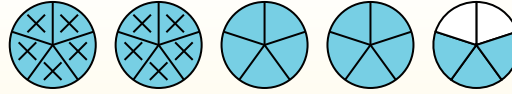
$$4 \frac{3}{5} - 2 \frac{4}{5} = ?$$

To solve a fraction subtraction problem one strategy is to shade in the starting amount first

(4 <sup>3</sup>/<sub>5</sub>)



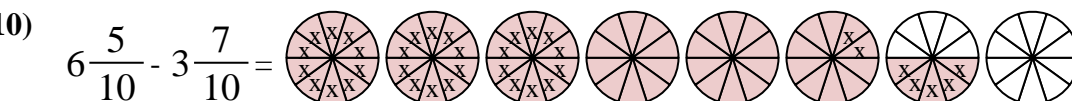
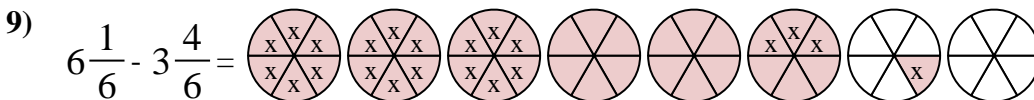
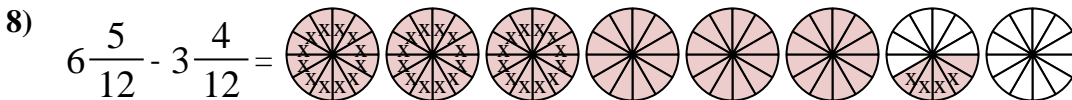
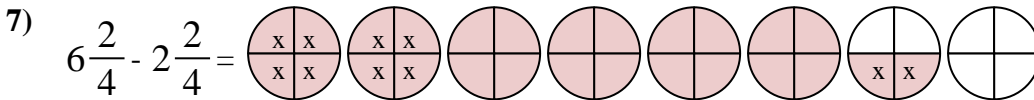
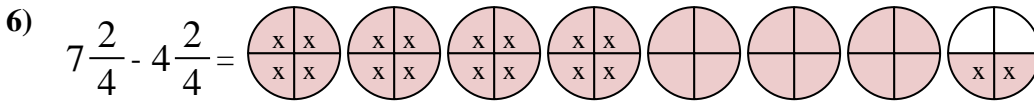
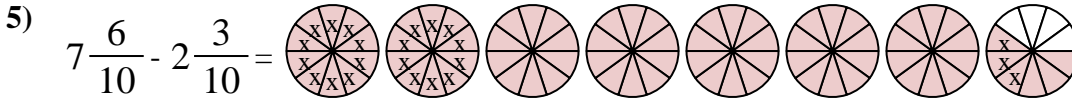
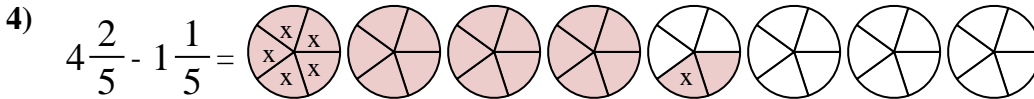
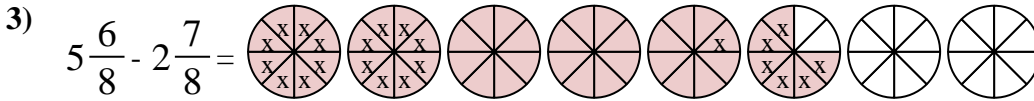
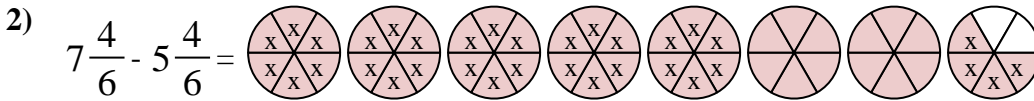
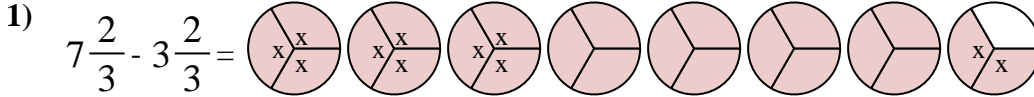
Next mark off the wholes (2).



Finally mark off the fraction 4/5.



Now we can see that  $4 \frac{3}{5} - 2 \frac{4}{5} = 1 \frac{4}{5}$



Answers

1.  $4 \frac{0}{3}$

2.  $2 \frac{0}{6}$

3.  $2 \frac{7}{8}$

4.  $3 \frac{1}{5}$

5.  $5 \frac{3}{10}$

6.  $3 \frac{0}{4}$

7.  $4 \frac{0}{4}$

8.  $3 \frac{1}{12}$

9.  $2 \frac{3}{6}$

10.  $2 \frac{8}{10}$



Use the visual model to solve each problem.

$$4 \frac{3}{5} - 2 \frac{4}{5} = ?$$

To solve a fraction subtraction problem one strategy is to shade in the starting amount first

(4 <sup>3</sup>/<sub>5</sub>)



Next mark off the wholes (2).



Finally mark off the fraction <sup>4</sup>/<sub>5</sub>.



Now we can see that  $4 \frac{3}{5} - 2 \frac{4}{5} = 1 \frac{4}{5}$

**Answers**

1. \_\_\_\_\_
2. \_\_\_\_\_
3. \_\_\_\_\_
4. \_\_\_\_\_
5. \_\_\_\_\_
6. \_\_\_\_\_
7. \_\_\_\_\_
8. \_\_\_\_\_
9. \_\_\_\_\_
10. \_\_\_\_\_

1)  $6 \frac{5}{6} - 1 \frac{5}{6} =$

2)  $7 \frac{2}{10} - 3 \frac{7}{10} =$

3)  $4 \frac{9}{10} - 1 \frac{1}{10} =$

4)  $6 \frac{7}{8} - 4 \frac{1}{8} =$

5)  $4 \frac{5}{12} - 1 \frac{8}{12} =$

6)  $5 \frac{4}{10} - 3 \frac{2}{10} =$

7)  $4 \frac{8}{12} - 1 \frac{8}{12} =$

8)  $4 \frac{7}{8} - 2 \frac{4}{8} =$

9)  $3 \frac{2}{3} - 1 \frac{2}{3} =$

10)  $3 \frac{1}{3} - 1 \frac{2}{3} =$



Use the visual model to solve each problem.

$$4 \frac{3}{5} - 2 \frac{4}{5} = ?$$

To solve a fraction subtraction problem one strategy is to shade in the starting amount first

( $4 \frac{3}{5}$ )



Next mark off the wholes (2).



Finally mark off the fraction  $\frac{4}{5}$ .



Now we can see that  $4 \frac{3}{5} - 2 \frac{4}{5} = 1 \frac{4}{5}$

1)  $6 \frac{5}{6} - 1 \frac{5}{6} =$

2)  $7 \frac{2}{10} - 3 \frac{7}{10} =$

3)  $4 \frac{9}{10} - 1 \frac{1}{10} =$

4)  $6 \frac{7}{8} - 4 \frac{1}{8} =$

5)  $4 \frac{5}{12} - 1 \frac{8}{12} =$

6)  $5 \frac{4}{10} - 3 \frac{2}{10} =$

7)  $4 \frac{8}{12} - 1 \frac{8}{12} =$

8)  $4 \frac{7}{8} - 2 \frac{4}{8} =$

9)  $3 \frac{2}{3} - 1 \frac{2}{3} =$

10)  $3 \frac{1}{3} - 1 \frac{2}{3} =$

## Answers

1.  $5 \frac{0}{6}$

2.  $3 \frac{5}{10}$

3.  $3 \frac{8}{10}$

4.  $2 \frac{6}{8}$

5.  $2 \frac{9}{12}$

6.  $2 \frac{2}{10}$

7.  $3 \frac{0}{12}$

8.  $2 \frac{3}{8}$

9.  $2 \frac{0}{3}$

10.  $1 \frac{2}{3}$



Use the visual model to solve each problem.

$$4\frac{3}{5} - 2\frac{4}{5} = ?$$

To solve a fraction subtraction problem one strategy is to shade in the starting amount first

( $4\frac{3}{5}$ )



Next mark off the wholes (2).



Finally mark off the fraction  $\frac{4}{5}$ .



Now we can see that  $4\frac{3}{5} - 2\frac{4}{5} = 1\frac{4}{5}$

1)  $6\frac{1}{6} - 3\frac{5}{6} =$

2)  $4\frac{1}{4} - 2\frac{2}{4} =$

3)  $6\frac{1}{5} - 2\frac{2}{5} =$

4)  $5\frac{2}{4} - 1\frac{3}{4} =$

5)  $7\frac{7}{10} - 5\frac{3}{10} =$

6)  $7\frac{11}{12} - 3\frac{5}{12} =$

7)  $6\frac{1}{8} - 3\frac{3}{8} =$

8)  $6\frac{3}{4} - 3\frac{3}{4} =$

9)  $6\frac{2}{4} - 1\frac{1}{4} =$

10)  $6\frac{2}{12} - 4\frac{5}{12} =$

## Answers

1. \_\_\_\_\_

2. \_\_\_\_\_

3. \_\_\_\_\_

4. \_\_\_\_\_

5. \_\_\_\_\_

6. \_\_\_\_\_

7. \_\_\_\_\_

8. \_\_\_\_\_

9. \_\_\_\_\_

10. \_\_\_\_\_



Use the visual model to solve each problem.

$$4 \frac{3}{5} - 2 \frac{4}{5} = ?$$

To solve a fraction subtraction problem one strategy is to shade in the starting amount first

$$(4 \frac{3}{5})$$



Next mark off the wholes (2).



Finally mark off the fraction  $\frac{4}{5}$ .



$$\text{Now we can see that } 4 \frac{3}{5} - 2 \frac{4}{5} = 1 \frac{4}{5}$$

1)  $6 \frac{1}{6} - 3 \frac{5}{6} =$

2)  $4 \frac{1}{4} - 2 \frac{2}{4} =$

3)  $6 \frac{1}{5} - 2 \frac{2}{5} =$

4)  $5 \frac{2}{4} - 1 \frac{3}{4} =$

5)  $7 \frac{7}{10} - 5 \frac{3}{10} =$

6)  $7 \frac{11}{12} - 3 \frac{5}{12} =$

7)  $6 \frac{1}{8} - 3 \frac{3}{8} =$

8)  $6 \frac{3}{4} - 3 \frac{3}{4} =$

9)  $6 \frac{2}{4} - 1 \frac{1}{4} =$

10)  $6 \frac{2}{12} - 4 \frac{5}{12} =$

## Answers

1.  $2 \frac{2}{6}$

2.  $1 \frac{3}{4}$

3.  $3 \frac{4}{5}$

4.  $3 \frac{3}{4}$

5.  $2 \frac{4}{10}$

6.  $4 \frac{6}{12}$

7.  $2 \frac{6}{8}$

8.  $3 \frac{0}{4}$

9.  $5 \frac{1}{4}$

10.  $1 \frac{9}{12}$





Use the visual model to solve each problem.

$4 \frac{3}{5} - 2 \frac{4}{5} = ?$

To solve a fraction subtraction problem one strategy is to shade in the starting amount first

( $4 \frac{3}{5}$ )



Next mark off the wholes (2).



Finally mark off the fraction  $\frac{4}{5}$ .



Now we can see that  $4 \frac{3}{5} - 2 \frac{4}{5} = 1 \frac{4}{5}$

Answers

1. \_\_\_\_\_
2. \_\_\_\_\_
3. \_\_\_\_\_
4. \_\_\_\_\_
5. \_\_\_\_\_
6. \_\_\_\_\_
7. \_\_\_\_\_
8. \_\_\_\_\_
9. \_\_\_\_\_
10. \_\_\_\_\_

1)  $5 \frac{2}{3} - 3 \frac{2}{3} =$

2)  $3 \frac{1}{4} - 1 \frac{1}{4} =$

3)  $7 \frac{2}{5} - 2 \frac{4}{5} =$

4)  $4 \frac{4}{5} - 2 \frac{3}{5} =$

5)  $3 \frac{5}{10} - 1 \frac{6}{10} =$

6)  $6 \frac{8}{10} - 4 \frac{3}{10} =$

7)  $4 \frac{3}{4} - 1 \frac{1}{4} =$

8)  $5 \frac{1}{3} - 2 \frac{1}{3} =$

9)  $5 \frac{2}{4} - 3 \frac{3}{4} =$

10)  $4 \frac{1}{3} - 1 \frac{1}{3} =$



Use the visual model to solve each problem.

$$4 \frac{3}{5} - 2 \frac{4}{5} = ?$$

To solve a fraction subtraction problem one strategy is to shade in the starting amount first

(4  $\frac{3}{5}$ )



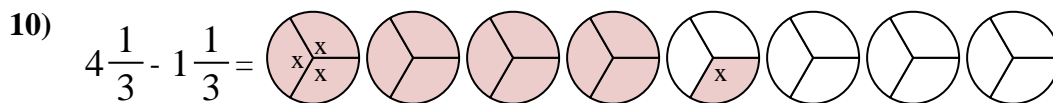
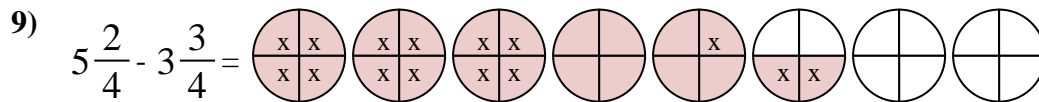
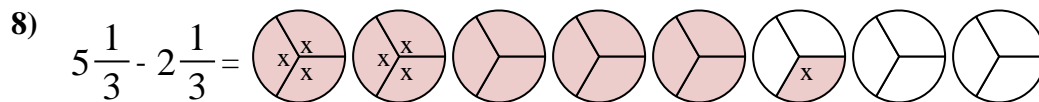
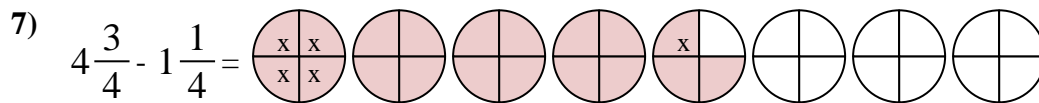
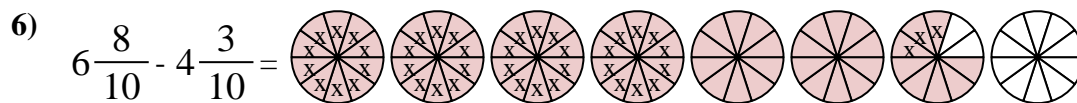
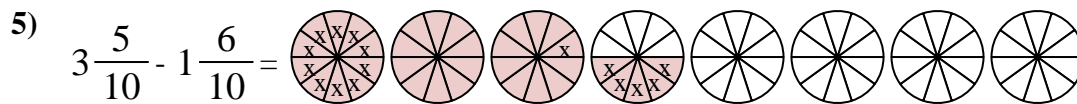
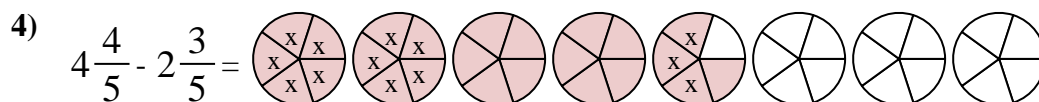
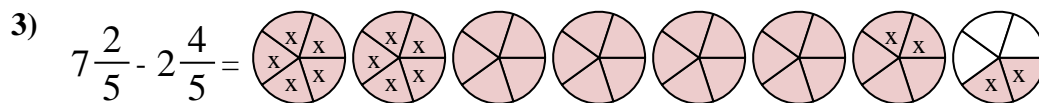
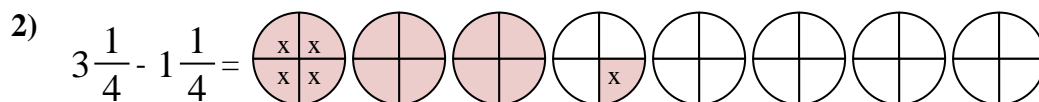
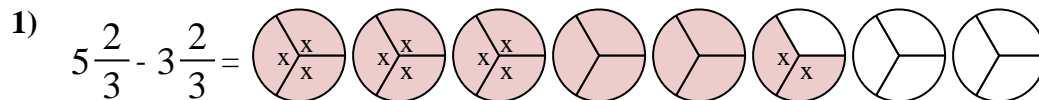
Next mark off the wholes (2).



Finally mark off the fraction  $\frac{4}{5}$ .



Now we can see that  $4 \frac{3}{5} - 2 \frac{4}{5} = 1 \frac{4}{5}$



## Answers

1.  $2 \frac{0}{3}$

2.  $2 \frac{0}{4}$

3.  $4 \frac{3}{5}$

4.  $2 \frac{1}{5}$

5.  $1 \frac{9}{10}$

6.  $2 \frac{5}{10}$

7.  $3 \frac{2}{4}$

8.  $3 \frac{0}{3}$

9.  $1 \frac{3}{4}$

10.  $3 \frac{0}{3}$



Use the visual model to solve each problem.

$$4\frac{3}{5} - 2\frac{4}{5} = ?$$

To solve a fraction subtraction problem one strategy is to shade in the starting amount first

( $4\frac{3}{5}$ )



Next mark off the wholes (2).



Finally mark off the fraction  $\frac{4}{5}$ .



Now we can see that  $4\frac{3}{5} - 2\frac{4}{5} = 1\frac{4}{5}$

1)  $7\frac{5}{6} - 2\frac{1}{6} =$

2)  $6\frac{2}{4} - 1\frac{2}{4} =$

3)  $4\frac{4}{5} - 2\frac{3}{5} =$

4)  $4\frac{5}{10} - 1\frac{7}{10} =$

5)  $4\frac{3}{12} - 2\frac{6}{12} =$

6)  $4\frac{1}{3} - 1\frac{1}{3} =$

7)  $6\frac{1}{4} - 4\frac{1}{4} =$

8)  $3\frac{2}{5} - 1\frac{4}{5} =$

9)  $3\frac{8}{10} - 1\frac{1}{10} =$

10)  $3\frac{3}{6} - 1\frac{3}{6} =$

## Answers

1. \_\_\_\_\_

2. \_\_\_\_\_

3. \_\_\_\_\_

4. \_\_\_\_\_

5. \_\_\_\_\_

6. \_\_\_\_\_

7. \_\_\_\_\_

8. \_\_\_\_\_

9. \_\_\_\_\_

10. \_\_\_\_\_



Use the visual model to solve each problem.

$$4\frac{3}{5} - 2\frac{4}{5} = ?$$

To solve a fraction subtraction problem one strategy is to shade in the starting amount first

$$(4\frac{3}{5})$$



Next mark off the wholes (2).



Finally mark off the fraction  $\frac{4}{5}$ .



$$\text{Now we can see that } 4\frac{3}{5} - 2\frac{4}{5} = 1\frac{4}{5}$$

1)  $7\frac{5}{6} - 2\frac{1}{6} =$

2)  $6\frac{2}{4} - 1\frac{2}{4} =$

3)  $4\frac{4}{5} - 2\frac{3}{5} =$

4)  $4\frac{5}{10} - 1\frac{7}{10} =$

5)  $4\frac{3}{12} - 2\frac{6}{12} =$

6)  $4\frac{1}{3} - 1\frac{1}{3} =$

7)  $6\frac{1}{4} - 4\frac{1}{4} =$

8)  $3\frac{2}{5} - 1\frac{4}{5} =$

9)  $3\frac{8}{10} - 1\frac{1}{10} =$

10)  $3\frac{3}{6} - 1\frac{3}{6} =$

## Answers

1.  $5\frac{4}{6}$

2.  $5\frac{0}{4}$

3.  $2\frac{1}{5}$

4.  $2\frac{8}{10}$

5.  $1\frac{9}{12}$

6.  $3\frac{0}{3}$

7.  $2\frac{0}{4}$

8.  $1\frac{3}{5}$

9.  $2\frac{7}{10}$

10.  $2\frac{0}{6}$



Use the visual model to solve each problem.

$4 \frac{3}{5} - 2 \frac{4}{5} = ?$

To solve a fraction subtraction problem one strategy is to shade in the starting amount first

( $4 \frac{3}{5}$ )



Next mark off the wholes (2).



Finally mark off the fraction  $\frac{4}{5}$ .



Now we can see that  $4 \frac{3}{5} - 2 \frac{4}{5} = 1 \frac{4}{5}$

**Answers**

1. \_\_\_\_\_
2. \_\_\_\_\_
3. \_\_\_\_\_
4. \_\_\_\_\_
5. \_\_\_\_\_
6. \_\_\_\_\_
7. \_\_\_\_\_
8. \_\_\_\_\_
9. \_\_\_\_\_
10. \_\_\_\_\_

1)  $5 \frac{1}{5} - 2 \frac{4}{5} =$

2)  $5 \frac{1}{5} - 3 \frac{3}{5} =$

3)  $3 \frac{1}{4} - 1 \frac{1}{4} =$

4)  $6 \frac{9}{12} - 3 \frac{2}{12} =$

5)  $4 \frac{7}{10} - 1 \frac{1}{10} =$

6)  $6 \frac{1}{4} - 1 \frac{3}{4} =$

7)  $5 \frac{7}{8} - 1 \frac{2}{8} =$

8)  $4 \frac{3}{5} - 1 \frac{2}{5} =$

9)  $4 \frac{11}{12} - 1 \frac{10}{12} =$

10)  $3 \frac{7}{10} - 1 \frac{4}{10} =$



Use the visual model to solve each problem.

$$4\frac{3}{5} - 2\frac{4}{5} = ?$$

To solve a fraction subtraction problem one strategy is to shade in the starting amount first

$$(4\frac{3}{5})$$



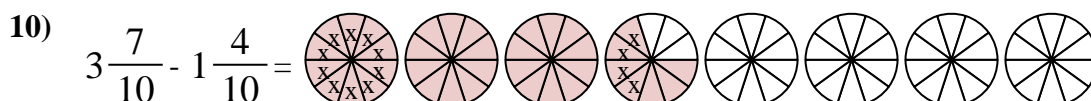
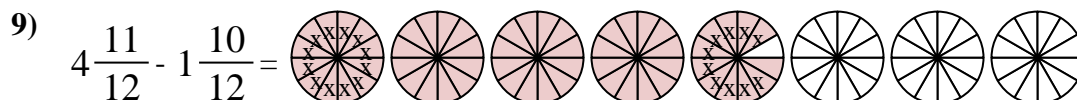
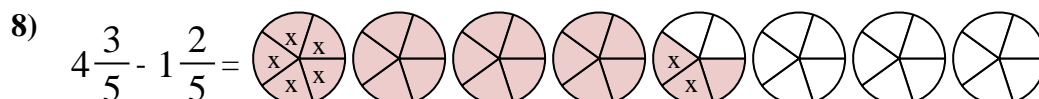
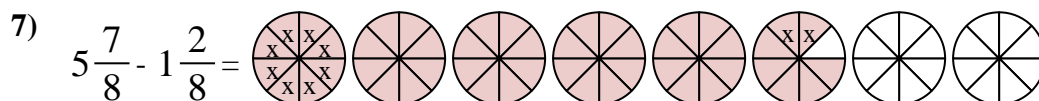
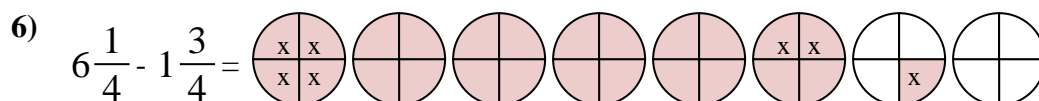
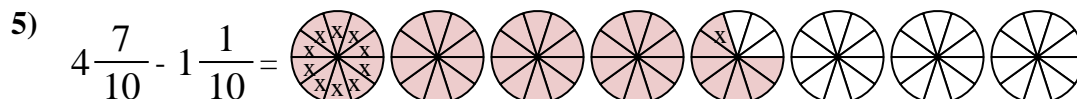
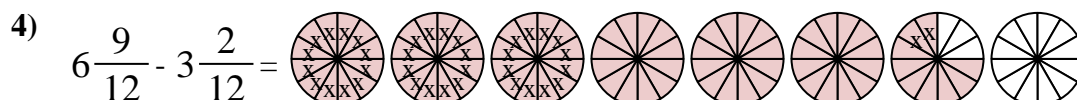
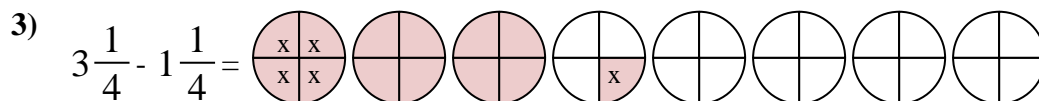
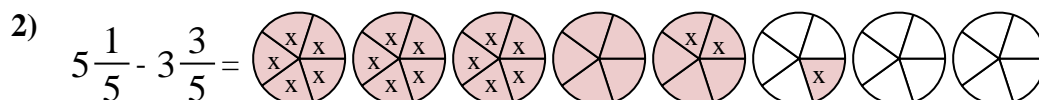
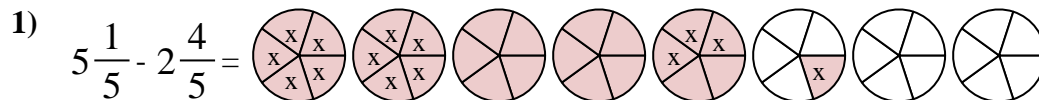
Next mark off the wholes (2).



Finally mark off the fraction 4/5.



$$\text{Now we can see that } 4\frac{3}{5} - 2\frac{4}{5} = 1\frac{4}{5}$$



## Answers

1.  $2\frac{2}{5}$

2.  $1\frac{3}{5}$

3.  $2\frac{0}{4}$

4.  $3\frac{7}{12}$

5.  $3\frac{6}{10}$

6.  $4\frac{2}{4}$

7.  $4\frac{5}{8}$

8.  $3\frac{1}{5}$

9.  $3\frac{1}{12}$

10.  $2\frac{3}{10}$



Use the visual model to solve each problem.

$$4 \frac{3}{5} - 2 \frac{4}{5} = ?$$

To solve a fraction subtraction problem one strategy is to shade in the starting amount first

(4  $\frac{3}{5}$ )



Next mark off the wholes (2).



Finally mark off the fraction  $\frac{4}{5}$ .



Now we can see that  $4 \frac{3}{5} - 2 \frac{4}{5} = 1 \frac{4}{5}$

1)  $6 \frac{8}{10} - 4 \frac{1}{10} =$

2)  $6 \frac{6}{8} - 1 \frac{4}{8} =$

3)  $4 \frac{2}{8} - 2 \frac{4}{8} =$

4)  $3 \frac{9}{12} - 1 \frac{5}{12} =$

5)  $4 \frac{5}{8} - 1 \frac{5}{8} =$

6)  $4 \frac{6}{8} - 2 \frac{6}{8} =$

7)  $4 \frac{4}{5} - 2 \frac{4}{5} =$

8)  $3 \frac{1}{8} - 1 \frac{3}{8} =$

9)  $3 \frac{2}{6} - 1 \frac{5}{6} =$

10)  $3 \frac{2}{8} - 1 \frac{2}{8} =$

**Answers**

1. \_\_\_\_\_
2. \_\_\_\_\_
3. \_\_\_\_\_
4. \_\_\_\_\_
5. \_\_\_\_\_
6. \_\_\_\_\_
7. \_\_\_\_\_
8. \_\_\_\_\_
9. \_\_\_\_\_
10. \_\_\_\_\_



Use the visual model to solve each problem.

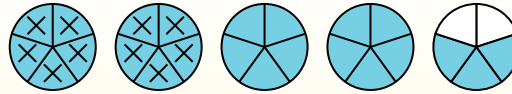
$$4 \frac{3}{5} - 2 \frac{4}{5} = ?$$

To solve a fraction subtraction problem one strategy is to shade in the starting amount first

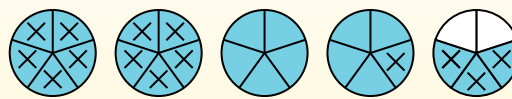
(4 <sup>3</sup>/<sub>5</sub>)



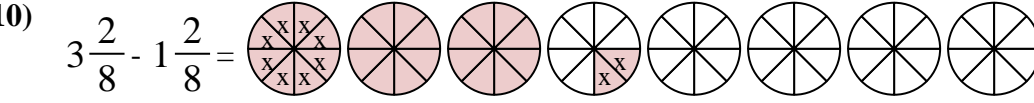
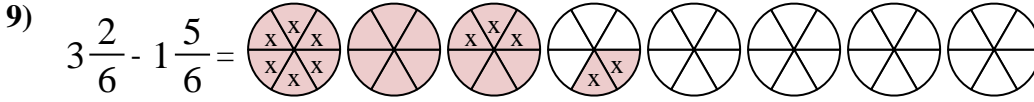
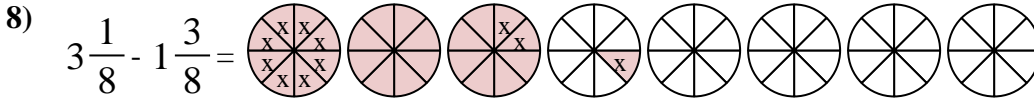
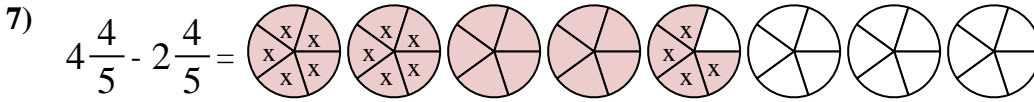
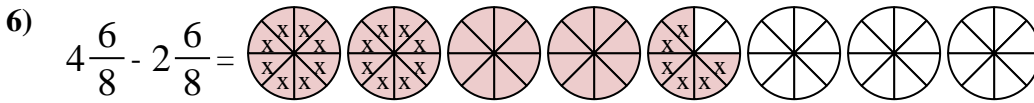
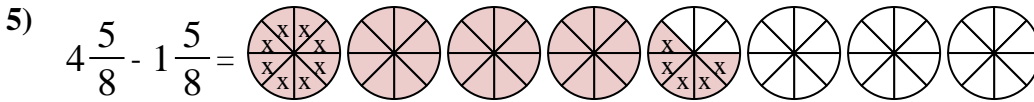
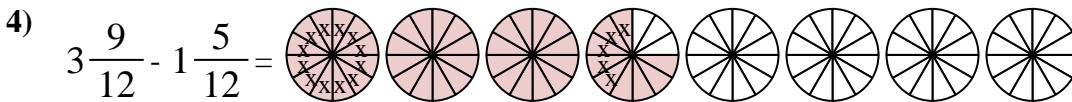
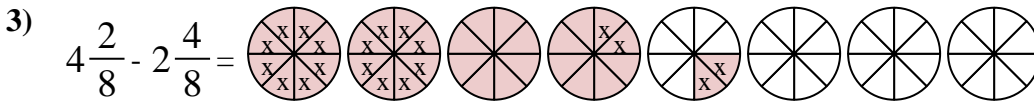
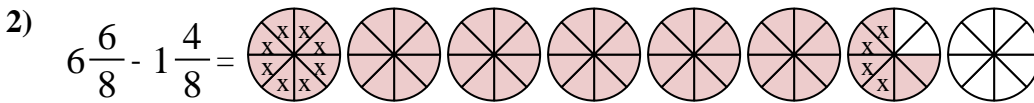
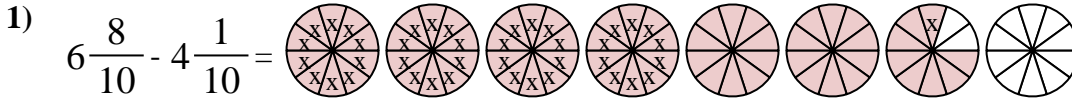
Next mark off the wholes (2).



Finally mark off the fraction <sup>4</sup>/<sub>5</sub>.



Now we can see that  $4 \frac{3}{5} - 2 \frac{4}{5} = 1 \frac{4}{5}$



Answers

1. 2<sup>7</sup>/<sub>10</sub>

2. 5<sup>2</sup>/<sub>8</sub>

3. 1<sup>6</sup>/<sub>8</sub>

4. 2<sup>4</sup>/<sub>12</sub>

5. 3<sup>0</sup>/<sub>8</sub>

6. 2<sup>0</sup>/<sub>8</sub>

7. 2<sup>0</sup>/<sub>5</sub>

8. 1<sup>6</sup>/<sub>8</sub>

9. 1<sup>3</sup>/<sub>6</sub>

10. 2<sup>0</sup>/<sub>8</sub>





Use the visual model to solve each problem.

$$4 \frac{3}{5} - 2 \frac{4}{5} = ?$$

To solve a fraction subtraction problem one strategy is to shade in the starting amount first

( $4 \frac{3}{5}$ )



Next mark off the wholes (2).



Finally mark off the fraction  $\frac{4}{5}$ .



Now we can see that  $4 \frac{3}{5} - 2 \frac{4}{5} = 1 \frac{4}{5}$

1)  $6 \frac{7}{8} - 2 \frac{3}{8} =$

2)  $5 \frac{2}{3} - 3 \frac{1}{3} =$

3)  $4 \frac{3}{6} - 2 \frac{4}{6} =$

4)  $3 \frac{1}{5} - 1 \frac{4}{5} =$

5)  $3 \frac{4}{5} - 1 \frac{3}{5} =$

6)  $7 \frac{1}{3} - 4 \frac{1}{3} =$

7)  $6 \frac{3}{4} - 4 \frac{2}{4} =$

8)  $6 \frac{3}{4} - 3 \frac{1}{4} =$

9)  $3 \frac{10}{12} - 1 \frac{10}{12} =$

10)  $7 \frac{1}{10} - 2 \frac{1}{10} =$

## Answers

1. \_\_\_\_\_

2. \_\_\_\_\_

3. \_\_\_\_\_

4. \_\_\_\_\_

5. \_\_\_\_\_

6. \_\_\_\_\_

7. \_\_\_\_\_

8. \_\_\_\_\_

9. \_\_\_\_\_

10. \_\_\_\_\_



Use the visual model to solve each problem.

$$4 \frac{3}{5} - 2 \frac{4}{5} = ?$$

To solve a fraction subtraction problem one strategy is to shade in the starting amount first

$$(4 \frac{3}{5})$$



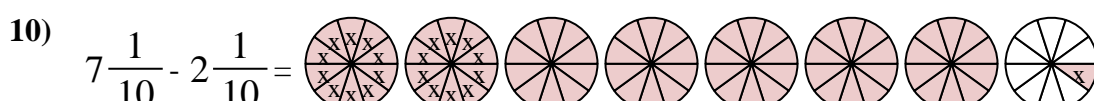
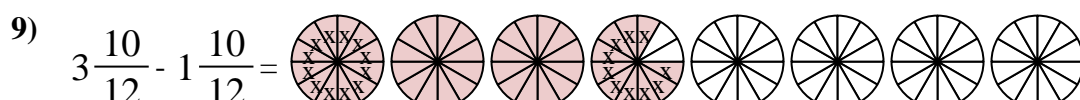
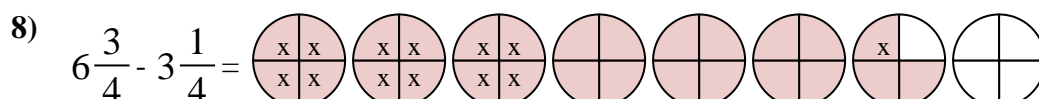
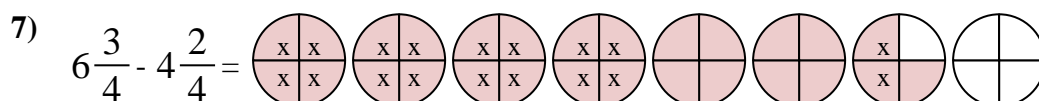
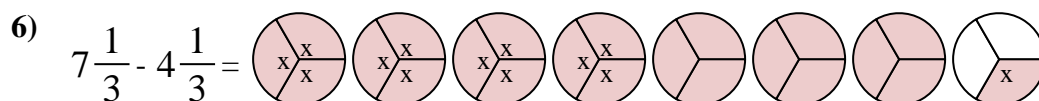
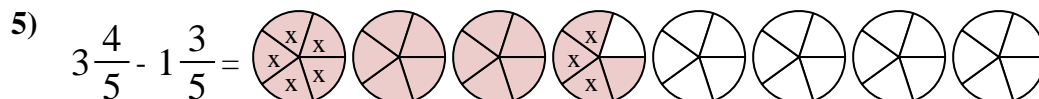
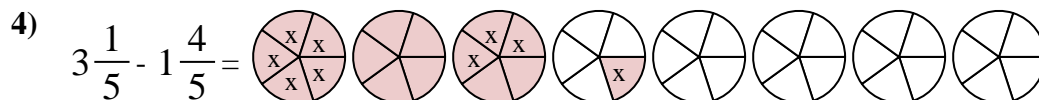
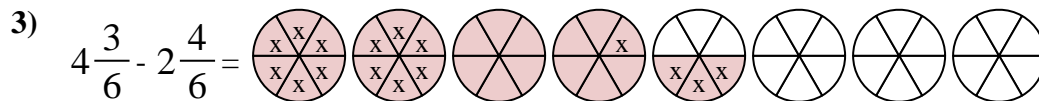
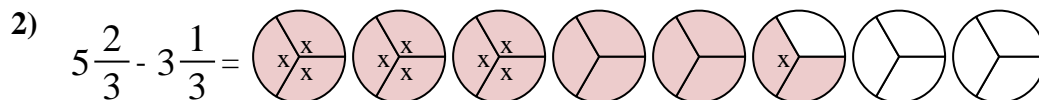
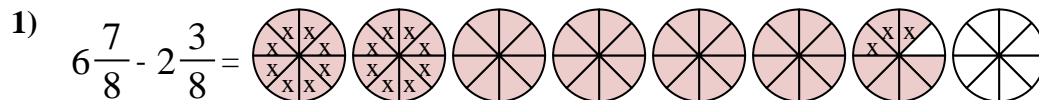
Next mark off the wholes (2).



Finally mark off the fraction 4/5.



$$\text{Now we can see that } 4 \frac{3}{5} - 2 \frac{4}{5} = 1 \frac{4}{5}$$



## Answers

1.  $4 \frac{4}{8}$

2.  $2 \frac{1}{3}$

3.  $1 \frac{5}{6}$

4.  $1 \frac{2}{5}$

5.  $2 \frac{1}{5}$

6.  $3 \frac{0}{3}$

7.  $2 \frac{1}{4}$

8.  $3 \frac{2}{4}$

9.  $2 \frac{0}{12}$

10.  $5 \frac{0}{10}$



Use the visual model to solve each problem.

$$4 \frac{3}{5} - 2 \frac{4}{5} = ?$$

To solve a fraction subtraction problem one strategy is to shade in the starting amount first

(4  $\frac{3}{5}$ )



Next mark off the wholes (2).



Finally mark off the fraction  $\frac{4}{5}$ .



$$\text{Now we can see that } 4 \frac{3}{5} - 2 \frac{4}{5} = 1 \frac{4}{5}$$

1)  $4 \frac{2}{8} - 2 \frac{7}{8} =$

2)  $4 \frac{2}{4} - 1 \frac{2}{4} =$

3)  $4 \frac{1}{5} - 1 \frac{2}{5} =$

4)  $4 \frac{2}{6} - 2 \frac{5}{6} =$

5)  $7 \frac{1}{12} - 1 \frac{10}{12} =$

6)  $6 \frac{1}{4} - 3 \frac{1}{4} =$

7)  $7 \frac{1}{3} - 4 \frac{2}{3} =$

8)  $5 \frac{6}{10} - 2 \frac{4}{10} =$

9)  $7 \frac{2}{3} - 2 \frac{2}{3} =$

10)  $7 \frac{2}{4} - 1 \frac{1}{4} =$

Answers

1. \_\_\_\_\_
2. \_\_\_\_\_
3. \_\_\_\_\_
4. \_\_\_\_\_
5. \_\_\_\_\_
6. \_\_\_\_\_
7. \_\_\_\_\_
8. \_\_\_\_\_
9. \_\_\_\_\_
10. \_\_\_\_\_



Use the visual model to solve each problem.

$$4\frac{3}{5} - 2\frac{4}{5} = ?$$

To solve a fraction subtraction problem one strategy is to shade in the starting amount first

( $4\frac{3}{5}$ )



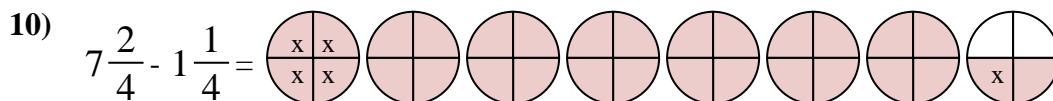
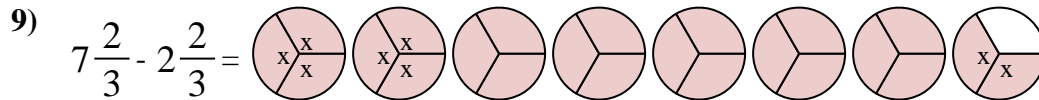
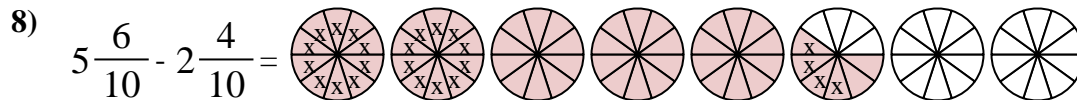
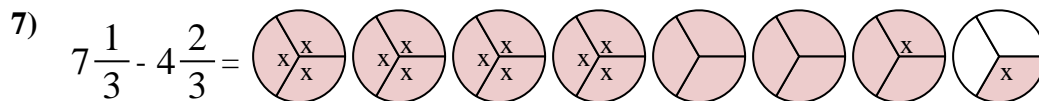
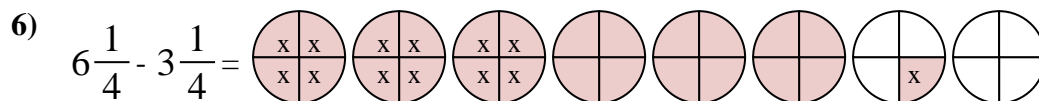
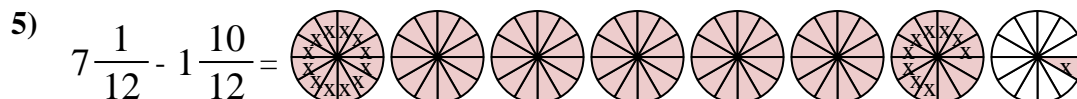
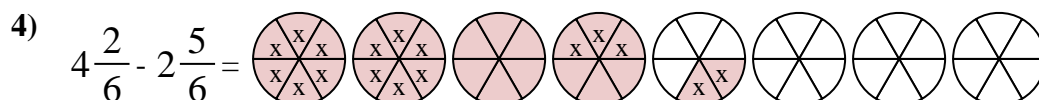
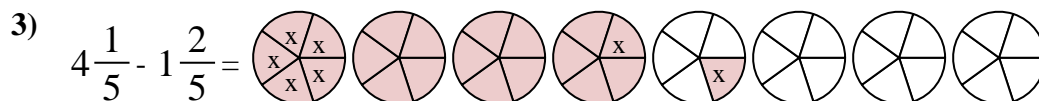
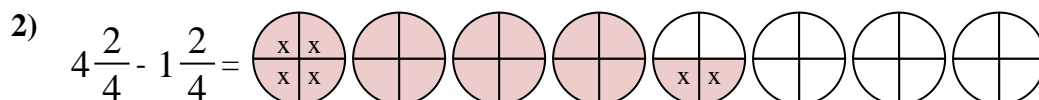
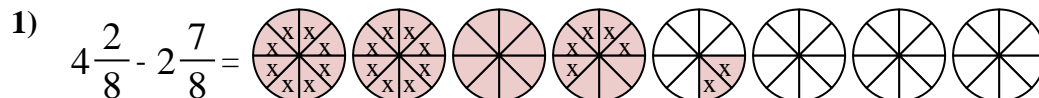
Next mark off the wholes (2).



Finally mark off the fraction  $\frac{4}{5}$ .



Now we can see that  $4\frac{3}{5} - 2\frac{4}{5} = 1\frac{4}{5}$



## Answers

1.            $1\frac{3}{8}$           

2.            $3\frac{0}{4}$           

3.            $2\frac{4}{5}$           

4.            $1\frac{3}{6}$           

5.            $5\frac{3}{12}$           

6.            $3\frac{0}{4}$           

7.            $2\frac{2}{3}$           

8.            $3\frac{2}{10}$           

9.            $5\frac{0}{3}$           

10.            $6\frac{1}{4}$