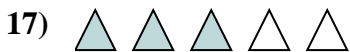
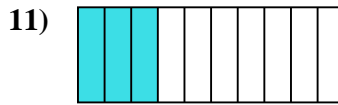
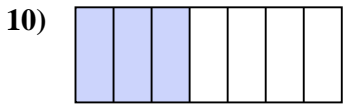
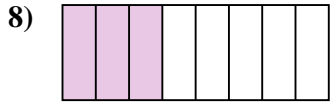
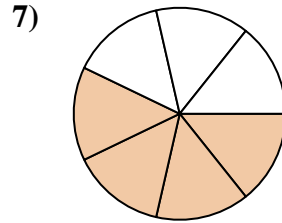
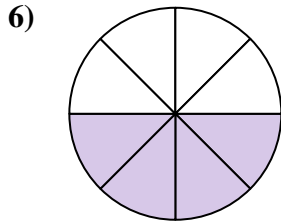
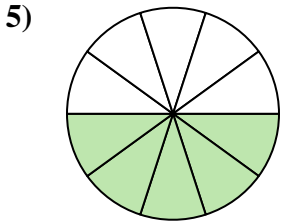


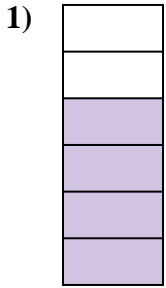




Determine if the shaded amount is 'more', 'less' or 'equal' to half.

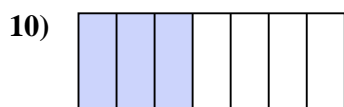

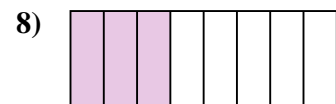
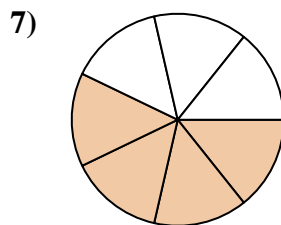
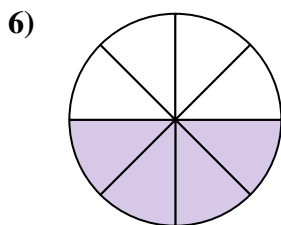
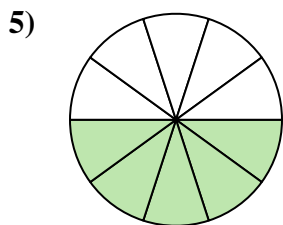
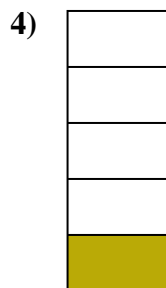

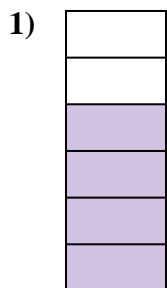
Answers



1. \_\_\_\_\_
2. \_\_\_\_\_
3. \_\_\_\_\_
4. \_\_\_\_\_
5. \_\_\_\_\_
6. \_\_\_\_\_
7. \_\_\_\_\_
8. \_\_\_\_\_
9. \_\_\_\_\_
10. \_\_\_\_\_
11. \_\_\_\_\_
12. \_\_\_\_\_
13. \_\_\_\_\_
14. \_\_\_\_\_
15. \_\_\_\_\_
16. \_\_\_\_\_
17. \_\_\_\_\_
18. \_\_\_\_\_
19. \_\_\_\_\_
20. \_\_\_\_\_



Determine if the shaded amount is 'more', 'less' or 'equal' to half.



Answers

1. more

2. less

3. equal

4. less

5. equal

6. equal

7. more

8. less

9. more

10. less

11. less

12. less

13. more

14. more

15. less

16. more

17. more

18. more

19. more

20. equal