


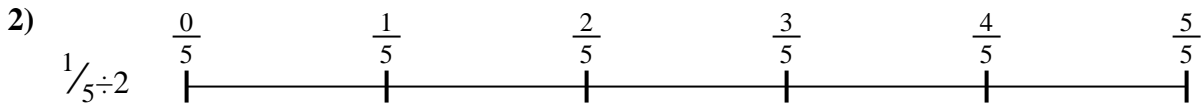


Use the numberline to solve each problem. The first is marked for you.

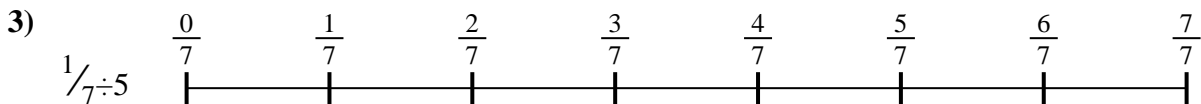
Answers



1. _____



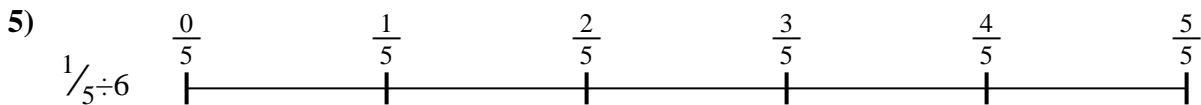
2. _____




3. _____



4. _____




5. _____



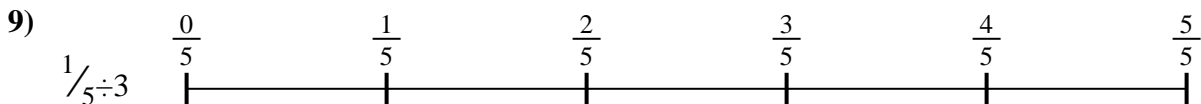
6. _____



7. _____



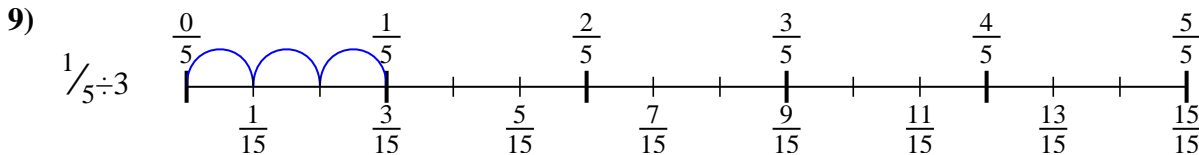
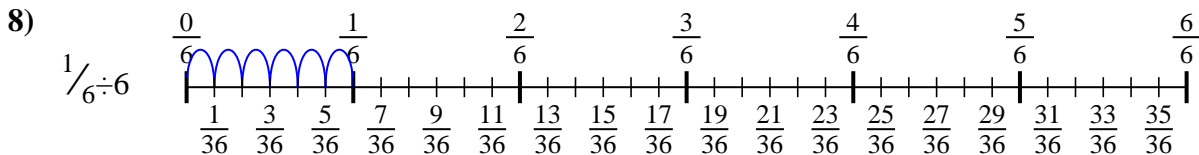
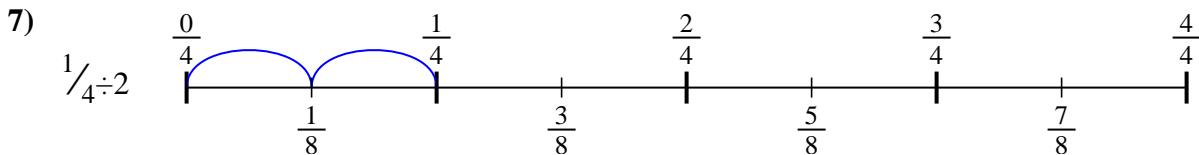
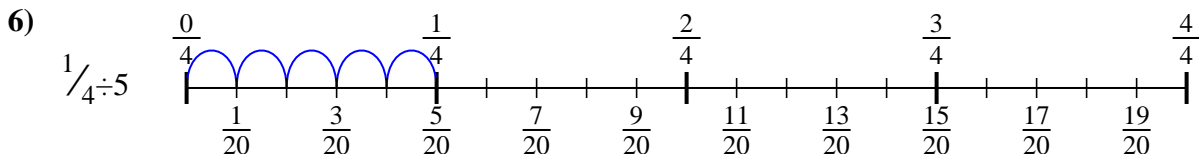
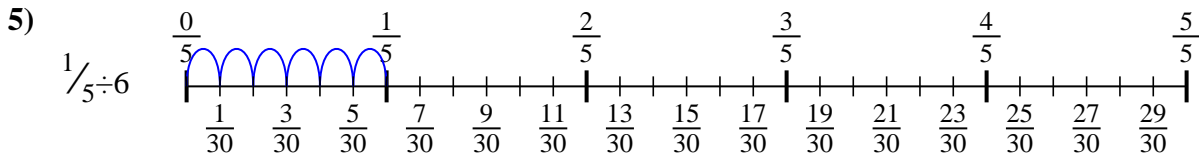
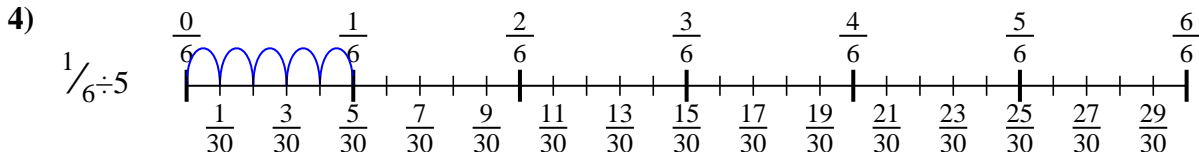
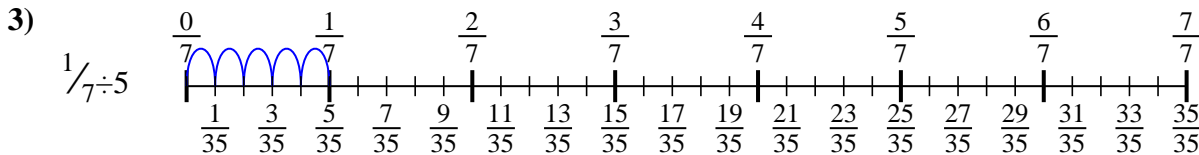
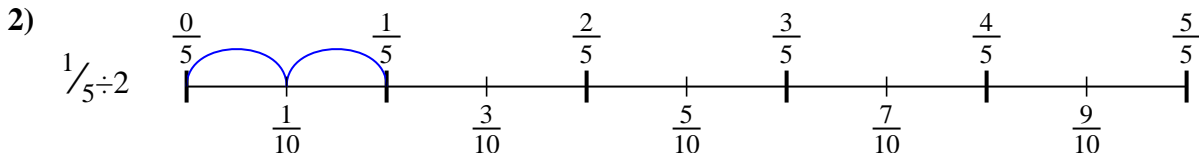
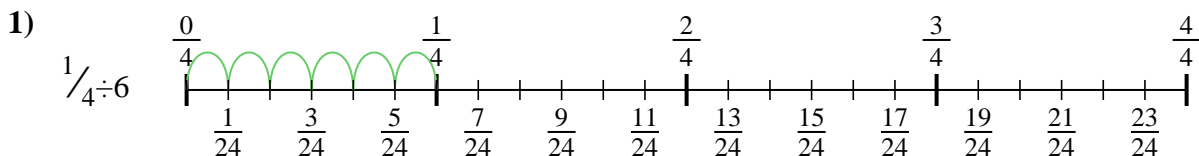
8. _____



9. _____



Use the numberline to solve each problem. The first is marked for you.



Answers

1. $\frac{1}{24}$

2. $\frac{1}{10}$

3. $\frac{1}{35}$

4. $\frac{1}{30}$

5. $\frac{1}{30}$

6. $\frac{1}{20}$

7. $\frac{1}{8}$

8. $\frac{1}{36}$

9. $\frac{1}{15}$



Use the numberline to solve each problem. The first is marked for you.

Answers

$\frac{1}{30}$

$\frac{1}{36}$

$\frac{1}{20}$

$\frac{1}{8}$

$\frac{1}{15}$

$\frac{1}{24}$

$\frac{1}{30}$

$\frac{1}{35}$

$\frac{1}{10}$

1. _____

2. _____

3. _____

4. _____

5. _____

6. _____

7. _____

8. _____

9. _____

