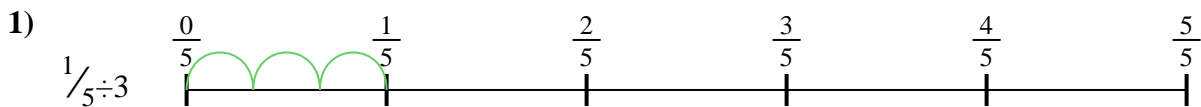


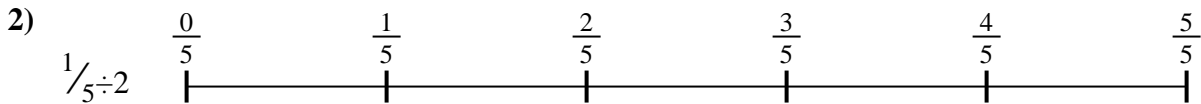


Use the numberline to solve each problem. The first is marked for you.

Answers



1. _____




2. _____



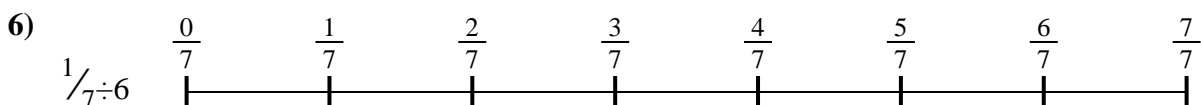
3. _____




4. _____




5. _____



6. _____



7. _____



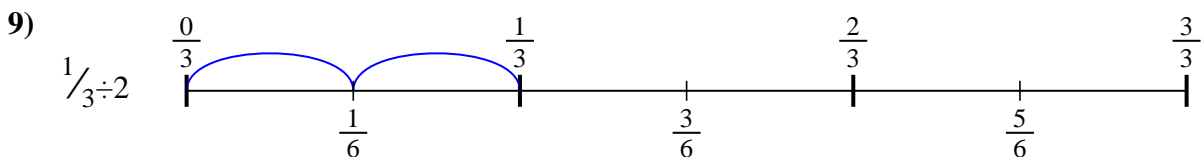
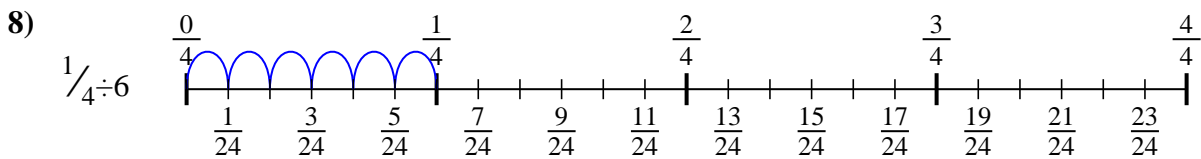
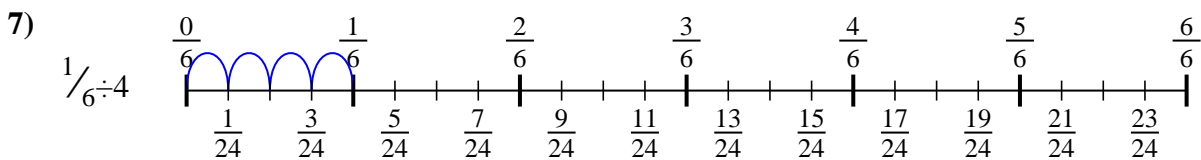
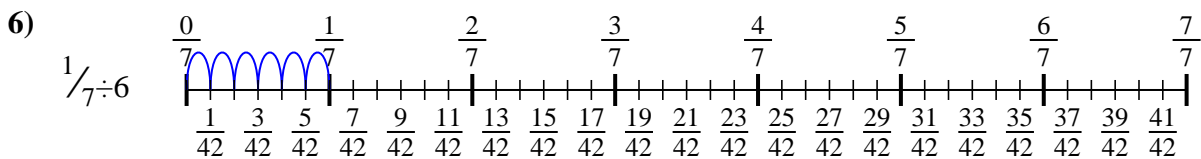
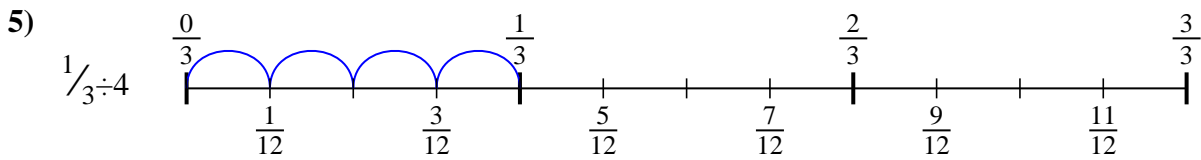
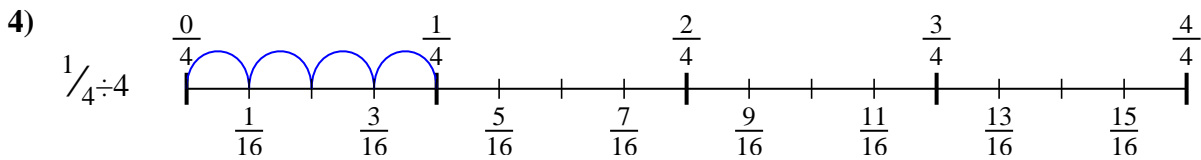
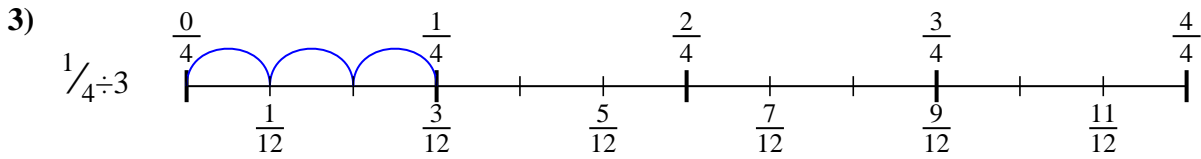
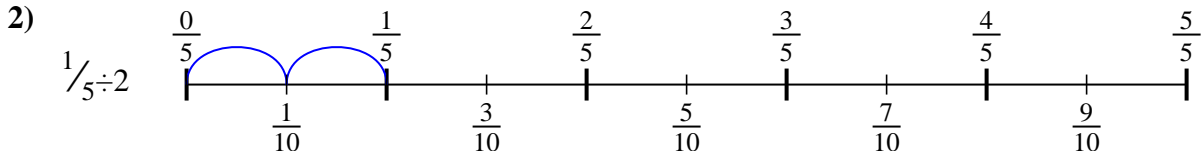
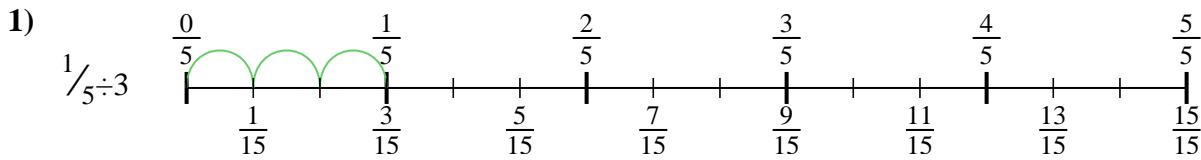
8. _____



9. _____



Use the numberline to solve each problem. The first is marked for you.



Answers

1. $\frac{1}{15}$
2. $\frac{1}{10}$
3. $\frac{1}{12}$
4. $\frac{1}{16}$
5. $\frac{1}{12}$
6. $\frac{1}{42}$
7. $\frac{1}{24}$
8. $\frac{1}{24}$
9. $\frac{1}{6}$



Use the numberline to solve each problem. The first is marked for you.

Answers

$\frac{1}{16}$

$\frac{1}{15}$

$\frac{1}{12}$

$\frac{1}{42}$

$\frac{1}{12}$

$\frac{1}{10}$

$\frac{1}{24}$

$\frac{1}{6}$

$\frac{1}{24}$

1. _____

2. _____

3. _____

4. _____

5. _____

6. _____

7. _____

8. _____

9. _____

