





Use the numberline to solve each problem. The first is marked for you.

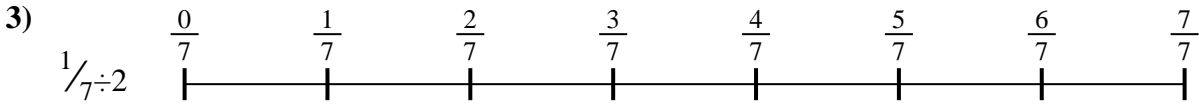
Answers



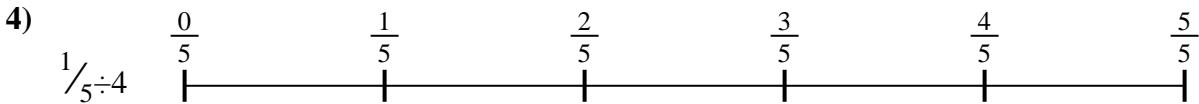
1. _____



2. _____



3. _____



4. _____



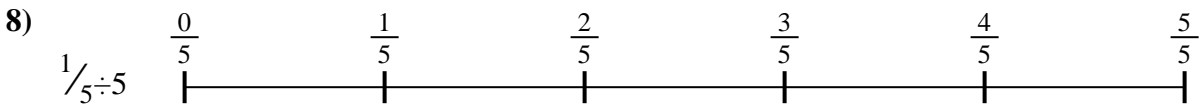
5. _____



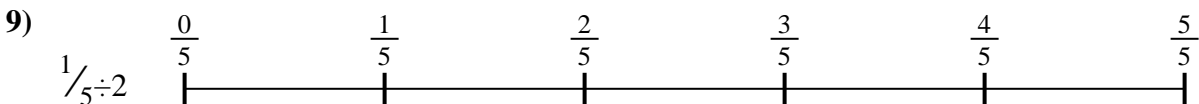
6. _____



7. _____



8. _____

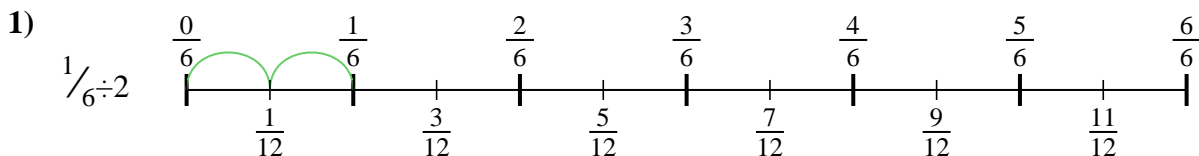


9. _____

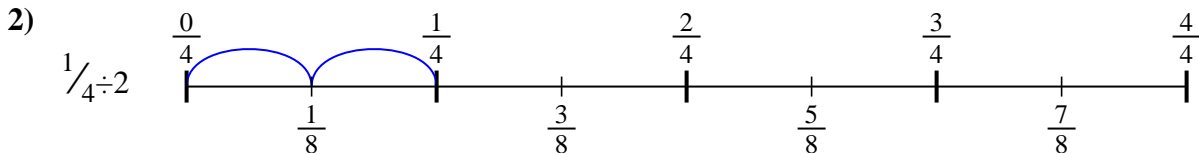


Use the numberline to solve each problem. The first is marked for you.

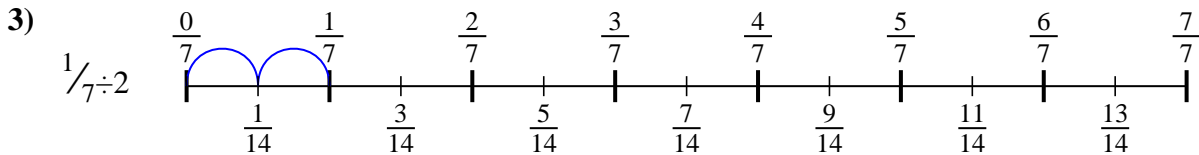
Answers



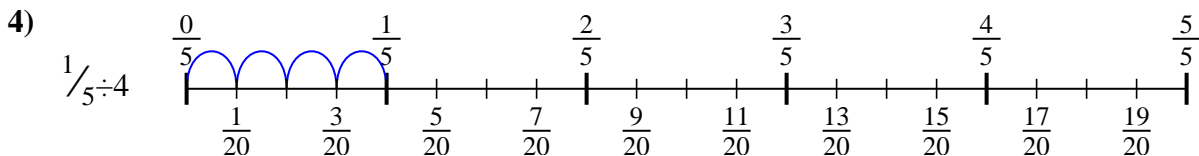
1. $\frac{1}{12}$



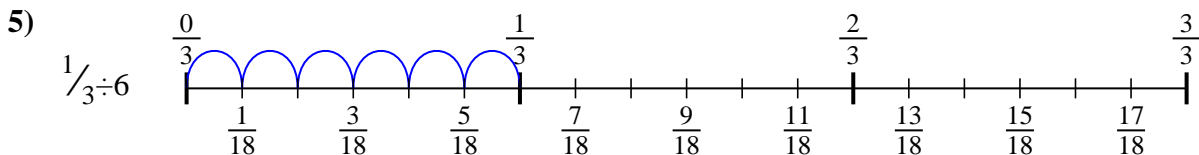
2. $\frac{1}{8}$



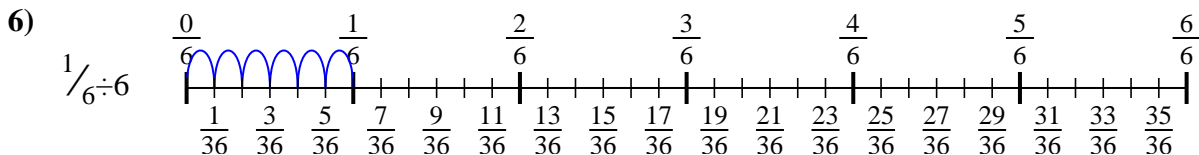
3. $\frac{1}{14}$



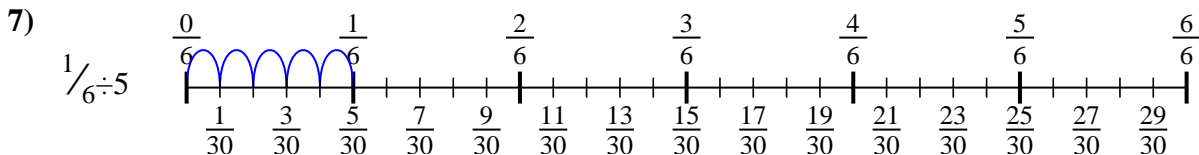
4. $\frac{1}{20}$



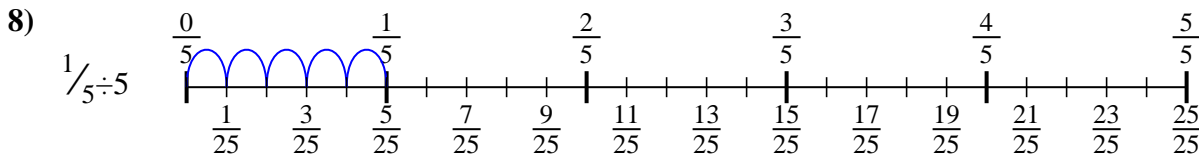
5. $\frac{1}{18}$



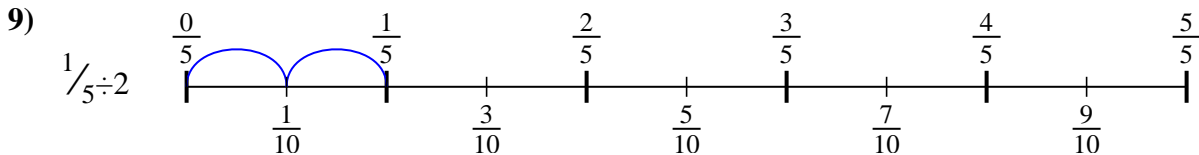
6. $\frac{1}{36}$



7. $\frac{1}{30}$



8. $\frac{1}{25}$



9. $\frac{1}{10}$



Use the numberline to solve each problem. The first is marked for you.

Answers

$\frac{1}{30}$

$\frac{1}{12}$

$\frac{1}{36}$

$\frac{1}{8}$

$\frac{1}{18}$

$\frac{1}{25}$

$\frac{1}{14}$

$\frac{1}{20}$

$\frac{1}{10}$

1. _____

2. _____

3. _____

4. _____

5. _____

6. _____

7. _____

8. _____

9. _____

