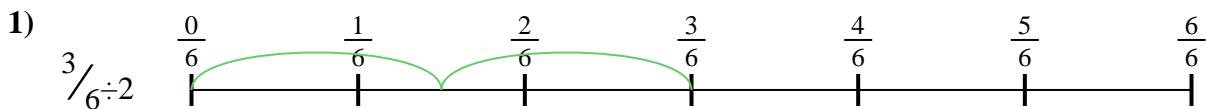




Use the numberline to solve each problem. The first is marked for you.


Answers




1. _____




2. _____



3. _____



4. _____



5. _____



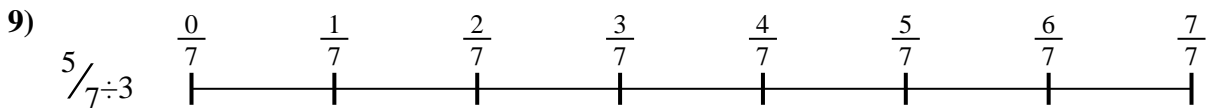
6. _____



7. _____



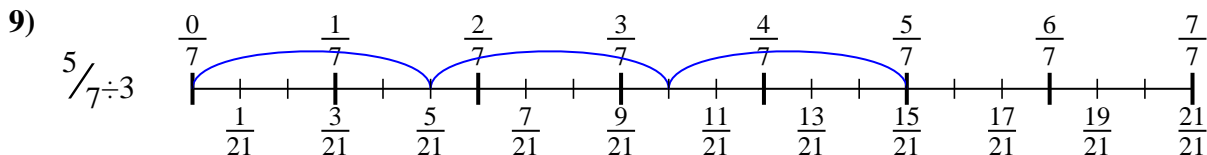
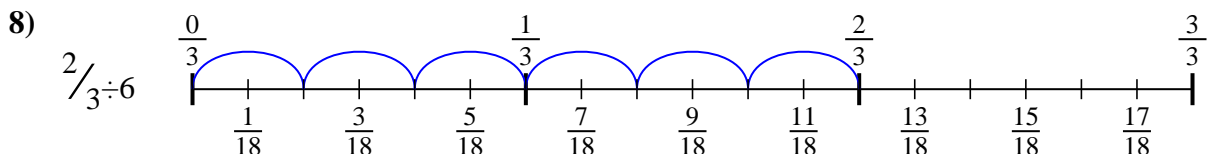
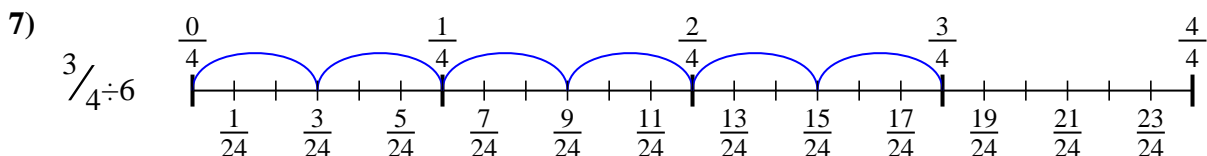
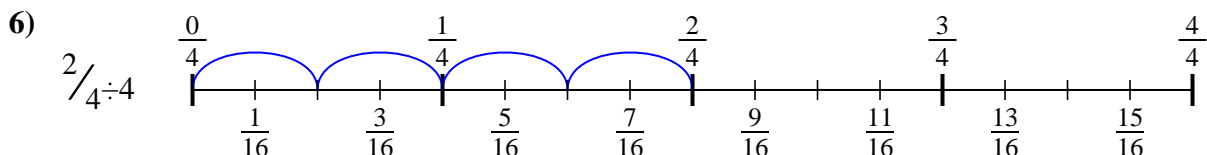
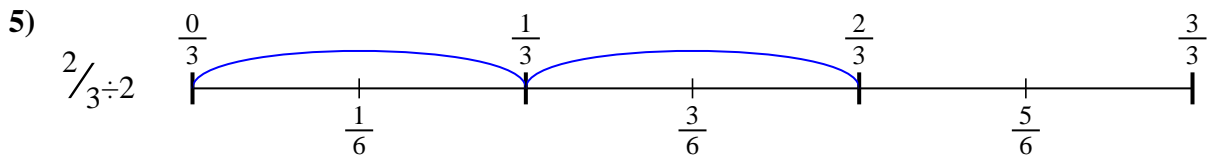
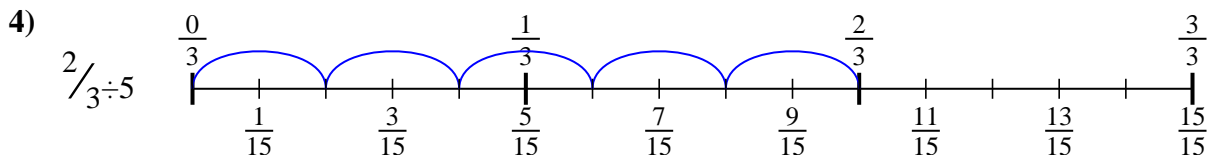
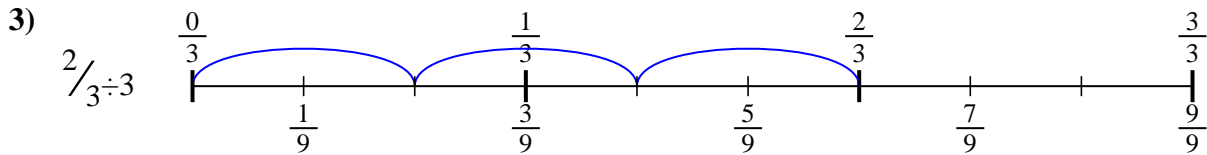
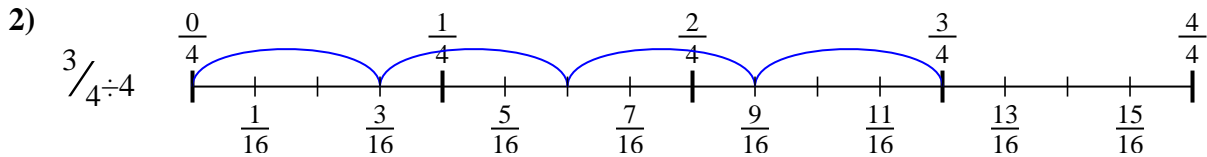
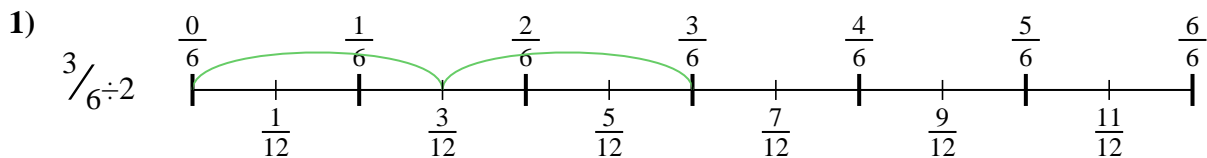
8. _____



9. _____



Use the numberline to solve each problem. The first is marked for you.



Answers

1. $\frac{3}{12}$

2. $\frac{3}{16}$

3. $\frac{2}{9}$

4. $\frac{2}{15}$

5. $\frac{2}{6}$

6. $\frac{2}{16}$

7. $\frac{3}{24}$

8. $\frac{2}{18}$

9. $\frac{5}{21}$



Use the numberline to solve each problem. The first is marked for you.

Answers

$\frac{3}{16}$

$\frac{2}{16}$

$\frac{5}{21}$

$\frac{2}{9}$

$\frac{2}{6}$

$\frac{3}{12}$

$\frac{2}{18}$

$\frac{2}{15}$

$\frac{3}{24}$

1. _____

2. _____

3. _____

4. _____

5. _____

6. _____

7. _____

8. _____

9. _____

