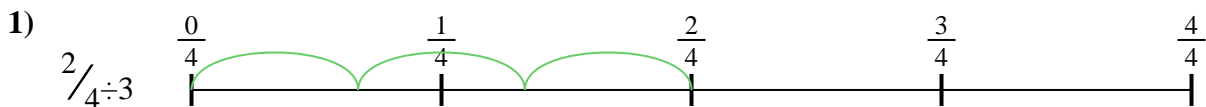


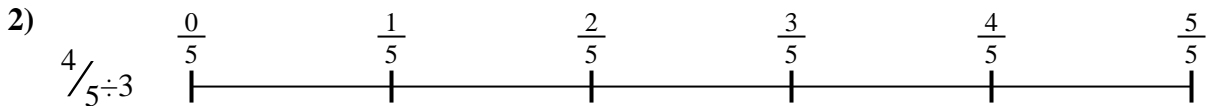


Use the numberline to solve each problem. The first is marked for you.

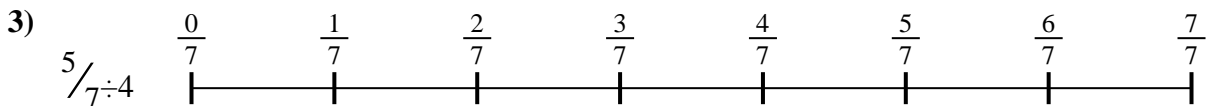
**Answers**




1. \_\_\_\_\_



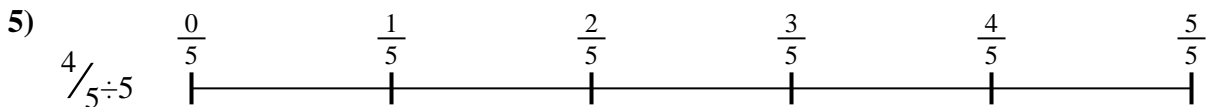
2. \_\_\_\_\_



3. \_\_\_\_\_



4. \_\_\_\_\_



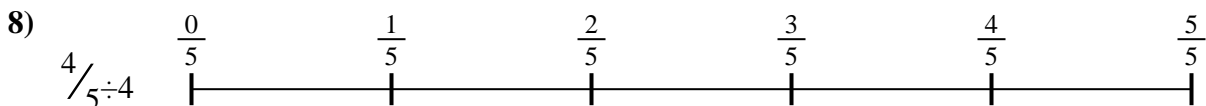
5. \_\_\_\_\_



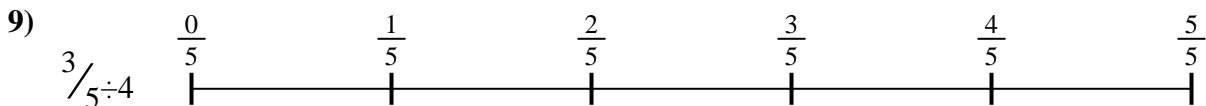
6. \_\_\_\_\_



7. \_\_\_\_\_



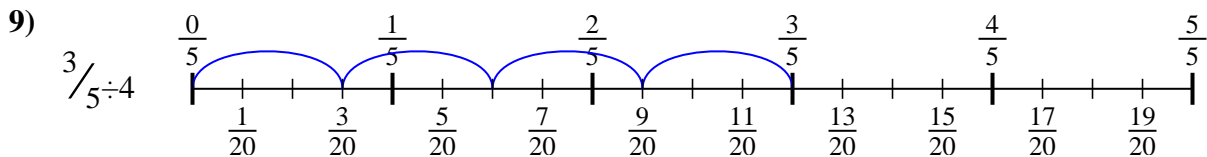
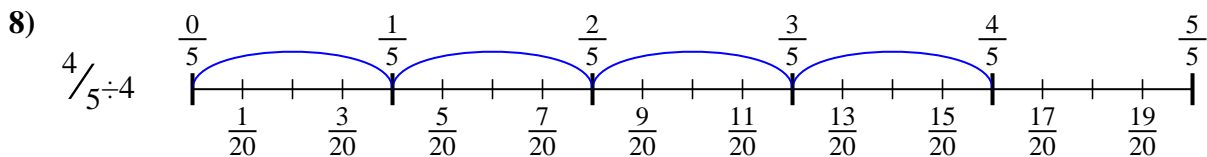
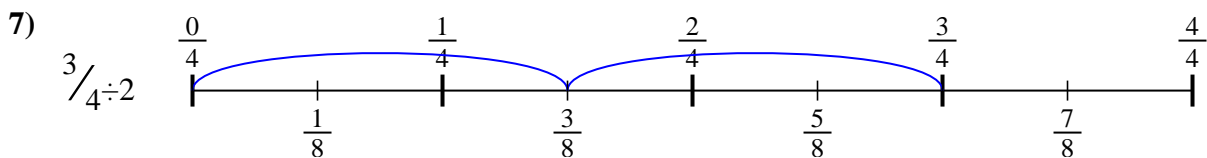
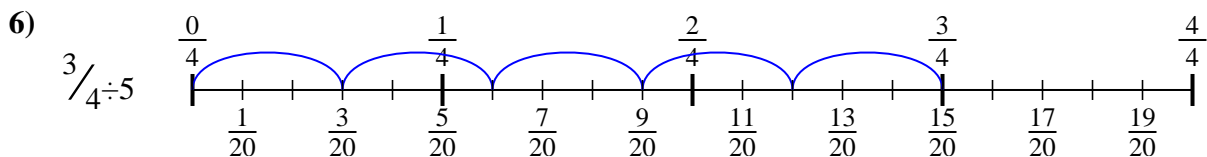
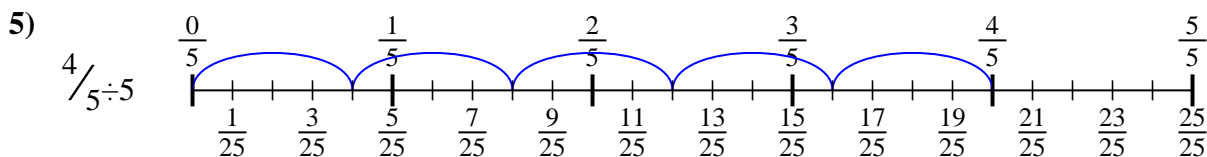
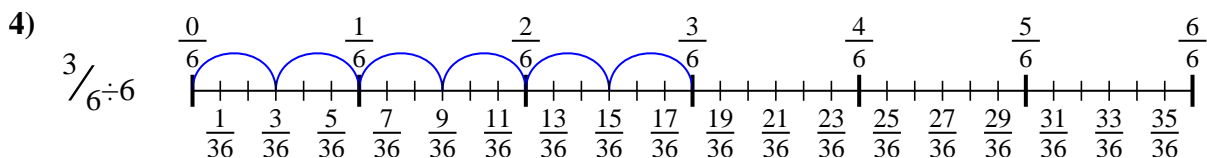
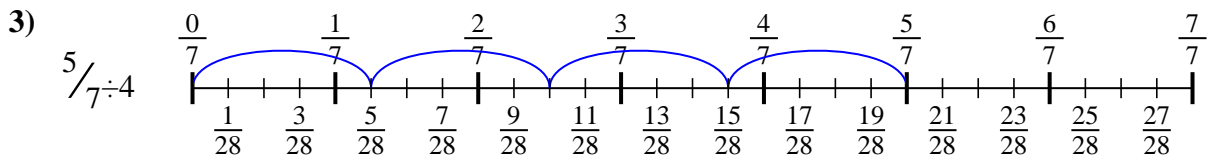
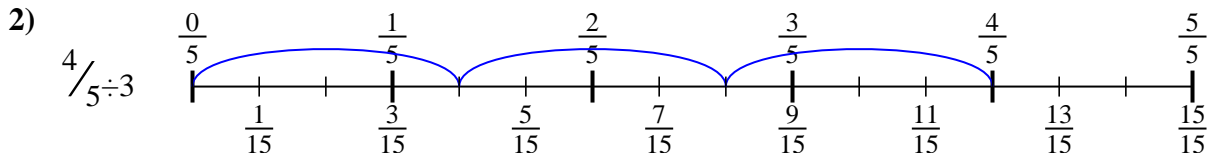
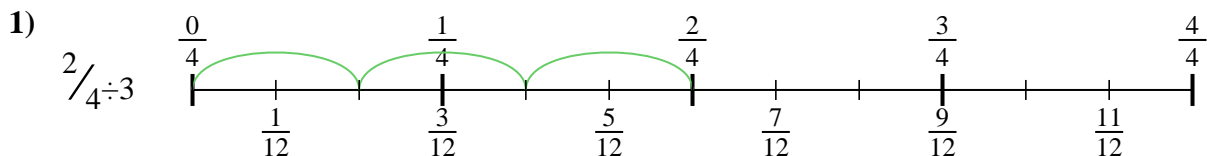
8. \_\_\_\_\_



9. \_\_\_\_\_



Use the numberline to solve each problem. The first is marked for you.



**Answers**

1.  $\frac{2}{12}$

2.  $\frac{4}{15}$

3.  $\frac{5}{28}$

4.  $\frac{3}{36}$

5.  $\frac{4}{25}$

6.  $\frac{3}{20}$

7.  $\frac{3}{8}$

8.  $\frac{4}{20}$

9.  $\frac{3}{20}$



Use the numberline to solve each problem. The first is marked for you.

**Answers**

$\frac{3}{20}$

$\frac{3}{20}$

$\frac{3}{36}$

$\frac{4}{15}$

$\frac{4}{20}$

$\frac{3}{8}$

$\frac{2}{12}$

$\frac{4}{25}$

$\frac{5}{28}$

1. \_\_\_\_\_

2. \_\_\_\_\_

3. \_\_\_\_\_

4. \_\_\_\_\_

5. \_\_\_\_\_

6. \_\_\_\_\_

7. \_\_\_\_\_

8. \_\_\_\_\_

9. \_\_\_\_\_

