



Use the numberline to solve each problem. The first is marked for you.

**Answers**




1. \_\_\_\_\_



2. \_\_\_\_\_



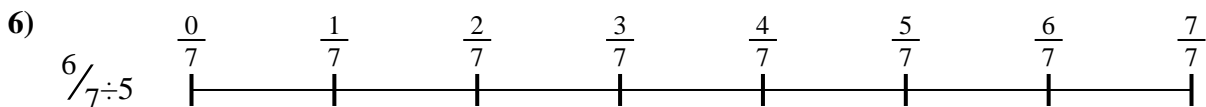
3. \_\_\_\_\_



4. \_\_\_\_\_



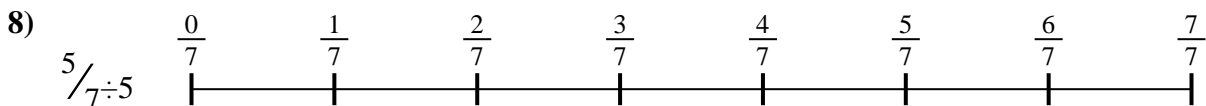
5. \_\_\_\_\_




6. \_\_\_\_\_



7. \_\_\_\_\_



8. \_\_\_\_\_

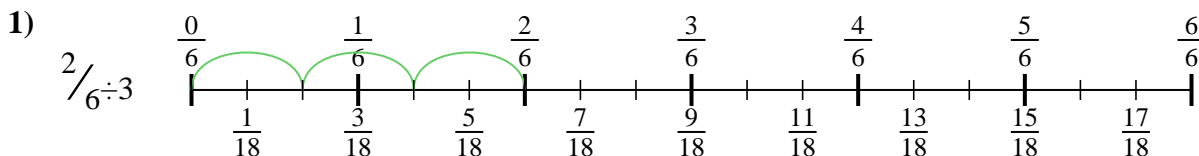


9. \_\_\_\_\_

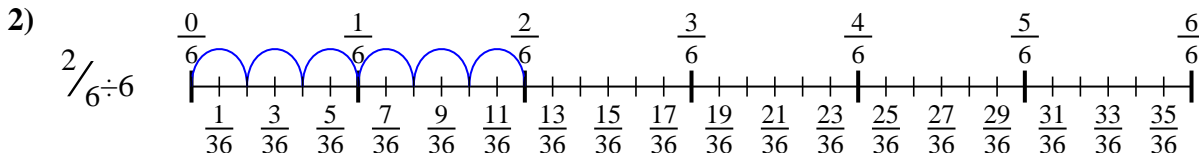


Use the numberline to solve each problem. The first is marked for you.

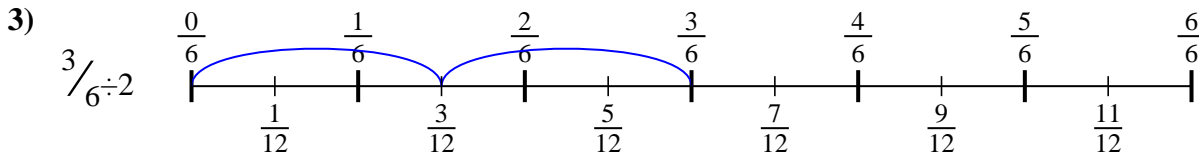
**Answers**



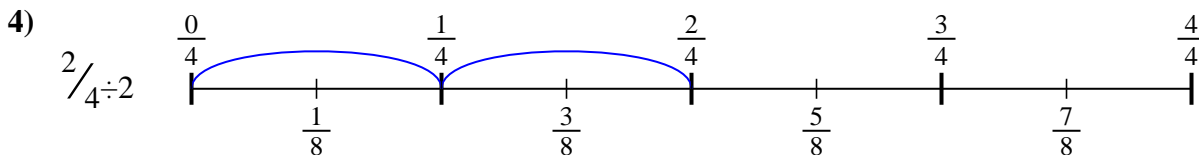
1.  $\frac{2}{18}$



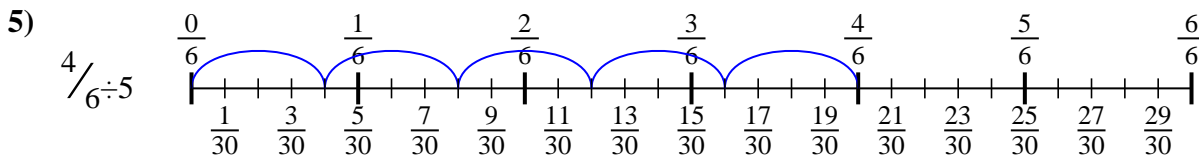
2.  $\frac{2}{36}$



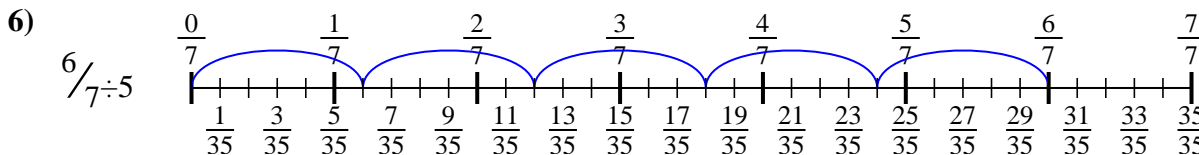
3.  $\frac{3}{12}$



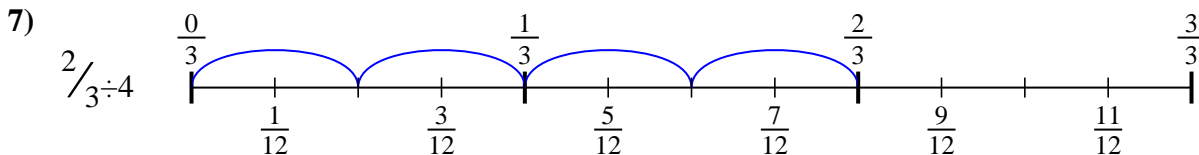
4.  $\frac{2}{8}$



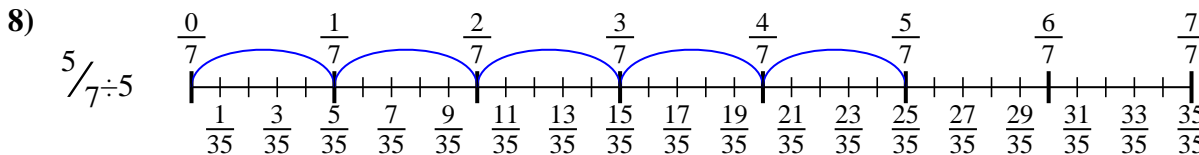
5.  $\frac{4}{30}$



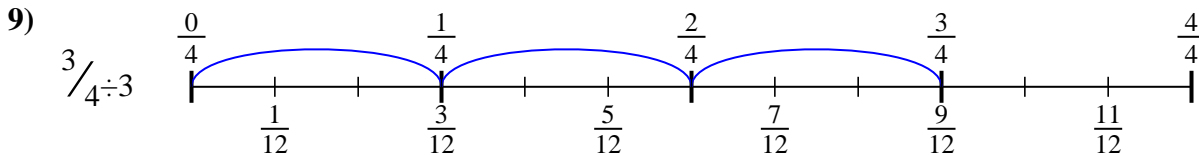
6.  $\frac{6}{35}$



7.  $\frac{2}{12}$



8.  $\frac{5}{35}$



9.  $\frac{3}{12}$



Use the numberline to solve each problem. The first is marked for you.

**Answers**

$2/18$

$2/8$

$2/36$

$3/12$

$6/35$

$5/35$

$4/30$

$2/12$

$3/12$

1. \_\_\_\_\_

2. \_\_\_\_\_

3. \_\_\_\_\_

4. \_\_\_\_\_

5. \_\_\_\_\_

6. \_\_\_\_\_

7. \_\_\_\_\_

8. \_\_\_\_\_

9. \_\_\_\_\_

