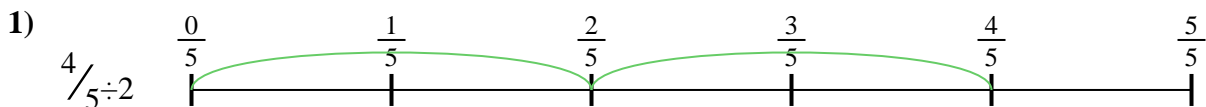





Use the numberline to solve each problem. The first is marked for you.

**Answers**




1. \_\_\_\_\_



2. \_\_\_\_\_



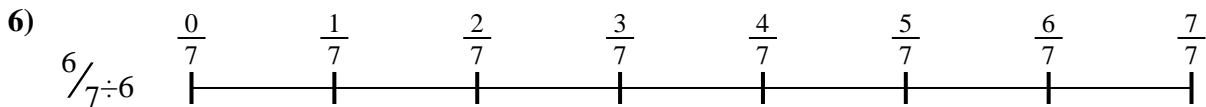
3. \_\_\_\_\_




4. \_\_\_\_\_



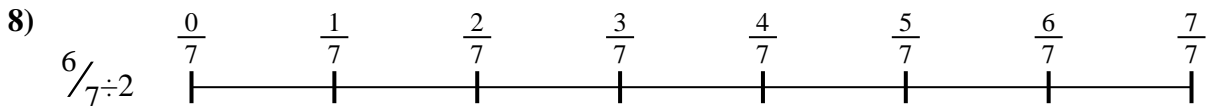
5. \_\_\_\_\_




6. \_\_\_\_\_



7. \_\_\_\_\_



8. \_\_\_\_\_

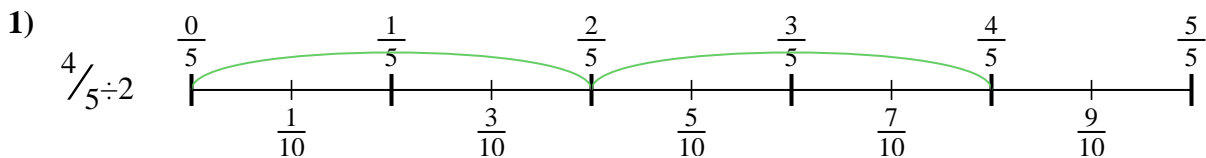


9. \_\_\_\_\_

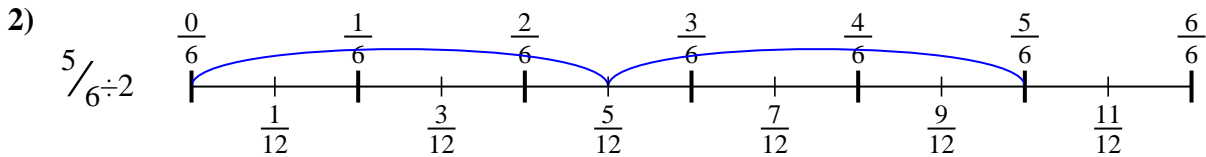


Use the numberline to solve each problem. The first is marked for you.

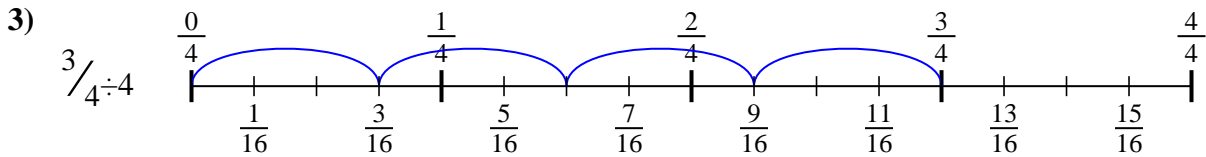
**Answers**



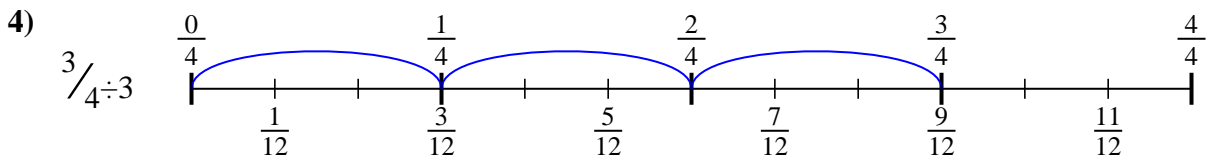
1.  $\frac{4}{10}$



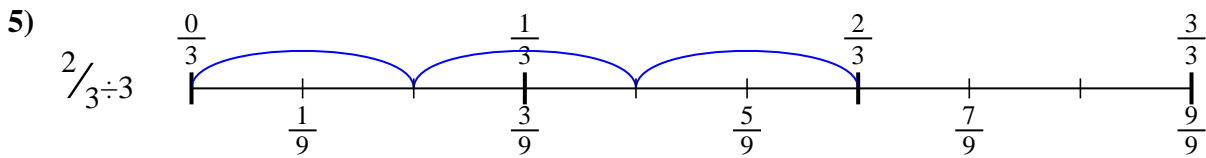
2.  $\frac{5}{12}$



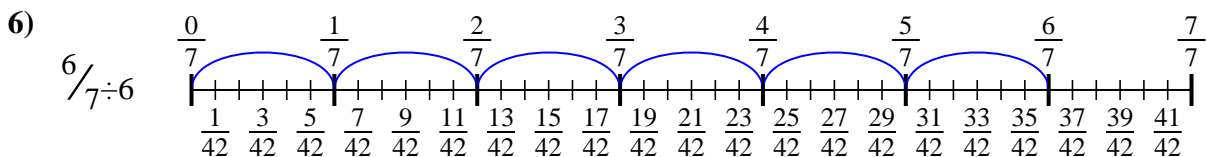
3.  $\frac{3}{16}$



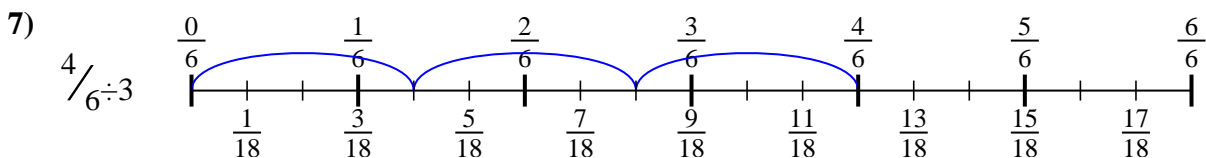
4.  $\frac{3}{12}$



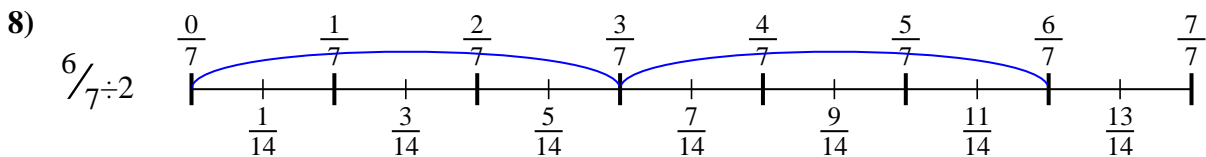
5.  $\frac{2}{9}$



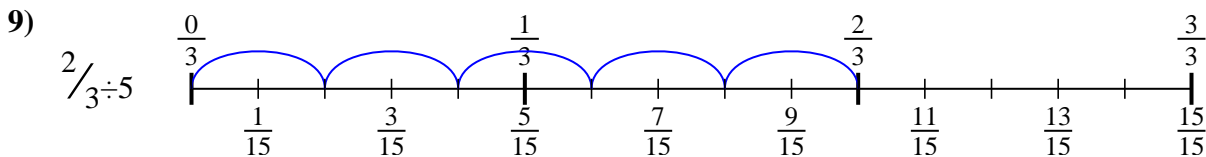
6.  $\frac{6}{42}$



7.  $\frac{4}{18}$



8.  $\frac{6}{14}$



9.  $\frac{2}{15}$



Use the numberline to solve each problem. The first is marked for you.

**Answers**

$$\frac{6}{14}$$

$$\frac{2}{15}$$

$$\frac{5}{12}$$

$$\frac{4}{10}$$

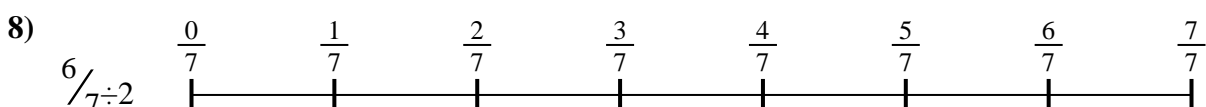
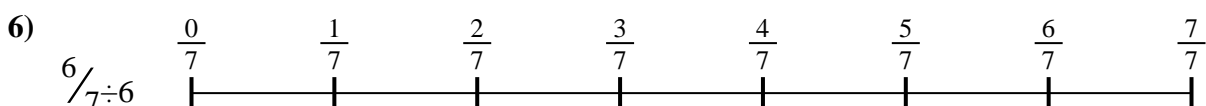

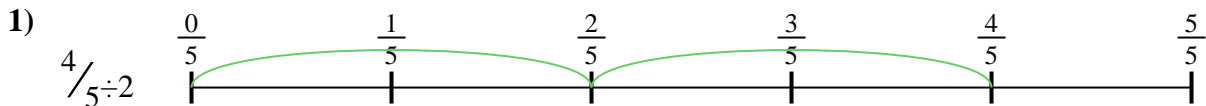
$$\frac{6}{42}$$

$$\frac{3}{12}$$

$$\frac{4}{18}$$

$$\frac{2}{9}$$

$$\frac{3}{16}$$



1. \_\_\_\_\_
2. \_\_\_\_\_
3. \_\_\_\_\_
4. \_\_\_\_\_
5. \_\_\_\_\_
6. \_\_\_\_\_
7. \_\_\_\_\_
8. \_\_\_\_\_
9. \_\_\_\_\_