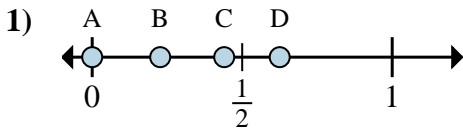


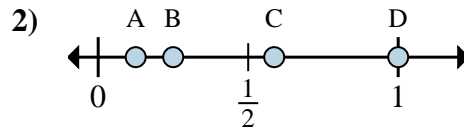


Determine which letter best shows the location of the fraction.

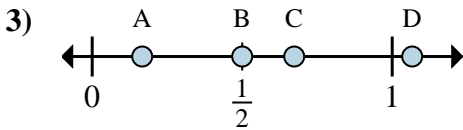
**Answers**



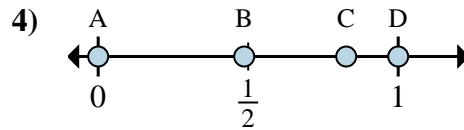
- a. Which letter best shows  $\frac{0}{8}$ ?
- b. Which letter best shows  $\frac{5}{8}$ ?



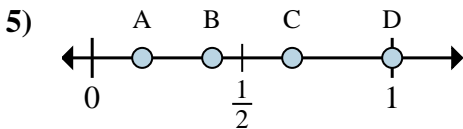
- a. Which letter best shows  $\frac{1}{8}$ ?
- b. Which letter best shows  $\frac{2}{8}$ ?



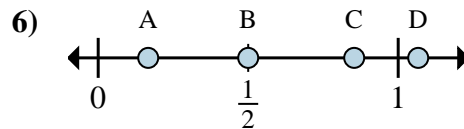
- a. Which letter best shows  $\frac{1}{6}$ ?
- b. Which letter best shows  $\frac{3}{6}$ ?



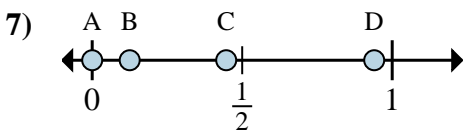
- a. Which letter best shows  $\frac{0}{2}$ ?
- b. Which letter best shows  $\frac{2}{2}$ ?



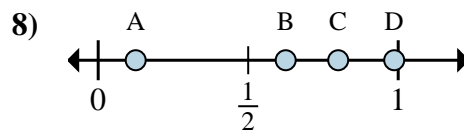
- a. Which letter best shows  $\frac{3}{3}$ ?
- b. Which letter best shows  $\frac{2}{3}$ ?



- a. Which letter best shows  $\frac{3}{6}$ ?
- b. Which letter best shows  $\frac{1}{6}$ ?



- a. Which letter best shows  $\frac{0}{8}$ ?
- b. Which letter best shows  $\frac{1}{8}$ ?



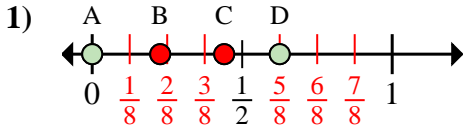
- a. Which letter best shows  $\frac{5}{8}$ ?
- b. Which letter best shows  $\frac{1}{8}$ ?

- 1. \_\_\_\_\_
- 2. \_\_\_\_\_
- 3. \_\_\_\_\_
- 4. \_\_\_\_\_
- 5. \_\_\_\_\_
- 6. \_\_\_\_\_
- 7. \_\_\_\_\_
- 8. \_\_\_\_\_

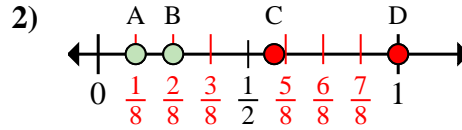


Determine which letter best shows the location of the fraction.

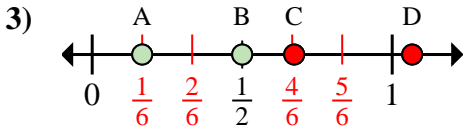
**Answers**



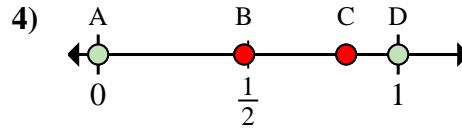
- a. Which letter best shows  $\frac{0}{8}$ ?  
 b. Which letter best shows  $\frac{5}{8}$ ?



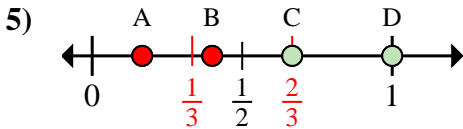
- a. Which letter best shows  $\frac{1}{8}$ ?  
 b. Which letter best shows  $\frac{2}{8}$ ?



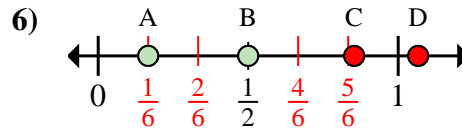
- a. Which letter best shows  $\frac{1}{6}$ ?  
 b. Which letter best shows  $\frac{3}{6}$ ?



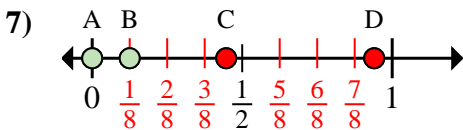
- a. Which letter best shows  $\frac{0}{2}$ ?  
 b. Which letter best shows  $\frac{2}{2}$ ?



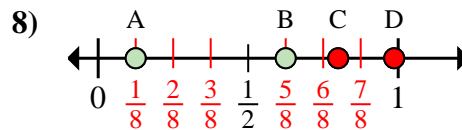
- a. Which letter best shows  $\frac{3}{3}$ ?  
 b. Which letter best shows  $\frac{2}{3}$ ?



- a. Which letter best shows  $\frac{3}{6}$ ?  
 b. Which letter best shows  $\frac{1}{6}$ ?



- a. Which letter best shows  $\frac{0}{8}$ ?  
 b. Which letter best shows  $\frac{1}{8}$ ?



- a. Which letter best shows  $\frac{5}{8}$ ?  
 b. Which letter best shows  $\frac{1}{8}$ ?

1.   A     D    
 2.   A     B    
 3.   A     B    
 4.   A     D    
 5.   D     C    
 6.   B     A    
 7.   A     B    
 8.   B     A