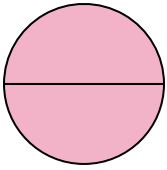





Determine which letter best describes the shaded portion.

1)



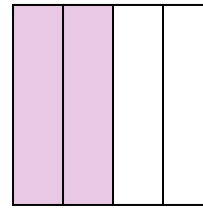
- A. two-halves
- B. one-quarter
- C. two-quarters

2)



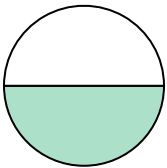
- A. one-half
- B. three-fourths
- C. two-halves

3)



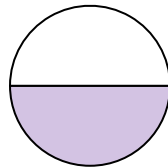
- A. two-fourths
- B. one-fourth
- C. three-fourths

4)



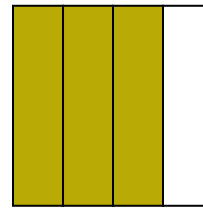
- A. two-fourths
- B. four-fourths
- C. one-half

5)



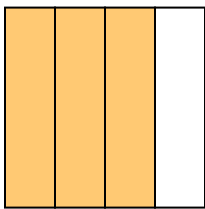
- A. four-fourths
- B. one-half
- C. two-quarters

6)



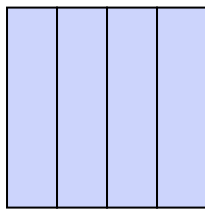
- A. one-fourth
- B. two-fourths
- C. three-fourths

7)



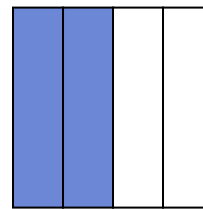
- A. two-fourths
- B. four-quarters
- C. three-quarters

8)



- A. two-quarters
- B. one-half
- C. four-quarters

9)



- A. two-halves
- B. two-fourths
- C. one-fourth

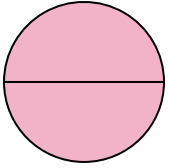
**Answers**

1. \_\_\_\_\_
2. \_\_\_\_\_
3. \_\_\_\_\_
4. \_\_\_\_\_
5. \_\_\_\_\_
6. \_\_\_\_\_
7. \_\_\_\_\_
8. \_\_\_\_\_
9. \_\_\_\_\_




Determine which letter best describes the shaded portion.

1)



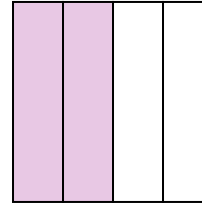
- A. two-halves
- B. one-quarter
- C. two-quarters

2)



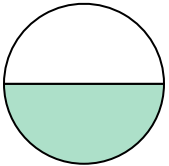
- A. one-half
- B. three-fourths
- C. two-halves

3)



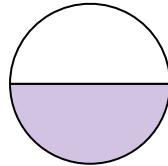
- A. two-fourths
- B. one-fourth
- C. three-fourths

4)



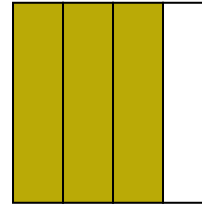
- A. two-fourths
- B. four-fourths
- C. one-half

5)



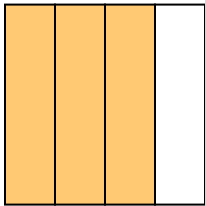
- A. four-fourths
- B. one-half
- C. two-quarters

6)



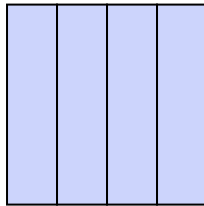
- A. one-fourth
- B. two-fourths
- C. three-fourths

7)



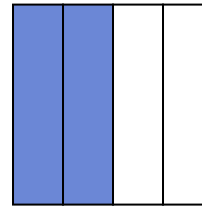
- A. two-fourths
- B. four-quarters
- C. three-quarters

8)



- A. two-quarters
- B. one-half
- C. four-quarters

9)



- A. two-halves
- B. two-fourths
- C. one-fourth

**Answers**

- 1.   **A**
- 2.   **C**
- 3.   **A**
- 4.   **C**
- 5.   **B**
- 6.   **C**
- 7.   **C**
- 8.   **C**
- 9.   **B**