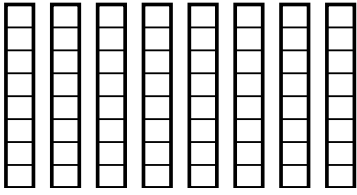


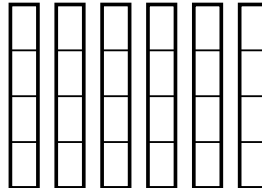


Use the visual models to solve.

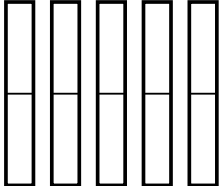
1)  $\frac{7}{8} \times 8 =$



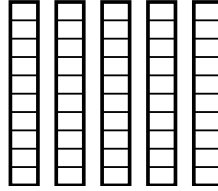
2)  $\frac{1}{4} \times 6 =$



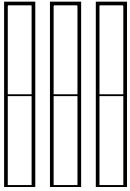
3)  $\frac{1}{2} \times 5 =$



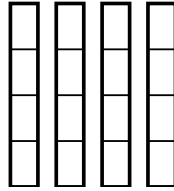
4)  $\frac{3}{10} \times 5 =$



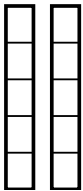
5)  $\frac{1}{2} \times 3 =$



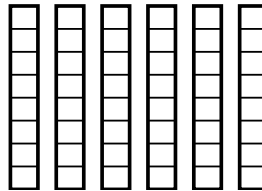
6)  $\frac{3}{4} \times 4 =$



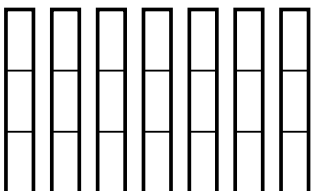
7)  $\frac{1}{5} \times 2 =$



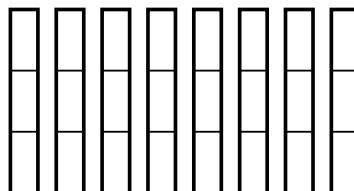
8)  $\frac{2}{8} \times 6 =$



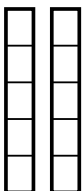
9)  $\frac{2}{3} \times 7 =$



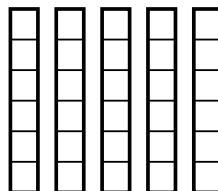
10)  $\frac{1}{3} \times 8 =$



11)  $\frac{2}{5} \times 2 =$



12)  $\frac{5}{6} \times 5 =$



**Answers**

1. \_\_\_\_\_

2. \_\_\_\_\_

3. \_\_\_\_\_

4. \_\_\_\_\_

5. \_\_\_\_\_

6. \_\_\_\_\_

7. \_\_\_\_\_

8. \_\_\_\_\_

9. \_\_\_\_\_

10. \_\_\_\_\_

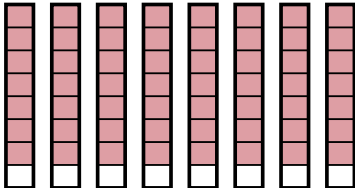
11. \_\_\_\_\_

12. \_\_\_\_\_

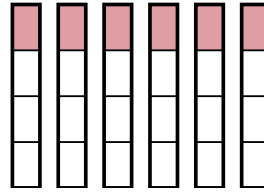


Use the visual models to solve.

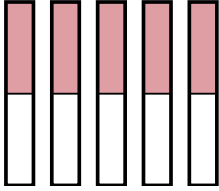
1)  $\frac{7}{8} \times 8 =$



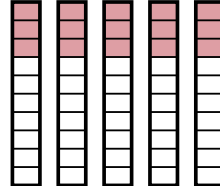
2)  $\frac{1}{4} \times 6 =$



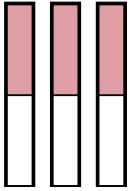
3)  $\frac{1}{2} \times 5 =$



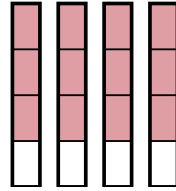
4)  $\frac{3}{10} \times 5 =$



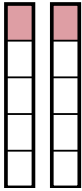
5)  $\frac{1}{2} \times 3 =$



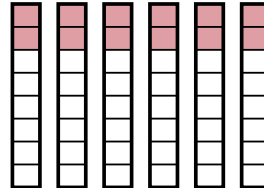
6)  $\frac{3}{4} \times 4 =$



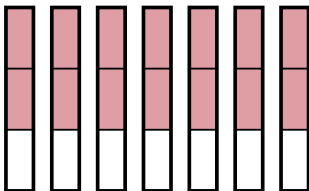
7)  $\frac{1}{5} \times 2 =$



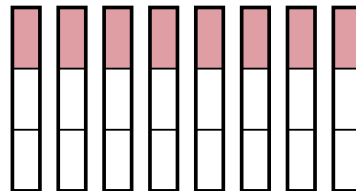
8)  $\frac{2}{8} \times 6 =$



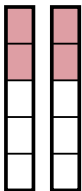
9)  $\frac{2}{3} \times 7 =$



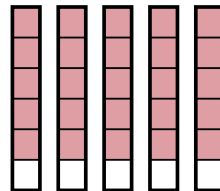
10)  $\frac{1}{3} \times 8 =$



11)  $\frac{2}{5} \times 2 =$



12)  $\frac{5}{6} \times 5 =$



**Answers**

1.  $\frac{56}{8}$

2.  $\frac{6}{4}$

3.  $\frac{5}{2}$

4.  $\frac{15}{10}$

5.  $\frac{3}{2}$

6.  $\frac{12}{4}$

7.  $\frac{2}{5}$

8.  $\frac{12}{8}$

9.  $\frac{14}{3}$

10.  $\frac{8}{3}$

11.  $\frac{4}{5}$

12.  $\frac{25}{6}$