



Use the box provided to show a visual example of how to multiply two fractions.

Ex)  $\frac{3}{4} \times \frac{1}{7} =$

1)  $\frac{3}{5} \times \frac{3}{4} =$

2)  $\frac{3}{4} \times \frac{1}{2} =$

3)  $\frac{1}{2} \times \frac{6}{8} =$

4)  $\frac{3}{4} \times \frac{3}{4} =$

5)  $\frac{8}{9} \times \frac{3}{6} =$

6)  $\frac{4}{9} \times \frac{1}{6} =$

7)  $\frac{4}{6} \times \frac{1}{4} =$

8)  $\frac{1}{2} \times \frac{2}{3} =$

9)  $\frac{7}{9} \times \frac{3}{8} =$

10)  $\frac{3}{5} \times \frac{4}{7} =$

11)  $\frac{2}{4} \times \frac{3}{5} =$

**Answers**

Ex.  $\frac{3}{28}$

1. \_\_\_\_\_

2. \_\_\_\_\_

3. \_\_\_\_\_

4. \_\_\_\_\_

5. \_\_\_\_\_

6. \_\_\_\_\_

7. \_\_\_\_\_

8. \_\_\_\_\_

9. \_\_\_\_\_

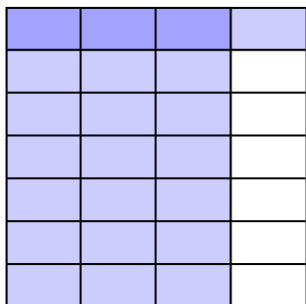
10. \_\_\_\_\_

11. \_\_\_\_\_

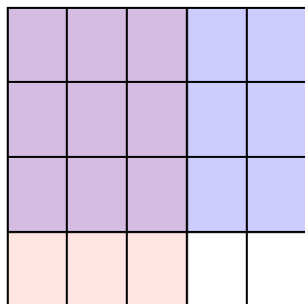


Use the box provided to show a visual example of how to multiply two fractions.

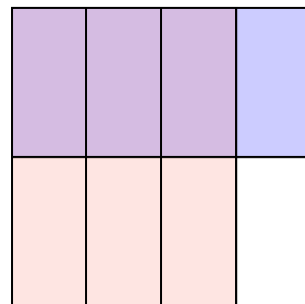
Ex)  $\frac{3}{4} \times \frac{1}{7} =$




1)  $\frac{3}{5} \times \frac{3}{4} =$



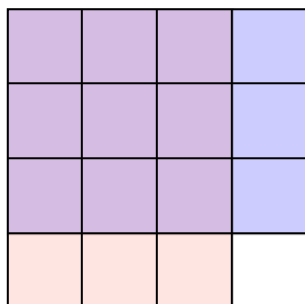
2)  $\frac{3}{4} \times \frac{1}{2} =$



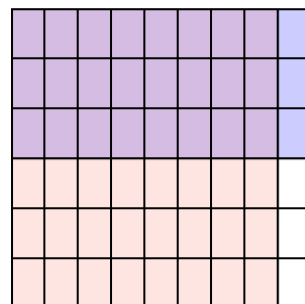
3)  $\frac{1}{2} \times \frac{6}{8} =$



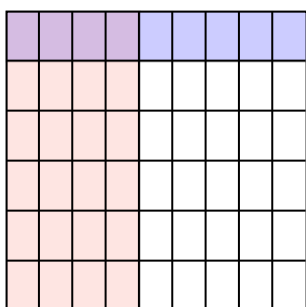
4)  $\frac{3}{4} \times \frac{3}{4} =$



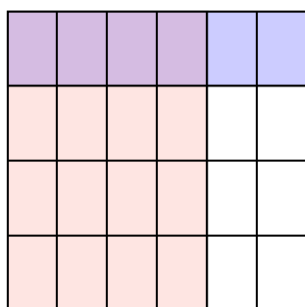
5)  $\frac{8}{9} \times \frac{3}{6} =$



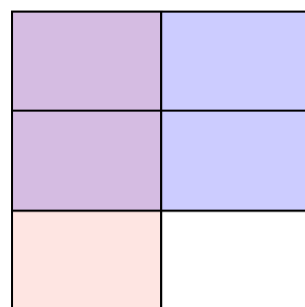
6)  $\frac{4}{9} \times \frac{1}{6} =$



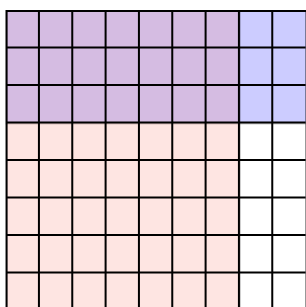
7)  $\frac{4}{6} \times \frac{1}{4} =$



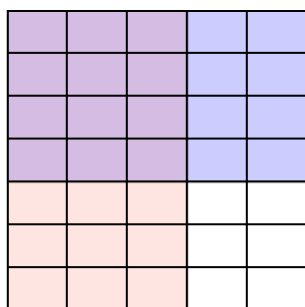
8)  $\frac{1}{2} \times \frac{2}{3} =$



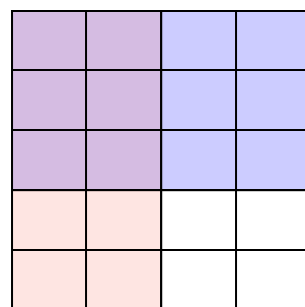
9)  $\frac{7}{9} \times \frac{3}{8} =$



10)  $\frac{3}{5} \times \frac{4}{7} =$



11)  $\frac{2}{4} \times \frac{3}{5} =$



**Answers**

Ex.  $\frac{3}{28}$

1.  $\frac{9}{20}$

2.  $\frac{3}{8}$

3.  $\frac{6}{16}$

4.  $\frac{9}{16}$

5.  $\frac{24}{54}$

6.  $\frac{4}{54}$

7.  $\frac{4}{24}$

8.  $\frac{2}{6}$

9.  $\frac{21}{72}$

10.  $\frac{12}{35}$

11.  $\frac{6}{20}$