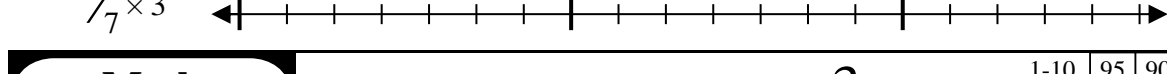

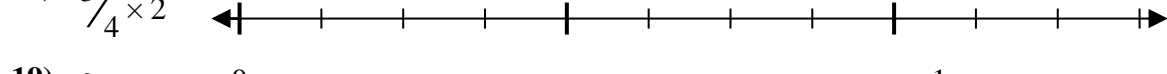
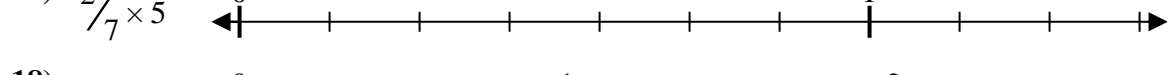

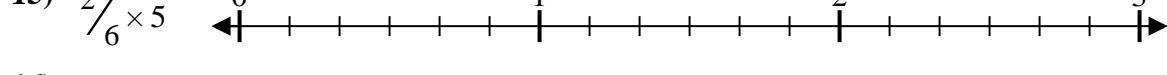
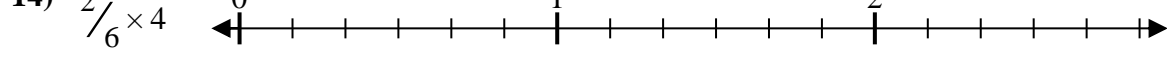
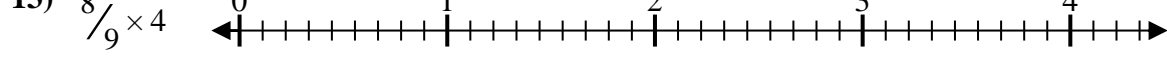
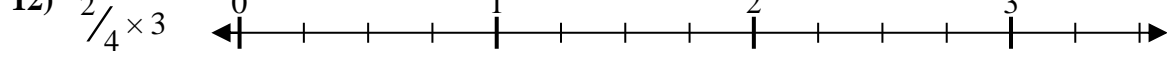
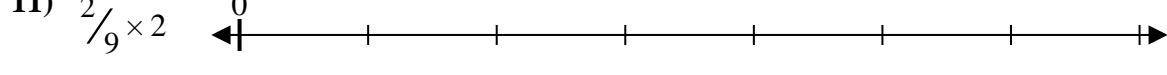
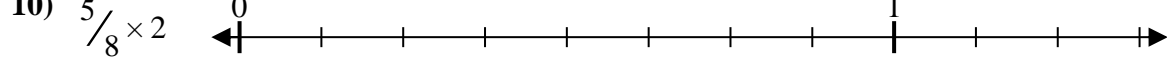
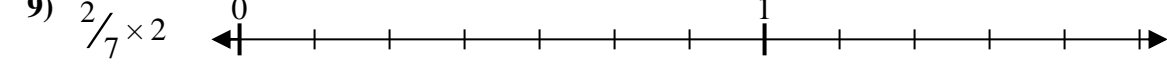
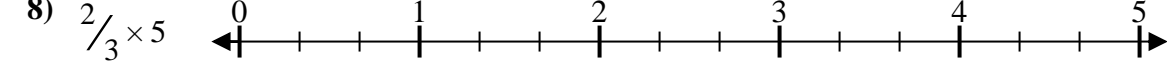
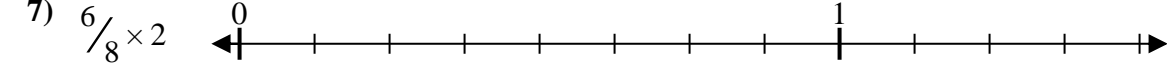
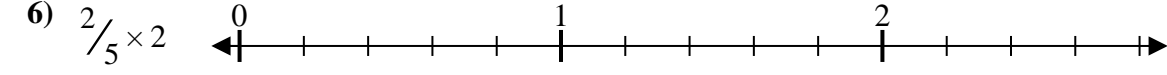
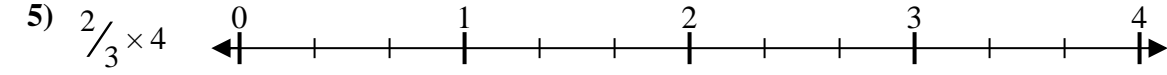
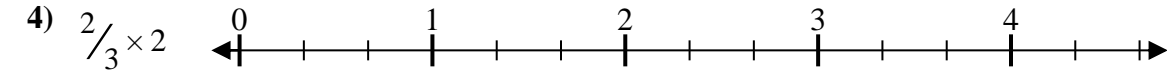
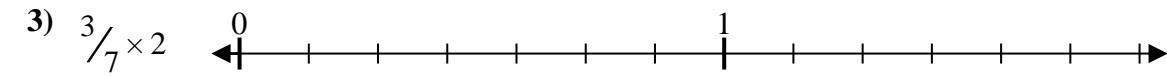
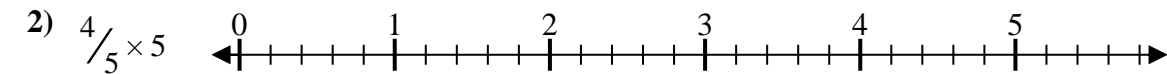
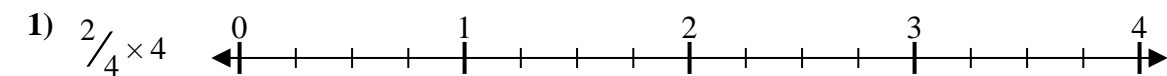




Solve each problem.

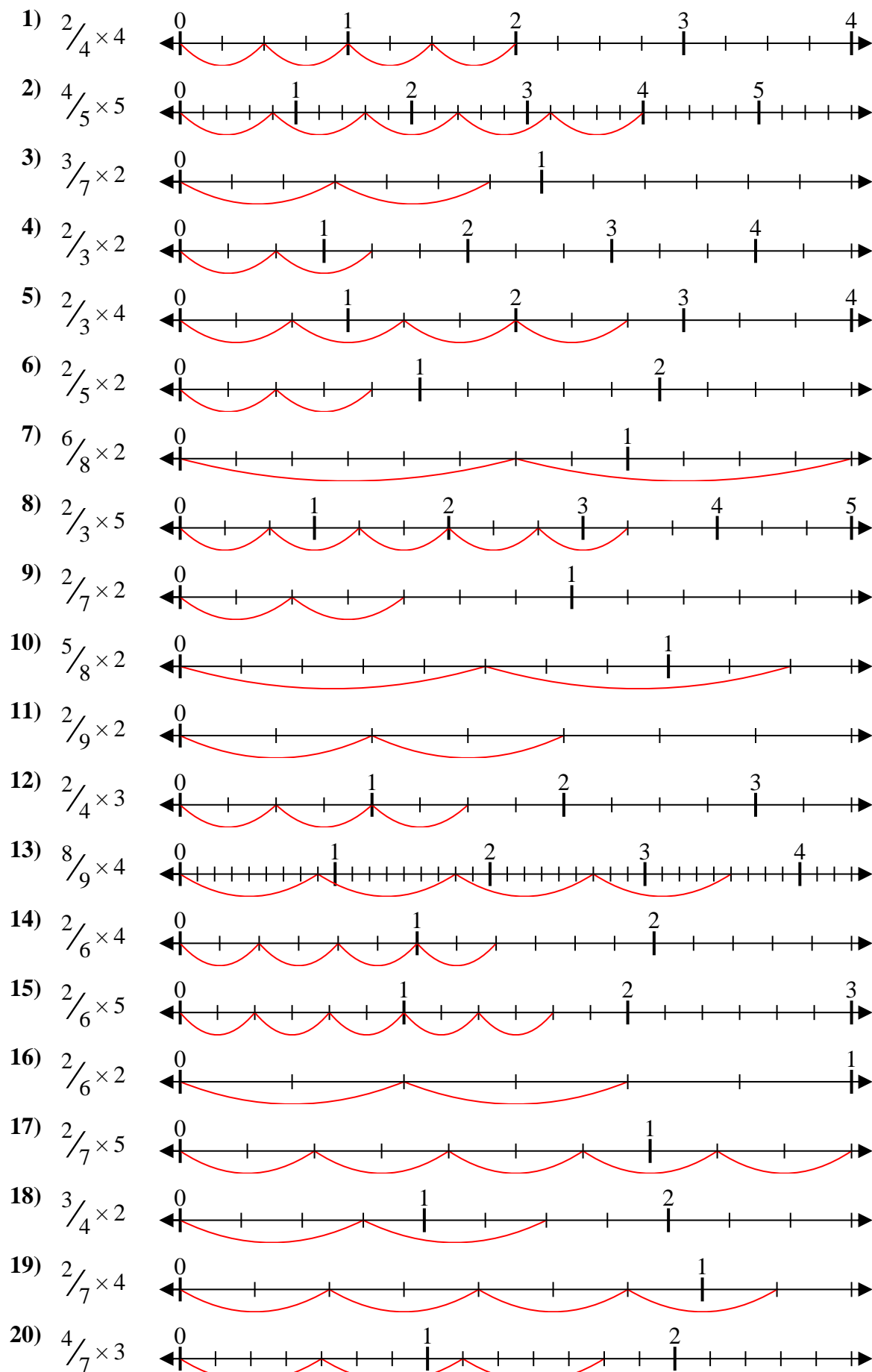
Answers



1. \_\_\_\_\_
2. \_\_\_\_\_
3. \_\_\_\_\_
4. \_\_\_\_\_
5. \_\_\_\_\_
6. \_\_\_\_\_
7. \_\_\_\_\_
8. \_\_\_\_\_
9. \_\_\_\_\_
10. \_\_\_\_\_
11. \_\_\_\_\_
12. \_\_\_\_\_
13. \_\_\_\_\_
14. \_\_\_\_\_
15. \_\_\_\_\_
16. \_\_\_\_\_
17. \_\_\_\_\_
18. \_\_\_\_\_
19. \_\_\_\_\_
20. \_\_\_\_\_



Solve each problem.



**Answers**

1.  $\frac{8}{4} = 2$
2.  $\frac{20}{5} = 4$
3.  $\frac{6}{7} = \frac{6}{7}$
4.  $\frac{4}{3} = 1\frac{1}{3}$
5.  $\frac{8}{3} = 2\frac{2}{3}$
6.  $\frac{4}{5} = \frac{4}{5}$
7.  $\frac{12}{8} = 1\frac{1}{2}$
8.  $\frac{10}{3} = 3\frac{1}{3}$
9.  $\frac{4}{7} = \frac{4}{7}$
10.  $\frac{10}{8} = 1\frac{1}{4}$
11.  $\frac{4}{9} = \frac{4}{9}$
12.  $\frac{6}{4} = 1\frac{1}{2}$
13.  $\frac{32}{9} = 3\frac{5}{9}$
14.  $\frac{8}{6} = 1\frac{1}{3}$
15.  $\frac{10}{6} = 1\frac{2}{3}$
16.  $\frac{4}{6} = \frac{2}{3}$
17.  $\frac{10}{7} = 1\frac{3}{7}$
18.  $\frac{6}{4} = 1\frac{1}{2}$
19.  $\frac{8}{7} = 1\frac{1}{7}$
20.  $\frac{12}{7} = 1\frac{5}{7}$