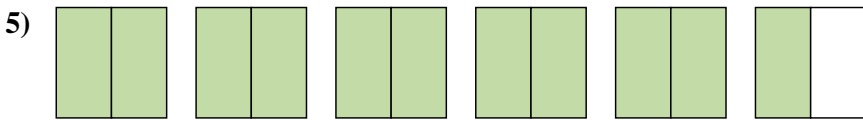
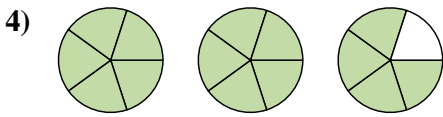
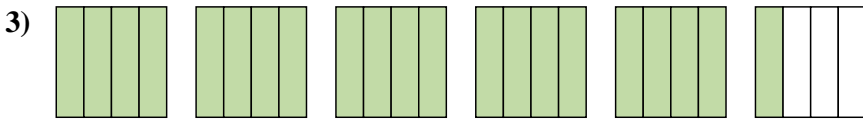
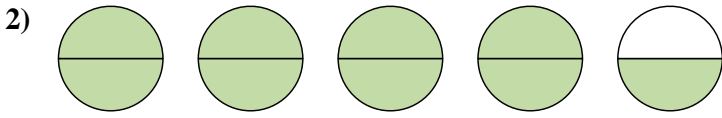
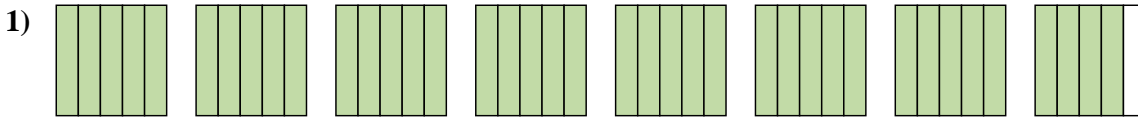
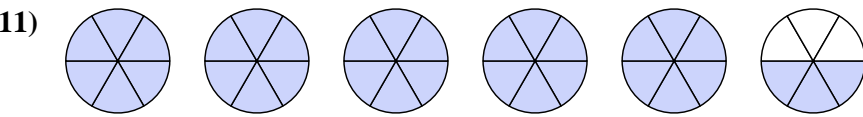
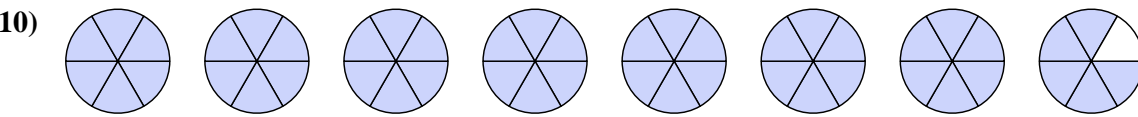
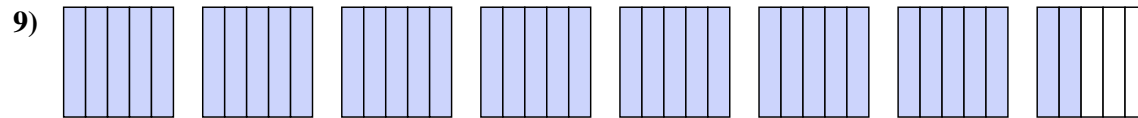
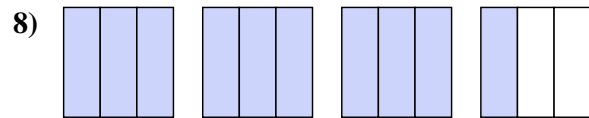
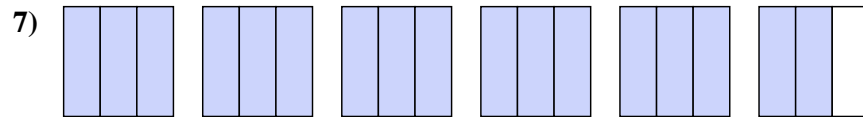
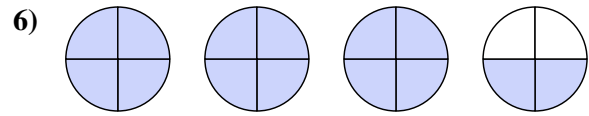




Write each amount as a mixed number.



Write each amount as an improper fraction.



Answers

1. $7\frac{4}{5}$

2. $4\frac{1}{2}$

3. $5\frac{1}{4}$

4. $2\frac{4}{5}$

5. $5\frac{1}{2}$

6. $\frac{14}{4}$

7. $\frac{17}{3}$

8. $\frac{10}{3}$

9. $\frac{37}{5}$

10. $\frac{47}{6}$

11. $\frac{33}{6}$

