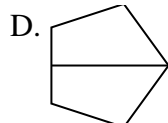
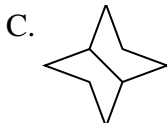
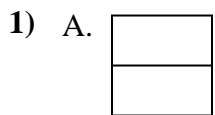




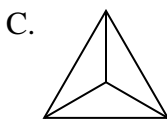
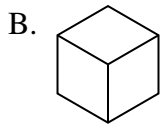
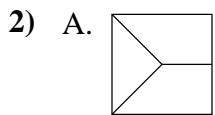
Determine which choice(s) show the shape partitioned so each piece has equal area. If none, write 'none'.

Answers



1. \_\_\_\_\_

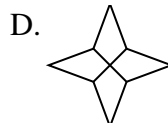
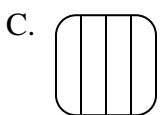
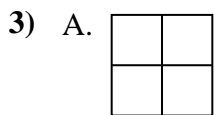
2. \_\_\_\_\_



3. \_\_\_\_\_

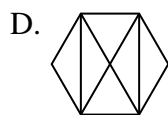
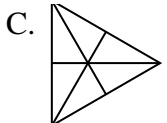
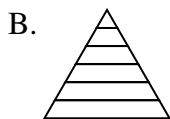
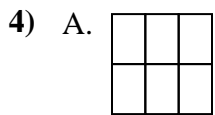
4. \_\_\_\_\_

5. \_\_\_\_\_

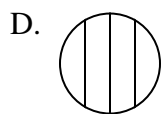

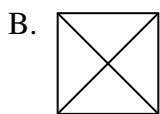
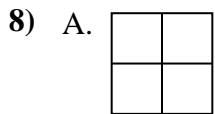
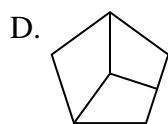
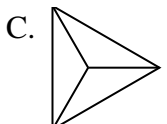
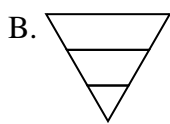
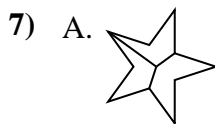
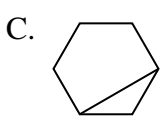
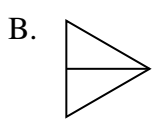
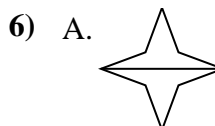
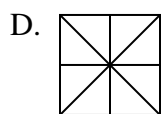
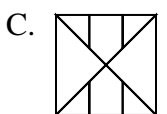
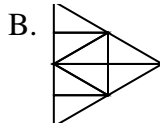
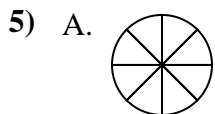


6. \_\_\_\_\_

7. \_\_\_\_\_

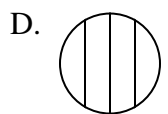
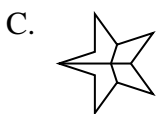
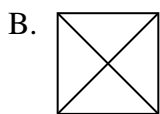
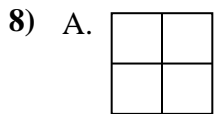
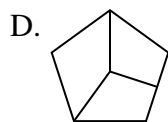
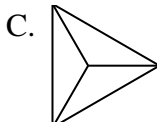
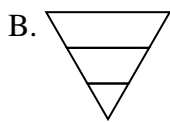
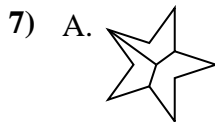
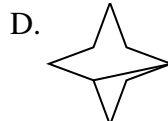
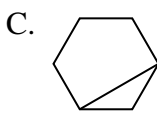
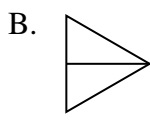
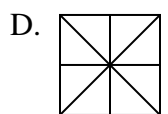
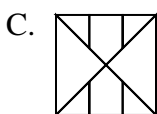
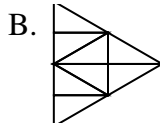
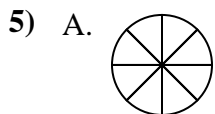
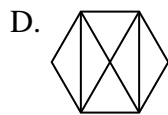
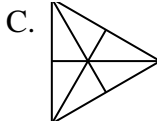
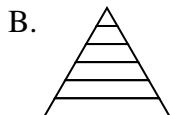
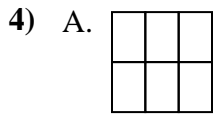
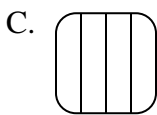
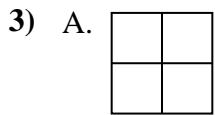
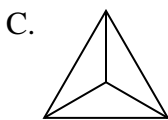
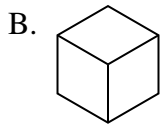
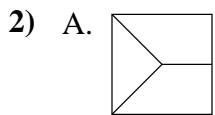
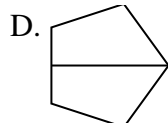
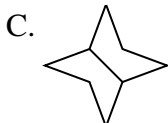
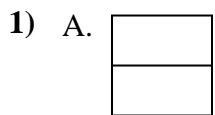


8. \_\_\_\_\_





Determine which choice(s) show the shape partitioned so each piece has equal area. If none, write 'none'.



Answers

1. **A,B,C,D**

2. **B,C**

3. **A,B,D**

4. **A,C**

5. **A,B,D**

6. **A,B**

7. **C**

8. **A,B**