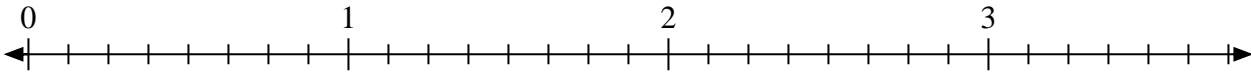


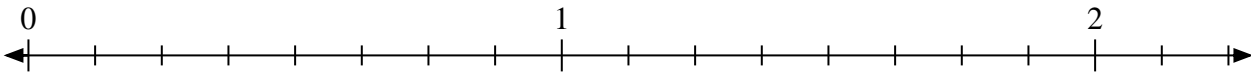


Solve each problem.

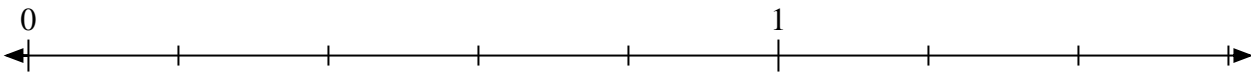
- 1) Mark the location of
- $\frac{10}{8}$



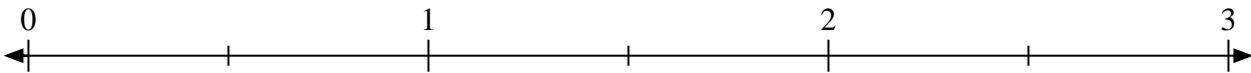
- 2) Mark the location of
- $\frac{11}{8}$




- 3) Mark the location of
- $\frac{6}{5}$



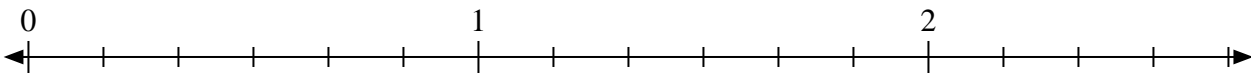
- 4) Mark the location of
- $\frac{4}{2}$




- 5) Mark the location of
- $\frac{8}{6}$




- 6) Mark the location of
- $\frac{14}{6}$




- 7) Mark the location of
- $\frac{8}{4}$



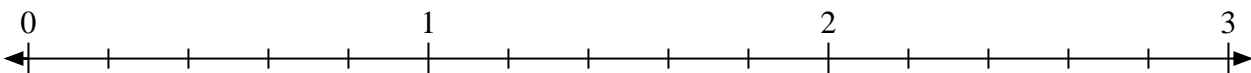
- 8) Mark the location of
- $\frac{9}{6}$



- 9) Mark the location of
- $\frac{5}{2}$



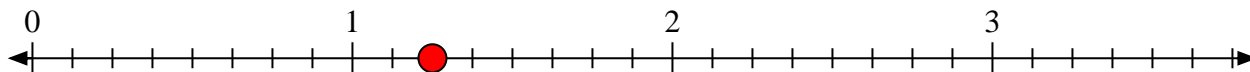
- 10) Mark the location of
- $\frac{11}{5}$



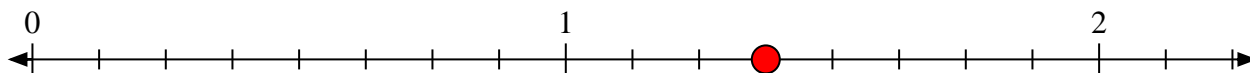


Solve each problem.

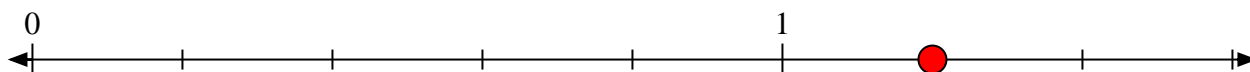
- 1) Mark the location of
- $\frac{10}{8}$



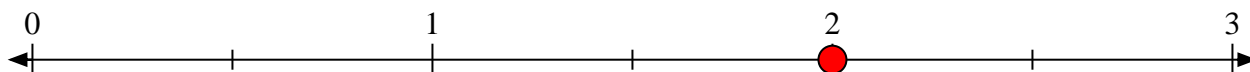
- 2) Mark the location of
- $\frac{11}{8}$




- 3) Mark the location of
- $\frac{6}{5}$



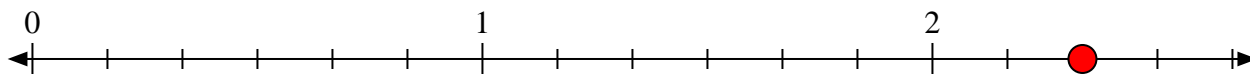
- 4) Mark the location of
- $\frac{4}{2}$




- 5) Mark the location of
- $\frac{8}{6}$



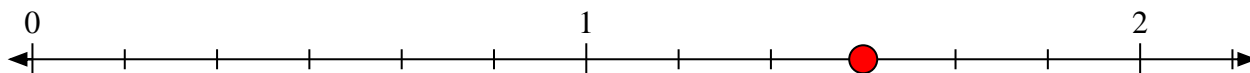
- 6) Mark the location of
- $\frac{14}{6}$




- 7) Mark the location of
- $\frac{8}{4}$



- 8) Mark the location of
- $\frac{9}{6}$



- 9) Mark the location of
- $\frac{5}{2}$



- 10) Mark the location of
- $\frac{11}{5}$

