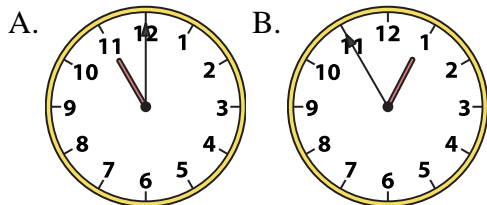




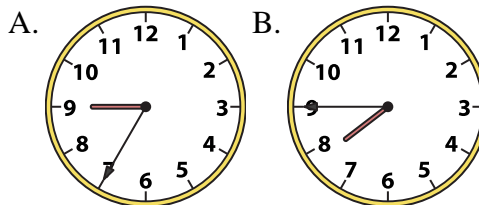
Determine which clock accurately shows the time.

Answers

1) 11:00



2) 7:45

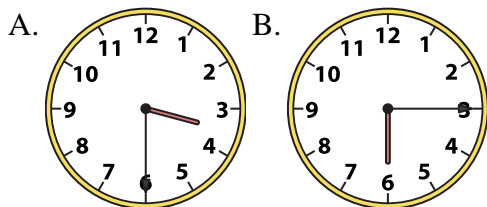


1. _____

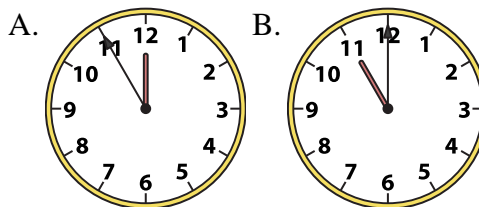
2. _____

3. _____

3) 3:30



4) 11:00

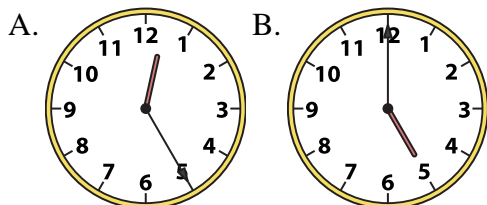


4. _____

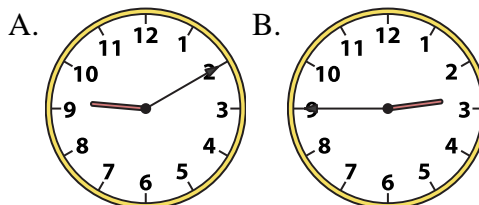
5. _____

6. _____

5) 5:00



6) 2:45



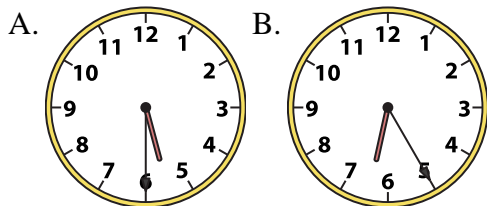
7. _____

8. _____

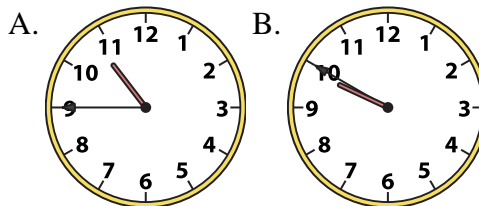
9. _____

10. _____

7) 5:30



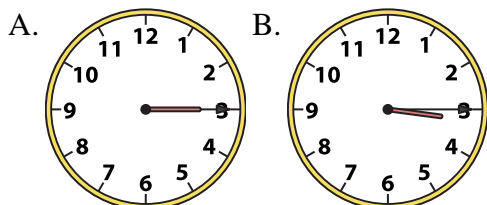
8) 10:45



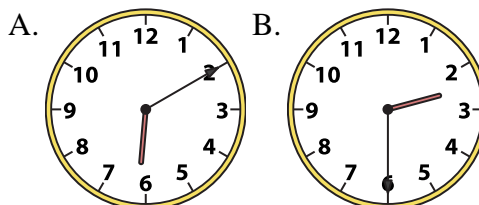
11. _____

12. _____

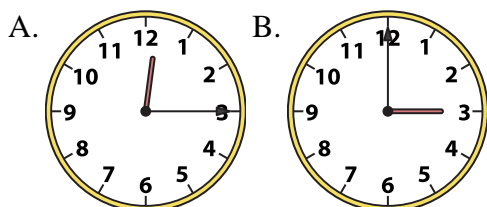
9) 3:15



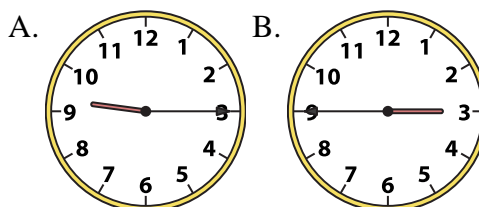
10) 2:30



11) 12:15



12) 9:15



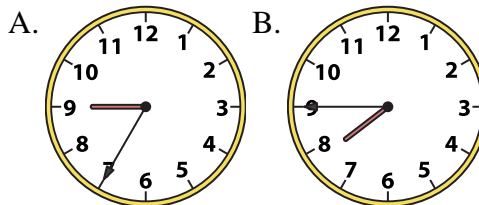
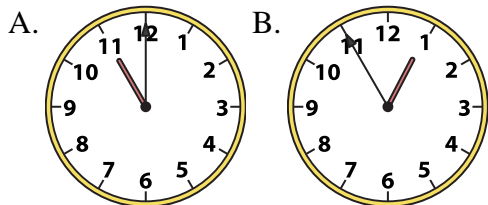


Determine which clock accurately shows the time.

Answers

1) 11:00

2) 7:45

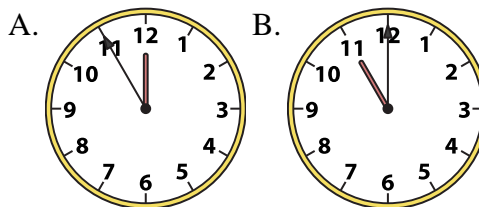
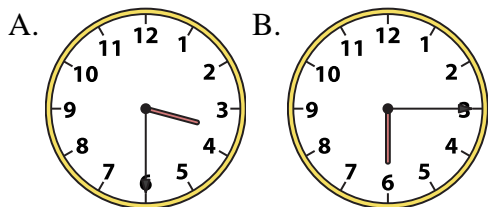


1. **A**

2. **B**

3) 3:30

4) 11:00



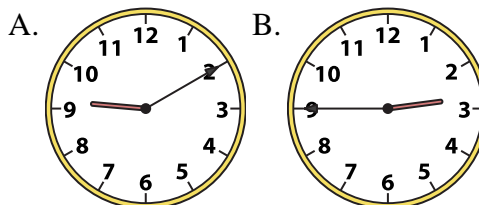
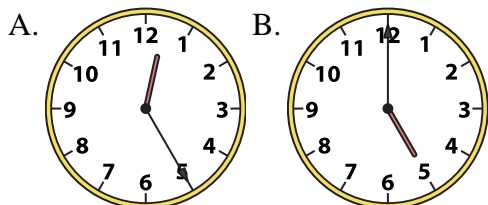
3. **A**

4. **B**

5. **B**

5) 5:00

6) 2:45



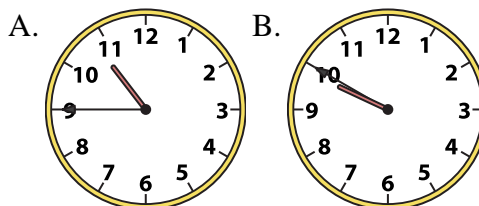
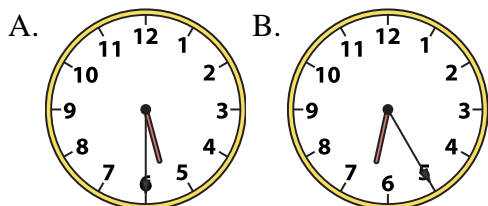
6. **B**

7. **A**

8. **A**

7) 5:30

8) 10:45



9. **B**

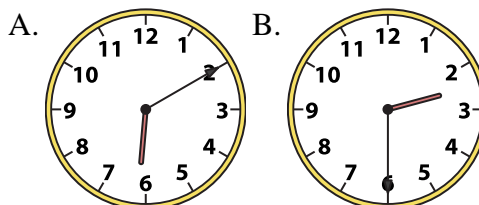
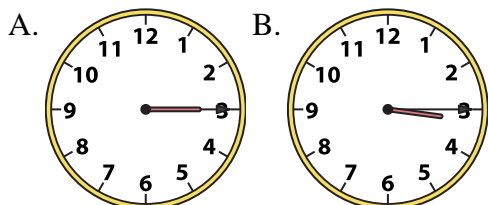
10. **B**

11. **A**

12. **A**

9) 3:15

10) 2:30



11) 12:15

12) 9:15

