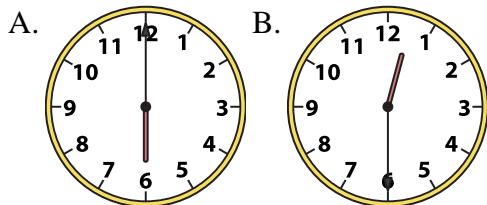




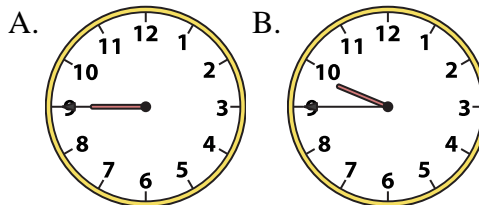
Determine which clock accurately shows the time.

Answers

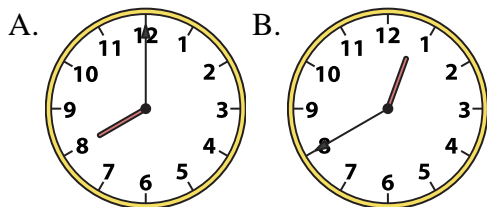
1) 12:30



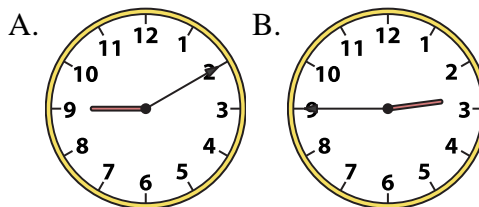
2) 9:45



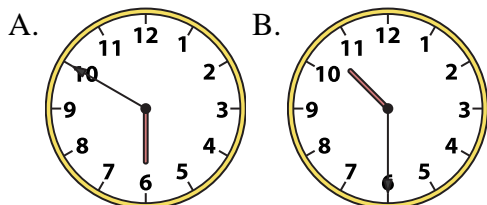
3) 8:00



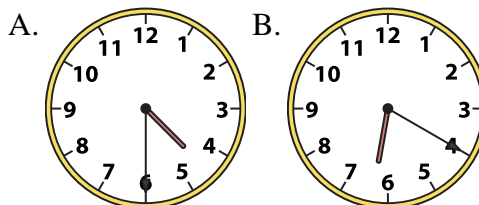
4) 2:45



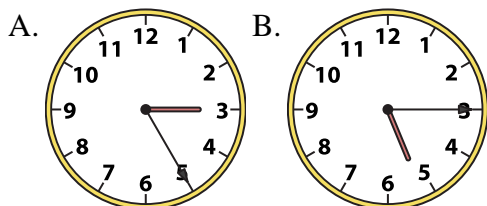
5) 10:30



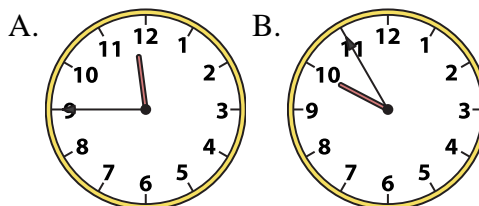
6) 4:30



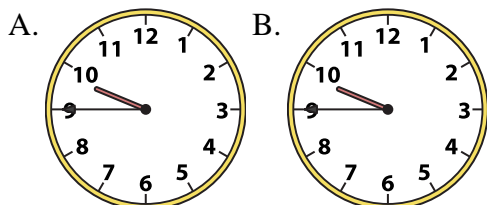
7) 5:15



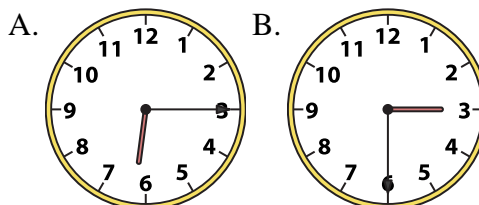
8) 11:45



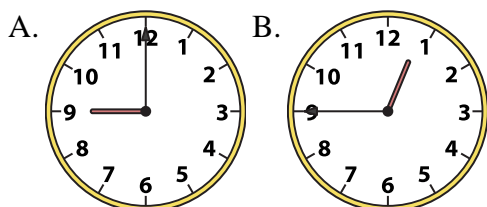
9) 9:45



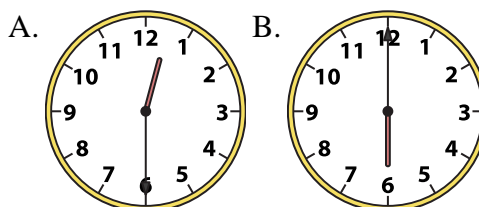
10) 6:15



11) 12:45



12) 6:00



1. _____
2. _____
3. _____
4. _____
5. _____
6. _____
7. _____
8. _____
9. _____
10. _____
11. _____
12. _____

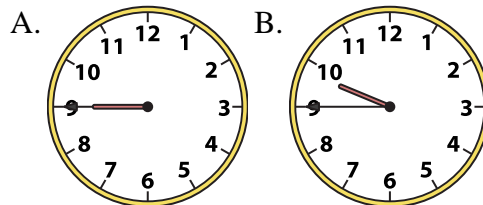
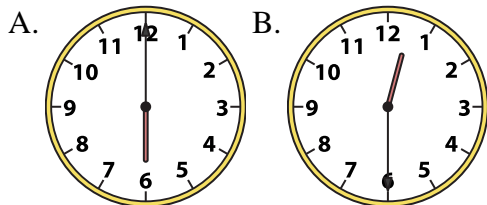


Determine which clock accurately shows the time.

Answers

1) 12:30

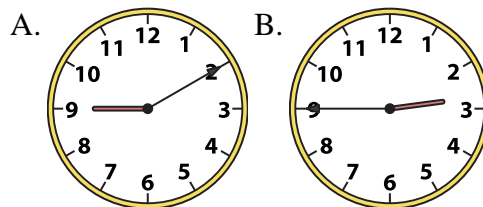
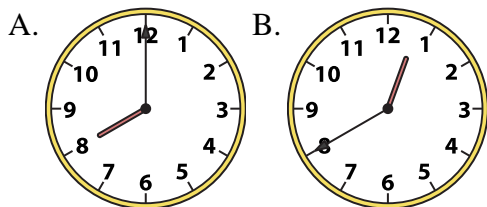
2) 9:45



- 1. **B**
- 2. **B**
- 3. **A**

3) 8:00

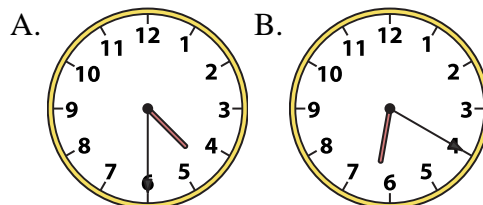
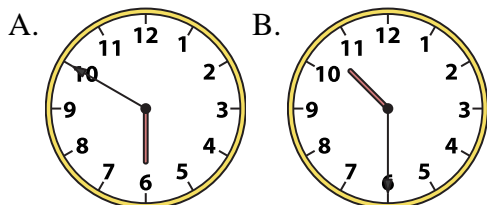
4) 2:45



- 4. **B**
- 5. **B**
- 6. **A**

5) 10:30

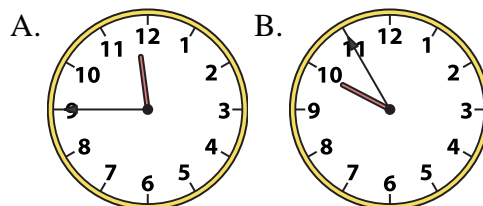
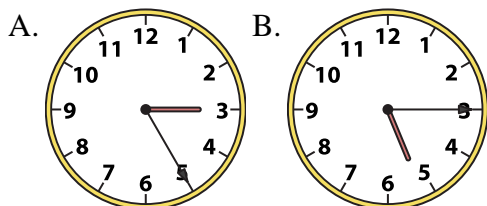
6) 4:30



- 7. **B**
- 8. **A**
- 9. **B**
- 10. **A**

7) 5:15

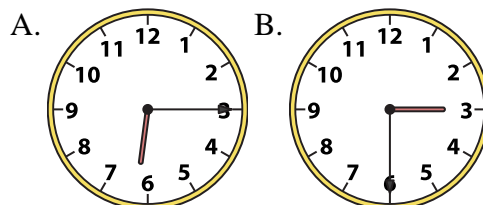
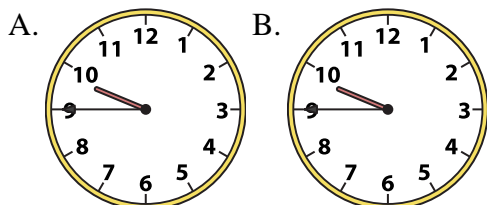
8) 11:45



- 11. **B**
- 12. **B**

9) 9:45

10) 6:15



11) 12:45

12) 6:00

