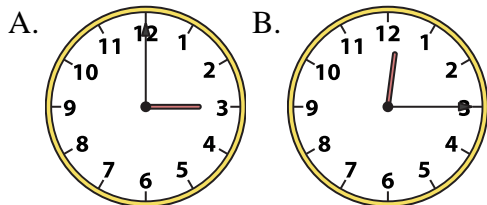




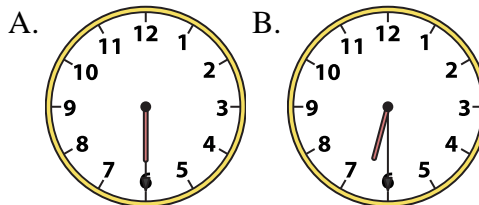
Determine which clock accurately shows the time.

Answers

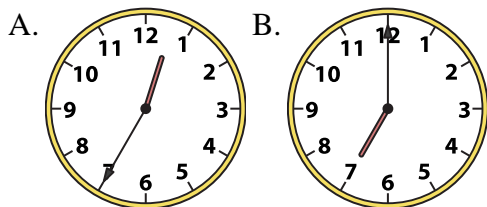
1) 12:15



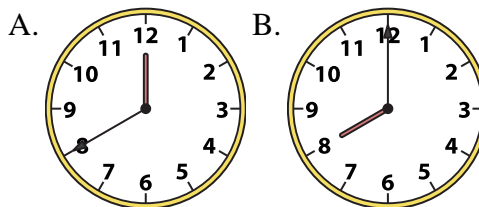
2) 6:30



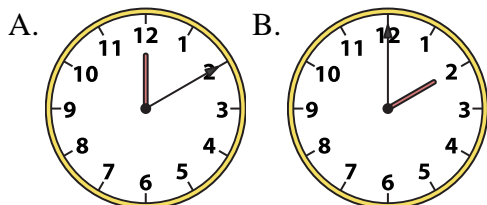
3) 7:00



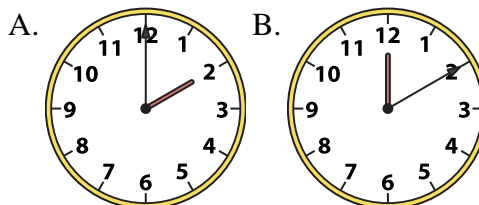
4) 8:00



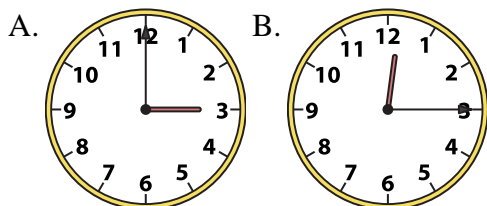
5) 2:00



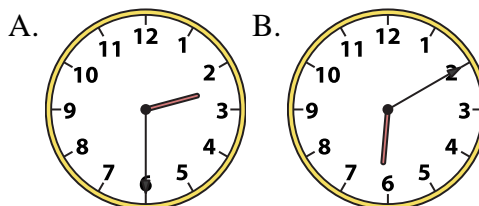
6) 2:00



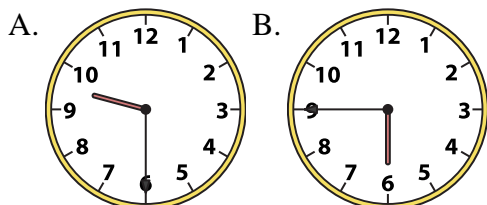
7) 12:15



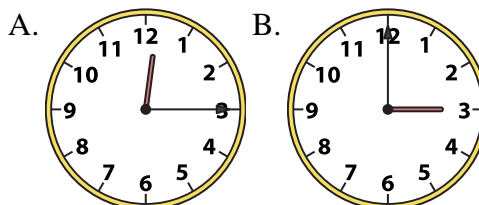
8) 2:30



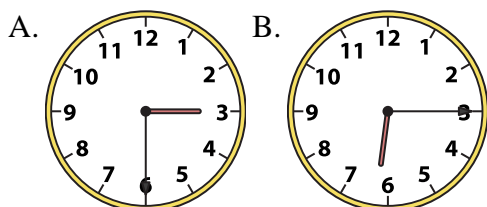
9) 9:30



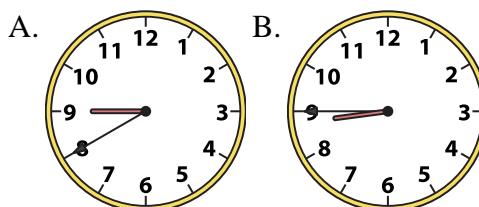
10) 3:00



11) 6:15



12) 8:45



1. _____
2. _____
3. _____
4. _____
5. _____
6. _____
7. _____
8. _____
9. _____
10. _____
11. _____
12. _____

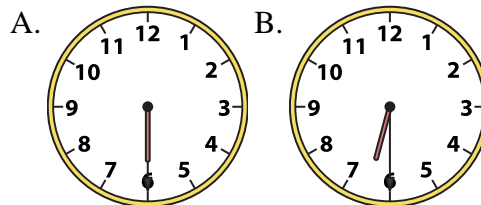
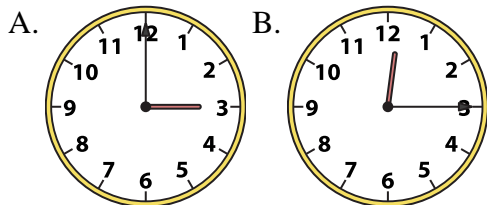


Determine which clock accurately shows the time.

Answers

1) 12:15

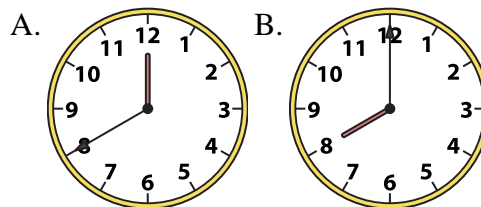
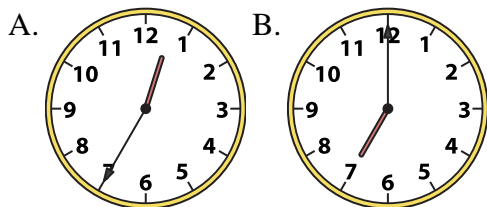
2) 6:30



1. **B**

3) 7:00

4) 8:00



2. **B**

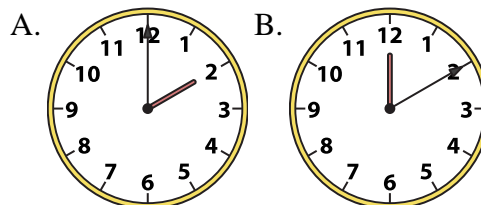
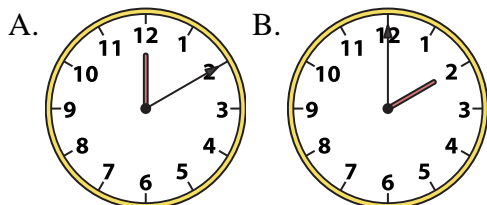
3. **B**

4. **B**

5. **B**

5) 2:00

6) 2:00



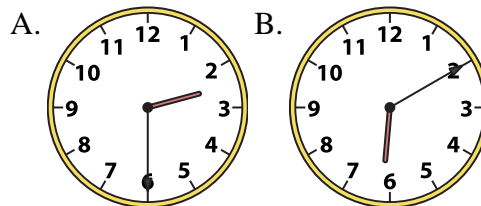
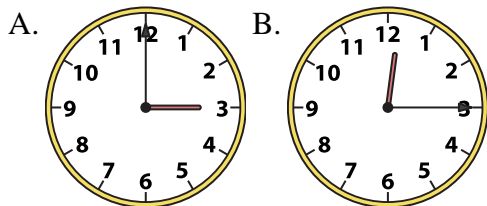
6. **A**

7. **B**

8. **A**

7) 12:15

8) 2:30



9. **A**

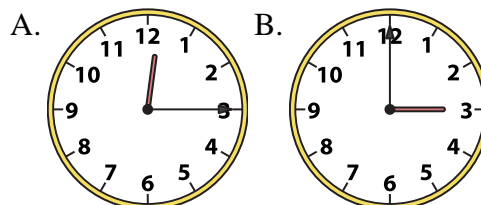
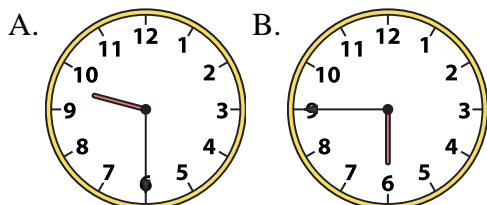
10. **B**

11. **B**

12. **B**

9) 9:30

10) 3:00



11) 6:15

12) 8:45

