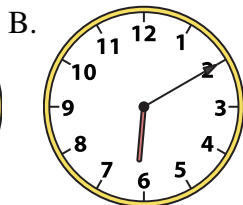
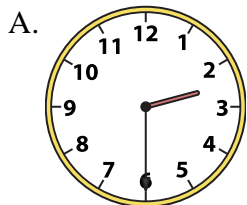




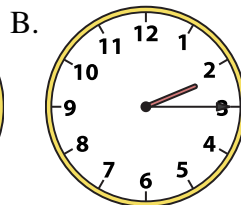
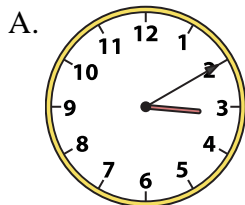
Determine which clock accurately shows the time.

**Answers**

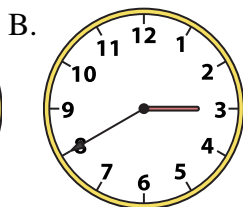
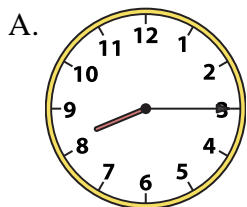
1) 2:30



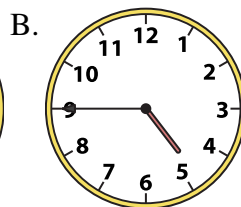
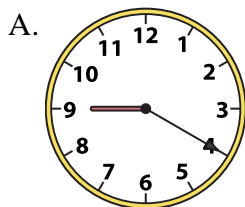
2) 2:15




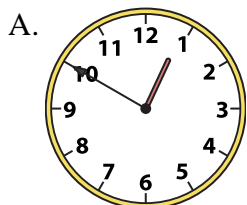
3) 8:15




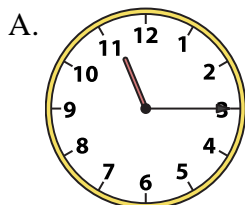
4) 4:45




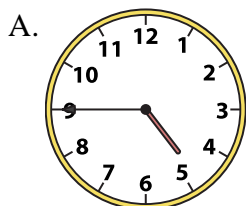
5) 10:00




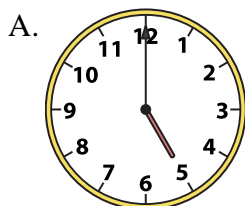
6) 11:15




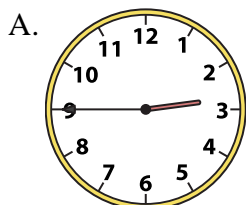
7) 4:45





8) 5:00





9) 2:45



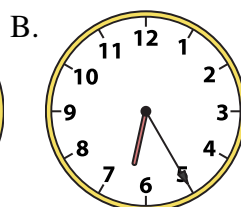

10) 5:00



11) 8:00



12) 5:30



1. \_\_\_\_\_
2. \_\_\_\_\_
3. \_\_\_\_\_
4. \_\_\_\_\_
5. \_\_\_\_\_
6. \_\_\_\_\_
7. \_\_\_\_\_
8. \_\_\_\_\_
9. \_\_\_\_\_
10. \_\_\_\_\_
11. \_\_\_\_\_
12. \_\_\_\_\_

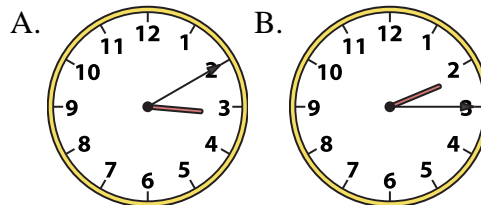
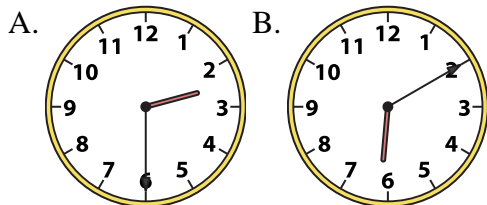


Determine which clock accurately shows the time.

**Answers**

1) 2:30

2) 2:15

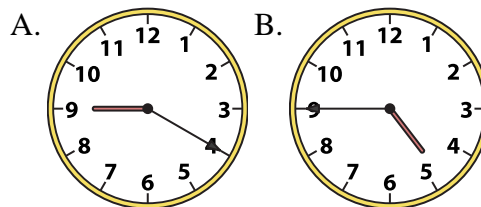
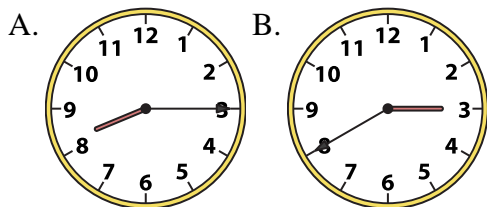


1.     **A**    

2.     **B**    

3) 8:15

4) 4:45



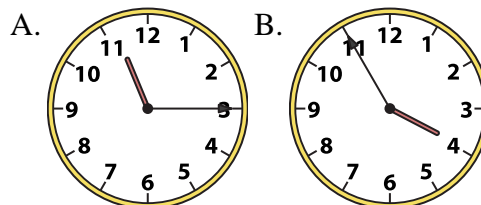
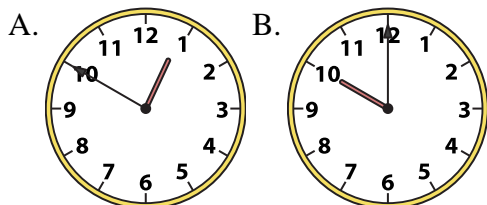
3.     **A**    

4.     **B**    

5.     **B**    

5) 10:00

6) 11:15



6.     **A**    

7.     **A**    

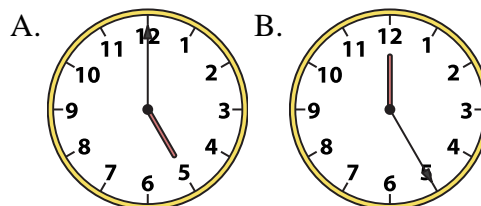
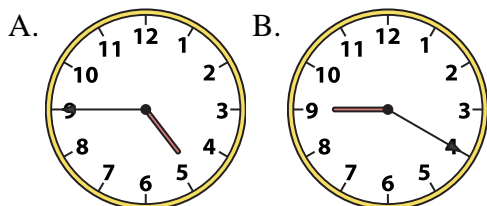
8.     **A**    

9.     **A**    

10.     **A**    

7) 4:45

8) 5:00

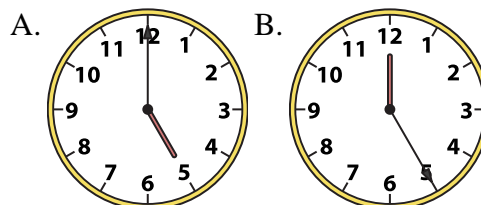
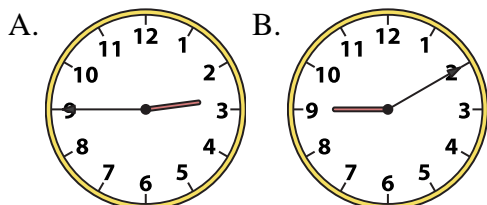


11.     **A**    

12.     **A**    

9) 2:45

10) 5:00



11) 8:00

12) 5:30

