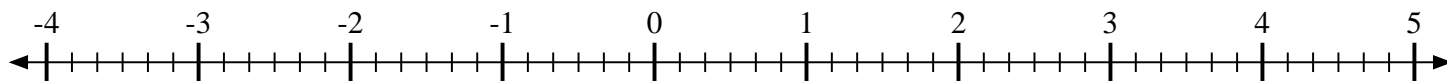


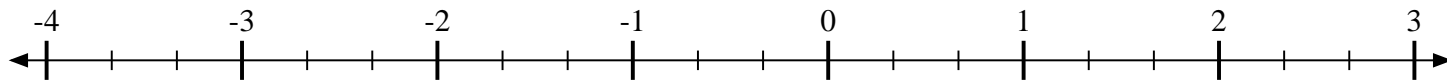


Mark each location described.

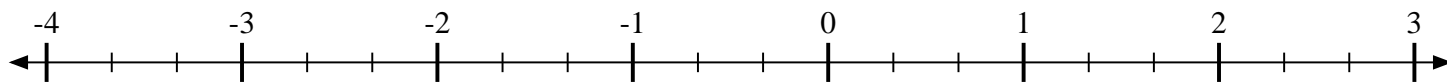
- 1) Mark the location of $3\frac{5}{6}$



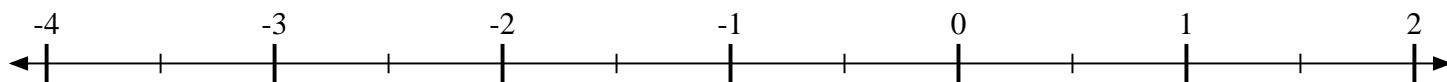
- 2) Mark the location of $\frac{1}{3}$



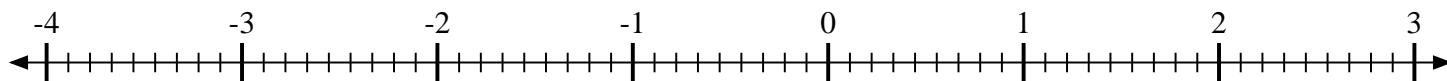
- 3) Mark the location of $1\frac{1}{3}$



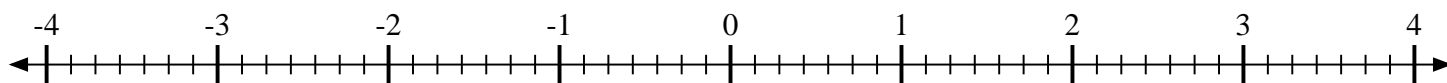
- 4) Mark the location of $-1\frac{1}{2}$



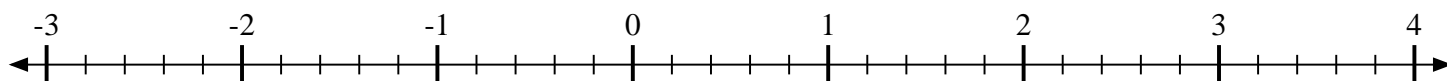
- 5) Mark the location of $1\frac{7}{9}$



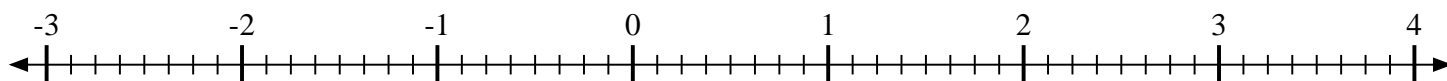
- 6) Mark the location of $-1\frac{3}{7}$



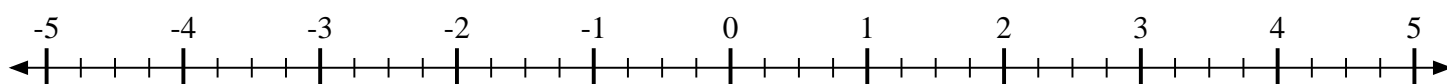
- 7) Mark the location of $1\frac{1}{5}$



- 8) Mark the location of $-1\frac{6}{8}$



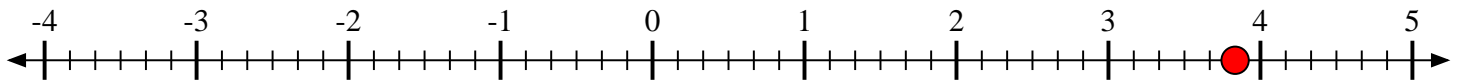
- 9) Mark the location of $-4\frac{3}{4}$



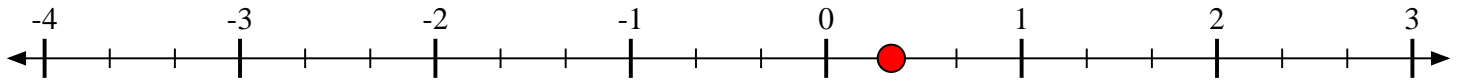


Mark each location described.

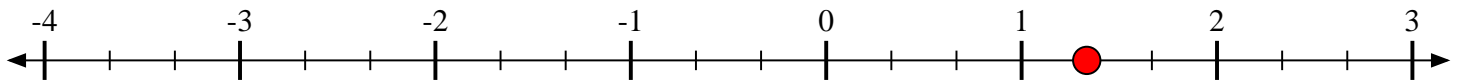
- 1) Mark the location of
- $3\frac{5}{6}$



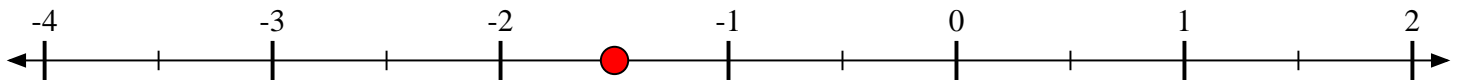
- 2) Mark the location of
- $\frac{1}{3}$



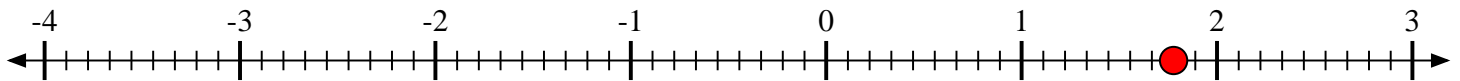
- 3) Mark the location of
- $1\frac{1}{3}$



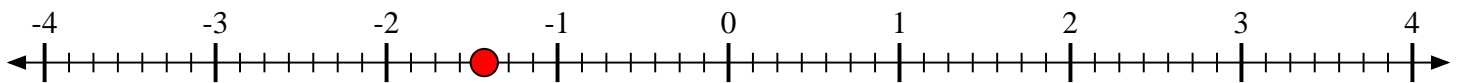
- 4) Mark the location of
- $-1\frac{1}{2}$



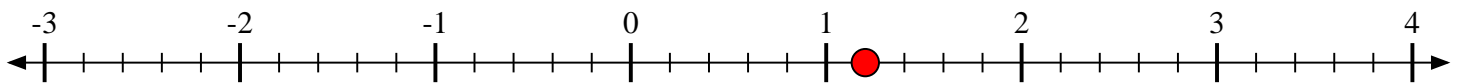
- 5) Mark the location of
- $1\frac{7}{9}$



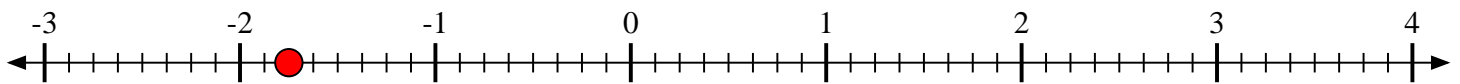
- 6) Mark the location of
- $-1\frac{3}{7}$



- 7) Mark the location of
- $1\frac{1}{5}$



- 8) Mark the location of
- $-1\frac{6}{8}$



- 9) Mark the location of
- $-4\frac{3}{4}$

