

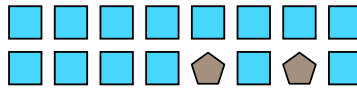


Solve each problem.

Ex) Express the moons as a fraction of the entire set.




1) Express the squares as a fraction of the entire set.




2) Express the stars as a fraction of the entire set.



3) Express the stars as a fraction of the entire set.



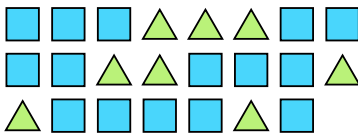
4) Express the moons as a fraction of the entire set.




5) Express the squares as a fraction of the entire set.



6) Express the triangles as a fraction of the entire set.



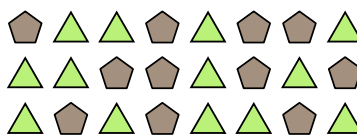
7) Express the stars as a fraction of the entire set.



8) Express the stars as a fraction of the entire set.



9) Express the triangles as a fraction of the entire set.



10) Express the circles as a fraction of the entire set.



11) Express the hearts as a fraction of the entire set.



Answers

Ex. $\frac{6}{8}$

1. $\frac{14}{16}$

2. $\frac{11}{19}$

3. $\frac{13}{25}$

4. $\frac{5}{14}$

5. $\frac{4}{7}$

6. $\frac{8}{23}$

7. $\frac{9}{24}$

8. $\frac{6}{13}$

9. $\frac{13}{24}$

10. $\frac{3}{5}$

11. $\frac{3}{12}$