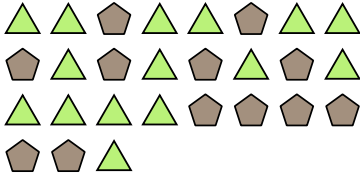





Solve each problem.

Ex) Express the pentagons as a fraction of the entire set.



1) Express the circles as a fraction of the entire set.



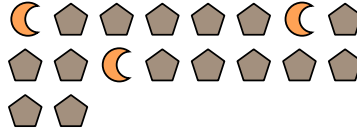
Answers

Ex. $\frac{12}{27}$

2) Express the stars as a fraction of the entire set.



3) Express the moons as a fraction of the entire set.



1. $\frac{11}{22}$

2. $\frac{7}{16}$

3. $\frac{3}{18}$

4. $\frac{9}{11}$

5. $\frac{4}{15}$

6. $\frac{12}{20}$

7. $\frac{8}{18}$

8. $\frac{11}{13}$

9. $\frac{15}{26}$

10. $\frac{4}{9}$

11. $\frac{11}{14}$

4) Express the hearts as a fraction of the entire set.




5) Express the stars as a fraction of the entire set.



6) Express the moons as a fraction of the entire set.




7) Express the pentagons as a fraction of the entire set.



8) Express the pentagons as a fraction of the entire set.



9) Express the circles as a fraction of the entire set.



10) Express the stars as a fraction of the entire set.



11) Express the triangles as a fraction of the entire set.

