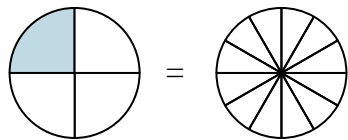


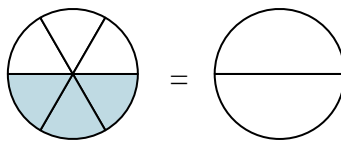


Shade in the visual fraction to find the equivalent fraction.

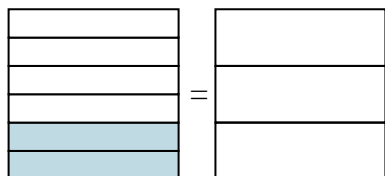
Ex) $\frac{1}{4} = \frac{3}{12}$



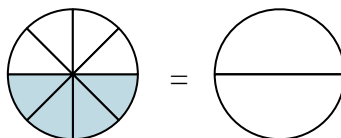
1) $\frac{3}{6} =$



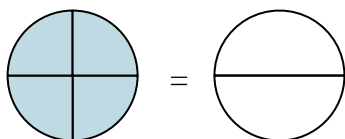
2) $\frac{2}{6} =$



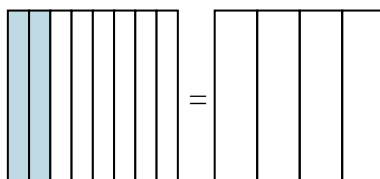
3) $\frac{4}{8} =$



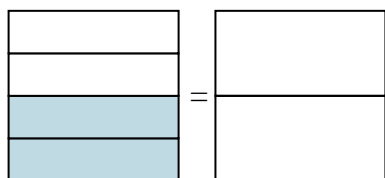
4) $\frac{4}{4} =$



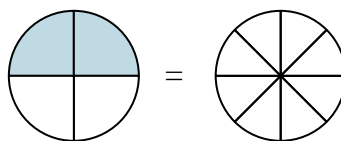
5) $\frac{2}{8} =$



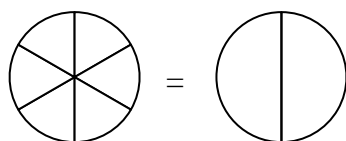
6) $\frac{2}{4} =$



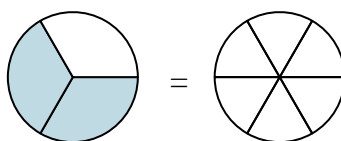
7) $\frac{2}{4} =$



8) $\frac{0}{6} =$



9) $\frac{2}{3} =$



Answers

Ex. $\frac{3}{12}$

1. _____

2. _____

3. _____

4. _____

5. _____

6. _____

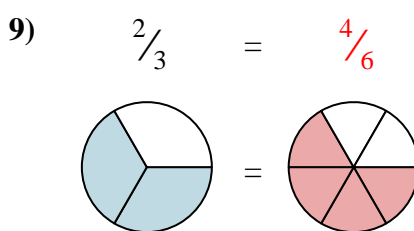
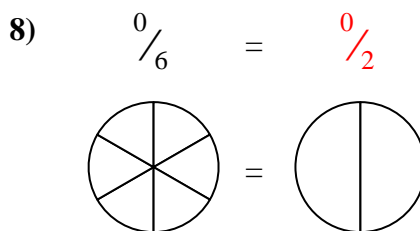
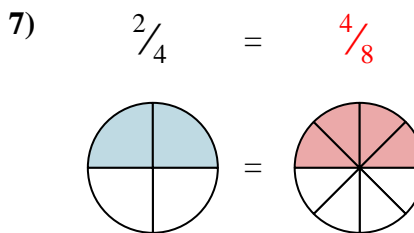
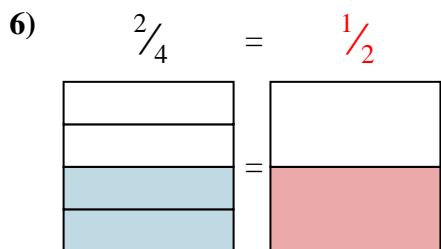
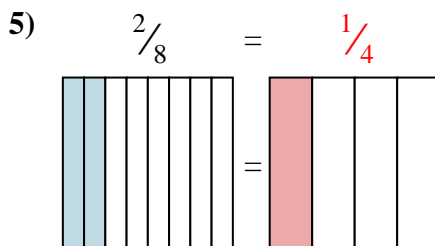
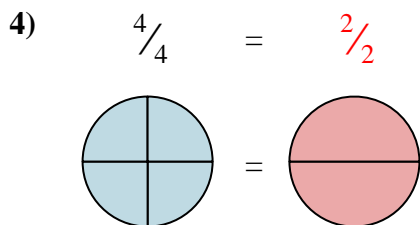
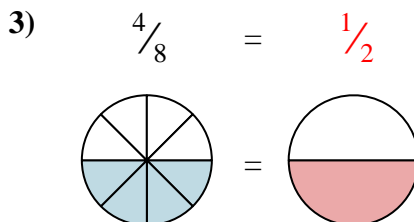
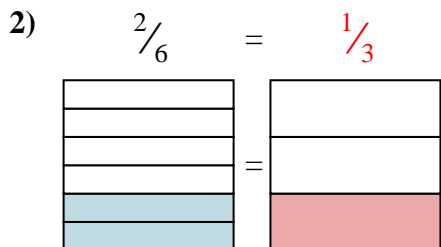
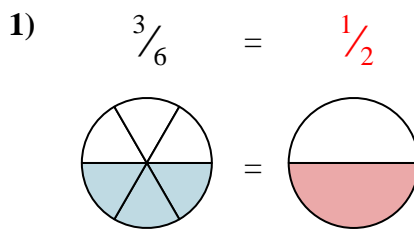
7. _____

8. _____

9. _____



Shade in the visual fraction to find the equivalent fraction.



Answers

- Ex. $\frac{3}{12}$
1. $\frac{1}{2}$
2. $\frac{1}{3}$
3. $\frac{1}{2}$
4. $\frac{2}{2}$
5. $\frac{1}{4}$
6. $\frac{1}{2}$
7. $\frac{4}{8}$
8. $\frac{0}{2}$
9. $\frac{4}{6}$