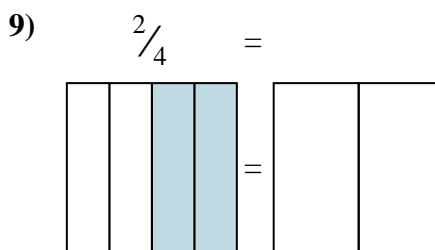
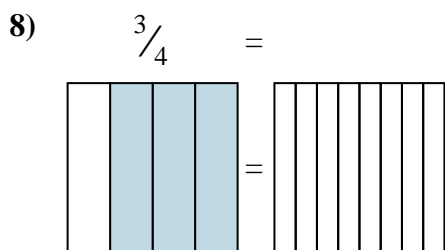
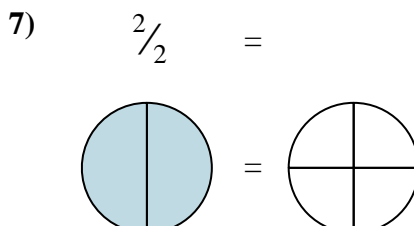
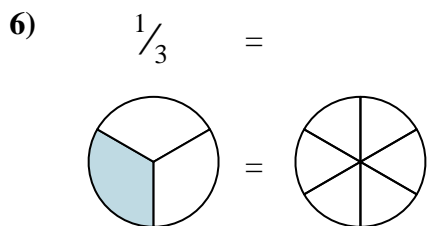
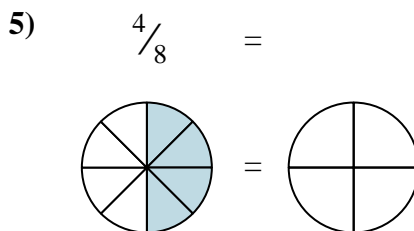
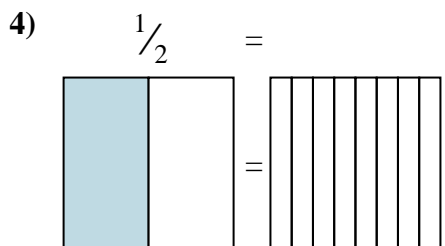
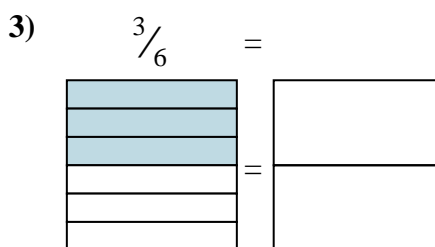
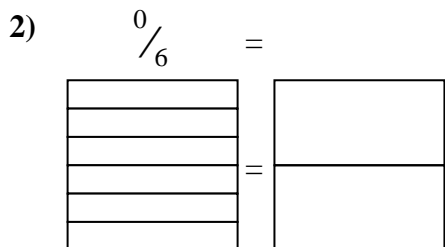
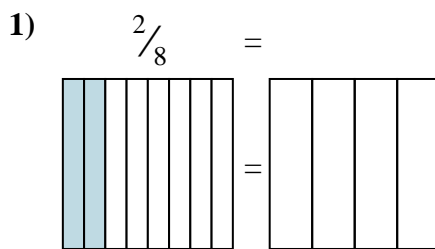




Shade in the visual fraction to find the equivalent fraction.



**Answers**

Ex.  $\frac{3}{12}$

1. \_\_\_\_\_

2. \_\_\_\_\_

3. \_\_\_\_\_

4. \_\_\_\_\_

5. \_\_\_\_\_

6. \_\_\_\_\_

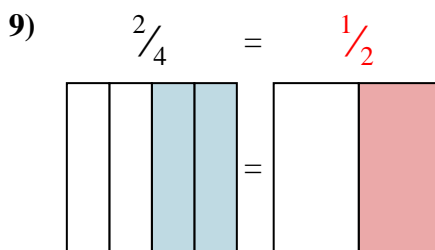
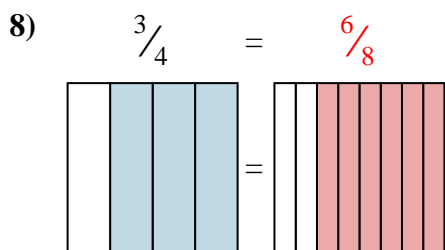
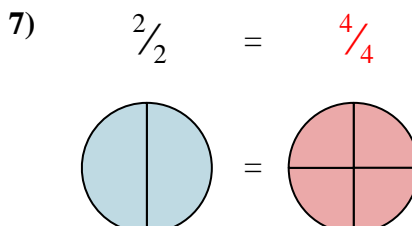
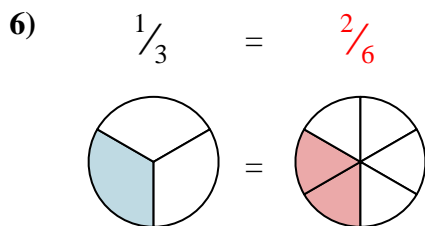
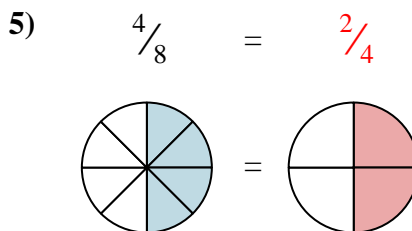
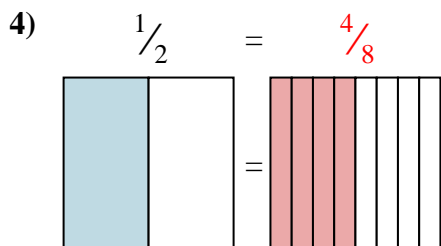
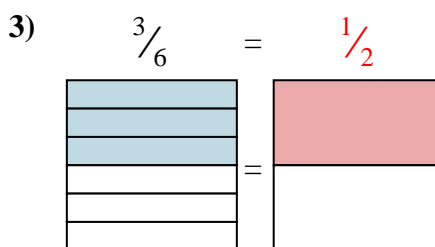
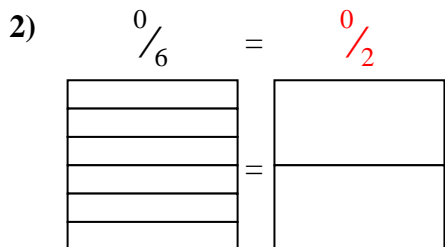
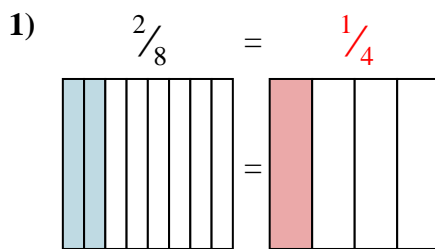
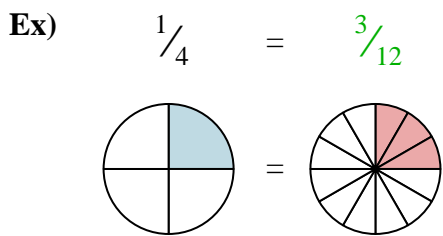
7. \_\_\_\_\_

8. \_\_\_\_\_

9. \_\_\_\_\_



Shade in the visual fraction to find the equivalent fraction.



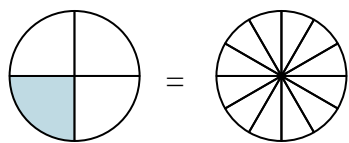
Answers

- Ex.  $\frac{3}{12}$
1.  $\frac{1}{4}$
2.  $\frac{0}{2}$
3.  $\frac{1}{2}$
4.  $\frac{4}{8}$
5.  $\frac{2}{4}$
6.  $\frac{2}{6}$
7.  $\frac{4}{4}$
8.  $\frac{6}{8}$
9.  $\frac{1}{2}$

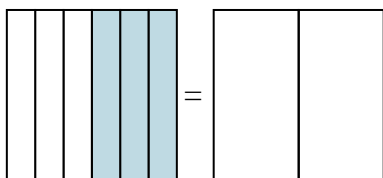


Shade in the visual fraction to find the equivalent fraction.

Ex)  $\frac{1}{4} = \frac{3}{12}$



1)  $\frac{3}{6} =$



Ex.  $\frac{3}{12}$

1. \_\_\_\_\_

2. \_\_\_\_\_

3. \_\_\_\_\_

4. \_\_\_\_\_

5. \_\_\_\_\_

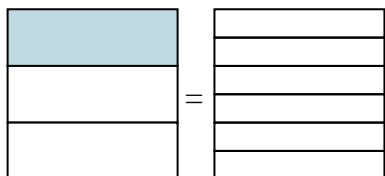
6. \_\_\_\_\_

7. \_\_\_\_\_

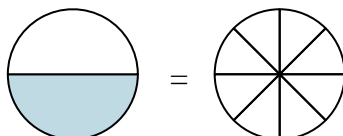
8. \_\_\_\_\_

9. \_\_\_\_\_

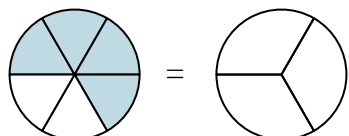
2)  $\frac{1}{3} =$



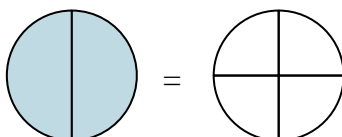
3)  $\frac{1}{2} =$



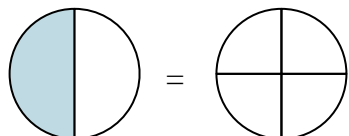
4)  $\frac{4}{6} =$



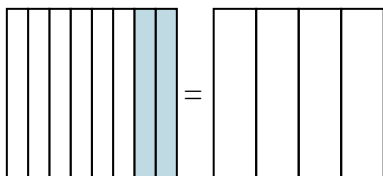
5)  $\frac{2}{2} =$



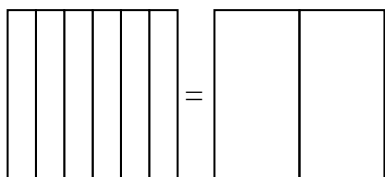
6)  $\frac{1}{2} =$



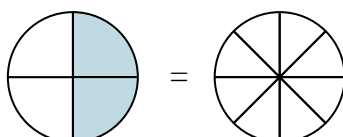
7)  $\frac{2}{8} =$



8)  $\frac{0}{6} =$

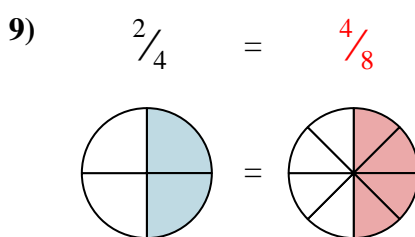
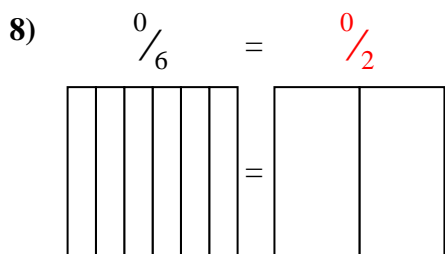
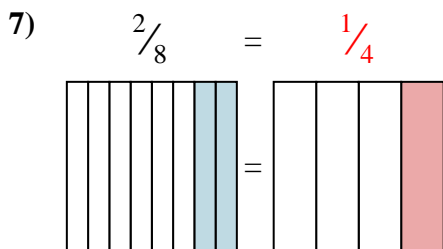
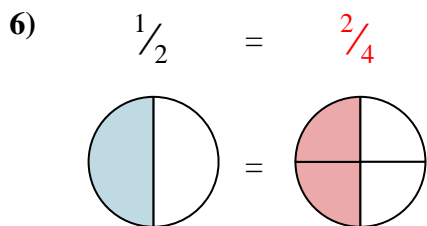
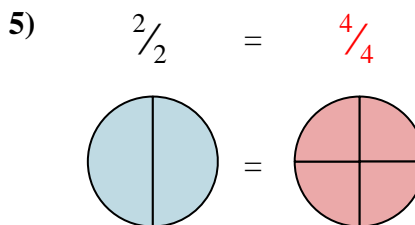
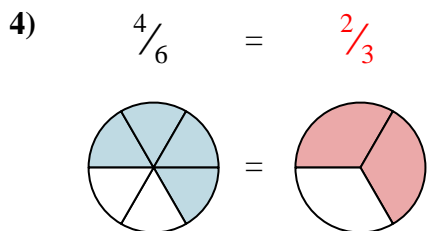
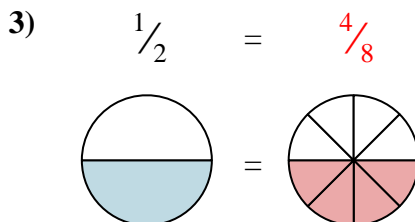
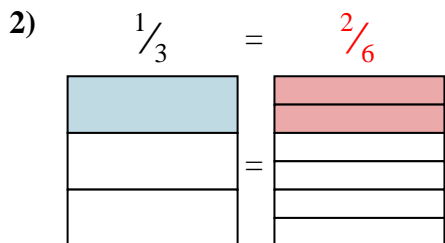
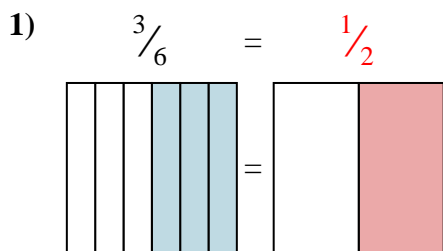
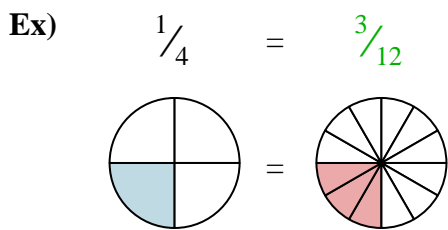


9)  $\frac{2}{4} =$





Shade in the visual fraction to find the equivalent fraction.

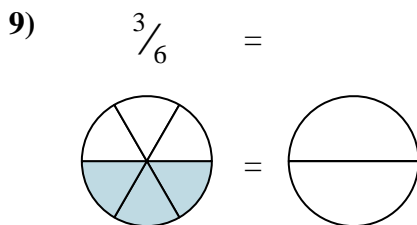
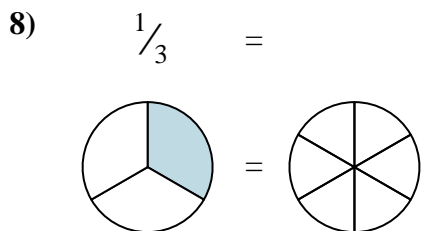
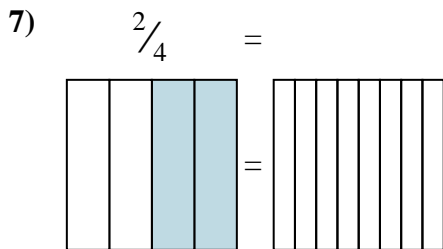
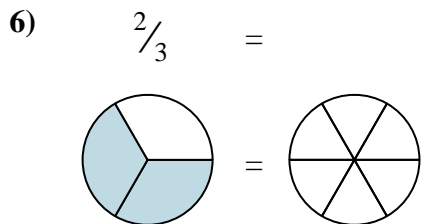
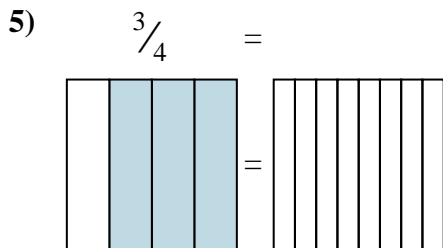
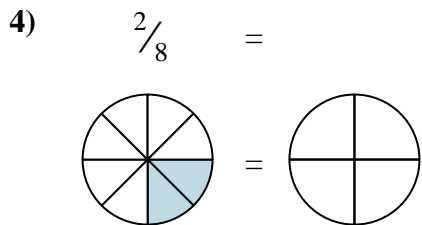
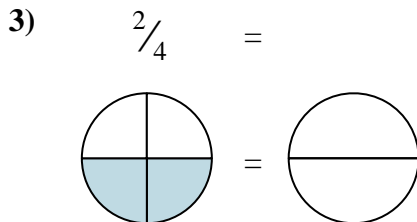
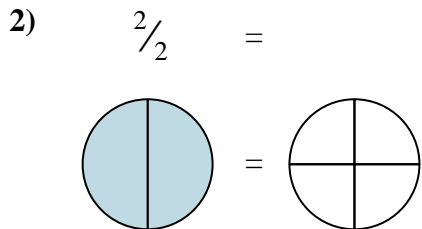
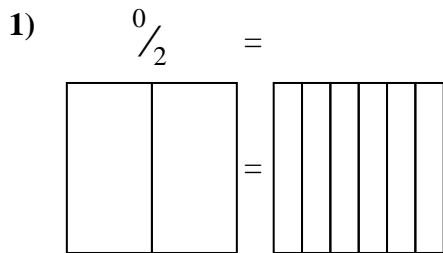
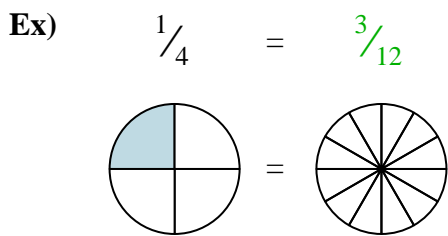


Answers

- Ex.  $\frac{3}{12}$
1.  $\frac{1}{2}$
2.  $\frac{2}{6}$
3.  $\frac{4}{8}$
4.  $\frac{2}{3}$
5.  $\frac{4}{4}$
6.  $\frac{2}{4}$
7.  $\frac{1}{4}$
8.  $\frac{0}{2}$
9.  $\frac{4}{8}$



Shade in the visual fraction to find the equivalent fraction.



Answers

Ex.  $\frac{3}{12}$

1. \_\_\_\_\_

2. \_\_\_\_\_

3. \_\_\_\_\_

4. \_\_\_\_\_

5. \_\_\_\_\_

6. \_\_\_\_\_

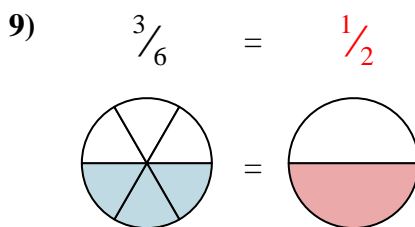
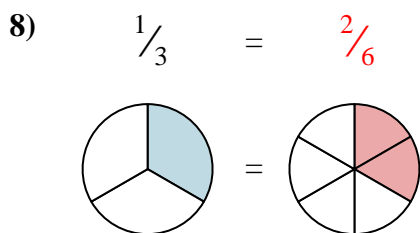
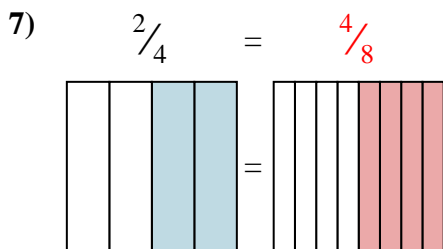
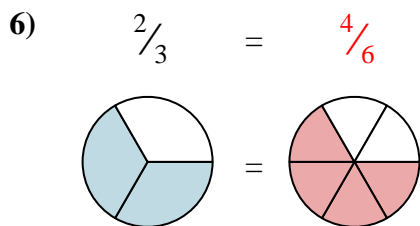
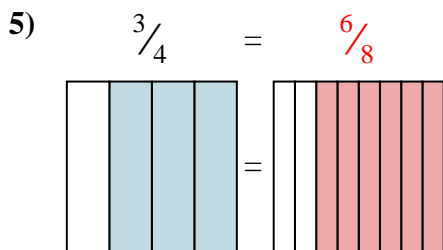
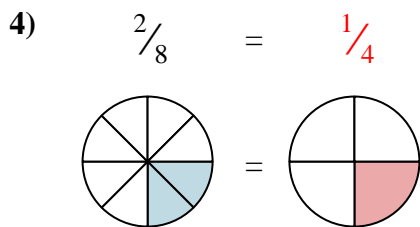
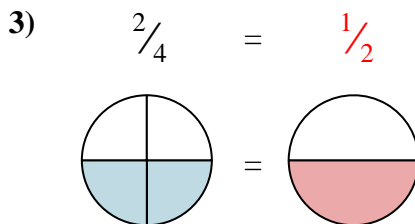
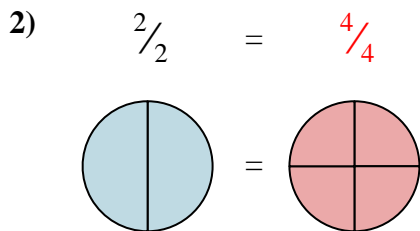
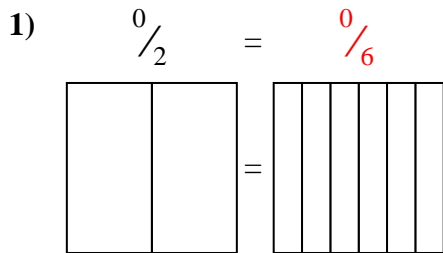
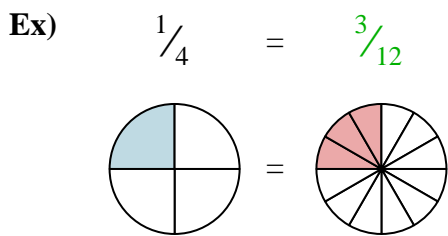
7. \_\_\_\_\_

8. \_\_\_\_\_

9. \_\_\_\_\_



Shade in the visual fraction to find the equivalent fraction.



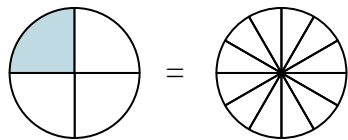
Answers

- Ex.  $\frac{3}{12}$
1.  $\frac{0}{6}$
2.  $\frac{4}{4}$
3.  $\frac{1}{2}$
4.  $\frac{1}{4}$
5.  $\frac{6}{8}$
6.  $\frac{4}{6}$
7.  $\frac{4}{8}$
8.  $\frac{2}{6}$
9.  $\frac{1}{2}$

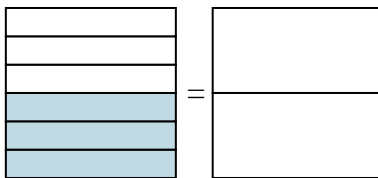


Shade in the visual fraction to find the equivalent fraction.

Ex)  $\frac{1}{4} = \frac{3}{12}$



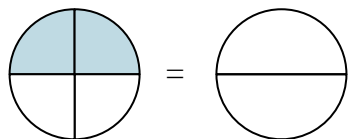
1)  $\frac{3}{6} =$



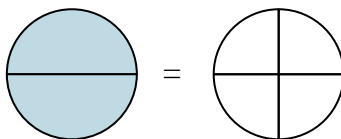
Ex.  $\frac{3}{12}$

- 1. \_\_\_\_\_
- 2. \_\_\_\_\_
- 3. \_\_\_\_\_
- 4. \_\_\_\_\_
- 5. \_\_\_\_\_
- 6. \_\_\_\_\_
- 7. \_\_\_\_\_
- 8. \_\_\_\_\_
- 9. \_\_\_\_\_

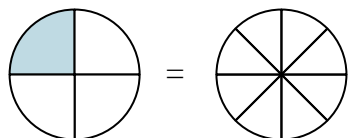
2)  $\frac{2}{4} =$



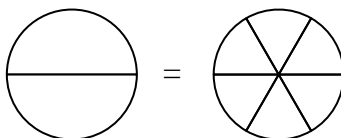
3)  $\frac{2}{2} =$



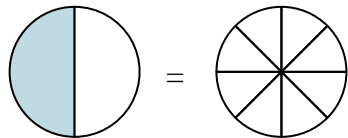
4)  $\frac{1}{4} =$



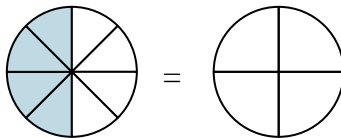
5)  $\frac{0}{2} =$



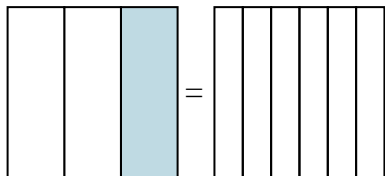
6)  $\frac{1}{2} =$



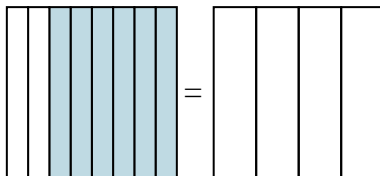
7)  $\frac{4}{8} =$



8)  $\frac{1}{3} =$

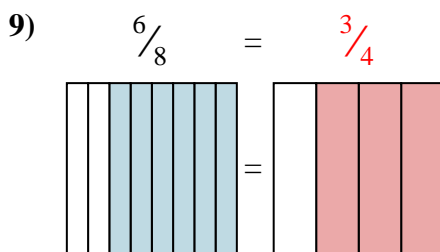
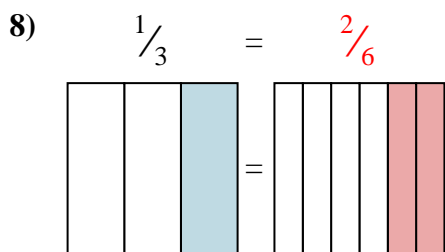
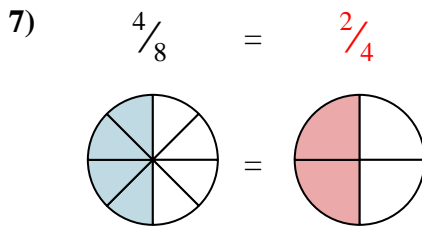
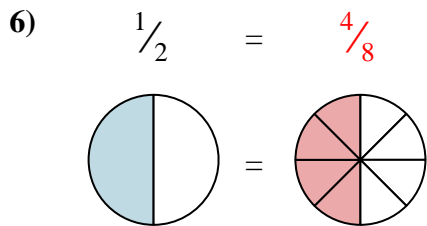
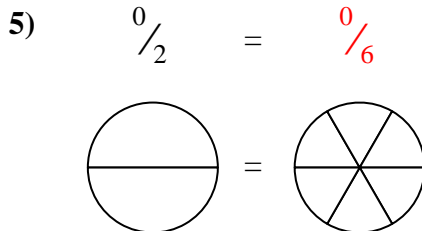
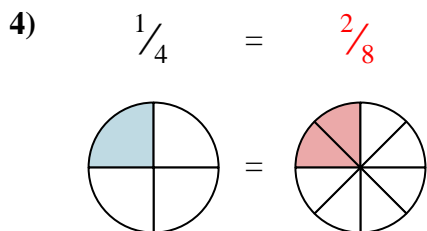
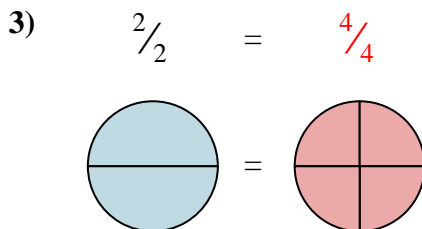
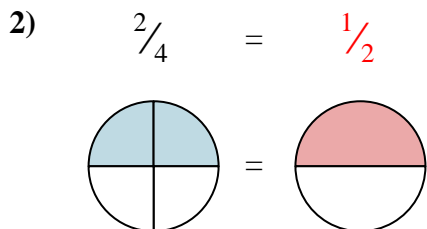
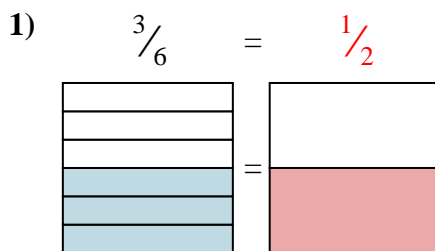
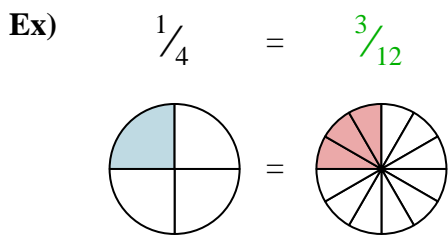


9)  $\frac{6}{8} =$





Shade in the visual fraction to find the equivalent fraction.



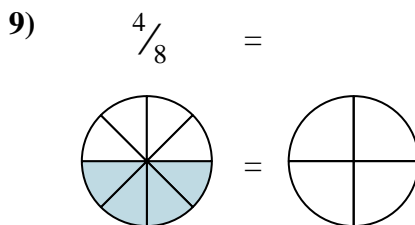
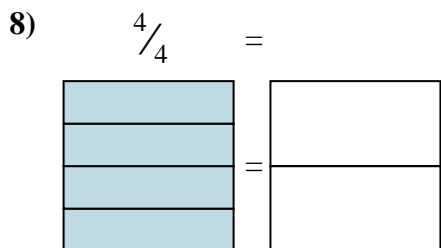
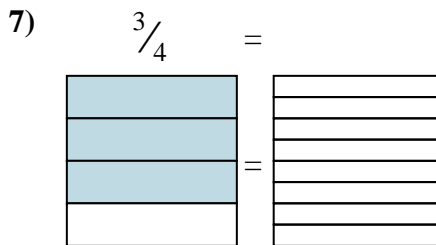
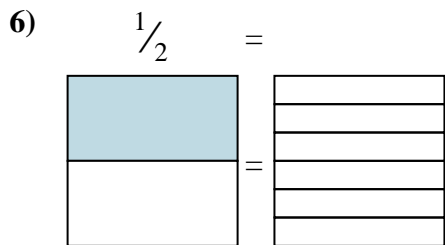
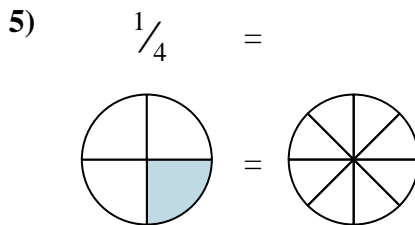
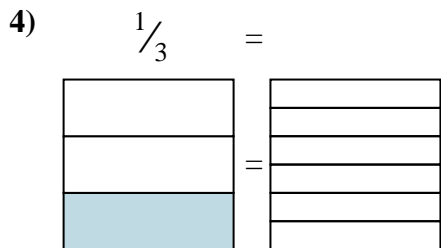
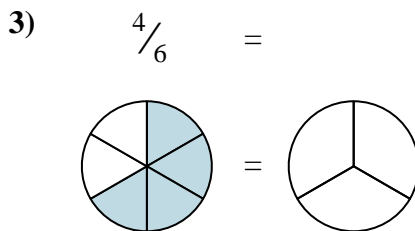
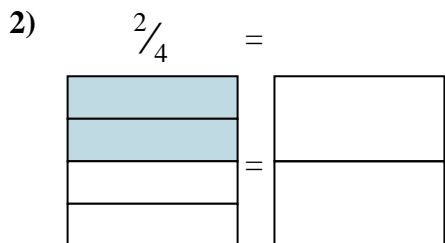
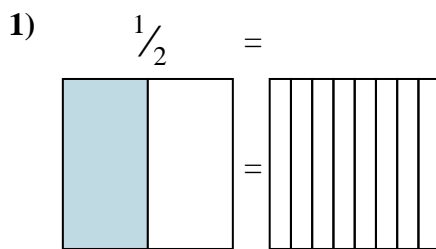
Answers

- Ex.  $\frac{3}{12}$
1.  $\frac{1}{2}$
2.  $\frac{1}{2}$
3.  $\frac{4}{4}$
4.  $\frac{2}{8}$
5.  $\frac{0}{6}$
6.  $\frac{4}{8}$
7.  $\frac{2}{4}$
8.  $\frac{2}{6}$
9.  $\frac{3}{4}$





Shade in the visual fraction to find the equivalent fraction.



Answers

Ex.  $\frac{3}{12}$

1. \_\_\_\_\_

2. \_\_\_\_\_

3. \_\_\_\_\_

4. \_\_\_\_\_

5. \_\_\_\_\_

6. \_\_\_\_\_

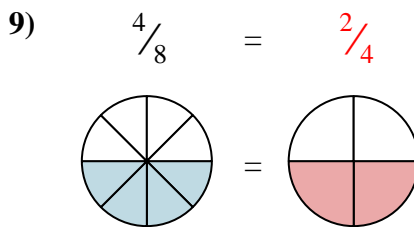
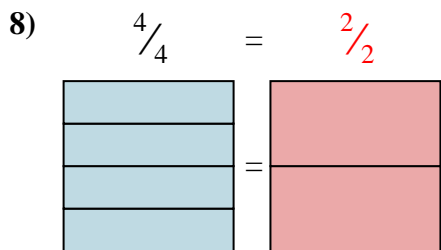
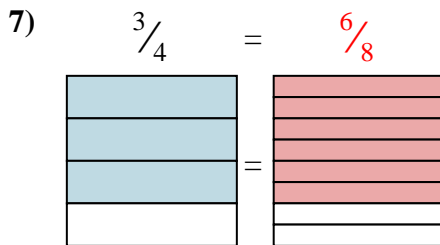
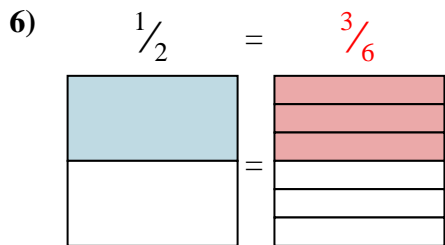
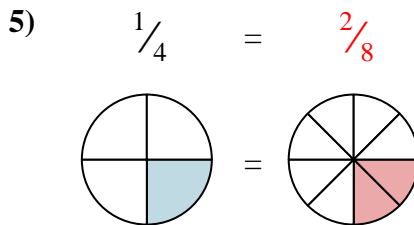
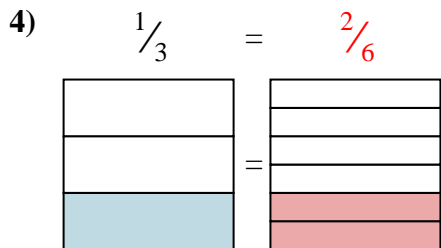
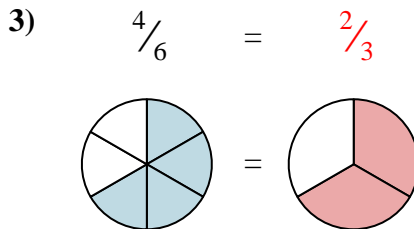
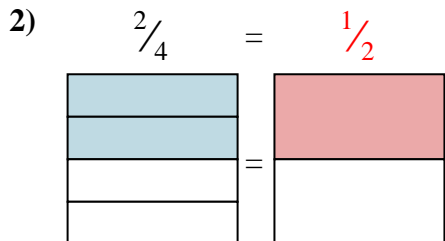
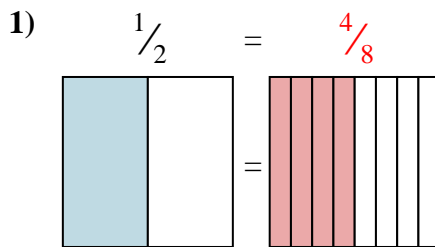
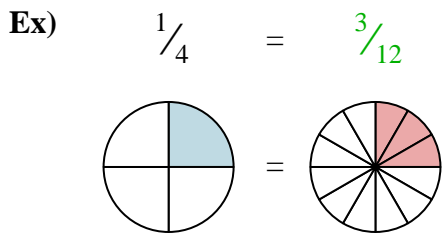
7. \_\_\_\_\_

8. \_\_\_\_\_

9. \_\_\_\_\_



Shade in the visual fraction to find the equivalent fraction.



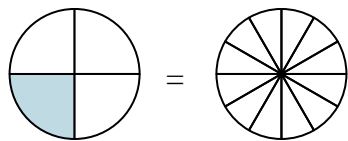
Answers

- Ex.  $\frac{3}{12}$
1.  $\frac{4}{8}$
2.  $\frac{1}{2}$
3.  $\frac{2}{3}$
4.  $\frac{2}{6}$
5.  $\frac{2}{8}$
6.  $\frac{3}{6}$
7.  $\frac{6}{8}$
8.  $\frac{2}{2}$
9.  $\frac{2}{4}$

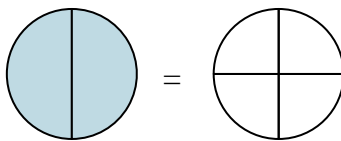


Shade in the visual fraction to find the equivalent fraction.

Ex)  $\frac{1}{4} = \frac{3}{12}$

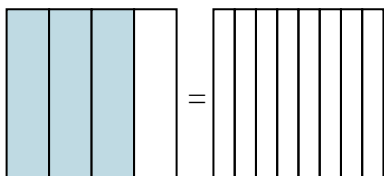


1)  $\frac{2}{2} =$

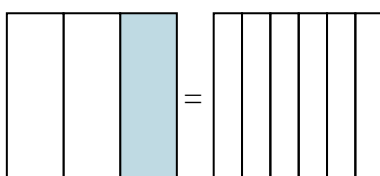


Ex.  $\frac{3}{12}$

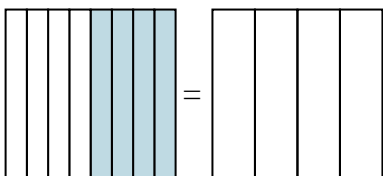
2)  $\frac{3}{4} =$



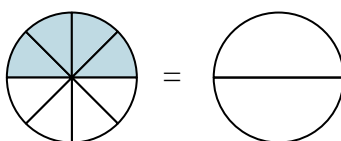
3)  $\frac{1}{3} =$



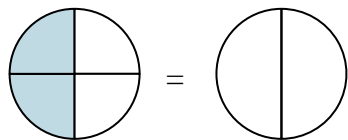
4)  $\frac{4}{8} =$



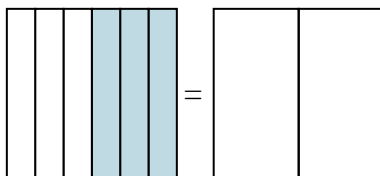
5)  $\frac{4}{8} =$



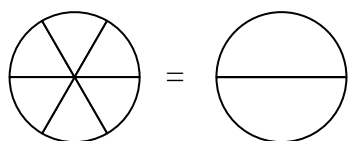
6)  $\frac{2}{4} =$



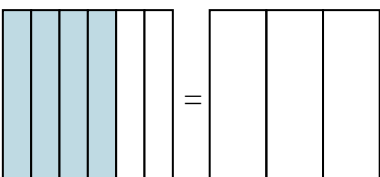
7)  $\frac{3}{6} =$



8)  $\frac{0}{6} =$



9)  $\frac{4}{6} =$



**Answers**

Ex. \_\_\_\_\_

1. \_\_\_\_\_

2. \_\_\_\_\_

3. \_\_\_\_\_

4. \_\_\_\_\_

5. \_\_\_\_\_

6. \_\_\_\_\_

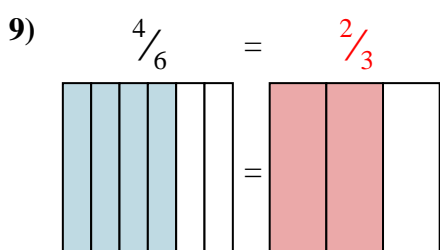
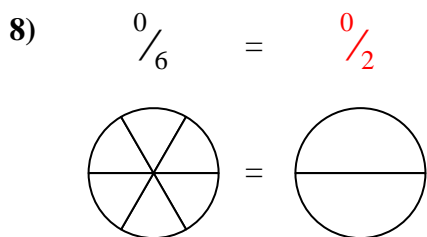
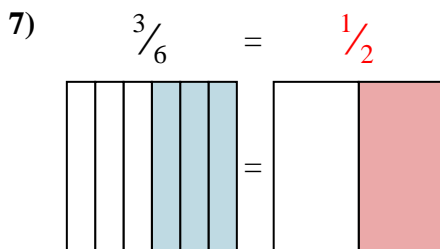
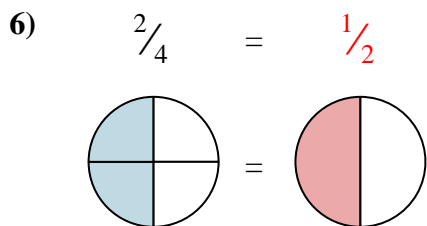
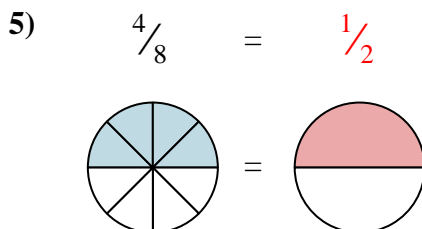
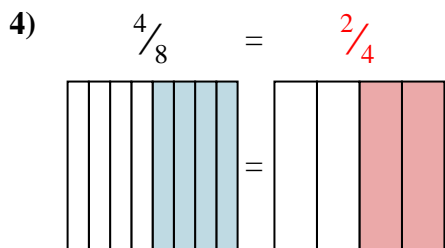
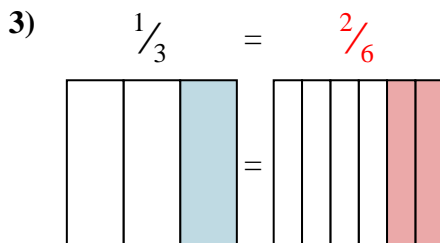
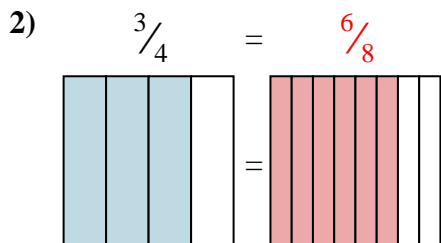
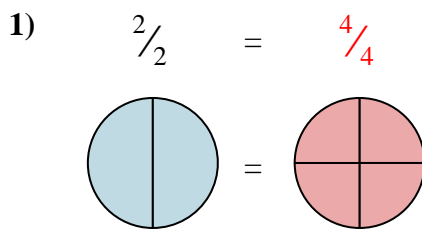
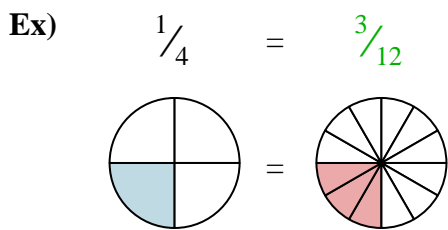
7. \_\_\_\_\_

8. \_\_\_\_\_

9. \_\_\_\_\_



Shade in the visual fraction to find the equivalent fraction.



Answers

Ex.  $\frac{3}{12}$

1.  $\frac{4}{4}$

2.  $\frac{6}{8}$

3.  $\frac{2}{6}$

4.  $\frac{2}{4}$

5.  $\frac{1}{2}$

6.  $\frac{1}{2}$

7.  $\frac{1}{2}$

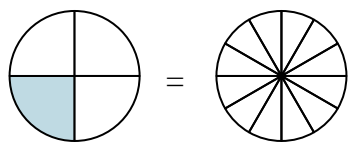
8.  $\frac{0}{2}$

9.  $\frac{2}{3}$

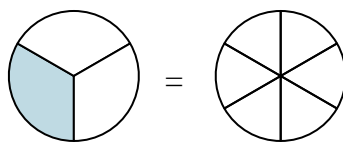


Shade in the visual fraction to find the equivalent fraction.

Ex)  $\frac{1}{4} = \frac{3}{12}$



1)  $\frac{1}{3} =$



Ex.  $\frac{3}{12}$

1. \_\_\_\_\_

2. \_\_\_\_\_

3. \_\_\_\_\_

4. \_\_\_\_\_

5. \_\_\_\_\_

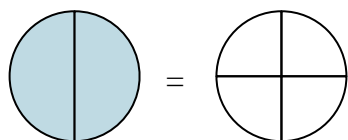
6. \_\_\_\_\_

7. \_\_\_\_\_

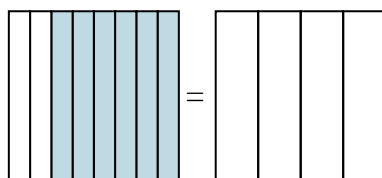
8. \_\_\_\_\_

9. \_\_\_\_\_

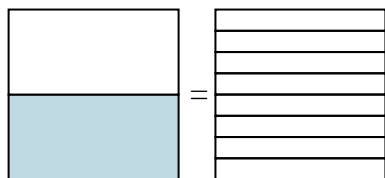
2)  $\frac{2}{2} =$



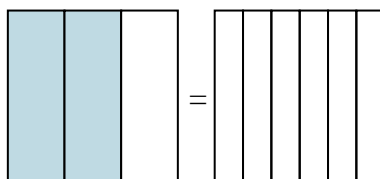
3)  $\frac{6}{8} =$



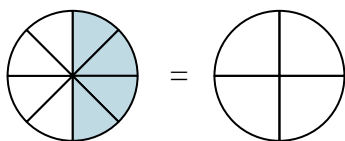
4)  $\frac{1}{2} =$



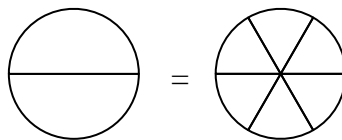
5)  $\frac{2}{3} =$



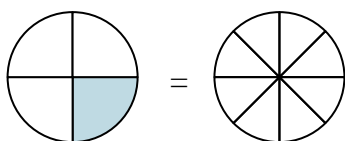
6)  $\frac{4}{8} =$



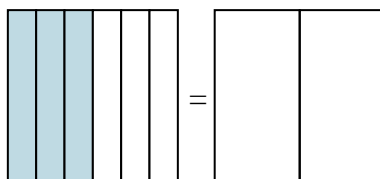
7)  $\frac{0}{2} =$



8)  $\frac{1}{4} =$

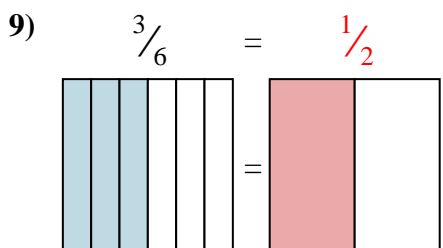
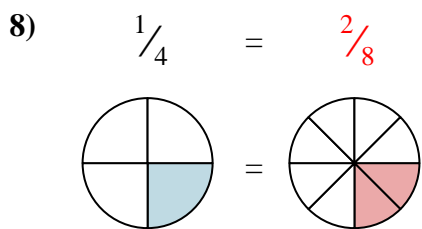
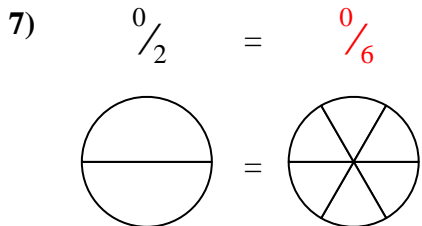
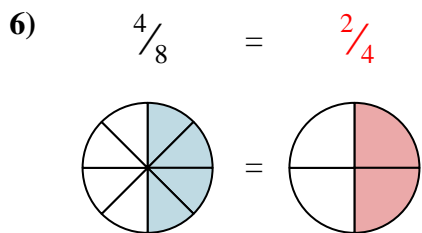
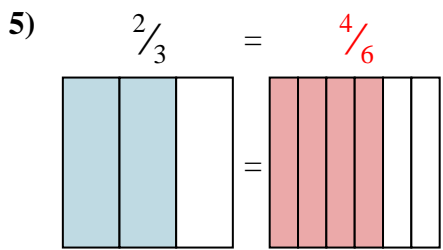
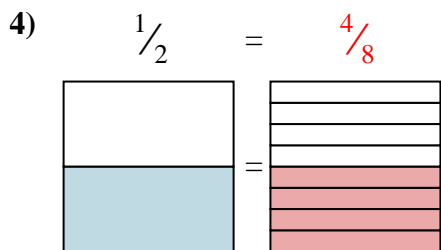
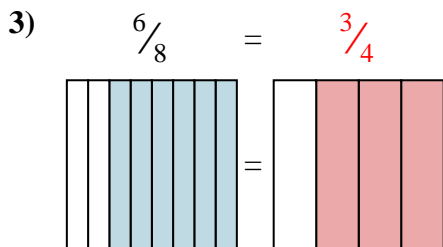
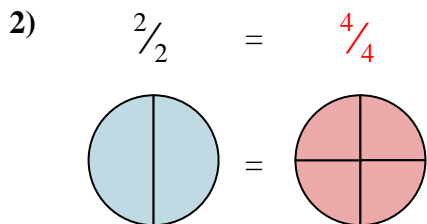
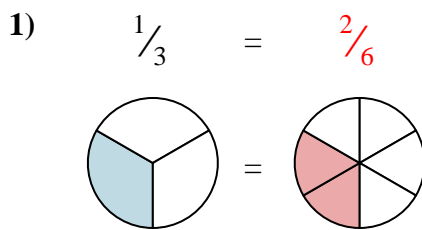
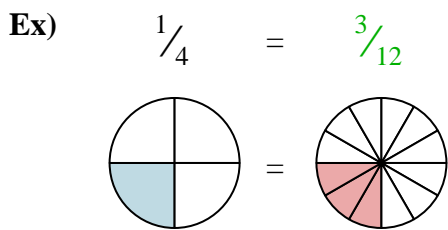


9)  $\frac{3}{6} =$





Shade in the visual fraction to find the equivalent fraction.



Answers

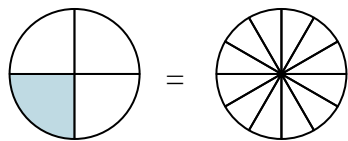
- Ex.  $\frac{3}{12}$
1.  $\frac{2}{6}$
2.  $\frac{4}{4}$
3.  $\frac{3}{4}$
4.  $\frac{4}{8}$
5.  $\frac{4}{6}$
6.  $\frac{2}{4}$
7.  $\frac{0}{6}$
8.  $\frac{2}{8}$
9.  $\frac{1}{2}$



Shade in the visual fraction to find the equivalent fraction.

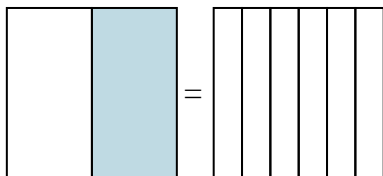
Ex)

$$\frac{1}{4} = \frac{3}{12}$$



1)

$$\frac{1}{2} =$$



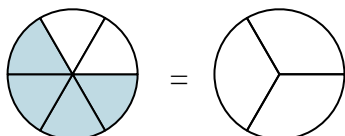
**Answers**

Ex.  $\frac{3}{12}$

1. \_\_\_\_\_
2. \_\_\_\_\_
3. \_\_\_\_\_
4. \_\_\_\_\_
5. \_\_\_\_\_
6. \_\_\_\_\_
7. \_\_\_\_\_
8. \_\_\_\_\_
9. \_\_\_\_\_

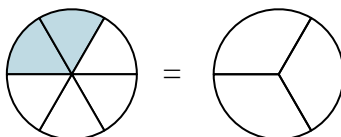
2)

$$\frac{4}{6} =$$



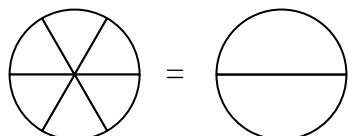
3)

$$\frac{2}{6} =$$



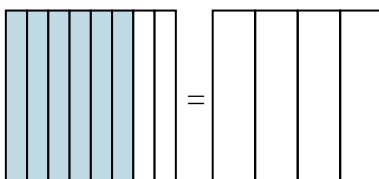
4)

$$\frac{0}{6} =$$



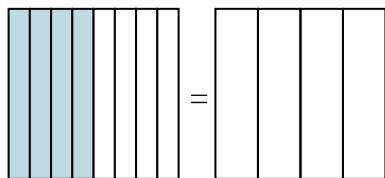
5)

$$\frac{6}{8} =$$



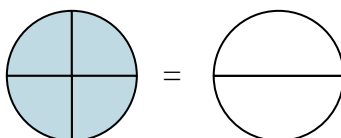
6)

$$\frac{4}{8} =$$



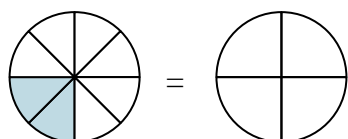
7)

$$\frac{4}{4} =$$



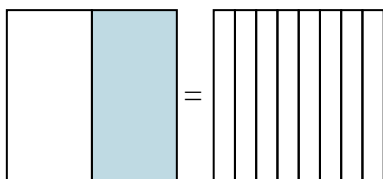
8)

$$\frac{2}{8} =$$



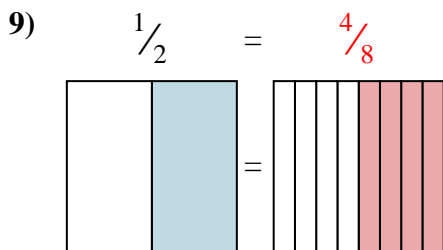
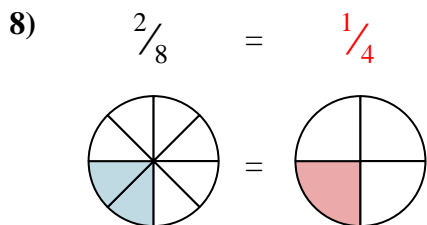
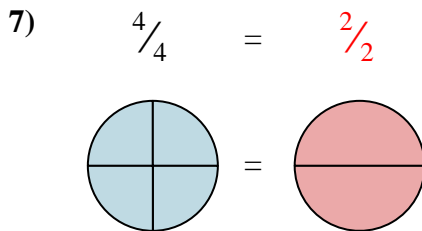
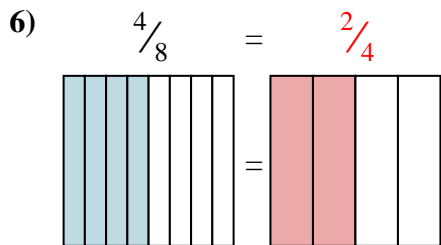
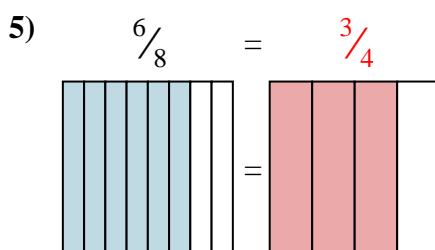
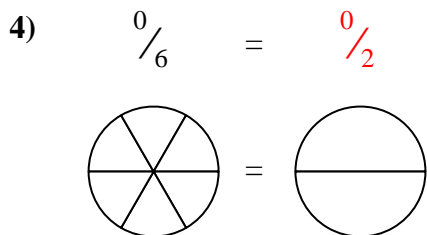
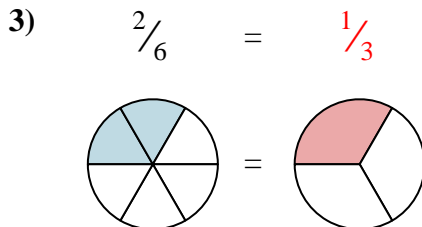
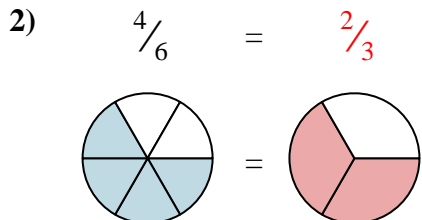
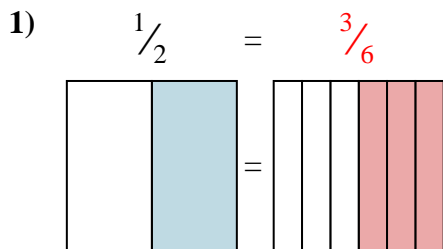
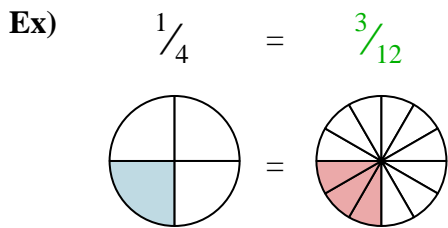
9)

$$\frac{1}{2} =$$





Shade in the visual fraction to find the equivalent fraction.



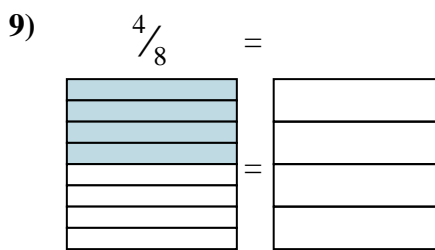
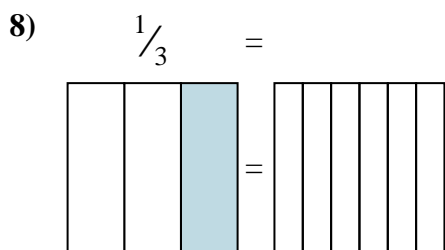
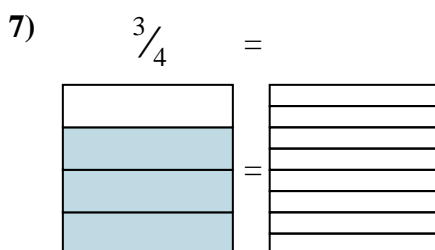
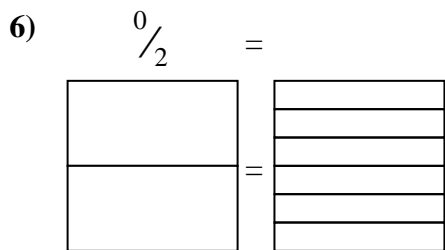
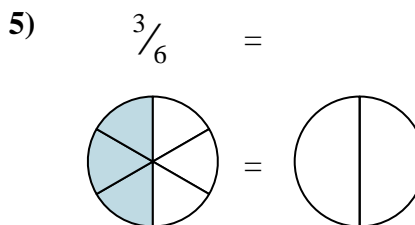
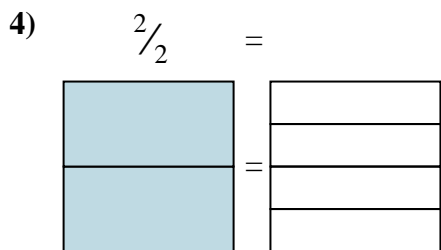
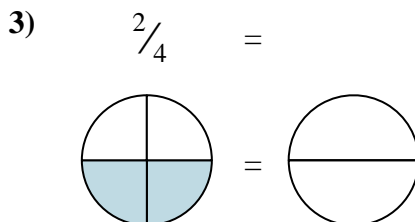
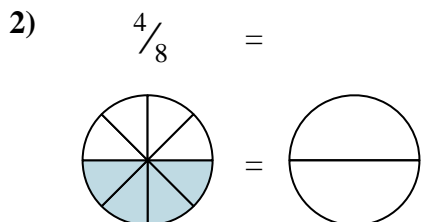
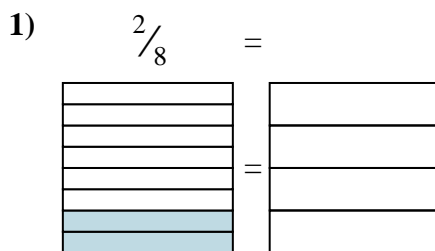
Answers

- Ex.  $\frac{3}{12}$
1.  $\frac{3}{6}$
2.  $\frac{2}{3}$
3.  $\frac{1}{3}$
4.  $\frac{0}{2}$
5.  $\frac{3}{4}$
6.  $\frac{2}{4}$
7.  $\frac{2}{2}$
8.  $\frac{1}{4}$
9.  $\frac{4}{8}$





Shade in the visual fraction to find the equivalent fraction.

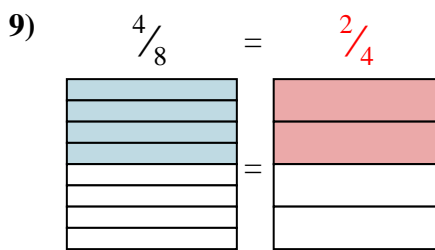
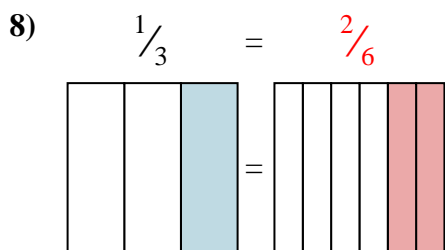
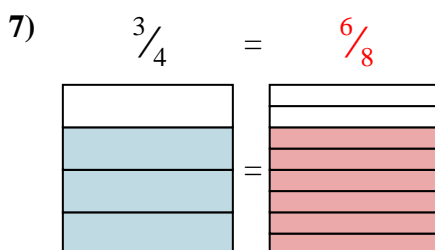
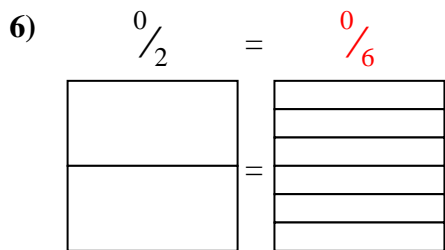
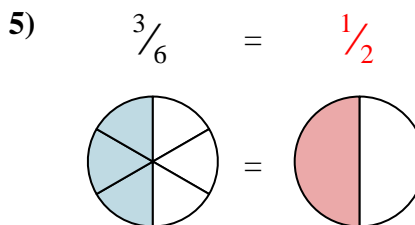
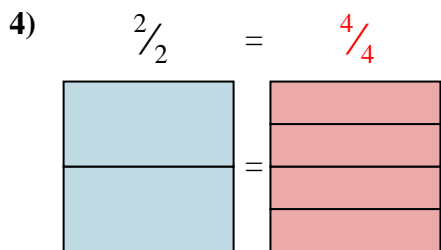
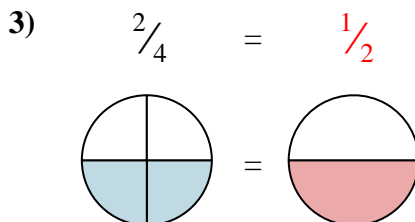
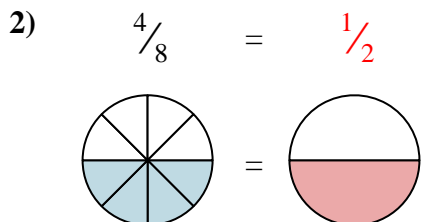
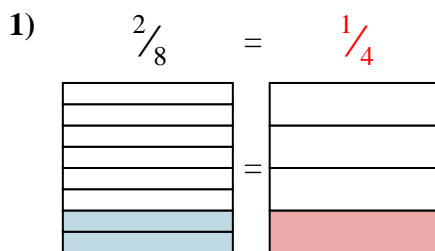
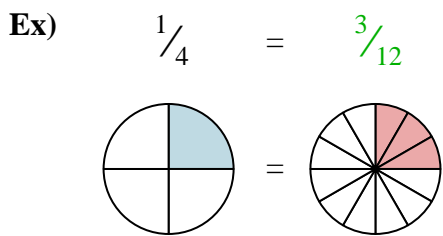


**Answers**

- Ex.  $\frac{3}{12}$
1. \_\_\_\_\_
2. \_\_\_\_\_
3. \_\_\_\_\_
4. \_\_\_\_\_
5. \_\_\_\_\_
6. \_\_\_\_\_
7. \_\_\_\_\_
8. \_\_\_\_\_
9. \_\_\_\_\_



Shade in the visual fraction to find the equivalent fraction.



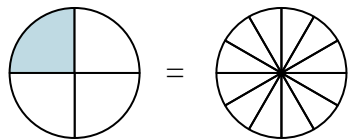
Answers

- Ex.  $\frac{3}{12}$
1.  $\frac{1}{4}$
2.  $\frac{1}{2}$
3.  $\frac{1}{2}$
4.  $\frac{4}{4}$
5.  $\frac{1}{2}$
6.  $\frac{0}{6}$
7.  $\frac{6}{8}$
8.  $\frac{2}{6}$
9.  $\frac{2}{4}$

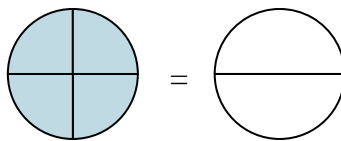


Shade in the visual fraction to find the equivalent fraction.

Ex)  $\frac{1}{4} = \frac{3}{12}$



1)  $\frac{4}{4} =$



**Answers**

Ex.  $\frac{3}{12}$

1. \_\_\_\_\_

2. \_\_\_\_\_

3. \_\_\_\_\_

4. \_\_\_\_\_

5. \_\_\_\_\_

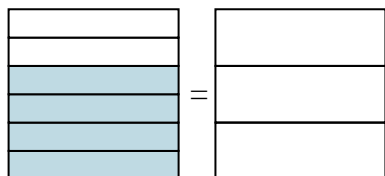
6. \_\_\_\_\_

7. \_\_\_\_\_

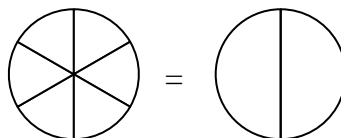
8. \_\_\_\_\_

9. \_\_\_\_\_

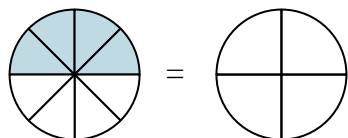
2)  $\frac{4}{6} =$



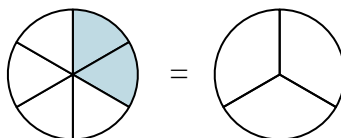
3)  $\frac{0}{6} =$



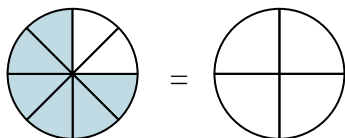
4)  $\frac{4}{8} =$



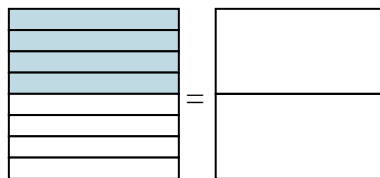
5)  $\frac{2}{6} =$



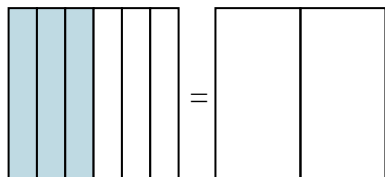
6)  $\frac{6}{8} =$



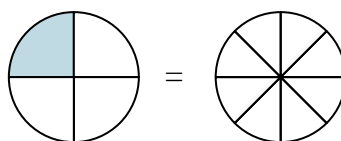
7)  $\frac{4}{8} =$



8)  $\frac{3}{6} =$

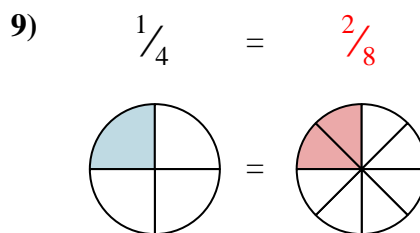
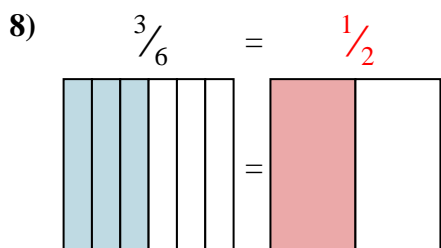
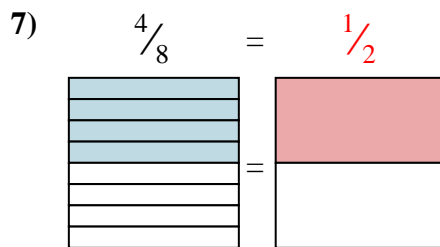
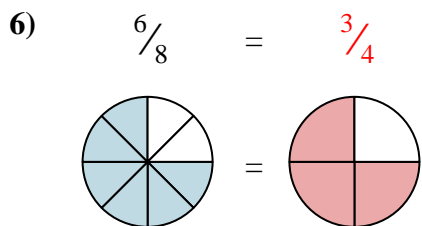
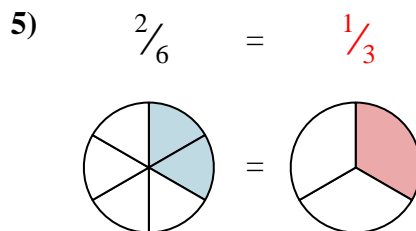
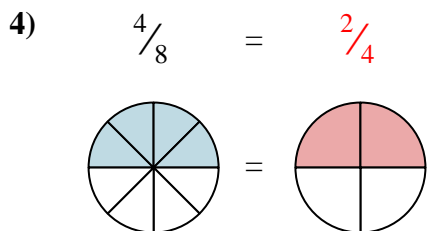
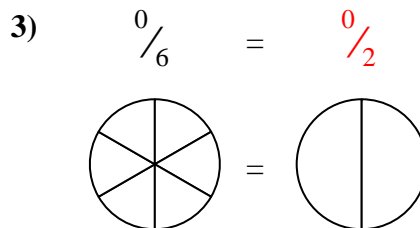
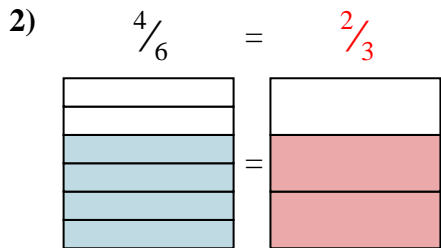
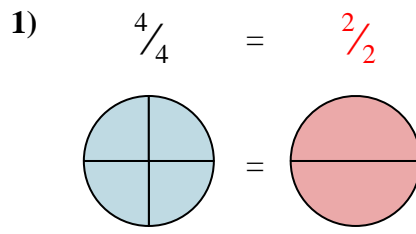
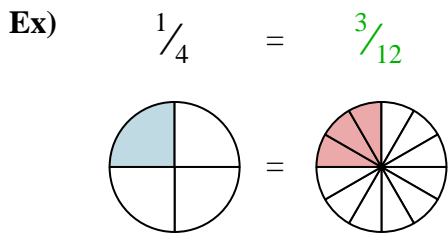


9)  $\frac{1}{4} =$





Shade in the visual fraction to find the equivalent fraction.



Answers

- Ex.  $\frac{3}{12}$
1.  $\frac{2}{2}$
2.  $\frac{2}{3}$
3.  $\frac{0}{2}$
4.  $\frac{2}{4}$
5.  $\frac{1}{3}$
6.  $\frac{3}{4}$
7.  $\frac{1}{2}$
8.  $\frac{1}{2}$
9.  $\frac{2}{8}$