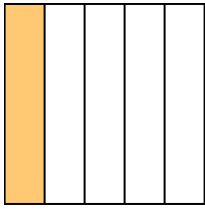





Write the shaded amount as a fraction.

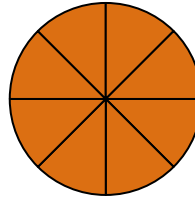
Ex)



1)



2)

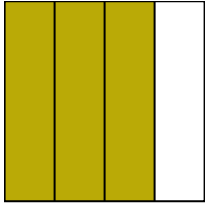


Answers


Ex. $\frac{1}{5}$

- 1. _____
- 2. _____
- 3. _____
- 4. _____
- 5. _____
- 6. _____
- 7. _____
- 8. _____
- 9. _____
- 10. _____
- 11. _____
- 12. _____
- 13. _____
- 14. _____

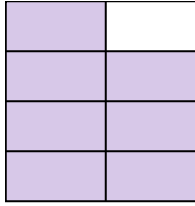
3)



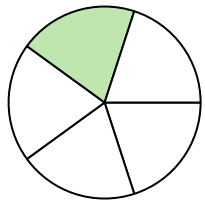
4)



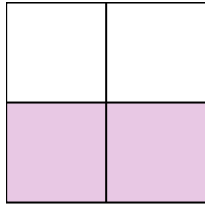
5)




6)



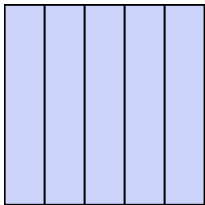
7)



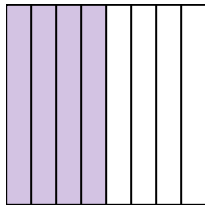
8)



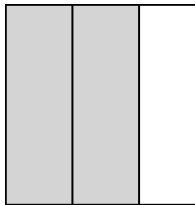
9)




10)



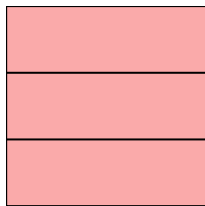
11)




12)



13)

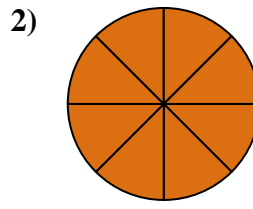
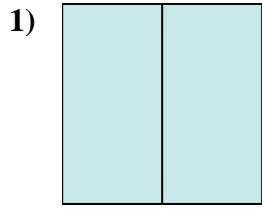
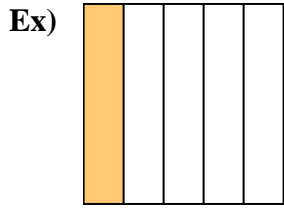


14)



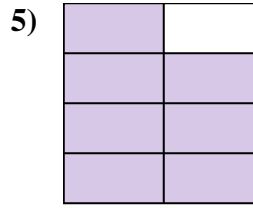
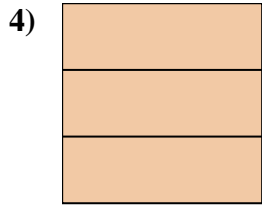
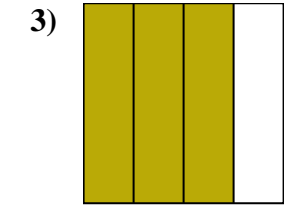


Write the shaded amount as a fraction.



Answers

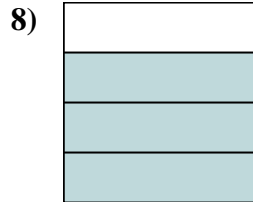
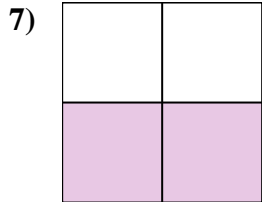
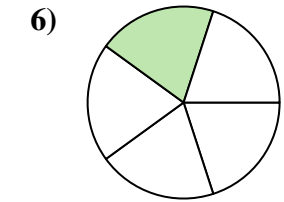
Ex. 1/5



1. 2/2

2. 8/8

3. 3/4



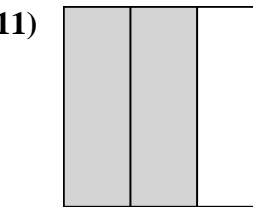
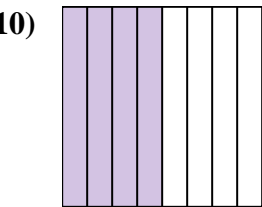
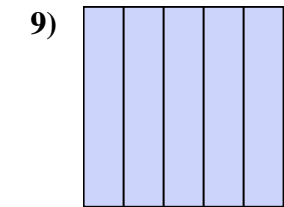
4. 3/3

5. 7/8

6. 1/5

7. 2/4

8. 3/4

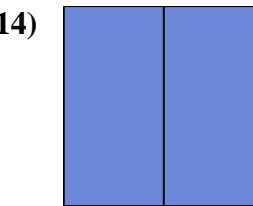
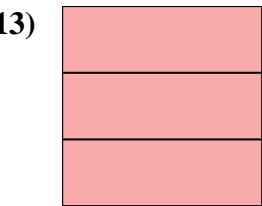
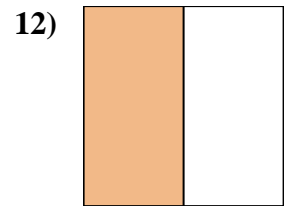


9. 5/5

10. 4/8

11. 2/3

12. 1/2



13. 3/3

14. 2/2