


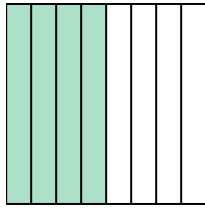


Write the shaded amount as a fraction.

Ex)



1)



2)




Answers

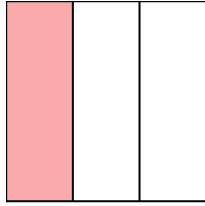
Ex. $\frac{1}{2}$

- 1. _____
- 2. _____
- 3. _____
- 4. _____
- 5. _____
- 6. _____
- 7. _____
- 8. _____
- 9. _____
- 10. _____
- 11. _____
- 12. _____
- 13. _____
- 14. _____


3)



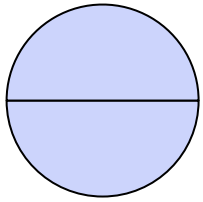
4)



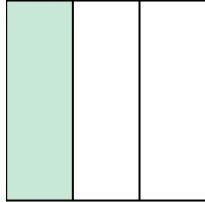
5)



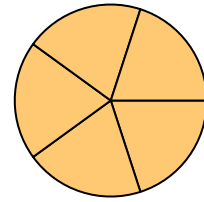
6)



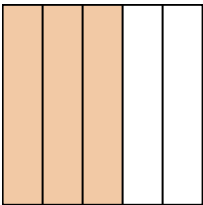
7)




8)




9)




10)



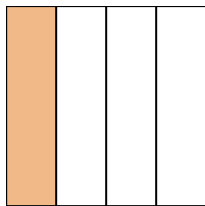
11)



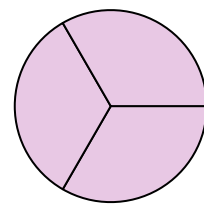
12)



13)

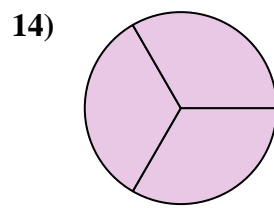
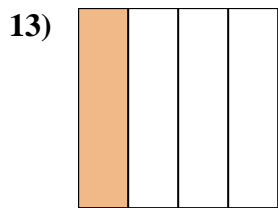
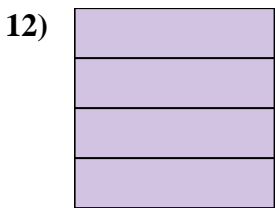
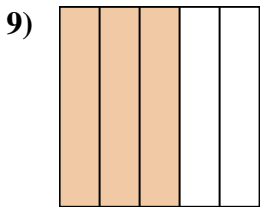
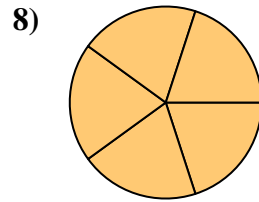
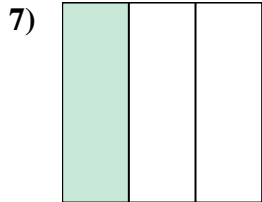
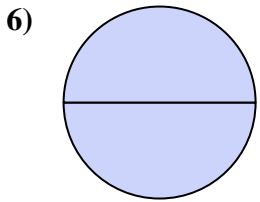
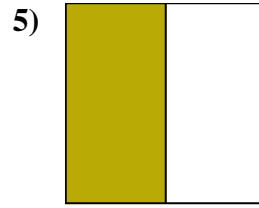
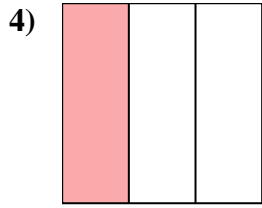
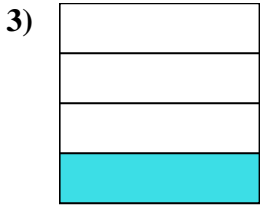
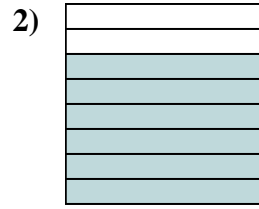
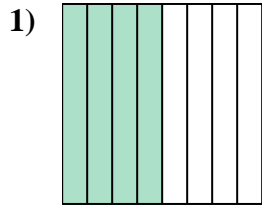
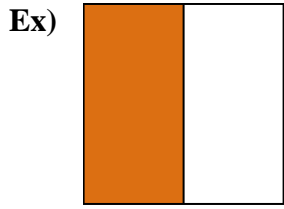


14)





Write the shaded amount as a fraction.



Answers

Ex. $\frac{1}{2}$

1. $\frac{4}{8}$

2. $\frac{6}{8}$

3. $\frac{1}{4}$

4. $\frac{1}{3}$

5. $\frac{1}{2}$

6. $\frac{2}{2}$

7. $\frac{1}{3}$

8. $\frac{5}{5}$

9. $\frac{3}{5}$

10. $\frac{3}{5}$

11. $\frac{7}{8}$

12. $\frac{4}{4}$

13. $\frac{1}{4}$

14. $\frac{3}{3}$