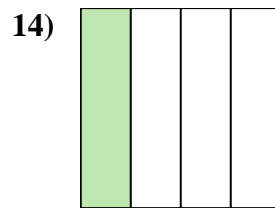
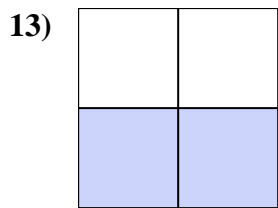
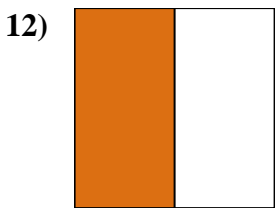
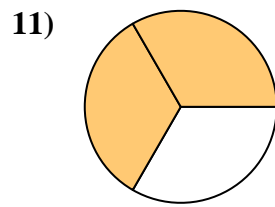
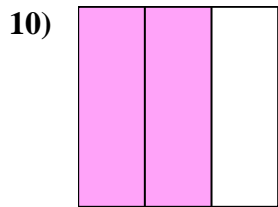
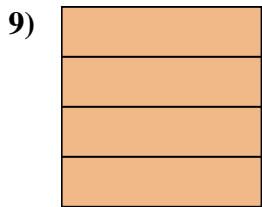
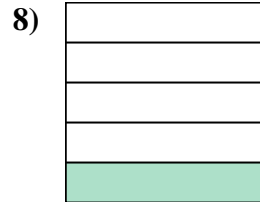
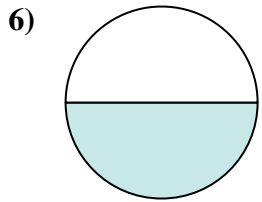
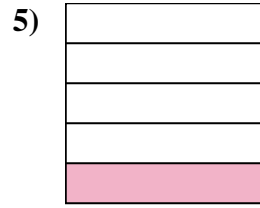
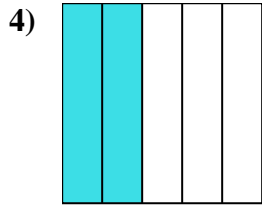
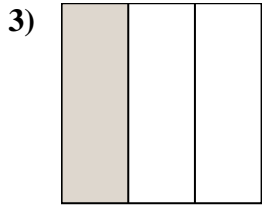
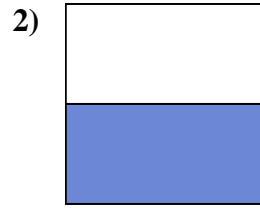
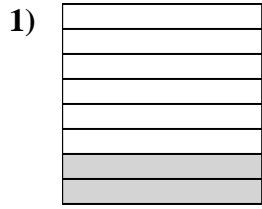




Write the shaded amount as a fraction.



Answers

Ex. $\frac{4}{8}$

1. _____

2. _____

3. _____

4. _____

5. _____

6. _____

7. _____

8. _____

9. _____

10. _____

11. _____

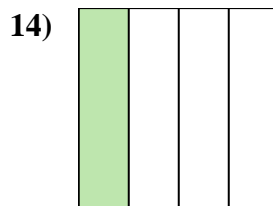
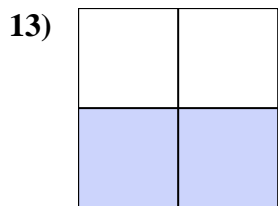
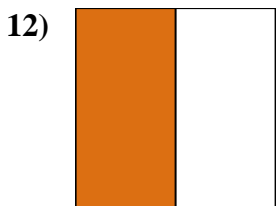
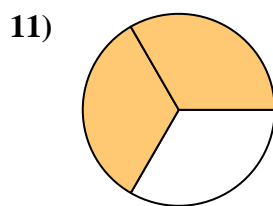
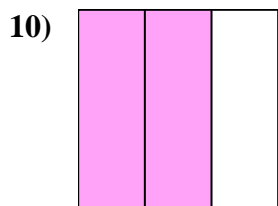
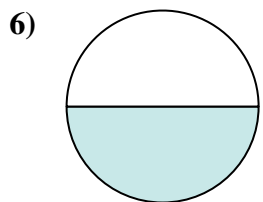
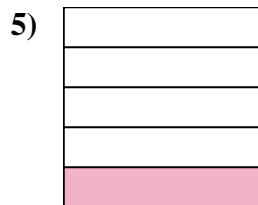
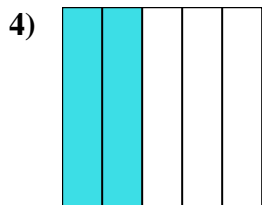
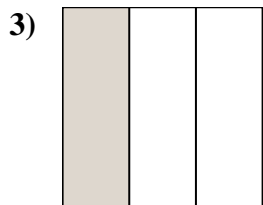
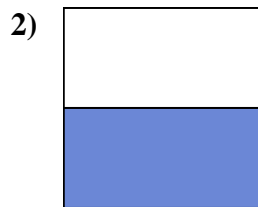


12. _____

13. _____

14. _____



Write the shaded amount as a fraction.



Answers

Ex. $\frac{4}{8}$

1. $\frac{2}{8}$

2. $\frac{1}{2}$

3. $\frac{1}{3}$

4. $\frac{2}{5}$

5. $\frac{1}{5}$

6. $\frac{1}{2}$

7. $\frac{1}{8}$

8. $\frac{1}{5}$

9. $\frac{4}{4}$

10. $\frac{2}{3}$

11. $\frac{2}{3}$

12. $\frac{1}{2}$

13. $\frac{2}{4}$

14. $\frac{1}{4}$