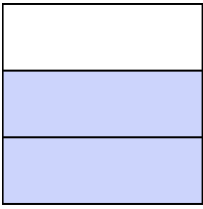





Write the shaded amount as a fraction.

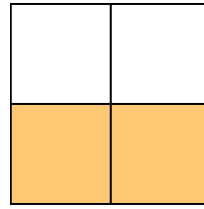
Ex)



1)



2)




Answers

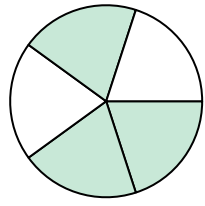
Ex. $\frac{2}{3}$

- 1. _____
- 2. _____
- 3. _____
- 4. _____
- 5. _____
- 6. _____
- 7. _____
- 8. _____
- 9. _____
- 10. _____
- 11. _____
- 12. _____
- 13. _____
- 14. _____

3)



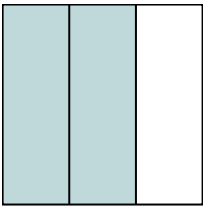
4)



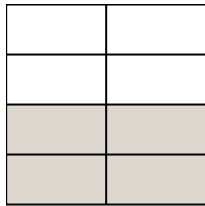
5)




6)



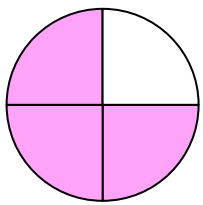
7)



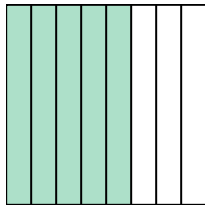
8)



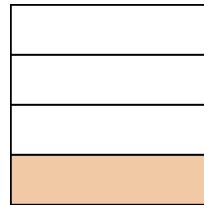
9)




10)



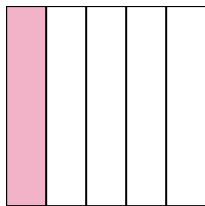
11)




12)



13)

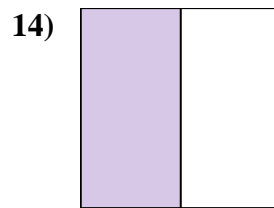
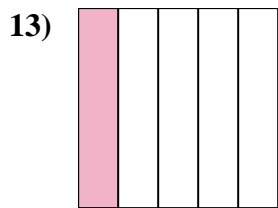
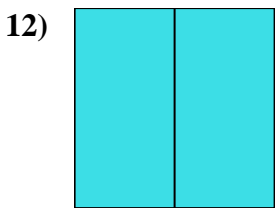
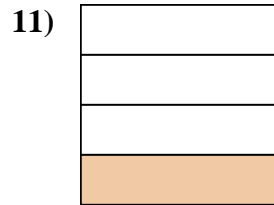
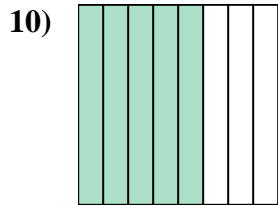
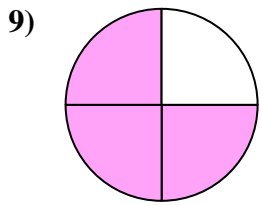
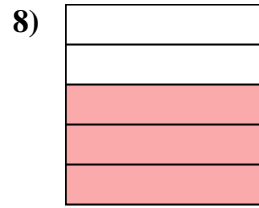
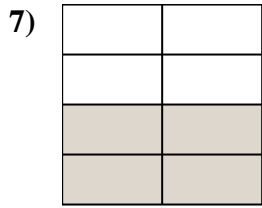
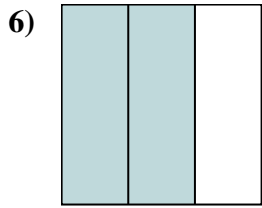
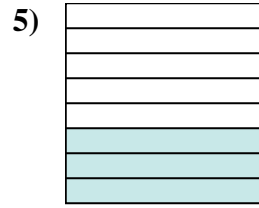
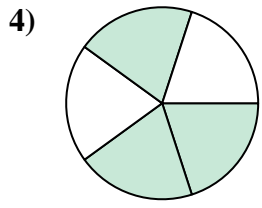
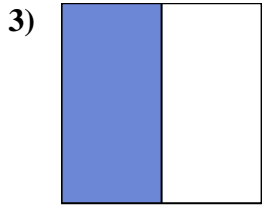
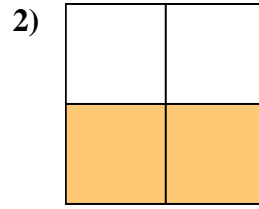
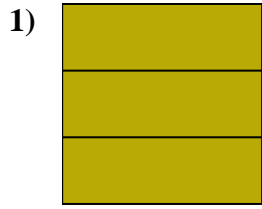
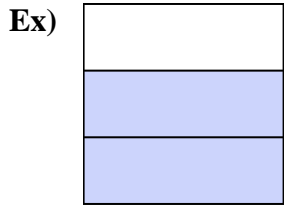


14)





Write the shaded amount as a fraction.



Answers

Ex. 2/3

1. 3/3

2. 2/4

3. 1/2

4. 3/5

5. 3/8

6. 2/3

7. 4/8

8. 3/5

9. 3/4

10. 5/8

11. 1/4

12. 2/2

13. 1/5

14. 1/2