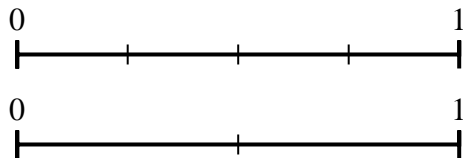




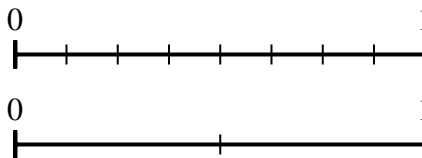
Use the number lines to answer the questions.

Answers

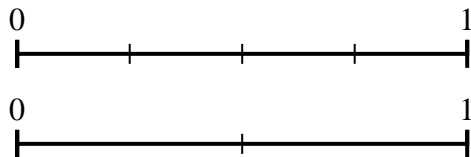
1) Using the number lines shown, what is the equivalent fraction to $\frac{2}{4}$?



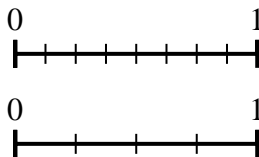
2) Using the number lines shown, what is the equivalent fraction to $\frac{8}{8}$?



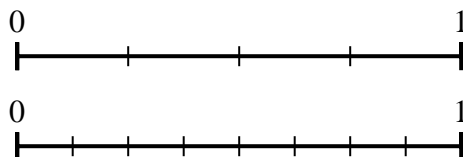
3) Using the number lines shown, what is the equivalent fraction to $\frac{4}{4}$?



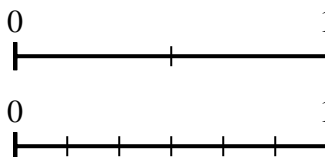
4) Using the number lines shown, what is the equivalent fraction to $\frac{6}{8}$?



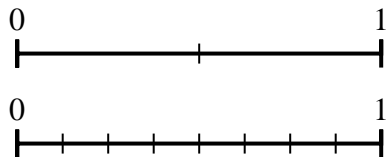
5) Using the number lines shown, what is the equivalent fraction to $\frac{2}{4}$?



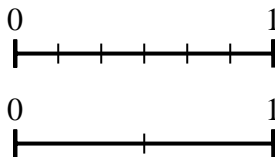
6) Using the number lines shown, what is the equivalent fraction to $\frac{2}{2}$?



7) Using the number lines shown, what is the equivalent fraction to $\frac{1}{2}$?



8) Using the number lines shown, what is the equivalent fraction to $\frac{0}{6}$?

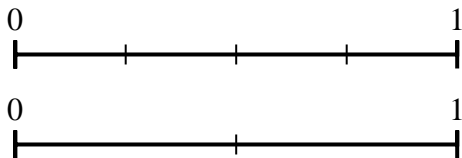


1. _____
2. _____
3. _____
4. _____
5. _____
6. _____
7. _____
8. _____

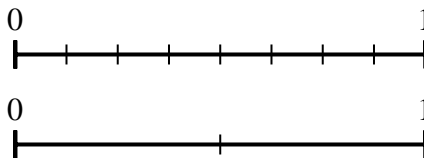


Use the number lines to answer the questions.

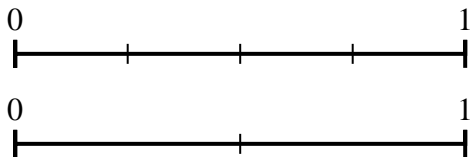
- 1) Using the number lines shown, what is the equivalent fraction to $\frac{2}{4}$?



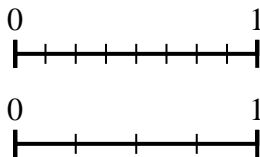
- 2) Using the number lines shown, what is the equivalent fraction to $\frac{8}{8}$?



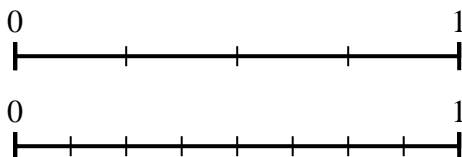
- 3) Using the number lines shown, what is the equivalent fraction to $\frac{4}{4}$?



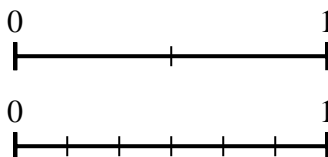
- 4) Using the number lines shown, what is the equivalent fraction to $\frac{6}{8}$?



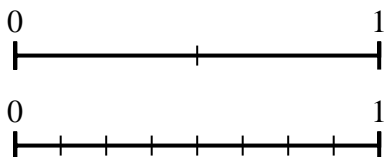
- 5) Using the number lines shown, what is the equivalent fraction to $\frac{2}{4}$?



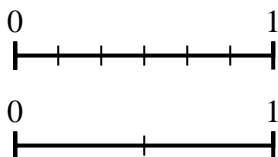
- 6) Using the number lines shown, what is the equivalent fraction to $\frac{2}{2}$?



- 7) Using the number lines shown, what is the equivalent fraction to $\frac{1}{2}$?



- 8) Using the number lines shown, what is the equivalent fraction to $\frac{0}{6}$?



Answers

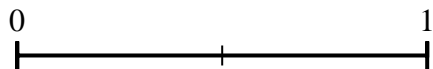
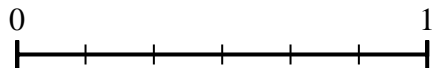
1. $\frac{1}{2}$
2. $\frac{2}{2}$
3. $\frac{2}{2}$
4. $\frac{3}{4}$
5. $\frac{4}{8}$
6. $\frac{6}{6}$
7. $\frac{4}{8}$
8. $\frac{0}{2}$




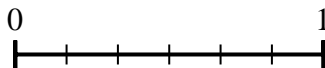
Use the number lines to answer the questions.

Answers

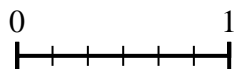
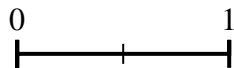
1) Using the number lines shown, what is the equivalent fraction to $\frac{0}{6}$?



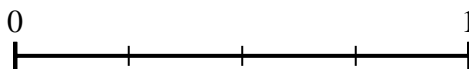
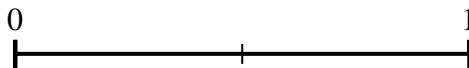
2) Using the number lines shown, what is the equivalent fraction to $\frac{6}{6}$?



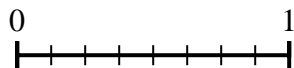
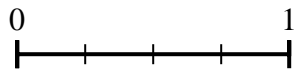
3) Using the number lines shown, what is the equivalent fraction to $\frac{2}{2}$?



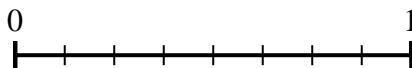
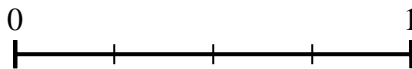
4) Using the number lines shown, what is the equivalent fraction to $\frac{2}{2}$?



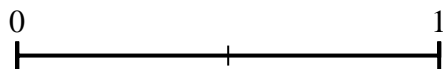
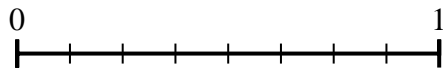
5) Using the number lines shown, what is the equivalent fraction to $\frac{4}{4}$?



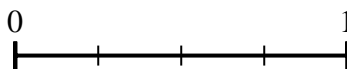
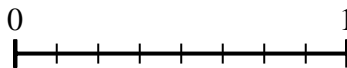
6) Using the number lines shown, what is the equivalent fraction to $\frac{2}{4}$?



7) Using the number lines shown, what is the equivalent fraction to $\frac{8}{8}$?



8) Using the number lines shown, what is the equivalent fraction to $\frac{6}{8}$?

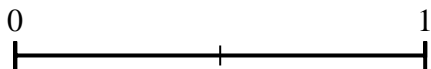
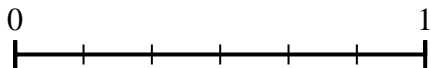


1. _____
2. _____
3. _____
4. _____
5. _____
6. _____
7. _____
8. _____


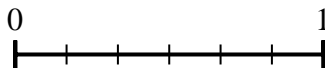


Use the number lines to answer the questions.

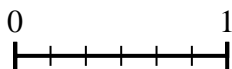
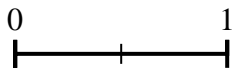
1) Using the number lines shown, what is the equivalent fraction to $\frac{0}{6}$?



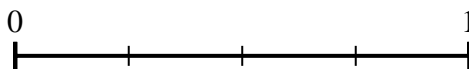
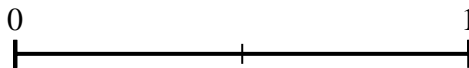
2) Using the number lines shown, what is the equivalent fraction to $\frac{6}{6}$?



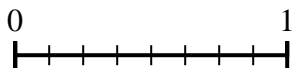
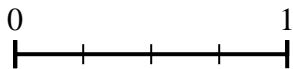
3) Using the number lines shown, what is the equivalent fraction to $\frac{2}{2}$?



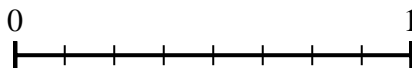
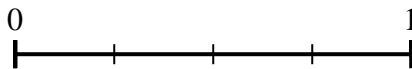
4) Using the number lines shown, what is the equivalent fraction to $\frac{2}{2}$?



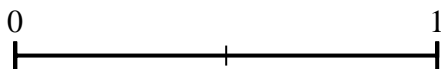
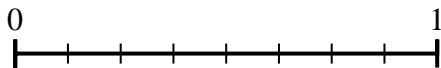
5) Using the number lines shown, what is the equivalent fraction to $\frac{4}{4}$?



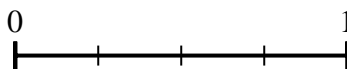
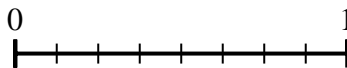
6) Using the number lines shown, what is the equivalent fraction to $\frac{2}{4}$?



7) Using the number lines shown, what is the equivalent fraction to $\frac{8}{8}$?



8) Using the number lines shown, what is the equivalent fraction to $\frac{6}{8}$?



Answers

1. $\frac{0}{2}$

2. $\frac{3}{3}$

3. $\frac{6}{6}$

4. $\frac{4}{4}$

5. $\frac{8}{8}$

6. $\frac{4}{8}$

7. $\frac{2}{2}$

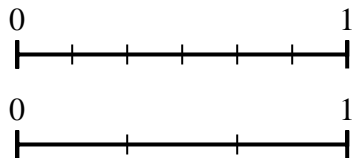
8. $\frac{3}{4}$



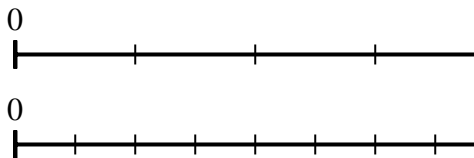
Use the number lines to answer the questions.

Answers

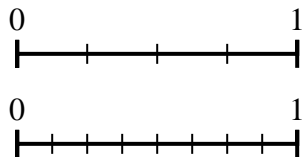
1) Using the number lines shown, what is the equivalent fraction to $\frac{4}{6}$?



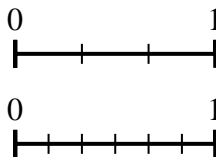
2) Using the number lines shown, what is the equivalent fraction to $\frac{1}{4}$?



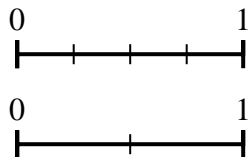
3) Using the number lines shown, what is the equivalent fraction to $\frac{2}{4}$?



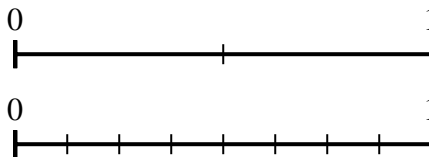
4) Using the number lines shown, what is the equivalent fraction to $\frac{1}{3}$?



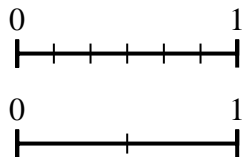
5) Using the number lines shown, what is the equivalent fraction to $\frac{4}{4}$?



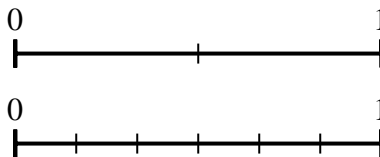
6) Using the number lines shown, what is the equivalent fraction to $\frac{1}{2}$?



7) Using the number lines shown, what is the equivalent fraction to $\frac{6}{6}$?



8) Using the number lines shown, what is the equivalent fraction to $\frac{1}{2}$?

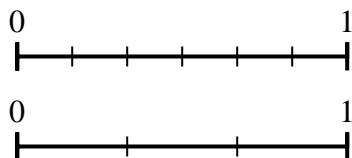


1. _____
2. _____
3. _____
4. _____
5. _____
6. _____
7. _____
8. _____

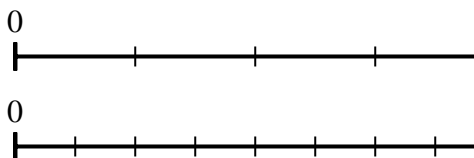


Use the number lines to answer the questions.

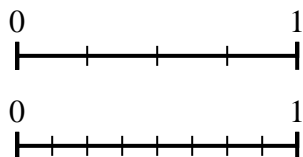
1) Using the number lines shown, what is the equivalent fraction to $\frac{4}{6}$?



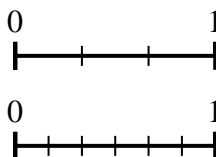
2) Using the number lines shown, what is the equivalent fraction to $\frac{1}{4}$?



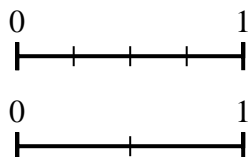
3) Using the number lines shown, what is the equivalent fraction to $\frac{2}{4}$?



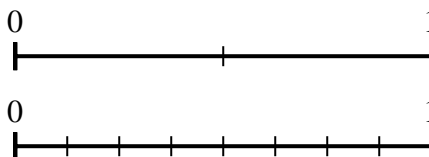
4) Using the number lines shown, what is the equivalent fraction to $\frac{1}{3}$?



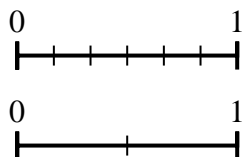
5) Using the number lines shown, what is the equivalent fraction to $\frac{4}{4}$?



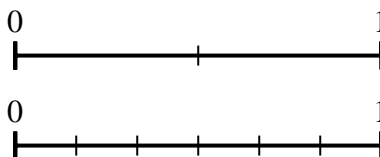
6) Using the number lines shown, what is the equivalent fraction to $\frac{1}{2}$?



7) Using the number lines shown, what is the equivalent fraction to $\frac{6}{6}$?



8) Using the number lines shown, what is the equivalent fraction to $\frac{1}{2}$?



Answers

1. $\frac{2}{3}$

2. $\frac{2}{8}$

3. $\frac{4}{8}$

4. $\frac{2}{6}$

5. $\frac{2}{2}$

6. $\frac{4}{8}$

7. $\frac{2}{2}$

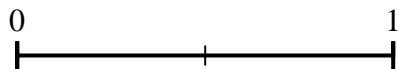
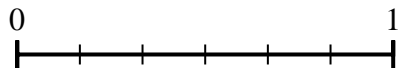
8. $\frac{3}{6}$



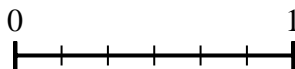

Use the number lines to answer the questions.

Answers

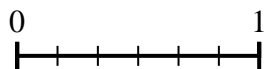
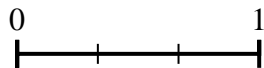
1) Using the number lines shown, what is the equivalent fraction to $\frac{6}{6}$?



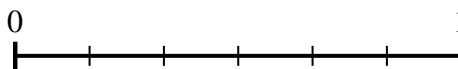

2) Using the number lines shown, what is the equivalent fraction to $\frac{2}{3}$?



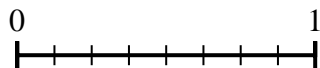
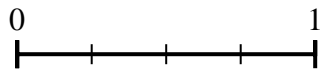
3) Using the number lines shown, what is the equivalent fraction to $\frac{3}{3}$?



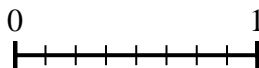
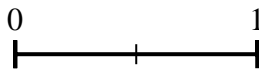
4) Using the number lines shown, what is the equivalent fraction to $\frac{1}{3}$?



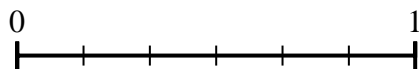
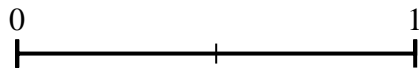
5) Using the number lines shown, what is the equivalent fraction to $\frac{2}{4}$?



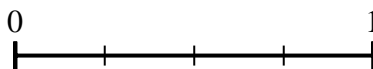
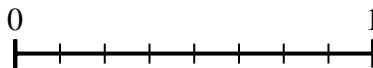
6) Using the number lines shown, what is the equivalent fraction to $\frac{1}{2}$?



7) Using the number lines shown, what is the equivalent fraction to $\frac{1}{2}$?



8) Using the number lines shown, what is the equivalent fraction to $\frac{8}{8}$?

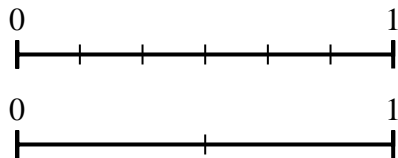


1. _____
2. _____
3. _____
4. _____
5. _____
6. _____
7. _____
8. _____

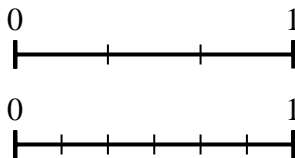


Use the number lines to answer the questions.

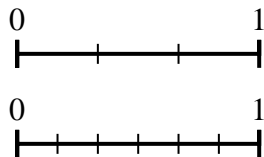
1) Using the number lines shown, what is the equivalent fraction to $\frac{6}{6}$?



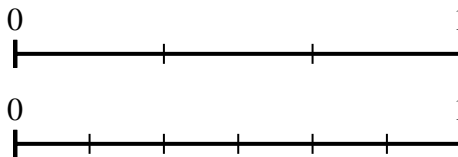
2) Using the number lines shown, what is the equivalent fraction to $\frac{2}{3}$?



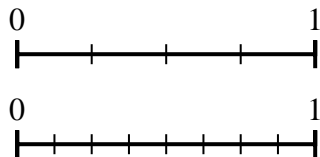
3) Using the number lines shown, what is the equivalent fraction to $\frac{3}{3}$?



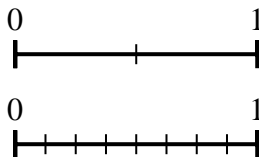
4) Using the number lines shown, what is the equivalent fraction to $\frac{1}{3}$?



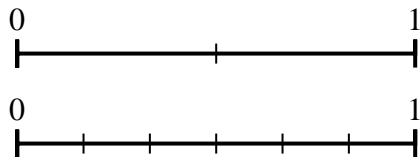
5) Using the number lines shown, what is the equivalent fraction to $\frac{2}{4}$?



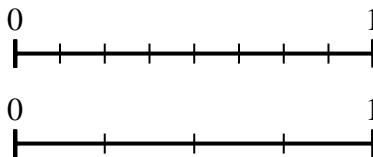
6) Using the number lines shown, what is the equivalent fraction to $\frac{1}{2}$?



7) Using the number lines shown, what is the equivalent fraction to $\frac{1}{2}$?



8) Using the number lines shown, what is the equivalent fraction to $\frac{8}{8}$?



Answers


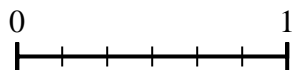
1. $\frac{2}{2}$
2. $\frac{4}{6}$
3. $\frac{6}{6}$
4. $\frac{2}{6}$
5. $\frac{4}{8}$
6. $\frac{4}{8}$
7. $\frac{3}{6}$
8. $\frac{4}{4}$



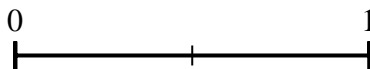
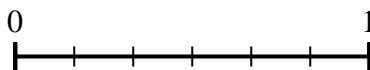
Use the number lines to answer the questions.

Answers

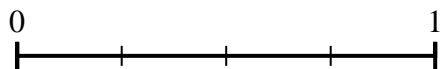
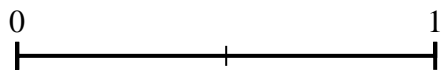
1) Using the number lines shown, what is the equivalent fraction to $\frac{2}{6}$?



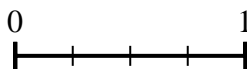
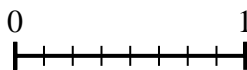
2) Using the number lines shown, what is the equivalent fraction to $\frac{6}{6}$?



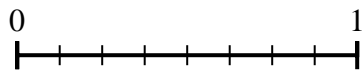
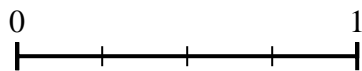
3) Using the number lines shown, what is the equivalent fraction to $\frac{2}{2}$?



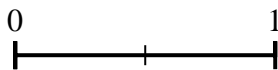
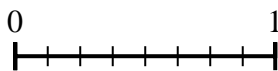
4) Using the number lines shown, what is the equivalent fraction to $\frac{8}{8}$?




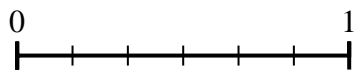
5) Using the number lines shown, what is the equivalent fraction to $\frac{1}{4}$?




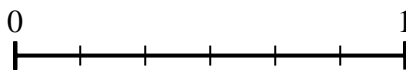
6) Using the number lines shown, what is the equivalent fraction to $\frac{8}{8}$?



7) Using the number lines shown, what is the equivalent fraction to $\frac{4}{6}$?



8) Using the number lines shown, what is the equivalent fraction to $\frac{6}{6}$?


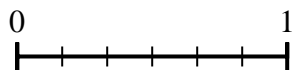


1. _____
2. _____
3. _____
4. _____
5. _____
6. _____
7. _____
8. _____

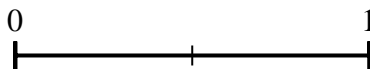
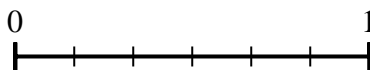


Use the number lines to answer the questions.

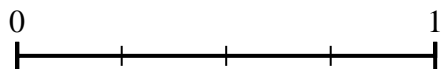
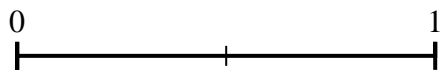
1) Using the number lines shown, what is the equivalent fraction to $\frac{2}{6}$?



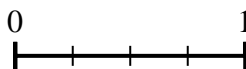
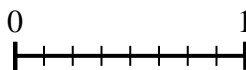
2) Using the number lines shown, what is the equivalent fraction to $\frac{6}{6}$?



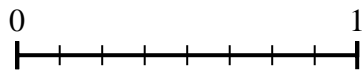
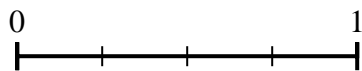
3) Using the number lines shown, what is the equivalent fraction to $\frac{2}{2}$?



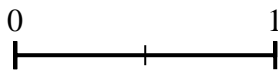
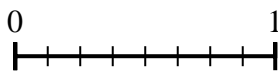
4) Using the number lines shown, what is the equivalent fraction to $\frac{8}{8}$?




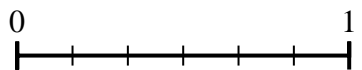
5) Using the number lines shown, what is the equivalent fraction to $\frac{1}{4}$?




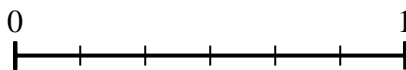
6) Using the number lines shown, what is the equivalent fraction to $\frac{8}{8}$?



7) Using the number lines shown, what is the equivalent fraction to $\frac{4}{6}$?



8) Using the number lines shown, what is the equivalent fraction to $\frac{6}{6}$?



Answers

1. $\frac{1}{3}$

2. $\frac{2}{2}$

3. $\frac{4}{4}$

4. $\frac{4}{4}$

5. $\frac{2}{8}$

6. $\frac{2}{2}$

7. $\frac{2}{3}$

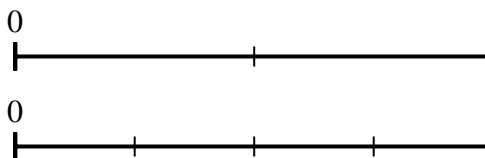
8. $\frac{3}{3}$



Use the number lines to answer the questions.

Answers

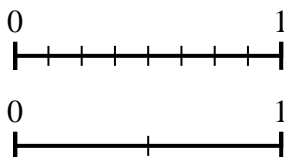
1) Using the number lines shown, what is the equivalent fraction to $\frac{2}{2}$?



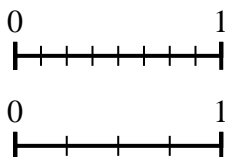
2) Using the number lines shown, what is the equivalent fraction to $\frac{4}{8}$?



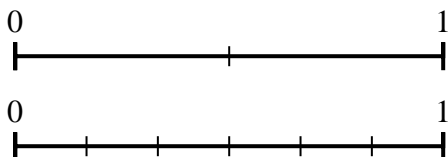
3) Using the number lines shown, what is the equivalent fraction to $\frac{8}{8}$?



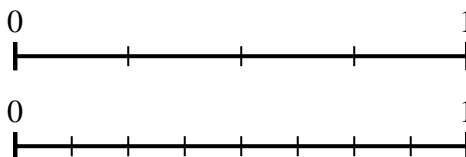
4) Using the number lines shown, what is the equivalent fraction to $\frac{8}{8}$?



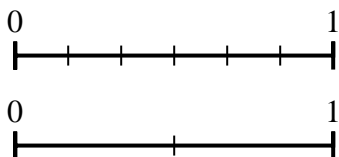
5) Using the number lines shown, what is the equivalent fraction to $\frac{0}{2}$?



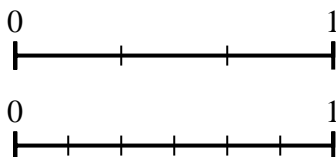
6) Using the number lines shown, what is the equivalent fraction to $\frac{2}{4}$?



7) Using the number lines shown, what is the equivalent fraction to $\frac{3}{6}$?



8) Using the number lines shown, what is the equivalent fraction to $\frac{2}{3}$?

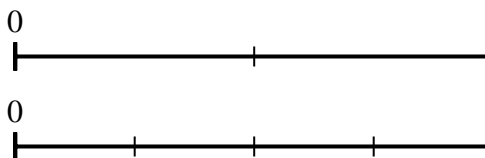


1. _____
2. _____
3. _____
4. _____
5. _____
6. _____
7. _____
8. _____



Use the number lines to answer the questions.

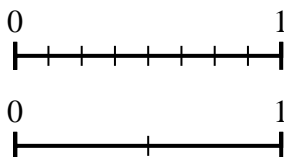
1) Using the number lines shown, what is the equivalent fraction to $\frac{2}{2}$?



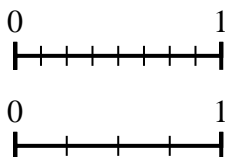
2) Using the number lines shown, what is the equivalent fraction to $\frac{4}{8}$?



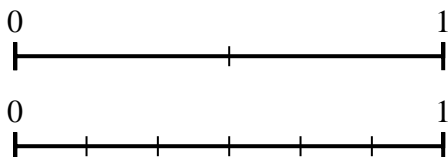
3) Using the number lines shown, what is the equivalent fraction to $\frac{8}{8}$?



4) Using the number lines shown, what is the equivalent fraction to $\frac{8}{8}$?



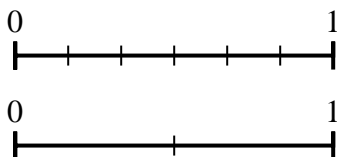
5) Using the number lines shown, what is the equivalent fraction to $\frac{0}{2}$?



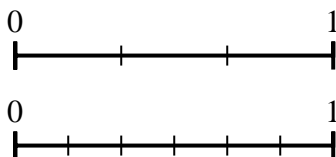
6) Using the number lines shown, what is the equivalent fraction to $\frac{2}{4}$?



7) Using the number lines shown, what is the equivalent fraction to $\frac{3}{6}$?



8) Using the number lines shown, what is the equivalent fraction to $\frac{2}{3}$?



Answers

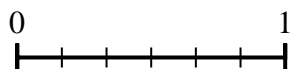
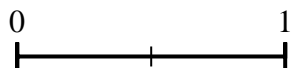
1. $\frac{4}{4}$
2. $\frac{1}{2}$
3. $\frac{2}{2}$
4. $\frac{4}{4}$
5. $\frac{0}{6}$
6. $\frac{4}{8}$
7. $\frac{1}{2}$
8. $\frac{4}{6}$



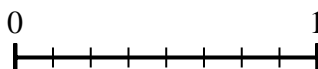
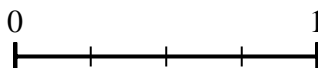
Use the number lines to answer the questions.

Answers

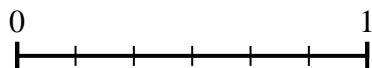
1) Using the number lines shown, what is the equivalent fraction to $\frac{2}{2}$?



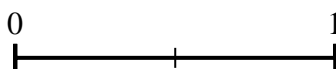
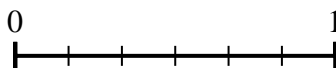
2) Using the number lines shown, what is the equivalent fraction to $\frac{3}{4}$?



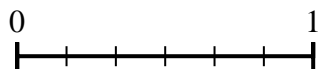
3) Using the number lines shown, what is the equivalent fraction to $\frac{6}{6}$?



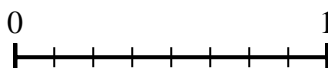
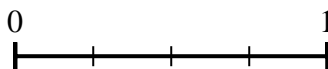
4) Using the number lines shown, what is the equivalent fraction to $\frac{0}{6}$?



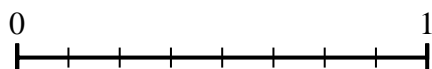
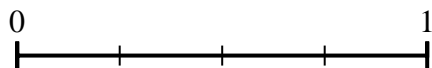
5) Using the number lines shown, what is the equivalent fraction to $\frac{2}{6}$?



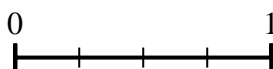
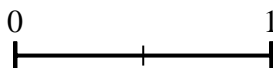
6) Using the number lines shown, what is the equivalent fraction to $\frac{1}{4}$?



7) Using the number lines shown, what is the equivalent fraction to $\frac{2}{4}$?



8) Using the number lines shown, what is the equivalent fraction to $\frac{2}{2}$?

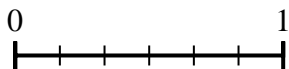
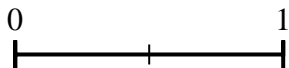


1. _____
2. _____
3. _____
4. _____
5. _____
6. _____
7. _____
8. _____

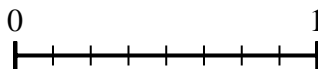
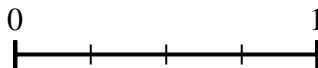


Use the number lines to answer the questions.

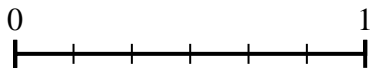
1) Using the number lines shown, what is the equivalent fraction to $\frac{2}{2}$?



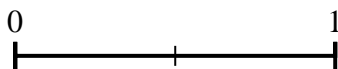
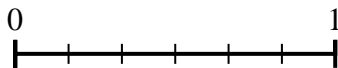
2) Using the number lines shown, what is the equivalent fraction to $\frac{3}{4}$?



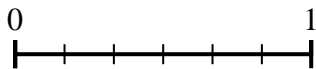
3) Using the number lines shown, what is the equivalent fraction to $\frac{6}{6}$?



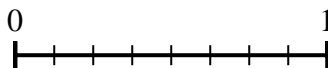
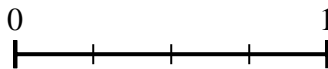
4) Using the number lines shown, what is the equivalent fraction to $\frac{0}{6}$?



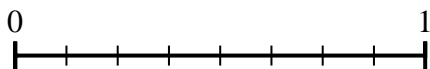
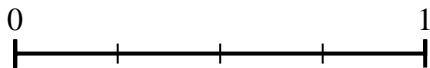
5) Using the number lines shown, what is the equivalent fraction to $\frac{2}{6}$?



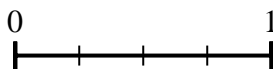
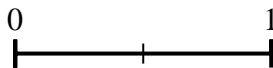
6) Using the number lines shown, what is the equivalent fraction to $\frac{1}{4}$?



7) Using the number lines shown, what is the equivalent fraction to $\frac{2}{4}$?



8) Using the number lines shown, what is the equivalent fraction to $\frac{2}{2}$?



Answers

1. $\frac{6}{6}$

2. $\frac{6}{8}$

3. $\frac{3}{3}$

4. $\frac{0}{2}$

5. $\frac{1}{3}$

6. $\frac{2}{8}$

7. $\frac{4}{8}$

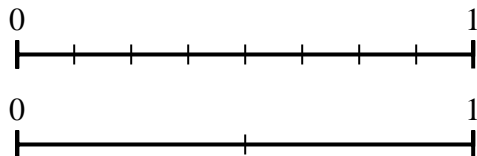
8. $\frac{4}{4}$



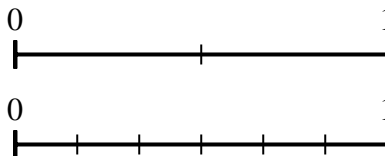
Use the number lines to answer the questions.

Answers

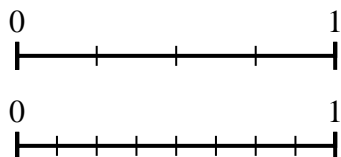
1) Using the number lines shown, what is the equivalent fraction to $\frac{8}{8}$?



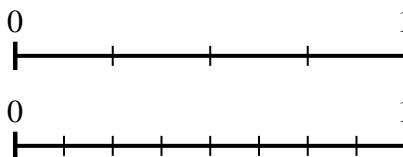
2) Using the number lines shown, what is the equivalent fraction to $\frac{2}{2}$?



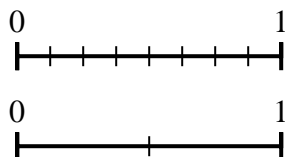
3) Using the number lines shown, what is the equivalent fraction to $\frac{2}{4}$?



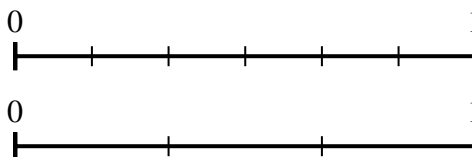
4) Using the number lines shown, what is the equivalent fraction to $\frac{4}{4}$?



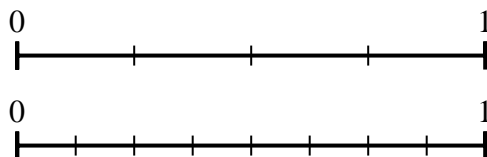
5) Using the number lines shown, what is the equivalent fraction to $\frac{4}{8}$?



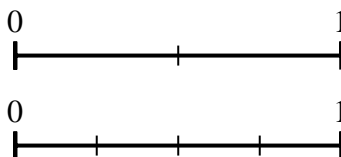
6) Using the number lines shown, what is the equivalent fraction to $\frac{4}{6}$?



7) Using the number lines shown, what is the equivalent fraction to $\frac{3}{4}$?



8) Using the number lines shown, what is the equivalent fraction to $\frac{1}{2}$?

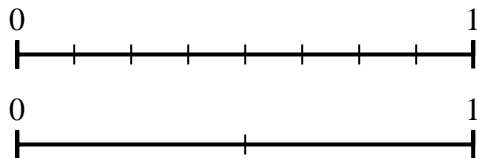


1. _____
2. _____
3. _____
4. _____
5. _____
6. _____
7. _____
8. _____

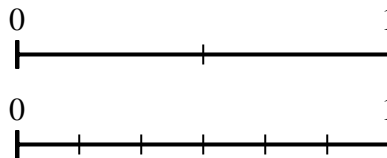


Use the number lines to answer the questions.

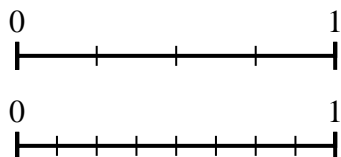
1) Using the number lines shown, what is the equivalent fraction to $\frac{8}{8}$?



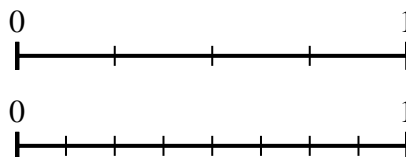
2) Using the number lines shown, what is the equivalent fraction to $\frac{2}{2}$?



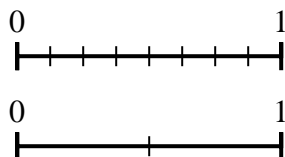
3) Using the number lines shown, what is the equivalent fraction to $\frac{2}{4}$?



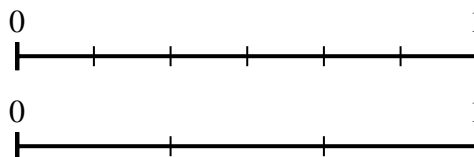
4) Using the number lines shown, what is the equivalent fraction to $\frac{4}{4}$?



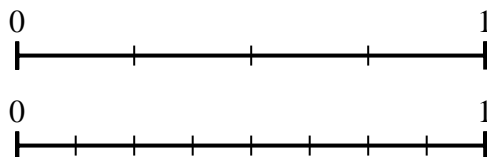
5) Using the number lines shown, what is the equivalent fraction to $\frac{4}{8}$?



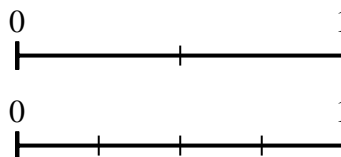
6) Using the number lines shown, what is the equivalent fraction to $\frac{4}{6}$?



7) Using the number lines shown, what is the equivalent fraction to $\frac{3}{4}$?



8) Using the number lines shown, what is the equivalent fraction to $\frac{1}{2}$?



Answers

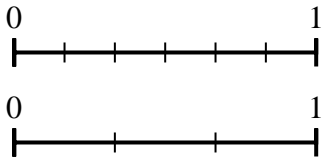
1. $\frac{2}{2}$
2. $\frac{6}{6}$
3. $\frac{4}{8}$
4. $\frac{8}{8}$
5. $\frac{1}{2}$
6. $\frac{2}{3}$
7. $\frac{6}{8}$
8. $\frac{2}{4}$



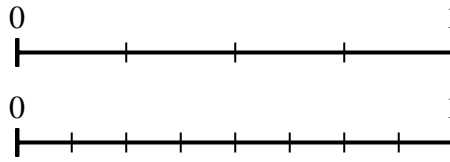
Use the number lines to answer the questions.

Answers

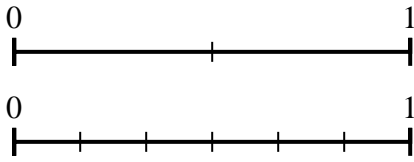
1) Using the number lines shown, what is the equivalent fraction to $\frac{6}{6}$?



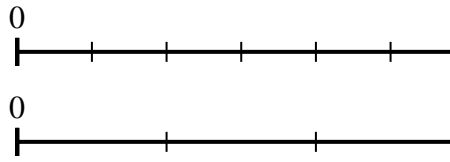
2) Using the number lines shown, what is the equivalent fraction to $\frac{1}{4}$?



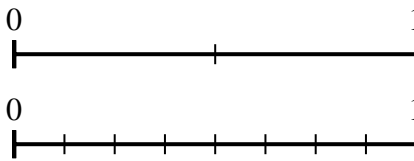
3) Using the number lines shown, what is the equivalent fraction to $\frac{0}{2}$?



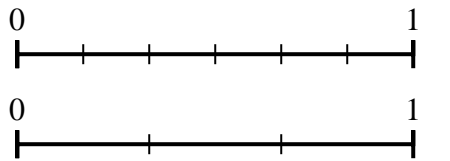
4) Using the number lines shown, what is the equivalent fraction to $\frac{2}{6}$?



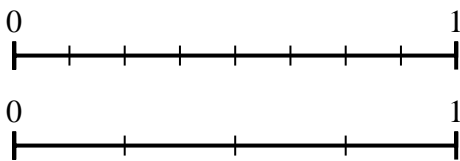
5) Using the number lines shown, what is the equivalent fraction to $\frac{2}{2}$?



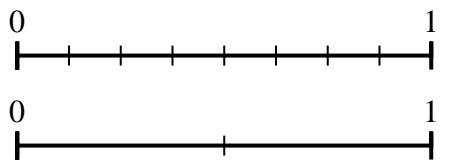
6) Using the number lines shown, what is the equivalent fraction to $\frac{4}{6}$?



7) Using the number lines shown, what is the equivalent fraction to $\frac{8}{8}$?



8) Using the number lines shown, what is the equivalent fraction to $\frac{4}{8}$?


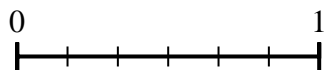


1. _____
2. _____
3. _____
4. _____
5. _____
6. _____
7. _____
8. _____

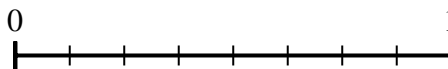
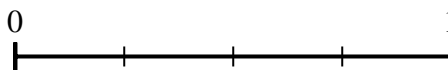


Use the number lines to answer the questions.

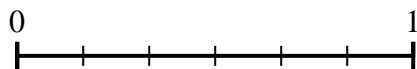
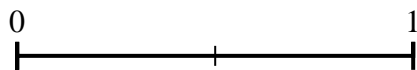
1) Using the number lines shown, what is the equivalent fraction to $\frac{6}{6}$?



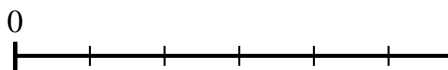
2) Using the number lines shown, what is the equivalent fraction to $\frac{1}{4}$?



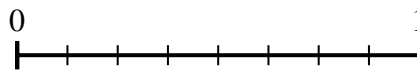
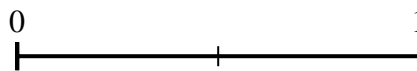
3) Using the number lines shown, what is the equivalent fraction to $\frac{0}{2}$?




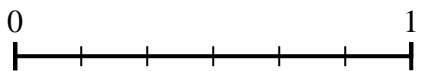
4) Using the number lines shown, what is the equivalent fraction to $\frac{2}{6}$?



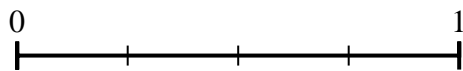
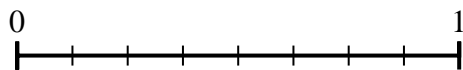
5) Using the number lines shown, what is the equivalent fraction to $\frac{2}{2}$?



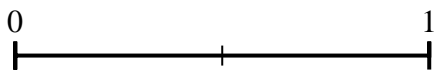
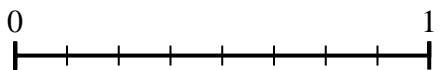
6) Using the number lines shown, what is the equivalent fraction to $\frac{4}{6}$?



7) Using the number lines shown, what is the equivalent fraction to $\frac{8}{8}$?



8) Using the number lines shown, what is the equivalent fraction to $\frac{4}{8}$?



Answers

1. $\frac{3}{3}$

2. $\frac{2}{8}$

3. $\frac{0}{6}$

4. $\frac{1}{3}$

5. $\frac{8}{8}$

6. $\frac{2}{3}$

7. $\frac{4}{4}$

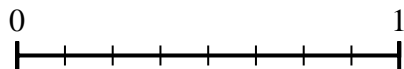
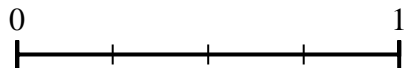
8. $\frac{1}{2}$



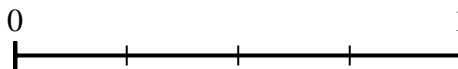
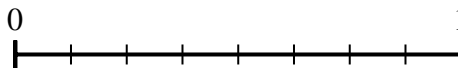
Use the number lines to answer the questions.

Answers

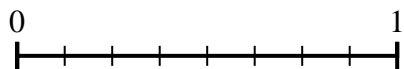
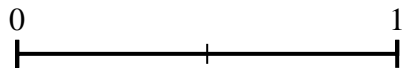
1) Using the number lines shown, what is the equivalent fraction to $\frac{4}{4}$?



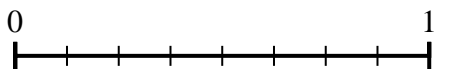
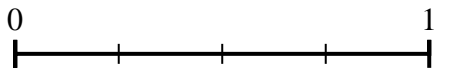
2) Using the number lines shown, what is the equivalent fraction to $\frac{4}{8}$?



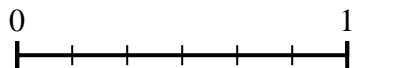
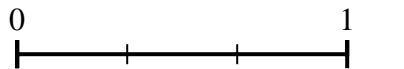
3) Using the number lines shown, what is the equivalent fraction to $\frac{2}{2}$?



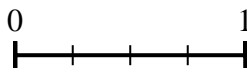
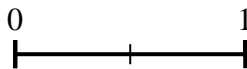
4) Using the number lines shown, what is the equivalent fraction to $\frac{1}{4}$?




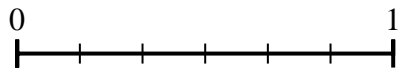
5) Using the number lines shown, what is the equivalent fraction to $\frac{3}{3}$?




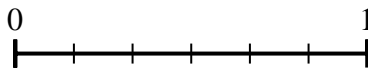
6) Using the number lines shown, what is the equivalent fraction to $\frac{1}{2}$?



7) Using the number lines shown, what is the equivalent fraction to $\frac{2}{6}$?



8) Using the number lines shown, what is the equivalent fraction to $\frac{4}{6}$?

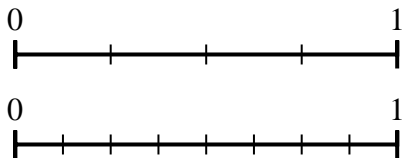


1. _____
2. _____
3. _____
4. _____
5. _____
6. _____
7. _____
8. _____

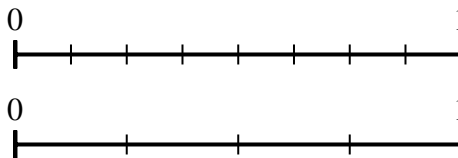


Use the number lines to answer the questions.

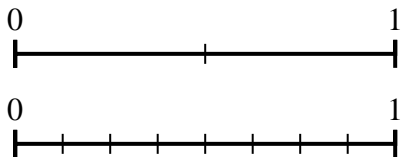
1) Using the number lines shown, what is the equivalent fraction to $\frac{4}{4}$?



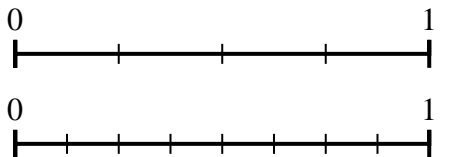
2) Using the number lines shown, what is the equivalent fraction to $\frac{4}{8}$?



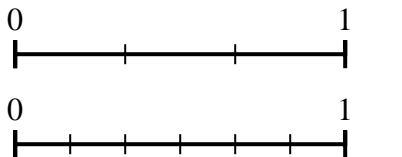
3) Using the number lines shown, what is the equivalent fraction to $\frac{2}{2}$?



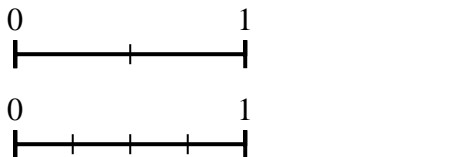
4) Using the number lines shown, what is the equivalent fraction to $\frac{1}{4}$?



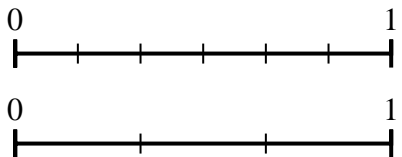
5) Using the number lines shown, what is the equivalent fraction to $\frac{3}{3}$?



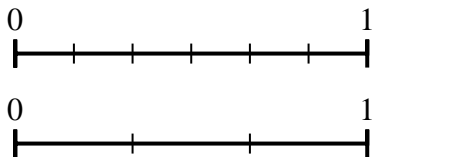
6) Using the number lines shown, what is the equivalent fraction to $\frac{1}{2}$?



7) Using the number lines shown, what is the equivalent fraction to $\frac{2}{6}$?



8) Using the number lines shown, what is the equivalent fraction to $\frac{4}{6}$?



Answers

1. $\frac{8}{8}$
2. $\frac{2}{4}$
3. $\frac{8}{8}$
4. $\frac{2}{8}$
5. $\frac{6}{6}$
6. $\frac{2}{4}$
7. $\frac{1}{3}$
8. $\frac{2}{3}$