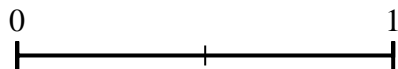
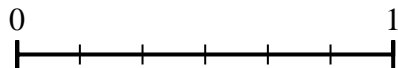




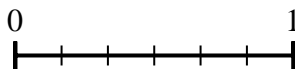

Use the number lines to answer the questions.

Answers

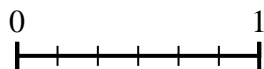
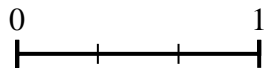
1) Using the number lines shown, what is the equivalent fraction to $\frac{6}{6}$?



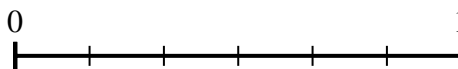
2) Using the number lines shown, what is the equivalent fraction to $\frac{2}{3}$?



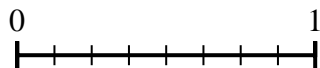
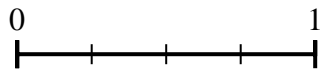
3) Using the number lines shown, what is the equivalent fraction to $\frac{3}{3}$?



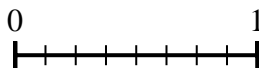
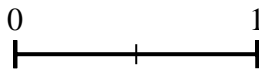
4) Using the number lines shown, what is the equivalent fraction to $\frac{1}{3}$?



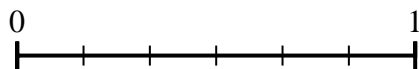
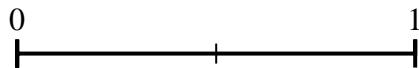
5) Using the number lines shown, what is the equivalent fraction to $\frac{2}{4}$?



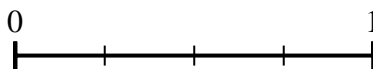
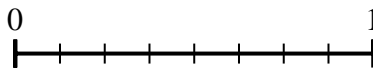
6) Using the number lines shown, what is the equivalent fraction to $\frac{1}{2}$?



7) Using the number lines shown, what is the equivalent fraction to $\frac{1}{2}$?



8) Using the number lines shown, what is the equivalent fraction to $\frac{8}{8}$?

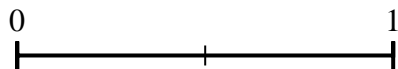
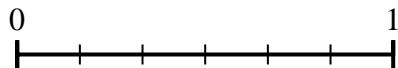


1. _____
2. _____
3. _____
4. _____
5. _____
6. _____
7. _____
8. _____

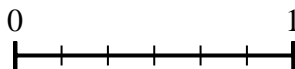



Use the number lines to answer the questions.

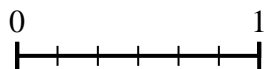
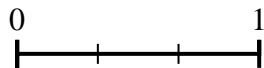
1) Using the number lines shown, what is the equivalent fraction to $\frac{6}{6}$?



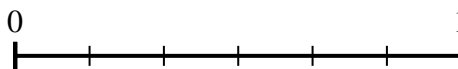

2) Using the number lines shown, what is the equivalent fraction to $\frac{2}{3}$?



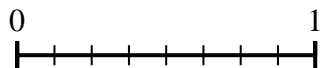
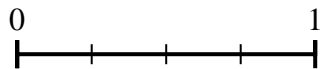
3) Using the number lines shown, what is the equivalent fraction to $\frac{3}{3}$?



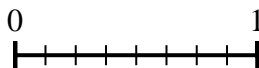
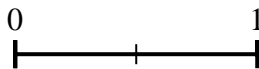
4) Using the number lines shown, what is the equivalent fraction to $\frac{1}{3}$?



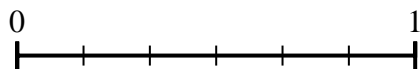
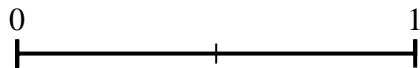
5) Using the number lines shown, what is the equivalent fraction to $\frac{2}{4}$?



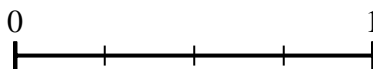
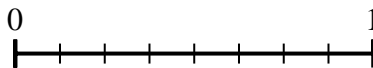
6) Using the number lines shown, what is the equivalent fraction to $\frac{1}{2}$?



7) Using the number lines shown, what is the equivalent fraction to $\frac{1}{2}$?



8) Using the number lines shown, what is the equivalent fraction to $\frac{8}{8}$?



Answers

1. $\frac{2}{2}$

2. $\frac{4}{6}$

3. $\frac{6}{6}$

4. $\frac{2}{6}$

5. $\frac{4}{8}$

6. $\frac{4}{8}$

7. $\frac{3}{6}$

8. $\frac{4}{4}$