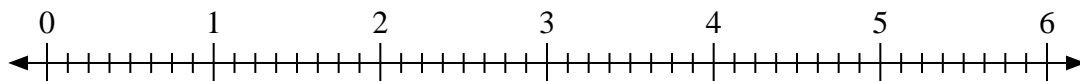





Use the numberline to solve.

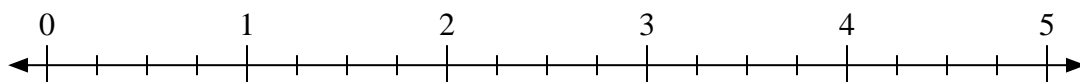
1) $3 \div \frac{2}{8}$



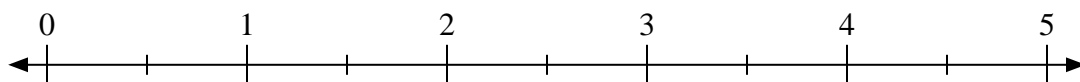
2) $2 \div \frac{1}{3}$



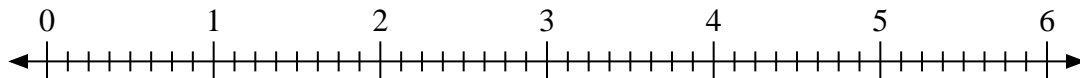
3) $3 \div \frac{3}{4}$



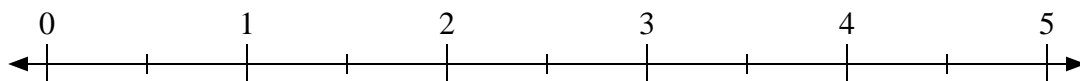
4) $5 \div \frac{1}{2}$



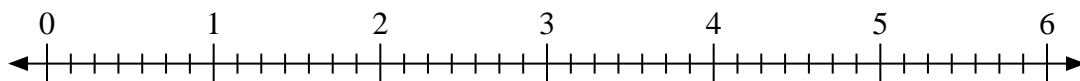
5) $5 \div \frac{2}{8}$



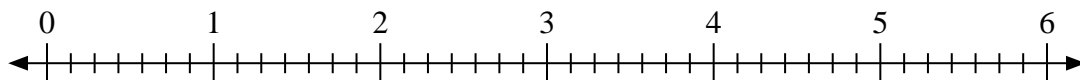
6) $4 \div \frac{1}{2}$



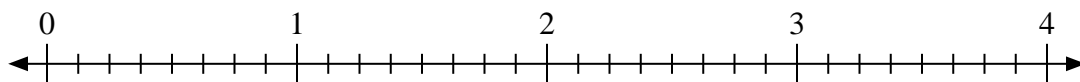
7) $2 \div \frac{1}{7}$



8) $2 \div \frac{6}{7}$



9) $2 \div \frac{4}{8}$



Answers

1. _____

2. _____

3. _____

4. _____

5. _____

6. _____

7. _____

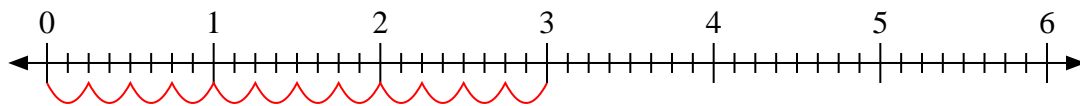
8. _____

9. _____

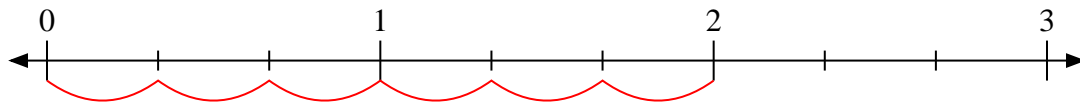


Use the numberline to solve.

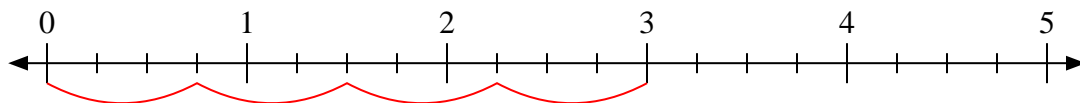
1) $3 \div \frac{2}{8}$



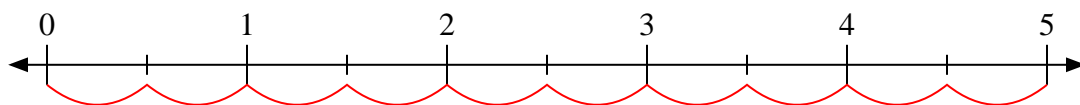
2) $2 \div \frac{1}{3}$



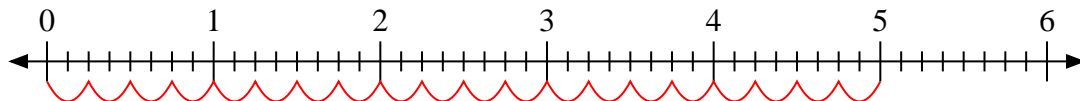
3) $3 \div \frac{3}{4}$



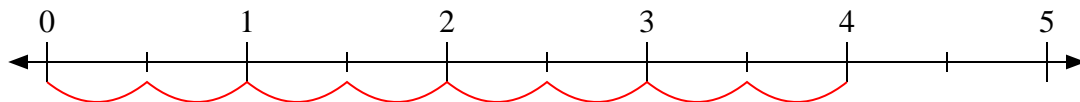
4) $5 \div \frac{1}{2}$



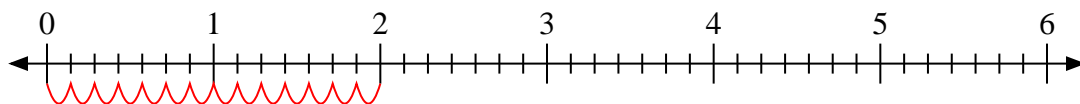
5) $5 \div \frac{2}{8}$



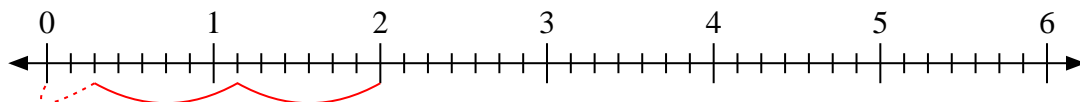
6) $4 \div \frac{1}{2}$



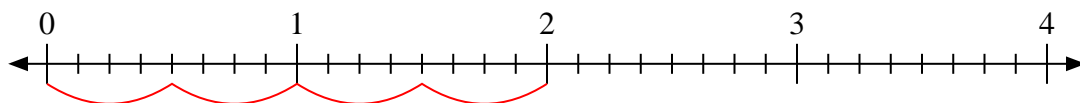
7) $2 \div \frac{1}{7}$



8) $2 \div \frac{6}{7}$



9) $2 \div \frac{4}{8}$



Answers

1. 12

2. 6

3. 4

4. 10

5. 20

6. 8

7. 14

8. $2 \frac{2}{6}$

9. 4