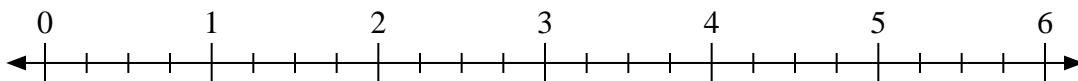


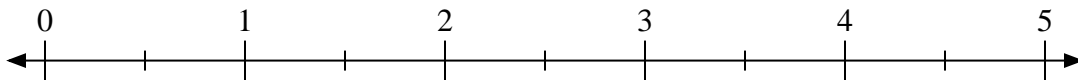


Use the numberline to solve.

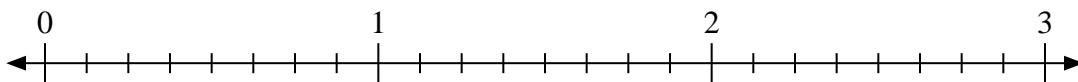
1) $6 \div \frac{3}{4}$



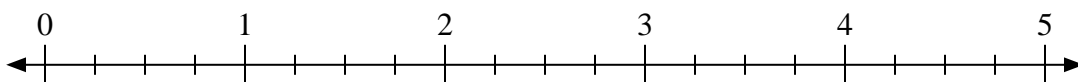
2) $5 \div \frac{1}{2}$



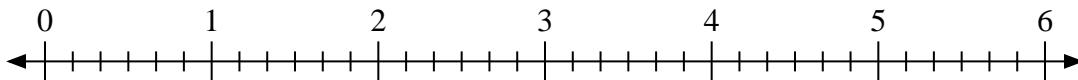
3) $3 \div \frac{6}{8}$



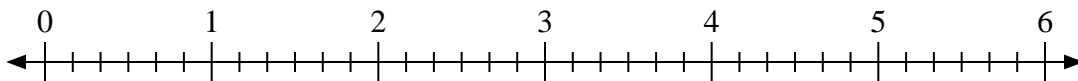
4) $3 \div \frac{3}{4}$



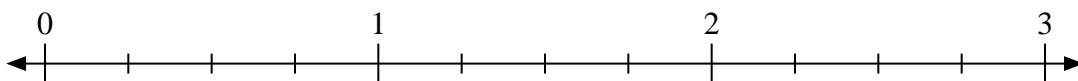
5) $6 \div \frac{3}{6}$




6) $5 \div \frac{1}{6}$



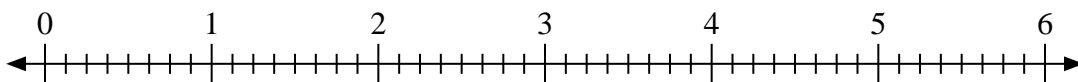
7) $3 \div \frac{1}{4}$



8) $3 \div \frac{2}{3}$



9) $3 \div \frac{3}{8}$

**Answers**

1. _____

2. _____

3. _____

4. _____

5. _____

6. _____

7. _____

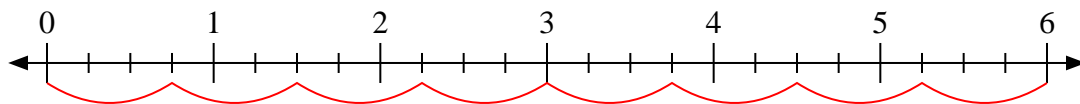
8. _____

9. _____

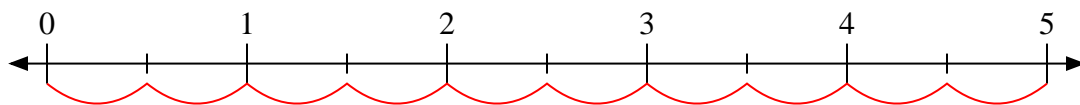


Use the numberline to solve.

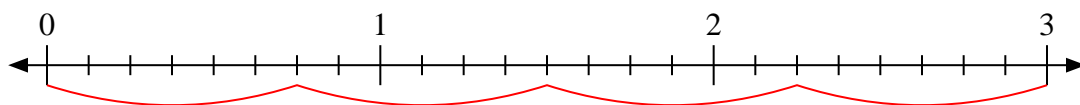
1) $6 \div \frac{3}{4}$



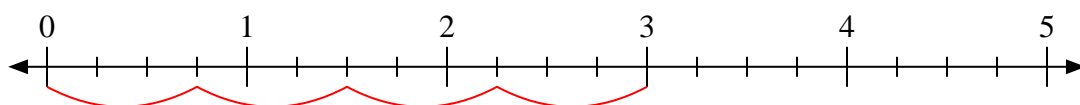
2) $5 \div \frac{1}{2}$



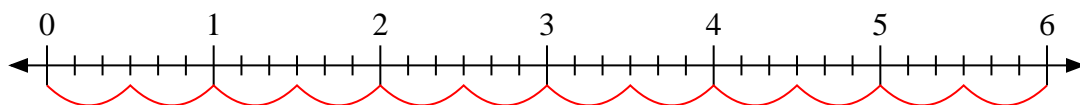
3) $3 \div \frac{6}{8}$



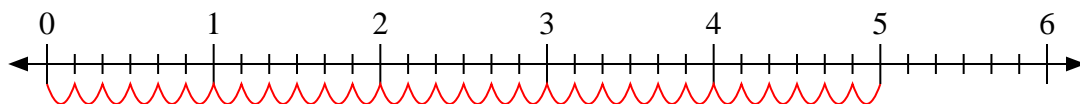
4) $3 \div \frac{3}{4}$



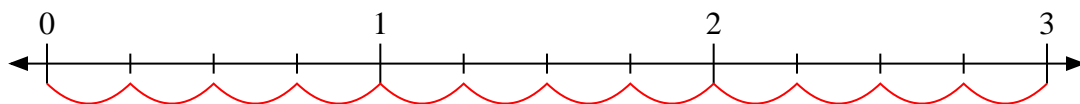
5) $6 \div \frac{3}{6}$



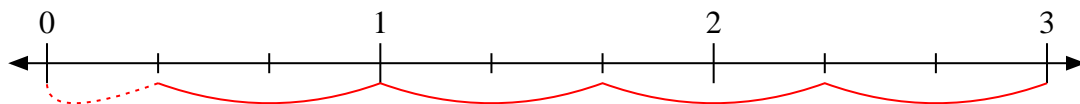
6) $5 \div \frac{1}{6}$



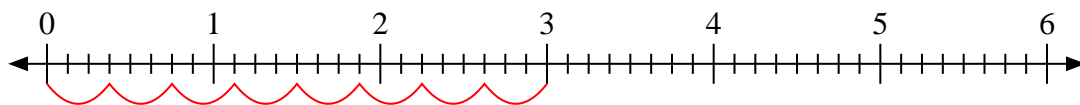
7) $3 \div \frac{1}{4}$



8) $3 \div \frac{2}{3}$



9) $3 \div \frac{3}{8}$



Answers

1. 8

2. 10

3. 4

4. 4

5. 12

6. 30

7. 12

8. $4 \frac{1}{2}$

9. 8