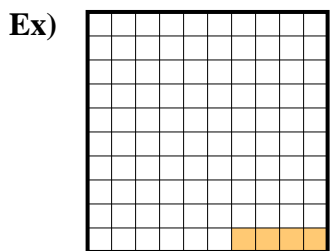


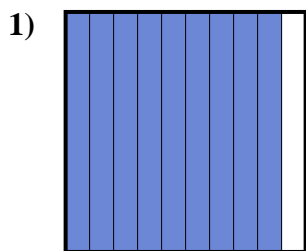




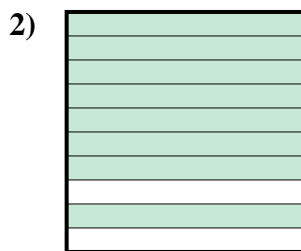
Determine the value written as a fraction , decimal & a percent.




fraction  $\frac{4}{100}$   
 decimal  $0.04$   
 percent  $4$



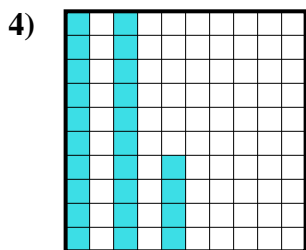
fraction  $\frac{9}{10}$   
 decimal  $0.9$   
 percent  $90$



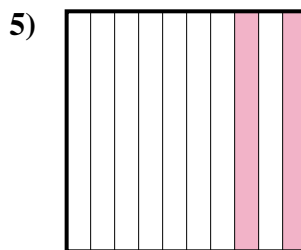
fraction  $\frac{8}{10}$   
 decimal  $0.8$   
 percent  $80$



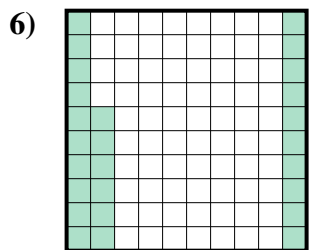
fraction  $\frac{3}{10}$   
 decimal  $0.3$   
 percent  $30$



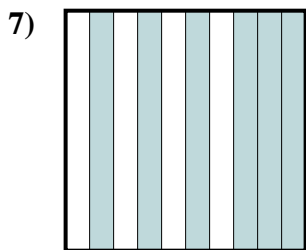
fraction  $\frac{24}{100}$   
 decimal  $0.24$   
 percent  $24$



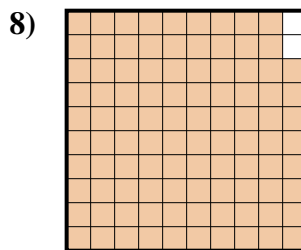
fraction  $\frac{2}{10}$   
 decimal  $0.2$   
 percent  $20$



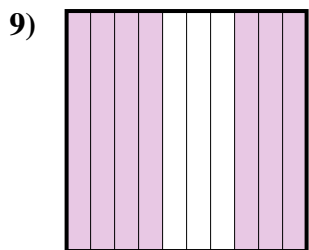
fraction  $\frac{26}{100}$   
 decimal  $0.26$   
 percent  $26$



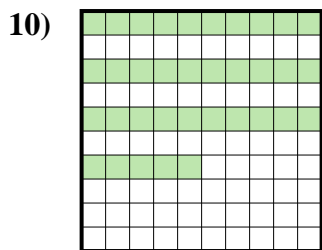
fraction  $\frac{6}{10}$   
 decimal  $0.6$   
 percent  $60$



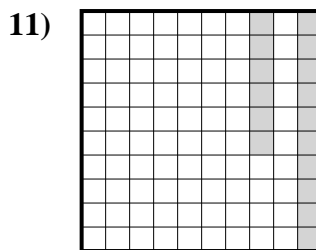
fraction  $\frac{98}{100}$   
 decimal  $0.98$   
 percent  $98$



fraction  $\frac{7}{10}$   
 decimal  $0.7$   
 percent  $70$



fraction  $\frac{35}{100}$   
 decimal  $0.35$   
 percent  $35$



fraction  $\frac{16}{100}$   
 decimal  $0.16$   
 percent  $16$

**Answers**

- Ex.  $\frac{4}{100}$  **0.04** **4%**  
 1.  $\frac{9}{10}$  **0.9** **90%**  
 2.  $\frac{8}{10}$  **0.8** **80%**  
 3.  $\frac{3}{10}$  **0.3** **30%**  
 4.  $\frac{24}{100}$  **0.24** **24%**  
 5.  $\frac{2}{10}$  **0.2** **20%**  
 6.  $\frac{26}{100}$  **0.26** **26%**  
 7.  $\frac{6}{10}$  **0.6** **60%**  
 8.  $\frac{98}{100}$  **0.98** **98%**  
 9.  $\frac{7}{10}$  **0.7** **70%**  
 10.  $\frac{35}{100}$  **0.35** **35%**  
 11.  $\frac{16}{100}$  **0.16** **16%**