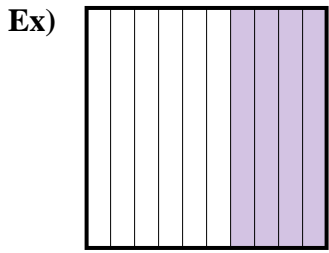


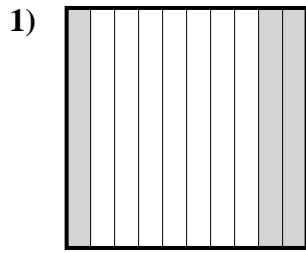


Determine the value written as a fraction , decimal & a percent.

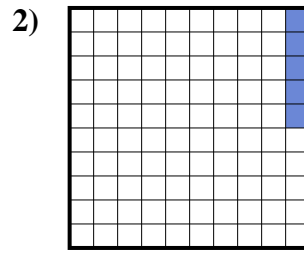
Answers



fraction $\frac{4}{10}$
 decimal 0.4
 percent 40



fraction _____
 decimal _____
 percent _____



fraction _____
 decimal _____
 percent _____

Ex. $\frac{4}{10}$ 0.4 40%

1. _____

2. _____

3. _____

4. _____

5. _____

6. _____

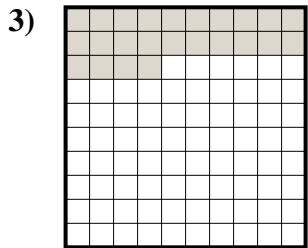
7. _____

8. _____

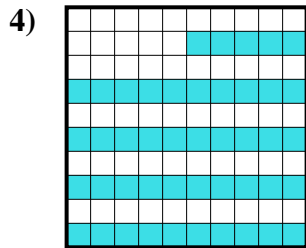
9. _____

10. _____

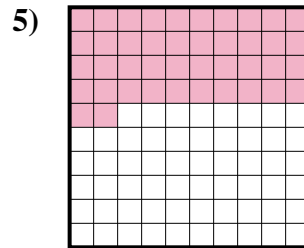
11. _____



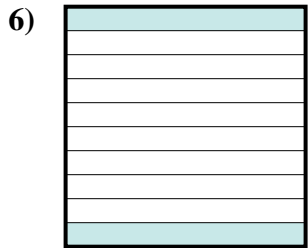
fraction _____
 decimal _____
 percent _____




fraction _____
 decimal _____
 percent _____



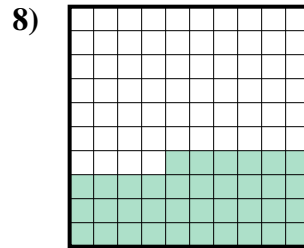
fraction _____
 decimal _____
 percent _____



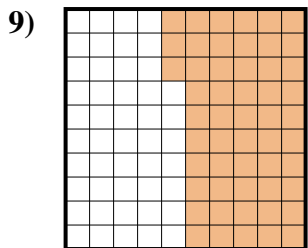
fraction _____
 decimal _____
 percent _____



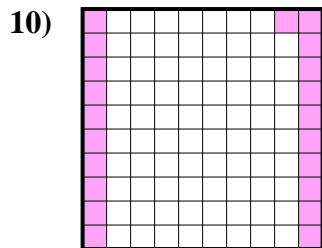
fraction _____
 decimal _____
 percent _____



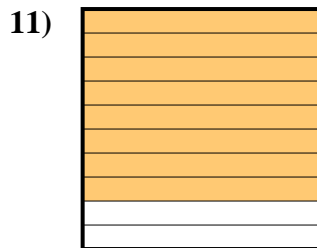
fraction _____
 decimal _____
 percent _____



fraction _____
 decimal _____
 percent _____



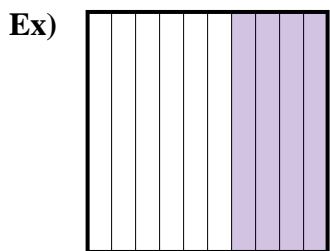
fraction _____
 decimal _____
 percent _____



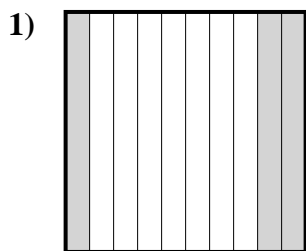
fraction _____
 decimal _____
 percent _____



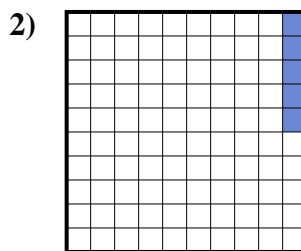
Determine the value written as a fraction , decimal & a percent.



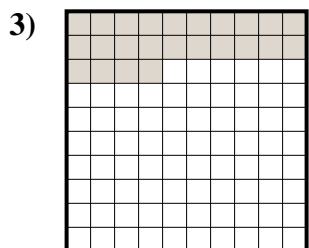
fraction $\frac{4}{10}$
 decimal 0.4
 percent 40



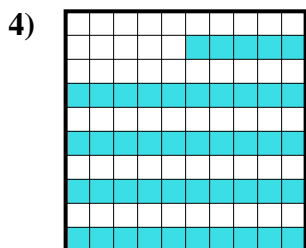
fraction $\frac{3}{10}$
 decimal 0.3
 percent 30



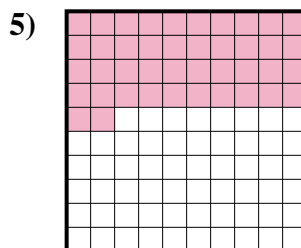
fraction $\frac{5}{100}$
 decimal 0.05
 percent 5



fraction $\frac{24}{100}$
 decimal 0.24
 percent 24




fraction $\frac{45}{100}$
 decimal 0.45
 percent 45



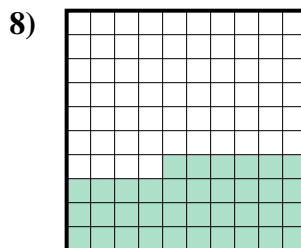
fraction $\frac{42}{100}$
 decimal 0.42
 percent 42



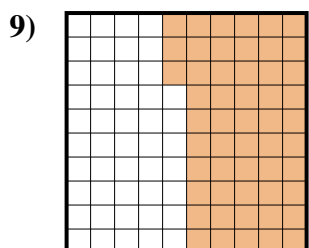
fraction $\frac{2}{10}$
 decimal 0.2
 percent 20



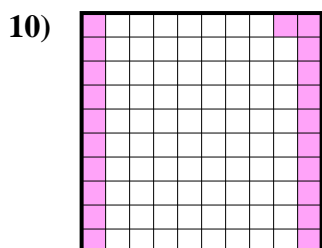
fraction $\frac{1}{10}$
 decimal 0.1
 percent 10



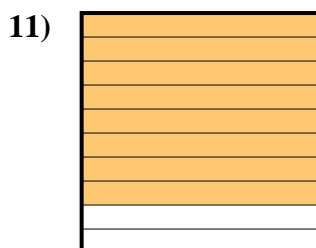
fraction $\frac{36}{100}$
 decimal 0.36
 percent 36



fraction $\frac{53}{100}$
 decimal 0.53
 percent 53



fraction $\frac{21}{100}$
 decimal 0.21
 percent 21



fraction $\frac{8}{10}$
 decimal 0.8
 percent 80

Answers

Ex.	$\frac{4}{10}$	0.4	40%
1.	$\frac{3}{10}$	0.3	30%
2.	$\frac{5}{100}$	0.05	5%
3.	$\frac{24}{100}$	0.24	24%
4.	$\frac{45}{100}$	0.45	45%
5.	$\frac{42}{100}$	0.42	42%
6.	$\frac{2}{10}$	0.2	20%
7.	$\frac{1}{10}$	0.1	10%
8.	$\frac{36}{100}$	0.36	36%
9.	$\frac{53}{100}$	0.53	53%
10.	$\frac{21}{100}$	0.21	21%
11.	$\frac{8}{10}$	0.8	80%